



# How Many Sides?


Count the sides of each shape & write the number.

Square




-

Triangle




-

Circle



-

Hexagon



-

Rectangle



-

