

Year 3 Maths Activity Mat

Section 1

Order these fractions from smallest to largest:

$$\frac{4}{4} \quad \frac{2}{4} \quad \frac{3}{4} \quad \frac{1}{4}$$

--	--	--	--

Order these numbers from largest to smallest:

230 521 495 420

--	--	--	--

Section 2

Draw a pair of parallel lines:

What is $\frac{1}{2}$ of 220?

--

Section 3

How many right angles does a square have?

--

Write two more facts about squares:

Section 4


Cassie has 24 flowers and 4 vases.

If she shares them equally, how many flowers will be in each vase?

--

Section 5

How many minutes are there in 1 and a half hours?



--

Section 6

6 eggs fill one box.

If I have 24 eggs, how many boxes will I need?



--


Section 7

An entrance ticket for a theme park costs £20 and I can go on as many rides as I like.

Or each ride costs £3. If I want to go on 4 rides, is it cheaper to pay for each ride or buy the entrance ticket?

Section 8

How many faces does this 3D shape have?



--



Section 1

Order these fractions from smallest to largest:

$$\frac{4}{4} \quad \frac{2}{4} \quad \frac{3}{4} \quad \frac{1}{4}$$

$\frac{1}{4}$	$\frac{2}{4}$	$\frac{3}{4}$	$\frac{4}{4}$
---------------	---------------	---------------	---------------

Order these numbers from largest to smallest:

230 521 495 420

521	495	420	230
-----	-----	-----	-----

Section 2

Draw a pair of parallel lines:



What is $\frac{1}{2}$ of 220?

110

Section 3

How many right angles does a square have?

4

Write two more facts about squares:

Accept any reasonable answer.

Section 4


Cassie has 24 flowers and 4 vases.

If she shares them equally, how many flowers will be in each vase?

6

Section 5

How many minutes are there in 1 and a half hours?



90 minutes

Section 6

6 eggs fill one box.

If I have 24 eggs, how many boxes will I need?



4

Section 7


An entrance ticket for a theme park costs £20 and I can go on as many rides as I like.

Or each ride costs £3. If I want to go on 4 rides, is it cheaper to pay for each ride or buy the entrance ticket?

Pay for rides.

Section 8

How many faces does this 3D shape have?



6