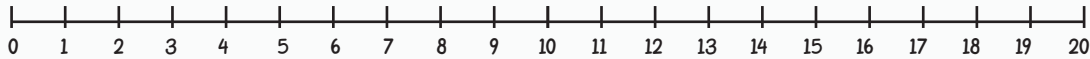




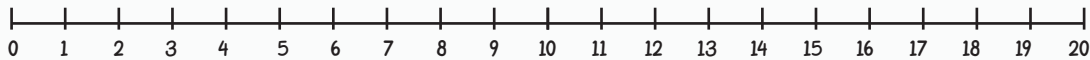
NUMBER LINE ADDITION



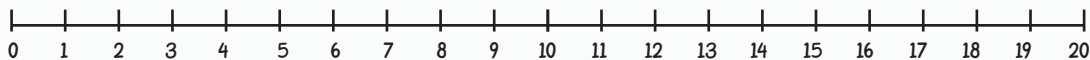
Finish the number sentences. Use the number lines to help you.



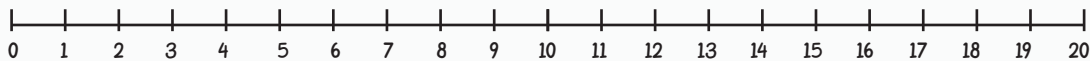
$$8 + 8 = \square$$



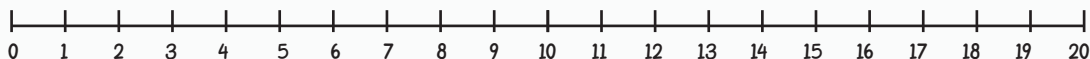
$$15 + 2 = \square$$



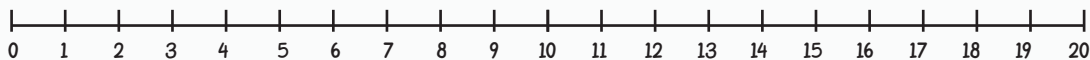
$$13 + 6 = \square$$



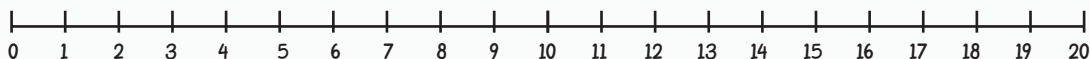
$$6 + 10 = \square$$



$$4 + 8 = \square$$



$$4 + 16 = \square$$



$$17 + 2 = \square$$