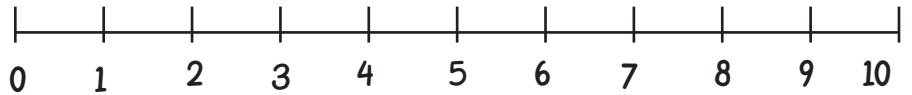


NUMBER LINE ADDITION

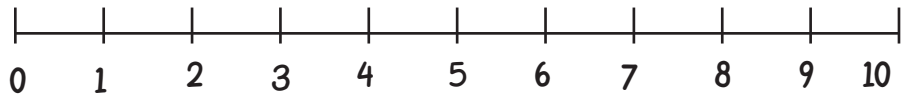


Finish the number sentences. Use the number lines to help you.

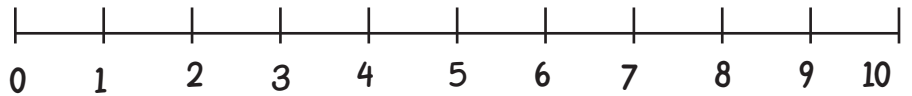
$2 + 7 = \square$



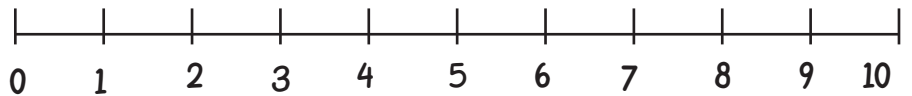
$4 + 3 = \square$



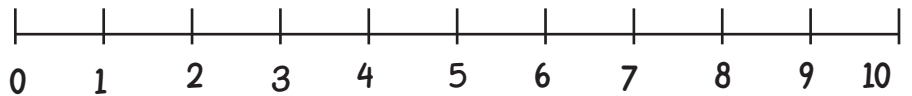
$5 + 4 = \square$



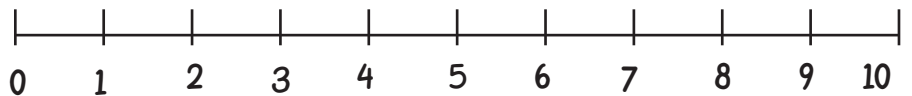
$4 + 6 = \square$



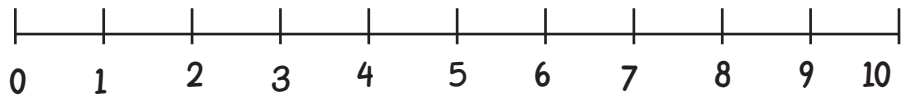
$5 + 2 = \square$



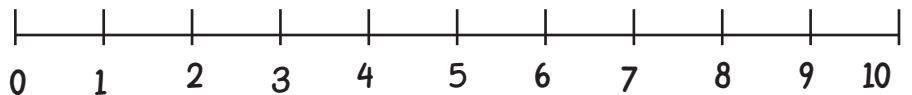
$3 + 6 = \square$



$2 + 4 = \square$



$3 + 5 = \square$



$7 + 3 = \square$

