



# Guía de ejercicios Matemática



## Comparación de cantidades hasta 20

Nombre: \_\_\_\_\_ Curso: \_\_\_\_\_ Fecha: \_\_\_\_\_



Encierra en un círculo el número menor. Escribe los números.





\_\_\_\_ es menor que \_\_\_\_  
\_\_\_\_ < \_\_\_\_





\_\_\_\_ es menor que \_\_\_\_  
\_\_\_\_ < \_\_\_\_





\_\_\_\_ es menor que \_\_\_\_  
\_\_\_\_ < \_\_\_\_



\_\_\_\_ es menor que \_\_\_\_  
\_\_\_\_ < \_\_\_\_



\_\_\_\_ es menor que \_\_\_\_  
\_\_\_\_ < \_\_\_\_



\_\_\_\_ es menor que \_\_\_\_  
\_\_\_\_ < \_\_\_\_