



# Cheetah Math



My Full Name: \_\_\_\_\_  
First Last



Teacher: \_\_\_\_\_

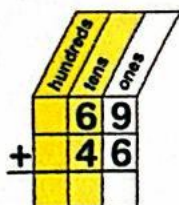
Someone may read the problem to you and demonstrate a **SIMILAR** problem, but you should work the problems yourself.  
**SCORING:** 40 paw points total. 2 points per question, BUT 2 points taken for missing full name and teacher! Every problem varies, so read each carefully!

Worksheets are to be turned into the Cheetah Math box anytime this month before 8:30am on the due date listed.

1

$$\begin{array}{r} 69 \\ + 46 \\ \hline \end{array}$$


- A 105  
B 115  
C 100  
D 112



2

$$\begin{array}{r} 74 \\ + 85 \\ \hline \end{array}$$

- A 159  
B 150  
C 161  
D 149



3

$$375 + 278 = 543$$

True or false?

- A true  
B false



4

Find the sum of 467 and 548.

- A 905  
B 1,005  
C 1,015  
D 915

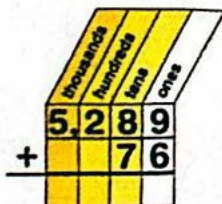


5

The sum of 5,289 and 76 is 5,365.

True or false?

- A true  
B false



6

$$5,038 + 2,847 = \boxed{\phantom{0000}}$$

- A 7,875  
B 7,700  
C 7,880  
D 7,885




7

The sum of 451 and 93 is 1,381.

- A true  
B false

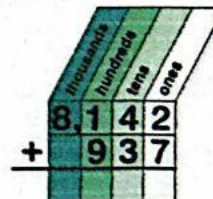
True or false?



8

Find the sum of 8,142 and 937.

- A 8,079  
B 9,079  
C 9,179  
D 8,179



9

$$724 + 165 = \boxed{\phantom{000}}$$

- A 878  
B 988  
C 889  
D 879



10

$$449 + 246 = 695$$

True or false?

- A true  
B false



# 4th Grade



# Greater Than/Less Than

Math

1 456 is \_\_\_\_\_ than 546.

- A greater  
B less



2 Find the answer that makes this number sentence true.



- A 391  
B 419  
C 309  
D 321

3  $23 + 12$  ○  $32 + 8$



- A > (greater than)  
B < (less than)  
C = (equal to)

4  $33 + 11 < 22 + 23$



- A true  
B false

5 786 is \_\_\_\_\_ than 867.

- A greater  
B less



6 Fill in the blank to make this number sentence true.  
 $45 + \square > 40 + 10$

- A 3  
B 4  
C 6  
D 5




7  $12 - 5$  ○  $16 - 8$

- A greater than  
B less than  
C equal to

8 Tara had 14 paper clips. Mary gave Tara 13 more paper clips. Scott had 32 paper clips. Who had the greater amount of paper clips?

- A Tara  
B Mary  
C Scott  
D They all had the same amount.



9 724 is \_\_\_\_\_ than 742.

- A greater  
B less



10 Fill in the blank to make this number sentence true.

$$20 - \square > 28 - 10$$

- A   
B   
C   
D

4th  
Grade