



Cheetah Math

Parents: You may read the problem to your child and demonstrate a similar problem, but he/she should work the problem on their own. Please encourage independent thinking and problem solving.

Scoring: 40 paw prints total. Two for Full Name, Two for Teacher's Last Name and 36 for problems. Paw values are printed before each problem. Every problem varies, so read each carefully! Worksheets are to be turned into the Cheetah Math box anytime this month before 3p on the due date listed.

Skills: Following directions, coloring, counting, introduction to basic shapes



Due by 09/30/2025



2 paws for full name

Name:

First and Last



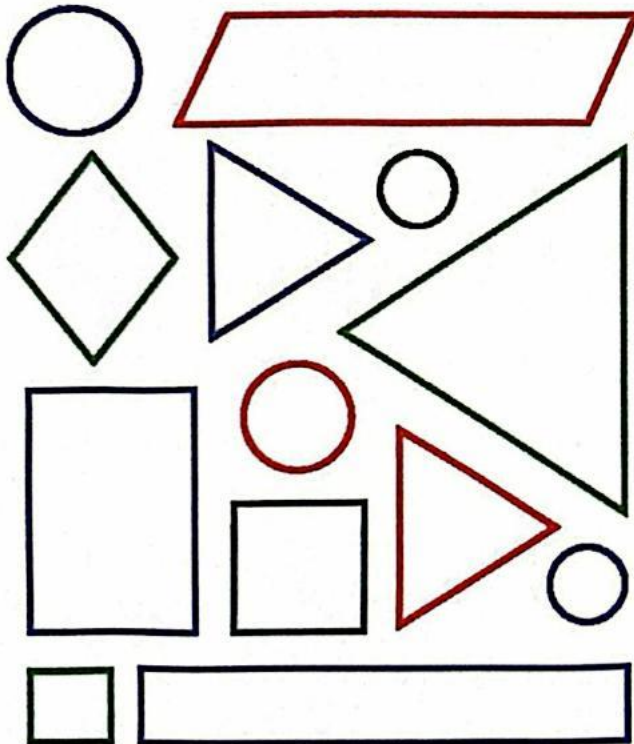
2 paws for teacher name

Teacher

Name:



1 paw for each correct answer



Problem #1

- Color the circles blue.
- Color the triangles yellow.
- How many triangles are there?

- How many circles are there?

- How many shapes are there?



1 paw for each correct answer

Problem #2

- Fill in the missing numbers on the trains.



Kindergarten




1 paw for each correct answer

Problem #3

- Color the hats blue.
- How many kittens are there?

- How many flowers are there?

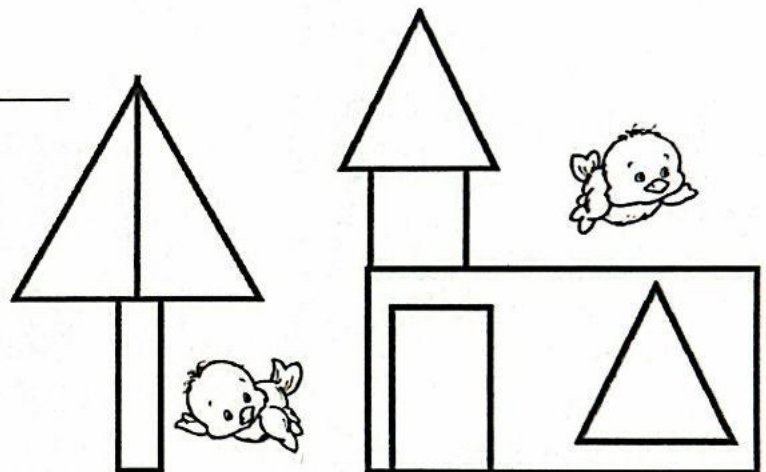


1 paw for each correct answer

Problem #4

How many birds are there? _____

Color the triangles red.

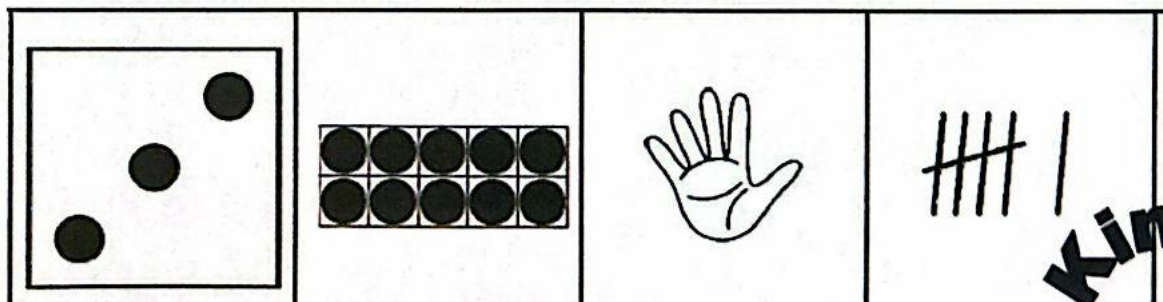


1 paw for each correct answer

Problem

Draw a line to match the number to the picture below.

6 5 10 3



Kindergarten



Problem #6

- Fill in the missing numbers.

2 paws for each
correct answer

1, ____, 3

5, ____, 7

2, ____, 4

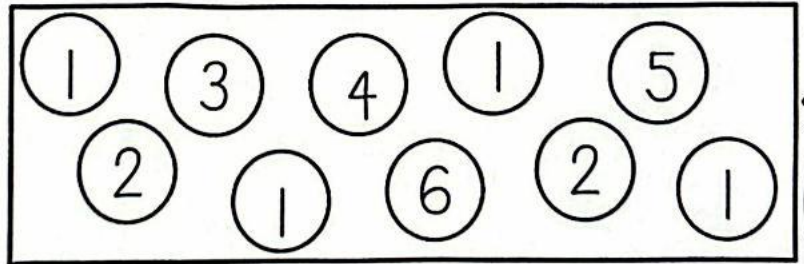


2 paws for each
correct answer

Problem #7

Color the 1's blue.

- How many circles are there? _____
- Color the 2's red.
- Color the 4 and 5 yellow.



2 paws for each
correct answer

Problem #8

How many monsters are in the

front car? _____

Color 3 monsters.

How many monsters are in the

back car? _____

