

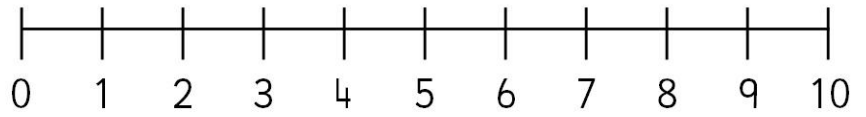


Dealú

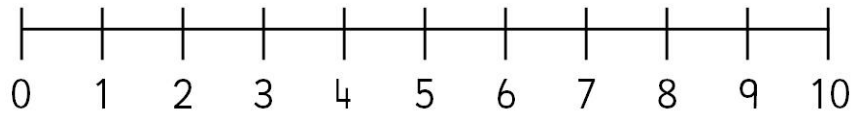


Úsáid an uimhirlíne le cuidiú leat.

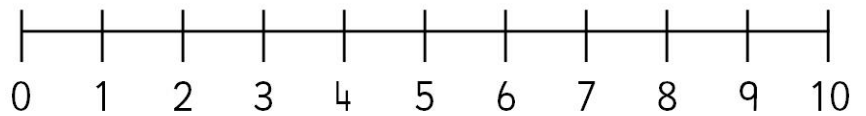
$5 - 3 = \square$



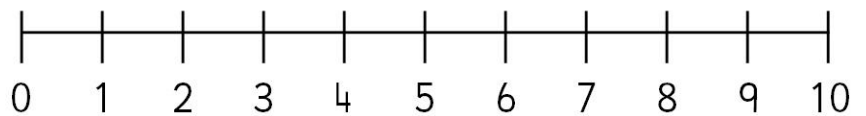
$7 - 2 = \square$



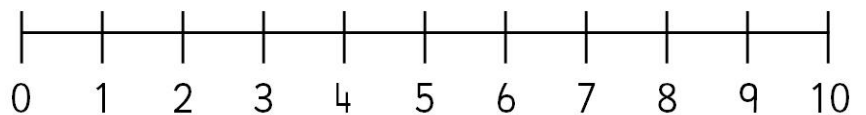
$8 - 5 = \square$



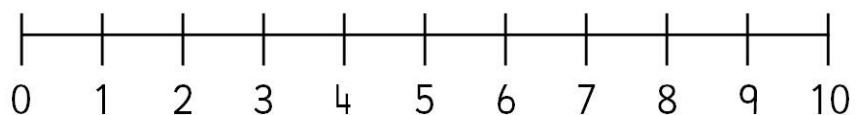
$4 - 1 = \square$



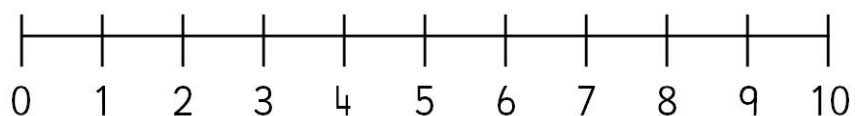
$10 - 5 = \square$



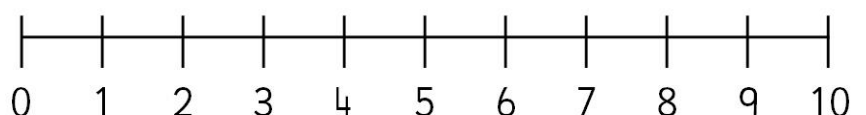
$3 - 1 = \square$



$6 - 4 = \square$



$8 - 6 = \square$



$9 - 3 = \square$

