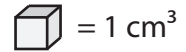



Counting Cubes

Count the cubes and find the volume of each rectangular prism.

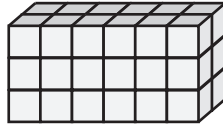


1)




Volume = _____

2)




Volume = _____

3)



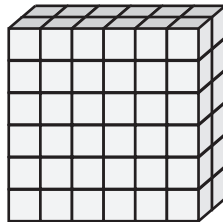
Volume = _____

4)



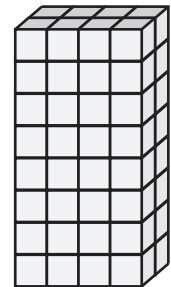
Volume = _____

5)



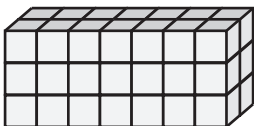
Volume = _____

6)




Volume = _____

7)



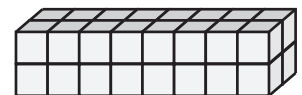
Volume = _____

8)



Volume = _____


9)




Volume = _____

Answer Key

Count the cubes and find the volume of each rectangular prism.

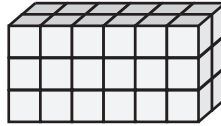
 = 1 cm³

1)




Volume = 40 cm³

2)




Volume = 36 cm³

3)



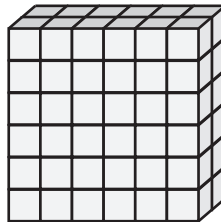
Volume = 50 cm³

4)



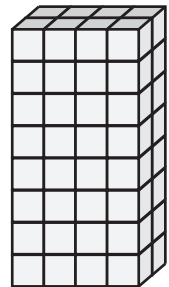
Volume = 80 cm³

5)



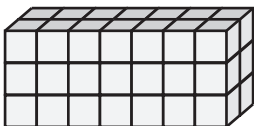
Volume = 72 cm³

6)




Volume = 64 cm³

7)



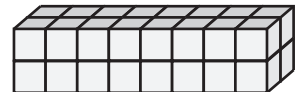
Volume = 42 cm³

8)



Volume = 54 cm³

9)



Volume = 32 cm³