

1

This table shows the areas of New Zealand and Cyprus.

Country	Area (square kilometres)
New Zealand	270,000
Cyprus	10,000

The area of New Zealand is greater than the area of Cyprus.

How many times larger is New Zealand?

times larger

1 mark

2

$$841 + 375$$

By rounding each number to the **nearest 100**, **estimate** the answer to $841 + 375$

2 marks

3

$$8,723 + 6,472$$

By rounding each number to the **nearest thousand**, **estimate** the answer to $8,723 + 6,492$

2 marks

4

Billy thinks of a **whole** number.

He multiplies it by 3


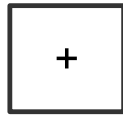
He rounds his answer to the nearest 10

The result is 40

Write down **all** the possible numbers Billy could have started with.

2 marks

5



Write the correct symbol in each box to make the statements correct.

$$-5 \quad \square \quad 8 = 3$$

$$-5 \quad \square \quad 8 = -13$$

$$-8 \quad \square \quad 5 = -3$$

2 marks

6

MMIX

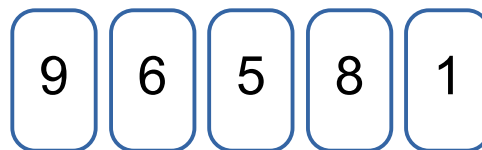
Circle the year that came 10 years before MMIX

1994 1999 2001 2009

1 mark

7

Here are five number cards.



Each card is used once to make a five digit number.

Write down the **largest even number** that can be made using the cards



2 marks