


# Obair Bhaile Mata

## Leabhar 1



Ainm \_\_\_\_\_ Rang \_\_\_\_\_



## Cearnóg100

1	2	3	4	5	6	7	8	9	10
11	12	13	14	15	16	17	18	19	20
21	22	23	24	25	26	27	28	29	30
31	32	33	34	35	36	37	38	39	40
41	42	43	44	45	46	47	48	49	50
51	52	53	54	55	56	57	58	59	60
61	62	63	64	65	66	67	68	69	70
71	72	73	74	75	76	77	78	79	80
81	82	83	84	85	86	87	88	89	90
91	92	93	94	95	96	97	98	99	100

## Obair Bhaile 1

1. Cuir isteach na huimhreacha atá ar iarraidh ar an eagar 50 thíos.

1	2	3	4	5	6	7	8	9	10
11	12	13		15	16	17	18	19	20
21	22	23	24	25	26	27		29	30
31		33	34	35	36	37	38	39	40
41	42	43	44	45	46	47	48		50

2. Déan na suimeanna seo thíos.

$7 + 2 = \square$

$15 + 2 = \square$

$17 + 2 = \square$

$10 + 7 = \square$

$7 + 7 = \square$

$7 + 8 = \square$

$12 + 5 = \square$

# Homework 1

1. Write in the missing numbers in the 50 array below.

1	2	3	4	5	6	7	8	9	10
11	12	13		15	16	17	18	19	20
21	22	23	24	25	26	27		29	30
31		33	34	35	36	37	38	39	40
41	42	43	44	45	46	47	48		50

2. Work out the answers to these addition sums.

$7 + 2 = \square$

$15 + 2 = \square$

$17 + 2 = \square$

$10 + 7 = \square$

$7 + 7 = \square$

$7 + 8 = \square$

$12 + 5 = \square$

## Obair Bhaile 2

1. Cuir isteach na huimhreacha atá ar iarraidh ar an chearnóg 100 thíos.

1	2	3		5	6	7	8	9	10
11	12	13		15	16	17	18	19	20
21	22	23		25	26	27	28	29	30
31	32	33		35	36	37	38	39	40
41	42	43		45	46	47	48	49	50
51	52	53		55	56	57	58	59	60
61	62	63		65	66	67	68	69	70
71	72	73		75	76	77	78	79	80
81	82	83		85	86	87	88	89	90
91	92	93		95	96	97	98	99	100

2. Déan na suimeanna seo thíos.

$$17 + 2 = \square$$

$$15 + 4 = \square$$

$$11 + 6 = \square$$

## Homework 2

1. Write in the missing numbers in the 100 square below.

1	2	3		5	6	7	8	9	10
11	12	13		15	16	17	18	19	20
21	22	23		25	26	27	28	29	30
31	32	33		35	36	37	38	39	40
41	42	43		45	46	47	48	49	50
51	52	53		55	56	57	58	59	60
61	62	63		65	66	67	68	69	70
71	72	73		75	76	77	78	79	80
81	82	83		85	86	87	88	89	90
91	92	93		95	96	97	98	99	100

3. Work out the answers to these addition sums.

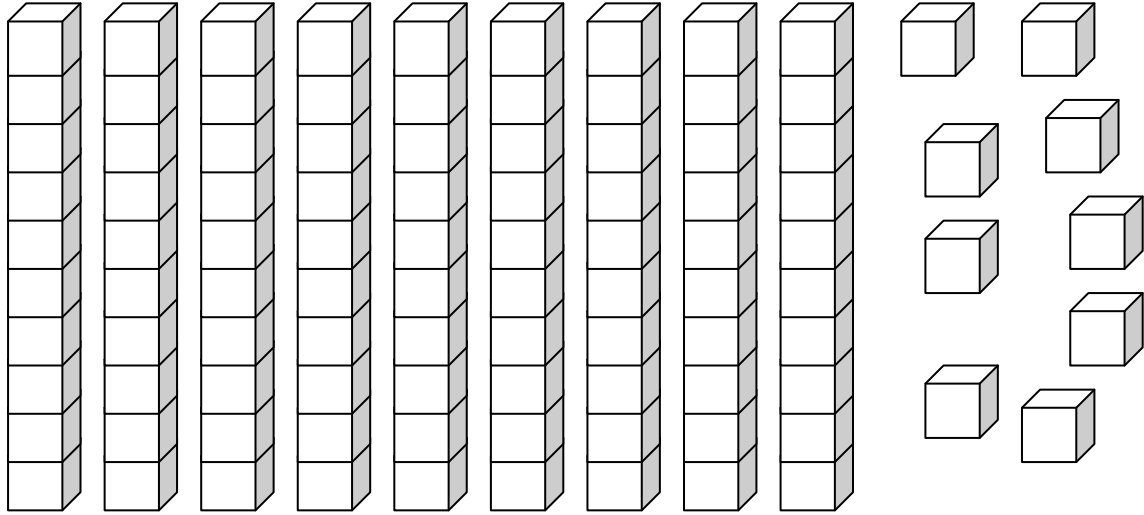
$$17 + 2 = \square$$

$$15 + 4 = \square$$

$$11 + 6 = \square$$

# Obair Bhaile 3

1. Cá mhéad bloc atá anseo?



2. Déan na suimeanna dealaithe seo thíos.

$$7 - 2 = \square$$

$$10 - 2 = \square$$

$$14 - 14 = \square$$

$$14 - 8 = \square$$

$$17 - 13 = \square$$

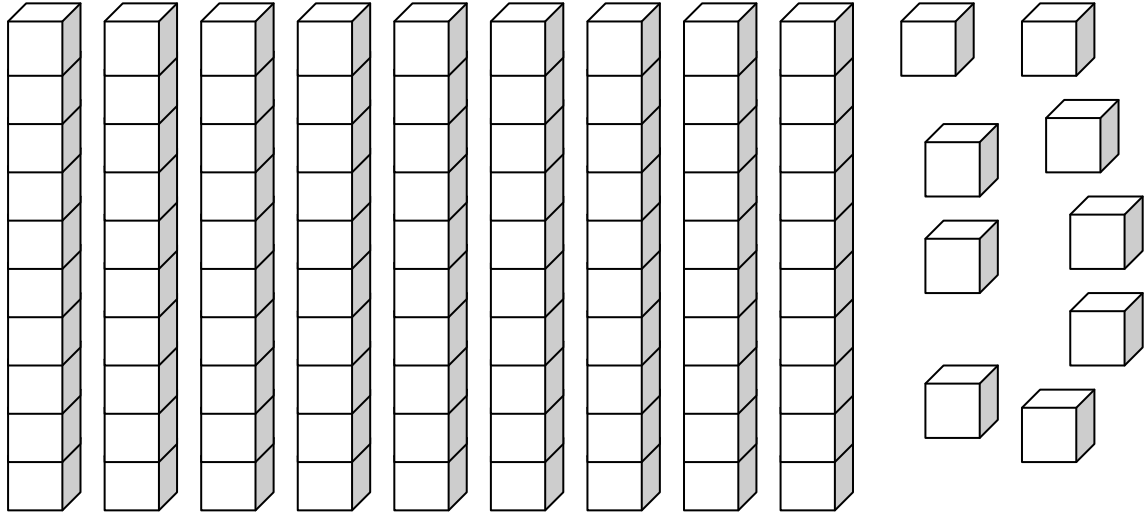
$$20 - 14 = \square$$

$$20 - 5 = \square$$



# Homework 3

1. How many blocks are there?



---

2. Work out the answers to these subtraction sums.

$7 - 2 = \square$

$10 - 2 = \square$

$14 - 14 = \square$

$14 - 8 = \square$


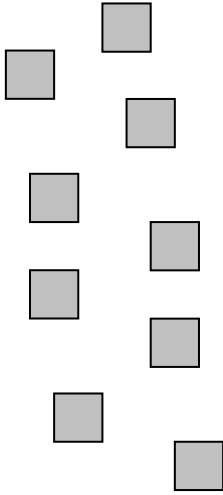
$17 - 13 = \square$

$20 - 14 = \square$

$20 - 5 = \square$

## Obair Bhaile 4

1. Cá mhéad atá léirithe ag na deicheanna agus aonaid seo?

Deicheanna	Aonaid
	

2. Déan na suimeanna seo thíos.

$17 + 2 = \square$

$65 - 3 = \square$

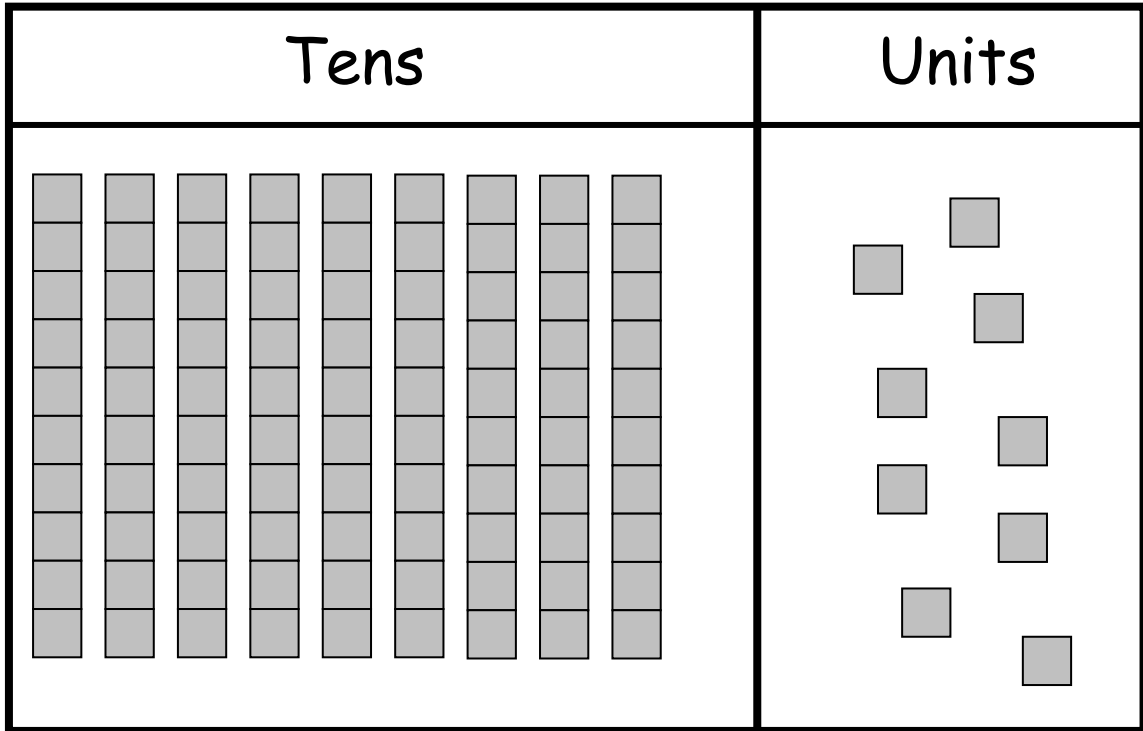
$14 + 4 = \square$

$67 - 4 = \square$

$96 - 3 = \square$

## Homework 4

1. Write the number shown by these tens and units?



---

2. Work out the answers to these sums.

$17 + 2 = \square$

$65 - 3 = \square$

$14 + 4 = \square$

$67 - 4 = \square$

$96 - 3 = \square$

## Obair Bhaile 5

1. Cuir isteach na huimhreacha atá ar iarraidh ar an eagar 50 thíos.

1	2	3	4	5	6	7	8	9	
11	12		4	15	16	17	18	19	20
21	22	23	24	25		27	28	29	30
	32	33	34	35	36	37	38	39	40
41	42	43	44		46	47	48	49	50

2. Déan na suimeanna seo thíos.

$5 + 2 = \square$

$16 + 1 = \square$

$14 + 0 = \square$

$10 + 5 = \square$

$6 + 6 = \square$

$7 + 6 = \square$

$13 + 6 = \square$

## Homework 5

1. Write in the missing numbers in the 50 array below.

1	2	3	4	5	6	7	8	9	
11	12		14	15	16	17	18	19	20
21	22	23	24	25		27	28	29	30
	32	33	34	35	36	37	38	39	40
41	42	43	44		46	47	48	49	50

2. Work out the answers to these addition sums.

$5 + 2 = \square$

$16 + 1 = \square$

$14 + 0 = \square$

$10 + 5 = \square$

$6 + 6 = \square$

$7 + 6 = \square$

$13 + 6 = \square$

## Obair Bhaile 6

1. Cuir isteach na huimhreacha atá ar iarraidh ar an chearnóg 100 thíos.

1	2	3	4	5	6	7	8	9	10
11	12	13	14	15	16	17	18	19	20
21	22	23	24	25	26	27	28	29	30
31	32	33	34	35	36	37	38	39	40
41	42	43	44	45	46	47	48	49	50
51	52	53	54	55	56	57	58	59	60
71	72	73	74	75	76	77	78	79	80
81	82	83	84	85	86	87	88	89	90
91	92	93	94	95	96	97	98	99	100

2. Déan na suimeanna seo thíos.

$$11 + 4 = \square$$

$$15 + 3 = \square$$

$$12 + 4 = \square$$

## Homework 6

1. Write in the missing numbers in the 100 square below.

1	2	3	4	5	6	7	8	9	10
11	12	13	14	15	16	17	18	19	20
21	22	23	24	25	26	27	28	29	30
31	32	33	34	35	36	37	38	39	40
41	42	43	44	45	46	47	48	49	50
51	52	53	54	55	56	57	58	59	60
71	72	73	74	75	76	77	78	79	80
81	82	83	84	85	86	87	88	89	90
91	92	93	94	95	96	97	98	99	100

2. Work out the answers to these addition sums.

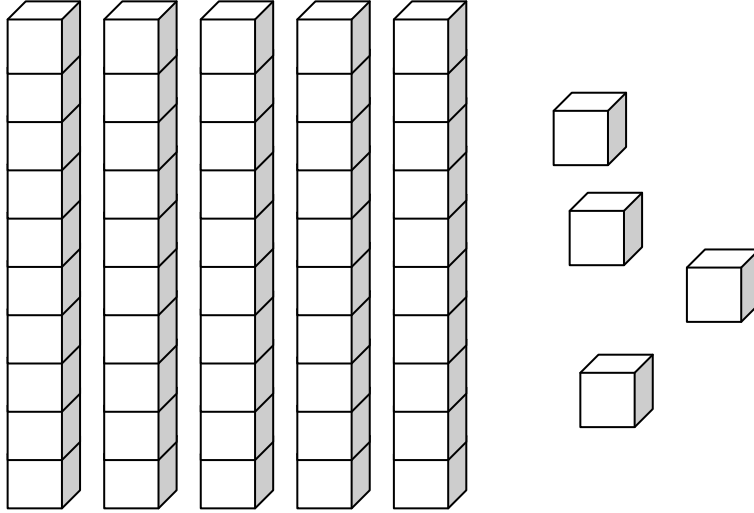
$$11 + 4 = \square$$

$$15 + 3 = \square$$

$$12 + 4 = \square$$

# Obair Bhaile 7

1. Cá mhéad bloc atá anseo?



---

2. Déan na suimeanna dealaithe seo thíos.

$8 - 2 =$

$10 - 1 =$

$12 - 12 =$

$15 - 5 =$

$14 - 11 =$

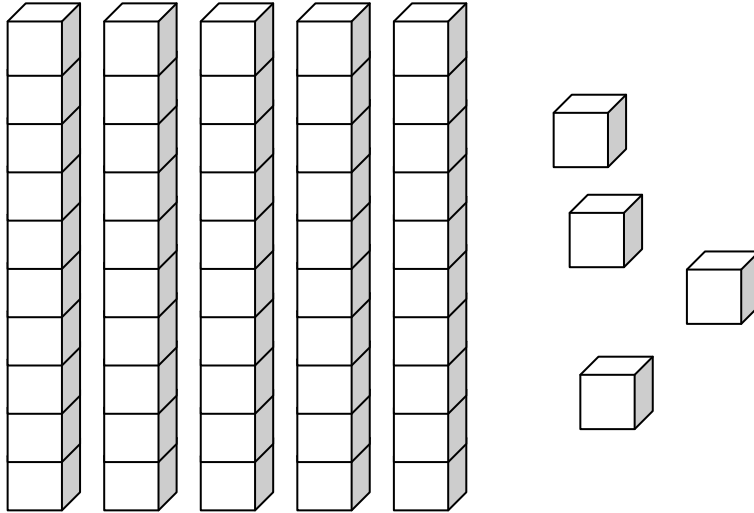
$20 - 16 =$

$20 - 7 =$



# Homework 7

1. How many blocks are there?



---

2. Work out the answers to these subtraction sums.

$8 - 2 = \square$

$10 - 1 = \square$

$12 - 12 = \square$

$15 - 5 = \square$


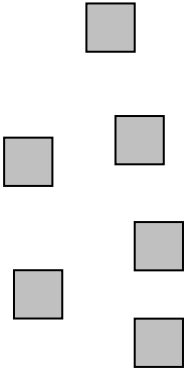
$14 - 11 = \square$

$20 - 16 = \square$

$20 - 7 = \square$

## Obair Bhaile 8

1. Cá mhéad atá léirithe ag na deiceanna agus aonaid seo?

Deiceanna	Aonaid
	

2. Déan na suimeanna seo thíos.

$$54 + 1 = \square$$

$$85 - 2 = \square$$

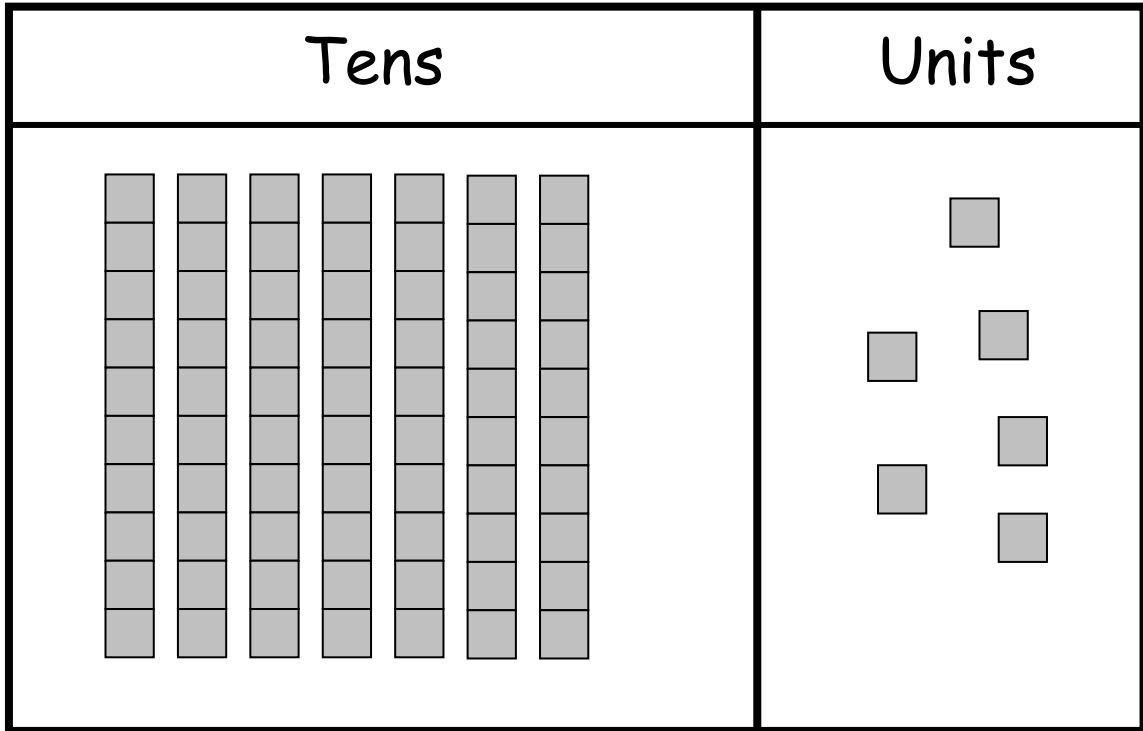
$$27 + 1 = \square$$

$$54 - 3 = \square$$

$$97 - 5 = \square$$

## Homework 8

1. Write the number shown by these tens and units.



\_\_\_\_\_

2. Work out the answers to these sums.

$54 + 1 = \square$

$85 - 2 = \square$

$27 + 1 = \square$

$54 - 3 = \square$

$97 - 5 = \square$

## Obair Bhaile 9

1. Cuir isteach na huimhreacha atá ar iarraidh ar an eagar 50 thíos.

1	2		4	5	6	7	8	9	10
11	12	13	14	15	16	17		19	20
21	22	23	24		26	27	28	29	30
	32	33	34	35	36	37	38	39	40
41	42	43	44	45	46	47	48	49	

2. Déan na suimeanna seo thíos.

$5 + 2 = \square$

$16 + 2 = \square$

$11 + 2 = \square$

$10 + 3 = \square$

$9 + 9 = \square$

$6 + 5 = \square$

$14 + 4 = \square$

## Homework 9

1. Write in the missing numbers in the 50 array below.

1	2		4	5	6	7	8	9	10
11	12	13	14	15	16	17		19	20
21	22	23	24		26	27	28	29	30
	32	33	34	35	36	37	38	39	40
41	42	43	44	45	46	47	48	49	

2. Work out the answers to these addition sums.

$$5 + 2 = \square$$

$$16 + 2 = \square$$

$$11 + 2 = \square$$

$$10 + 3 = \square$$

$$9 + 9 = \square$$

$$6 + 5 = \square$$

$$14 + 4 = \square$$

## Obair Bhaile 10

1. Cuir isteach na huimhreacha atá ar iarraidh ar an chearnóg 100 thíos.

	2	3	14	5	6	7	8	9	10
11		13	24	15	16	17	18	19	20
21	22		24	25	26	27	28	29	30
31	32	33		35	36	37	38	39	40
41	42	43	44		46	47	48	49	50
51	52	53	54	55		57	58	59	60
61	62	63	64	65	66		68	69	70
71	72	73	74	75	76	77		79	80
81	82	83	84	85	86	87	88		90
91	92	93	94	95	96	97	98	99	

2. Déan na suimeanna seo thíos.

$$14 + 2 = \square$$

$$13 + 8 = \square$$

$$11 + 4 = \square$$

## Homework 10

1. Write in the missing numbers in the 100 square below.

	2	3	14	5	6	7	8	9	10
11		13	24	15	16	17	18	19	20
21	22		24	25	26	27	28	29	30
31	32	33		35	36	37	38	39	40
41	42	43	44		46	47	48	49	50
51	52	53	54	55		57	58	59	60
61	62	63	64	65	66		68	69	70
71	72	73	74	75	76	77		79	80
81	82	83	84	85	86	87	88		90
91	92	93	94	95	96	97	98	99	

2. Work out the answers to these addition sums.

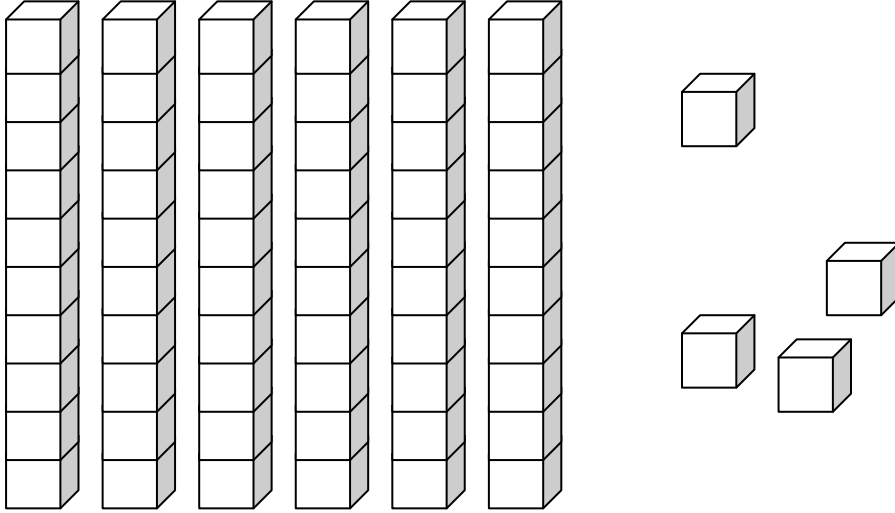
$$14 + 2 = \square$$

$$13 + 8 = \square$$

$$11 + 4 = \square$$

# Obair Bhaile 11

1. Cá mhéad bloc atá anseo?



2. Déan na suimeanna dealaithe seo thíos.

$9 - 2 = \square$

$5 - 1 = \square$

$12 - 12 = \square$

$15 - 6 = \square$

$19 - 14 = \square$

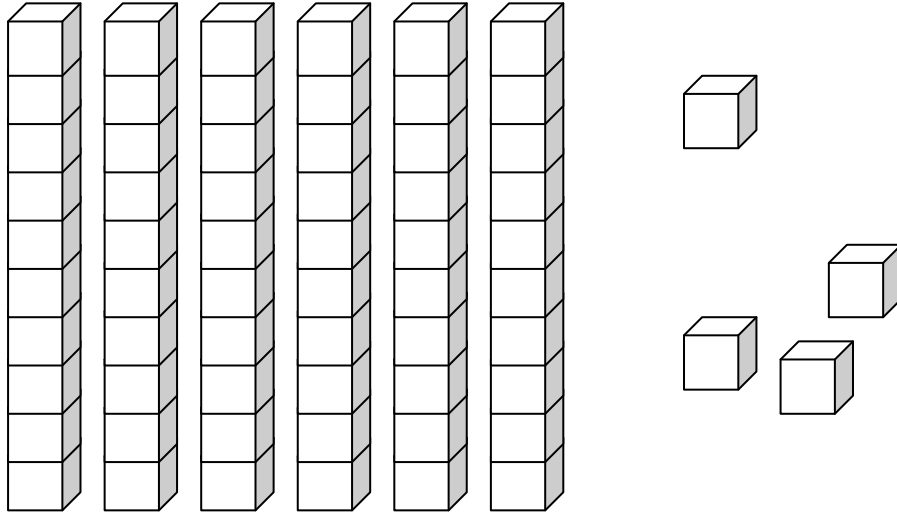
$20 - 12 = \square$

$20 - 8 = \square$



# Homework 11

1. How many blocks are there?



2. Work out the answers to these subtraction sums.

$9 - 2 = \square$

$5 - 1 = \square$

$12 - 12 = \square$

$15 - 6 = \square$

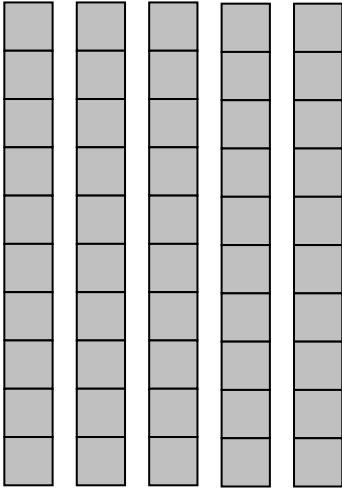
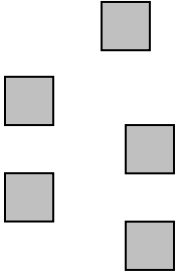
$19 - 14 = \square$

$20 - 12 = \square$

$20 - 8 = \square$

## Obair Bhaile 12

1. Cá mhéad atá léirithe ag na deicheanna agus aonaid seo?

Deicheanna	Aonaid
	

2. Déan na suimeanna seo thíos.

$11 + 2 = \square$

$46 - 4 = \square$

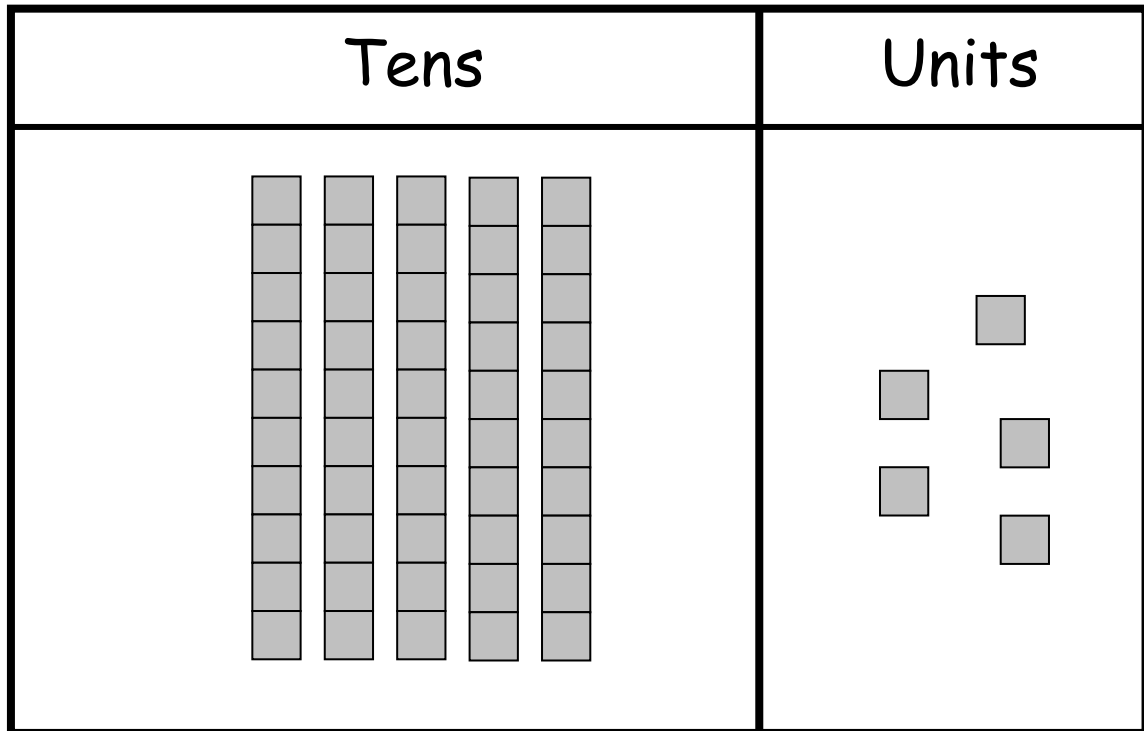
$84 + 3 = \square$

$75 - 2 = \square$

$98 - 7 = \square$

## Homework 12

2. Write the number shown by these tens and units.



\_\_\_\_\_

3. Work out the answers to these sums.

$11 + 2 = \square$

$46 - 4 = \square$

$84 + 3 = \square$

$75 - 2 = \square$

$98 - 7 = \square$

## Obair Bhaile 13

1. Cuir isteach na huimhreacha atá ar iarraidh ar an eagar 50 thíos.

	2	3	4	5	6	7	8	9	10
11		13	14	15	16	17	18	19	20
21	22	23	24	25	26	27	28	29	
31	32	33		35	36	37	38	39	40
41		43	44	45	46	47	48	49	50

2. Déan na suimeanna seo thíos.

$5 + 2 = \square$

$11 + 2 = \square$

$16 + 2 = \square$

$10 + 3 = \square$

$9 + 9 = \square$

$7 + 6 = \square$

$14 + 3 = \square$

## Homework 13

1. Write in the missing numbers in the 50 array below.

	2	3	4	5	6	7	8	9	10
11		13	14	15	16	17	18	19	20
21	22	23	24	25	26	27	28	29	
31	32	33		35	36	37	38	39	40
41		43	44	45	46	47	48	49	50

2. Work out the answers to these addition sums.

$7 + 2 = \square$

$15 + 2 = \square$

$17 + 2 = \square$

$10 + 7 = \square$

$7 + 7 = \square$

$7 + 8 = \square$

$12 + 5 = \square$

## Obair Bhaile 14

1. Cuir isteach na huimhreacha atá ar iarraidh ar an chearnóg 100 thíos.

1	2	3	4	5	6		8	9	10
11	12	13	14	15	16		18	19	20
21	22	23	24	25	26		28	29	30
31	32	33	34	35	36		38	39	40
41	42	43	44	45	46		48	49	50
							58	59	60
61	62	63	64	65	66	67	68	69	70
71	72	73	74	75	76	77	78	79	80
81	82	83	84	85	86	87	88	89	90
91	92	93	94	95	96	97	98	99	100

2. Déan na suimeanna seo thíos.

$$13 + 5 = \square$$

$$16 + 3 = \square$$

$$11 + 4 = \square$$

## Homework 14

1. Write in the missing numbers in the 100 square below.

1	2	3	4	5	6		8	9	10
11	12	13	14	15	16		18	19	20
21	22	23	24	25	26		28	29	30
31	32	33	34	35	36		38	39	40
41	42	43	44	45	46		48	49	50
							58	59	60
61	62	63	64	65	66	67	68	69	70
71	72	73	74	75	76	77	78	79	80
81	82	83	84	85	86	87	88	89	90
91	92	93	94	95	96	97	98	99	100

2. Work out the answers to these addition sums.

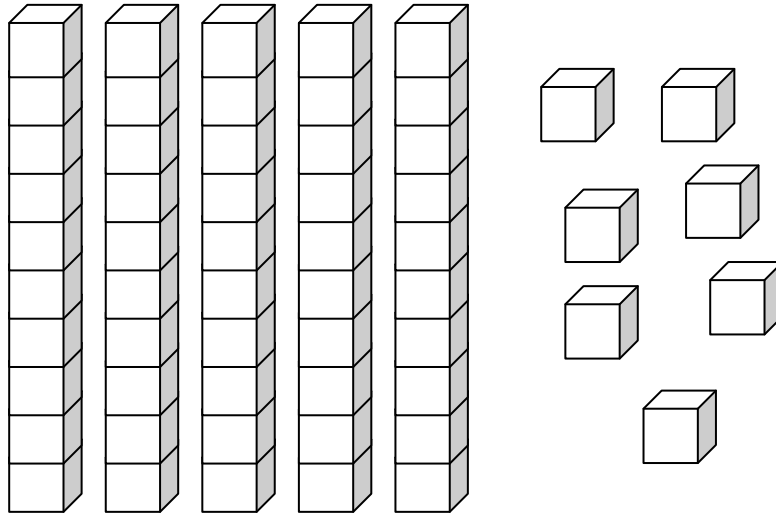
$$13 + 5 = \square$$

$$16 + 3 = \square$$

$$11 + 4 = \square$$

# Obair Bhaile 15

1. Cá mhéad bloc atá anseo?



2. Déan na suimeanna dealaithe seo thíos.

$9 - 2 = \square$

$10 - 1 = \square$

$17 - 17 = \square$

$15 - 7 = \square$

$19 - 15 = \square$

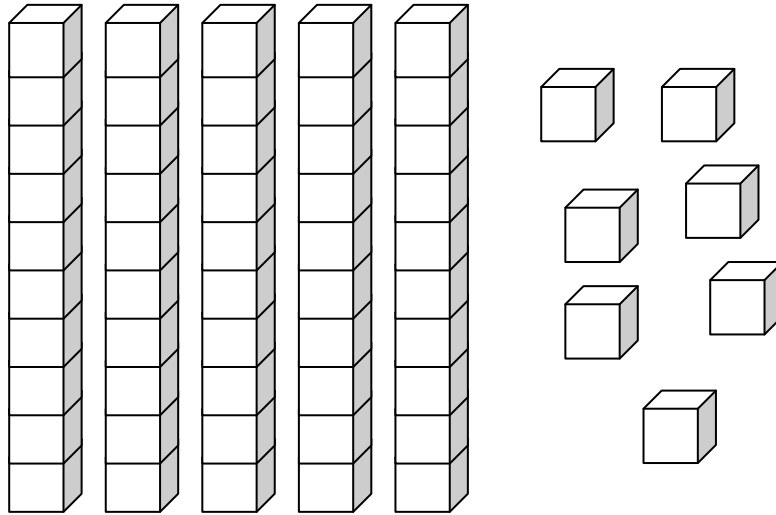
$20 - 11 = \square$

$20 - 7 = \square$



# Homework 15

1. How many blocks are there?



3. Work out the answers to these subtraction sums.

$9 - 2 = \square$

$10 - 1 = \square$

$17 - 17 = \square$

$15 - 7 = \square$

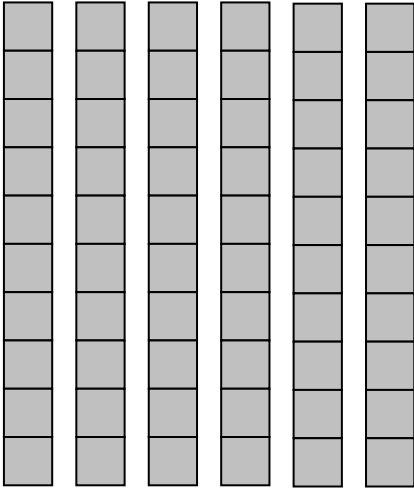
$19 - 15 = \square$

$20 - 11 = \square$

$20 - 7 = \square$

## Obair Bhaile 16

1. Cá mhéad atá léirithe ag na deicheanna agus aonaid seo?

Deicheanna	Aonaid
	

2. Déan na suimeanna seo thíos.

$18 + 1 =$

$47 - 5 =$

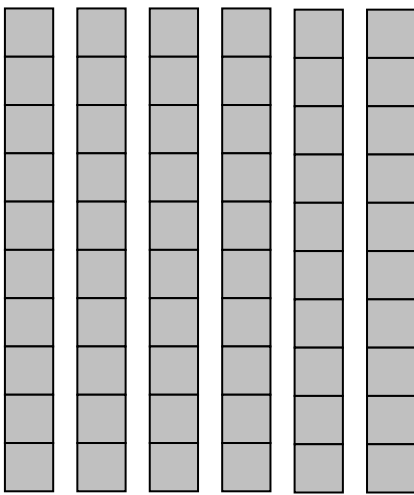
$84 + 2 =$

$83 - 2 =$

$83 - 1 =$

# Homework 16

1. Write the number shown by these tens and units.

Tens	Units
	

\_\_\_\_\_

2. Work out the answers to these sums.

$18 + 1 = \square$

$47 - 5 = \square$

$84 + 2 = \square$

$83 - 2 = \square$

$83 - 1 = \square$

## Obair Bhaile 17

1. Cuir isteach na huimhreacha atá ar iarraidh ar an eagar 50 thíos.

1	2	3	4	5	6		8	9	10
11		13	14	15	16	17	18		20
21	22	23		25	26	27	28	29	
31		33	34	35	36	37	38	39	40
41	42	43	44	45	46	47		49	50

2. Déan na suimeanna seo thíos.

$6 + 2 = \square$

$13 + 2 = \square$

$17 + 2 = \square$

$10 + 7 = \square$

$5 + 5 = \square$

$5 + 6 = \square$

$12 + 3 = \square$

## Homework 17

1. Write in the missing numbers in the 50 array below.

1	2	3	4	5	6		8	9	10
11		13	14	15	16	17	18		20
21	22	23		25	26	27	28	29	
31		33	34	35	36	37	38	39	40
41	42	43	44	45	46	47		49	50

2. Work out the answers to these addition sums.

$6 + 2 = \square$

$13 + 2 = \square$

$17 + 2 = \square$

$10 + 7 = \square$

$5 + 5 = \square$

$5 + 6 = \square$

$12 + 3 = \square$

## Obair Bhaile 18

1. Cuir isteach na huimhreacha atá ar iarraidh ar an chearnóg 100 thíos.

1	2	3	4	5	6	7	8	9	
11	12	13	14	15	16	17	18	19	
21	22	23	24	25	26	27	28	29	
31	32	33	34	35	36	37	38	39	
41	42	43	44	45	46	47	48	49	
51	52	53	54	55	56	57	58	59	
61	62	63	64	65	66	67	68	69	
71	72	73	74	75	76	77	78	79	
81	82	83	84	85	86	87	88	89	

2. Déan na suimeanna seo thíos.

$$14 + 4 = \square$$

$$12 + 7 = \square$$

$$11 + 6 = \square$$

## Homework 18

1. Write in the missing numbers in the 100 square below.

1	2	3	4	5	6	7	8	9	
11	12	13	14	15	16	17	18	19	
21	22	23	24	25	26	27	28	29	
31	32	33	34	35	36	37	38	39	
41	42	43	44	45	46	47	48	49	
51	52	53	54	55	56	57	58	59	
61	62	63	64	65	66	67	68	69	
71	72	73	74	75	76	77	78	79	
81	82	83	84	85	86	87	88	89	

2. Work out the answers to these addition sums.

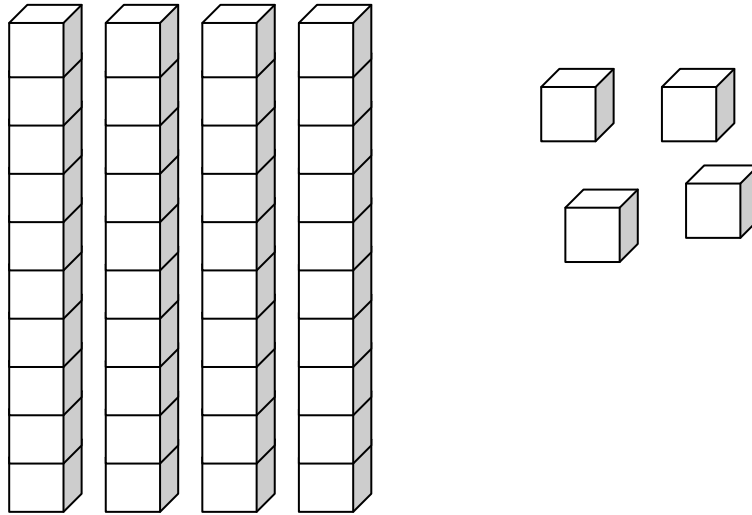
$$14 + 4 = \square$$

$$12 + 7 = \square$$

$$11 + 6 = \square$$

# Obair Bhaile 19

1. Cá mhéad bloc atá anseo?



---

2. Déan na suimeanna dealaithe seo thíos.

$7 - 2 = \square$

$10 - 3 = \square$

$11 - 11 = \square$

$12 - 6 = \square$

$17 - 12 = \square$

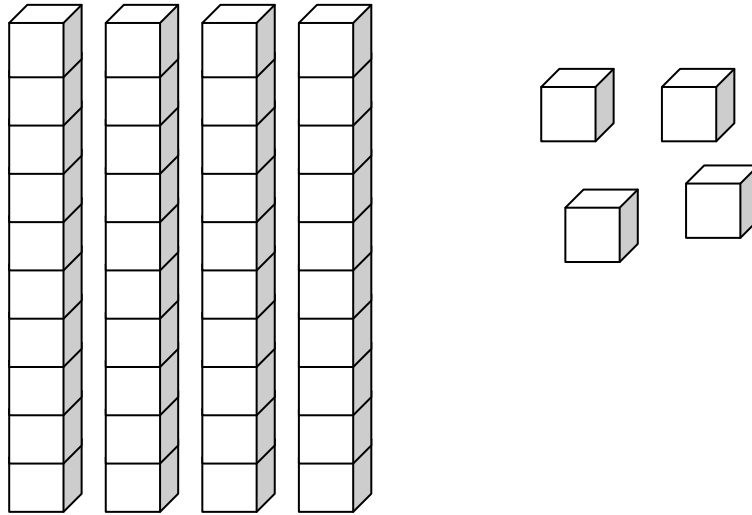
$20 - 14 = \square$

$20 - 5 = \square$



# Homework 19

1. How many blocks are there?



2. Work out the answers to these subtraction sums.

$7 - 2 = \square$

$10 - 3 = \square$

$11 - 11 = \square$

$12 - 6 = \square$

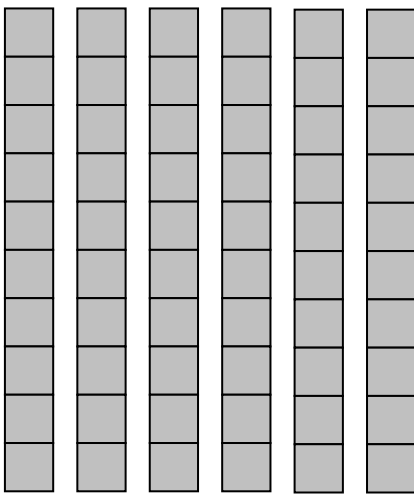
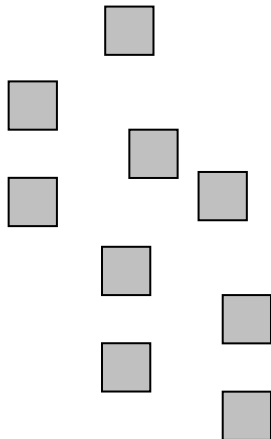
$17 - 12 = \square$

$20 - 14 = \square$

$20 - 5 = \square$

## Obair Bhaile 20

1. Cá mhéad atá léirithe ag na deicheanna agus aonaid seo?

Deicheanna	Aonaid
	

2. Déan na suimeanna seo thíos.

$14 + 1 =$

$53 - 2 =$

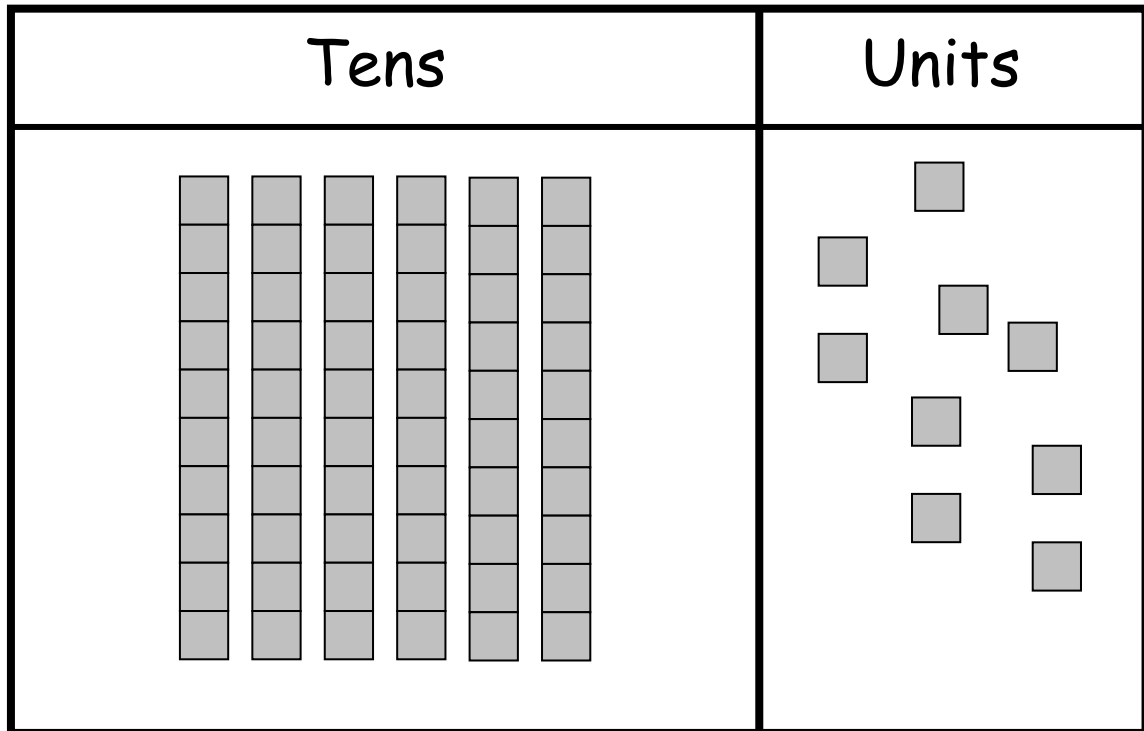
$77 + 2 =$

$86 - 4 =$

$25 - 1 =$

## Homework 20

1. Write the number shown by these tens and units.



\_\_\_\_\_

2. Work out the answers to these sums.

$14 + 1 = \square$

$53 - 2 = \square$

$77 + 2 = \square$

$86 - 4 = \square$

$25 - 1 = \square$

## Obair Bhaile 21

1. Cuir isteach na huimhreacha atá ar iarraidh ar an eagar 50 thíos.

1	2	3	4	5	6	7	8	9	
	12	13	14	15	16	17	18	19	20
21	22	23	24	25	26	27	28	29	
	32	33	34	35	36	37	38	39	40
41	42	43	44	45	46	47	48	49	

2. Déan na suimeanna seo thíos.

$7 + 1 = \square$

$15 + 1 = \square$

$17 + 2 = \square$

$10 + 5 = \square$

$9 + 9 = \square$

$9 + 8 = \square$

$12 + 7 = \square$

## Homework 21

1. Write in the missing numbers in the 50 array below.

1	2	3	4	5	6	7	8	9	
	12	13	14	15	16	17	18	19	20
21	22	23	24	25	26	27	28	29	
	32	33	34	35	36	37	38	39	40
41	42	43	44	45	46	47	48	49	

2. Work out the answers to these addition sums.

$7 + 1 = \square$

$15 + 1 = \square$

$17 + 2 = \square$

$10 + 5 = \square$

$9 + 9 = \square$

$9 + 8 = \square$

$12 + 7 = \square$

## Obair Bhaile 22

1. Cuir isteach na huimhreacha atá ar iarraidh ar an chearnóg 100 thíos.

	2	3	4	5	6	7	8	9	10
	12	13	14	15	16	17	18	19	20
	22	23	24	25	26	27	28	29	30
	32	33	34	35	36	37	38	39	40
	42	43	44	45	46	47	48	49	50
	52	53	54	55	56	57	58	59	60
	62	63	64	65	66	67	68	69	70
	72	73	74	75	76	77	78	79	80
	82	83	84	85	86	87	88	89	90

2. Déan na suimeanna seo thíos.

$$16 + 2 = \square$$

$$11 + 4 = \square$$

$$12 + 6 = \square$$

## Homework 22

1. Write in the missing numbers in the 100 square below.

	2	3	4	5	6	7	8	9	10
	12	13	14	15	16	17	18	19	20
	22	23	24	25	26	27	28	29	30
	32	33	34	35	36	37	38	39	40
	42	43	44	45	46	47	48	49	50
	52	53	54	55	56	57	58	59	60
	62	63	64	65	66	67	68	69	70
	72	73	74	75	76	77	78	79	80
	82	83	84	85	86	87	88	89	90

2. Work out the answers to these addition sums.

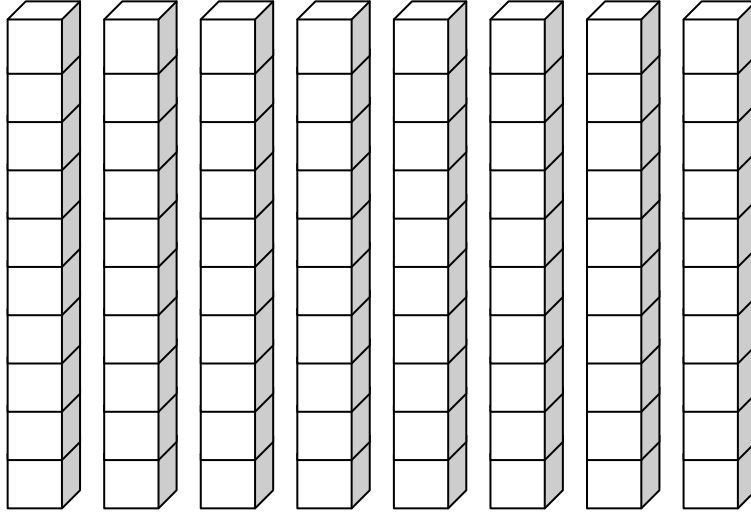
$$16 + 2 = \square$$

$$11 + 4 = \square$$

$$12 + 6 = \square$$

# Obair Bhaile 23

1. Cá mhéad bloc atá anseo?



2. Déan na suimeanna dealaithe seo thíos.

$$7 - 1 = \square$$

$$10 - 1 = \square$$

$$14 - 14 = \square$$

$$14 - 6 = \square$$

$$17 - 15 = \square$$

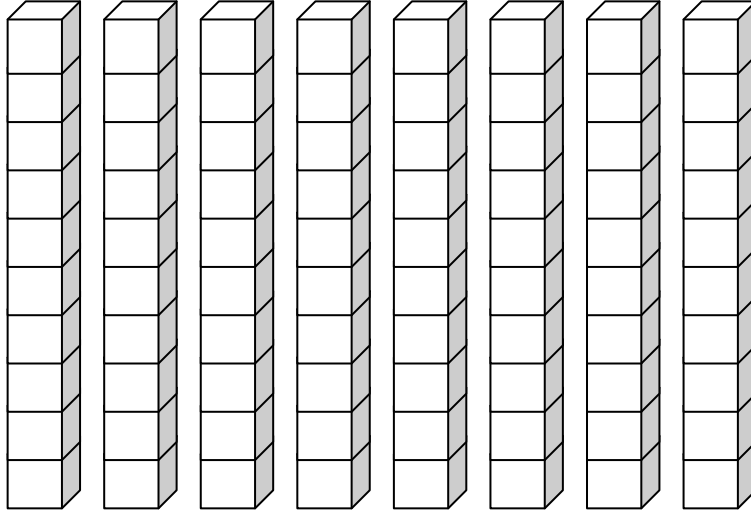
$$20 - 12 = \square$$

$$20 - 9 = \square$$



## Homework 23

1. How many blocks are there?



---

2. Work out the answers to these subtraction sums.

$7 - 1 =$

$10 - 1 =$

$14 - 14 =$

$14 - 6 =$

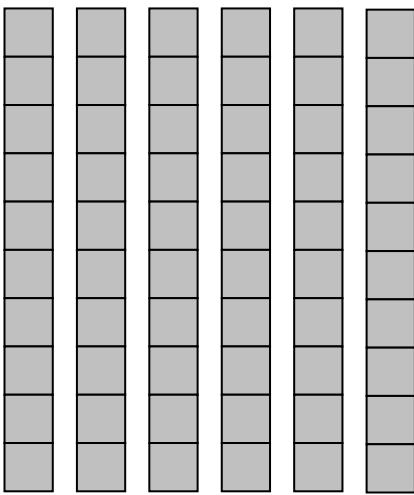
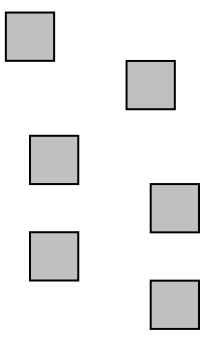
$17 - 15 =$

$20 - 12 =$

$20 - 9 =$

## Obair Bhaile 24

1. Cá mhéad atá léirithe ag na deicheanna agus aonaid seo?

Deicheanna	Aonaid
	

2. Déan na suimeanna seo thíos.

$15 + 2 = \square$

$83 - 2 = \square$

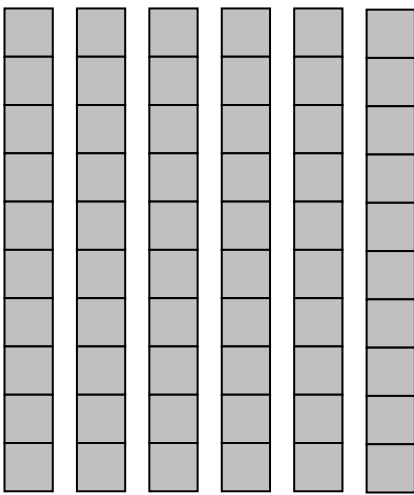
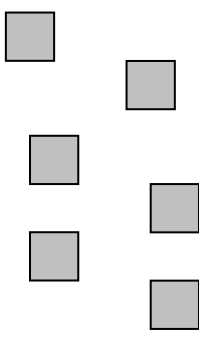
$14 + 5 = \square$

$97 - 6 = \square$

$37 - 5 = \square$

## Homework 24

1. Write the numbers shown by these tens and units.

Tens	Units
	

2. Work out the answers to these sums.

$15 + 2 = \square$

$83 - 2 = \square$

$14 + 5 = \square$

$97 - 6 = \square$

$37 - 5 = \square$









