

Obair Bhaile Mata

Leabhar 10



Ainm _____ Rang _____



Cearnóg Iolraithe Multiplication Square

X	1	2	3	4	5	6	7	8	9	10
1	1	2	3	4	5	6	7	8	9	10
2	2	4	6	8	10	12	14	16	18	20
3	3	6	9	12	15	18	21	24	27	30
4	4	8	12	16	20	24	28	32	36	40
5	5	10	15	20	25	30	35	40	45	50
6	6	12	18	24	30	36	42	48	54	60
7	7	14	21	28	35	42	49	56	63	70
8	8	16	24	32	40	48	56	64	72	80
9	9	18	27	36	45	54	63	72	81	90
10	10	20	30	40	50	60	70	80	90	100

Obair Bhaile Mata 1

Déan na suimeanna roinnte seo.

a) $8 \div 2 = \underline{\quad}$

b) $27 \div 3 = \underline{\quad}$

c) $12 \div 4 = \underline{\quad}$

d) $15 \div 5 = \underline{\quad}$

e) $18 \div 6 = \underline{\quad}$

f) $28 \div 7 = \underline{\quad}$

g) $32 \div 8 = \underline{\quad}$

h) $27 \div 9 = \underline{\quad}$

i) $90 \div 10 = \underline{\quad}$

j) $4 \div 2 = \underline{\quad}$

k) $18 \div 3 = \underline{\quad}$

l) $20 \div 4 = \underline{\quad}$

m) $35 \div 5 = \underline{\quad}$

n) $24 \div 6 = \underline{\quad}$

o) $56 \div 7 = \underline{\quad}$

p) $24 \div 8 = \underline{\quad}$

q) $45 \div 9 = \underline{\quad}$

r) $50 \div 10 = \underline{\quad}$

s) $6 \div 2 = \underline{\quad}$

t) $9 \div 3 = \underline{\quad}$

u) $16 \div 4 = \underline{\quad}$

v) $30 \div 5 = \underline{\quad}$


w) $36 \div 6 = \underline{\quad}$

x) $21 \div 7 = \underline{\quad}$

y) $64 \div 8 = \underline{\quad}$

z) $81 \div 9 = \underline{\quad}$

**Cá mhéad a
fuair tú ceart?**



Maths Homework 1

Complete these division sums.

a) $8 \div 2 = \underline{\quad}$

b) $27 \div 3 = \underline{\quad}$

c) $12 \div 4 = \underline{\quad}$

d) $15 \div 5 = \underline{\quad}$

e) $18 \div 6 = \underline{\quad}$

f) $28 \div 7 = \underline{\quad}$

g) $32 \div 8 = \underline{\quad}$

h) $27 \div 9 = \underline{\quad}$

i) $90 \div 10 = \underline{\quad}$

j) $4 \div 2 = \underline{\quad}$

k) $18 \div 3 = \underline{\quad}$

l) $20 \div 4 = \underline{\quad}$

m) $35 \div 5 = \underline{\quad}$

n) $24 \div 6 = \underline{\quad}$

o) $56 \div 7 = \underline{\quad}$

p) $24 \div 8 = \underline{\quad}$

q) $45 \div 9 = \underline{\quad}$

r) $50 \div 10 = \underline{\quad}$

s) $6 \div 2 = \underline{\quad}$

t) $9 \div 3 = \underline{\quad}$

u) $16 \div 4 = \underline{\quad}$

v) $30 \div 5 = \underline{\quad}$


w) $36 \div 6 = \underline{\quad}$

x) $21 \div 7 = \underline{\quad}$

y) $64 \div 8 = \underline{\quad}$

z) $81 \div 9 = \underline{\quad}$

**How many did
you get correct?**



Obair Bhaile Mata 2

Déan na suimeanna seo.

a)

$$\begin{array}{r} \text{C D A} \\ 1 \ 5 \ 7 \\ + 1 \ 3 \ 1 \\ \hline \\ \hline \end{array}$$

b)

$$\begin{array}{r} \text{C D A} \\ 2 \ 9 \ 1 \\ - 1 \ 1 \ 6 \\ \hline \\ \hline \end{array}$$

c)

$$\begin{array}{r} \text{C D A} \\ 3 \ 3 \ 2 \\ - 2 \ 2 \ 6 \\ \hline \\ \hline \end{array}$$

d)

$$\begin{array}{r} \text{C D A} \\ 4 \ 4 \ 6 \\ + 2 \ 1 \ 5 \\ \hline \\ \hline \end{array}$$

e)

$$\begin{array}{r} \text{C D A} \\ 5 \ 2 \ 5 \\ - 2 \ 2 \ 1 \\ \hline \\ \hline \end{array}$$

f)

$$\begin{array}{r} \text{C D A} \\ 6 \ 3 \ 6 \\ - 1 \ 5 \ 1 \\ \hline \\ \hline \end{array}$$

g)

$$\begin{array}{r} \text{C D A} \\ 7 \ 8 \ 9 \\ + 3 \ 3 \ 7 \\ \hline \\ \hline \end{array}$$

h)

$$\begin{array}{r} \text{C D A} \\ 8 \ 1 \ 0 \\ + 4 \ 2 \ 1 \\ \hline \\ \hline \end{array}$$

i)

$$\begin{array}{r} \text{C D A} \\ 9 \ 8 \ 7 \\ + 3 \ 2 \ 5 \\ \hline \\ \hline \end{array}$$

j)

$$\begin{array}{r} \text{C D A} \\ 8 \ 6 \ 5 \\ - 5 \ 1 \ 6 \\ \hline \\ \hline \end{array}$$


k)

$$\begin{array}{r} \text{C D A} \\ 7 \ 4 \ 3 \\ + 2 \ 1 \ 3 \\ \hline \\ \hline \end{array}$$

l)

$$\begin{array}{r} \text{C D A} \\ 6 \ 2 \ 1 \\ - 1 \ 1 \ 2 \\ \hline \\ \hline \end{array}$$

Cá mhéad a fuair tú ceart?



Maths Homework 2

Complete these sums.

a)

$$\begin{array}{r} \text{H T U} \\ 157 \\ + 131 \\ \hline \\ \hline \end{array}$$

b)

$$\begin{array}{r} \text{H T U} \\ 291 \\ - 116 \\ \hline \\ \hline \end{array}$$

c)

$$\begin{array}{r} \text{H T U} \\ 332 \\ - 226 \\ \hline \\ \hline \end{array}$$

d)

$$\begin{array}{r} \text{H T U} \\ 446 \\ + 215 \\ \hline \\ \hline \end{array}$$

e)

$$\begin{array}{r} \text{H T U} \\ 525 \\ - 221 \\ \hline \\ \hline \end{array}$$

f)

$$\begin{array}{r} \text{H T U} \\ 636 \\ - 151 \\ \hline \\ \hline \end{array}$$

g)

$$\begin{array}{r} \text{H T U} \\ 789 \\ + 337 \\ \hline \\ \hline \end{array}$$

h)

$$\begin{array}{r} \text{H T U} \\ 810 \\ + 421 \\ \hline \\ \hline \end{array}$$

i)

$$\begin{array}{r} \text{H T U} \\ 987 \\ + 325 \\ \hline \\ \hline \end{array}$$

j)

$$\begin{array}{r} \text{H T U} \\ 865 \\ - 516 \\ \hline \\ \hline \end{array}$$

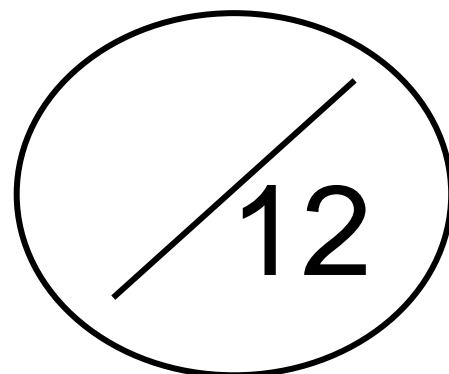
k)

$$\begin{array}{r} \text{H T U} \\ 743 \\ + 213 \\ \hline \\ \hline \end{array}$$

l)

$$\begin{array}{r} \text{H T U} \\ 621 \\ - 112 \\ \hline \\ \hline \end{array}$$

**How many did
you get correct?**



Obair Bhaile Mata 3

Déan na suimeanna iolraithe agus roinnte seo.

a) $8 \div 2 = \underline{\quad}$

b) $18 \div 6 = \underline{\quad}$

c) $3 \times 9 = \underline{\quad}$

d) $7 \times 2 = \underline{\quad}$

e) $40 \div 4 = \underline{\quad}$

f) $8 \times 10 = \underline{\quad}$

g) $5 \times 0 = \underline{\quad}$

h) $90 \div 10 = \underline{\quad}$

i) $6 \times 1 = \underline{\quad}$

j) $9 \times 8 = \underline{\quad}$

k) $14 \div 7 = \underline{\quad}$

l) $10 \times 7 = \underline{\quad}$

m) $24 \div 8 = \underline{\quad}$

n) $54 \div 9 = \underline{\quad}$

o) $36 \div 9 = \underline{\quad}$

p) $9 \times 5 = \underline{\quad}$

q) $10 \times 5 = \underline{\quad}$

r) $32 \div 8 = \underline{\quad}$

s) $18 \div 3 = \underline{\quad}$

t) $8 \times 2 = \underline{\quad}$

u) $2 \times 7 = \underline{\quad}$

v) $7 \div 7 = \underline{\quad}$


w) $4 \times 8 = \underline{\quad}$

x) $7 \times 0 = \underline{\quad}$

y) $45 \div 5 = \underline{\quad}$

z) $60 \div 6 = \underline{\quad}$

**Cá mhéad a
fuair tú ceart?**



Maths Homework 3

Complete these multiplication and division sums.

a) $8 \div 2 = \underline{\quad}$

b) $18 \div 6 = \underline{\quad}$

c) $3 \times 9 = \underline{\quad}$

d) $7 \times 2 = \underline{\quad}$

e) $40 \div 4 = \underline{\quad}$

f) $8 \times 10 = \underline{\quad}$

g) $5 \times 0 = \underline{\quad}$

h) $90 \div 10 = \underline{\quad}$

i) $6 \times 1 = \underline{\quad}$

j) $9 \times 8 = \underline{\quad}$

k) $14 \div 7 = \underline{\quad}$

l) $10 \times 7 = \underline{\quad}$

m) $24 \div 8 = \underline{\quad}$

n) $54 \div 9 = \underline{\quad}$

o) $36 \div 9 = \underline{\quad}$

p) $9 \times 5 = \underline{\quad}$

q) $10 \times 5 = \underline{\quad}$

r) $32 \div 8 = \underline{\quad}$

s) $18 \div 3 = \underline{\quad}$

t) $8 \times 2 = \underline{\quad}$

u) $2 \times 7 = \underline{\quad}$

v) $7 \div 7 = \underline{\quad}$


w) $4 \times 8 = \underline{\quad}$

x) $7 \times 0 = \underline{\quad}$

y) $45 \div 5 = \underline{\quad}$

z) $60 \div 6 = \underline{\quad}$

**How many did
you get correct?**



Obair Bhaile Mata 4

1. Scríobh an uimhir 1539 i bhfocail.

2. Scríobh an uimhir *cúig mhíle, trí chéad nócha a naoi* i bhfigiúirí.


3. Cá mhéad airgid atá léirithe thíos?



4. Cad é an t-am atá léirithe ar an chlog seo thíos?



5. Cá mhéad slios atá ar an chruth seo thíos?



6. Scríobh síos trí rud atá níos troime ná cileagram.

7. Cé acu an ceann corr thíos?

cearnóg

traipéisiam

dronuilleog

ciorcal

Maths Homework 4

1. Write the number 1539 in words.

2. Write the number *five thousand, three hundred and ninety three* in figures.

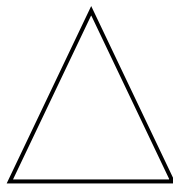
3. How much money is shown below?



4. What time is shown on this clock?



5. How many sides does this shape have?



6. Write down three things that are heavier than a kilogram.

7. Which is the odd one out?

square

trapezium

rectangle

circle

Obair Bhaile Mata 5

Déan na suimeanna roinnte seo.

a) $16 \div 2 = \underline{\quad}$

b) $18 \div 3 = \underline{\quad}$

c) $24 \div 4 = \underline{\quad}$

d) $25 \div 5 = \underline{\quad}$

e) $36 \div 6 = \underline{\quad}$

f) $43 \div 7 = \underline{\quad}$

g) $64 \div 8 = \underline{\quad}$

h) $54 \div 9 = \underline{\quad}$

i) $100 \div 10 = \underline{\quad}$

j) $6 \div 2 = \underline{\quad}$

k) $24 \div 3 = \underline{\quad}$

l) $24 \div 4 = \underline{\quad}$

m) $45 \div 5 = \underline{\quad}$

n) $24 \div 6 = \underline{\quad}$

o) $63 \div 7 = \underline{\quad}$

p) $24 \div 8 = \underline{\quad}$

q) $72 \div 9 = \underline{\quad}$

r) $70 \div 10 = \underline{\quad}$

s) $18 \div 2 = \underline{\quad}$

t) $18 \div 3 = \underline{\quad}$

u) $16 \div 4 = \underline{\quad}$

v) $15 \div 5 = \underline{\quad}$


w) $54 \div 6 = \underline{\quad}$

x) $49 \div 7 = \underline{\quad}$

y) $48 \div 8 = \underline{\quad}$

z) $45 \div 9 = \underline{\quad}$

**Cá mhéad a
fuair tú ceart?**



Maths Homework 5

Complete these division sums.

a) $16 \div 2 = \underline{\quad}$

b) $18 \div 3 = \underline{\quad}$

c) $24 \div 4 = \underline{\quad}$

d) $25 \div 5 = \underline{\quad}$

e) $36 \div 6 = \underline{\quad}$

f) $43 \div 7 = \underline{\quad}$

g) $64 \div 8 = \underline{\quad}$

h) $54 \div 9 = \underline{\quad}$

i) $100 \div 10 = \underline{\quad}$

j) $6 \div 2 = \underline{\quad}$

k) $24 \div 3 = \underline{\quad}$

l) $24 \div 4 = \underline{\quad}$

m) $45 \div 5 = \underline{\quad}$

n) $24 \div 6 = \underline{\quad}$

o) $63 \div 7 = \underline{\quad}$

p) $24 \div 8 = \underline{\quad}$

q) $72 \div 9 = \underline{\quad}$

r) $70 \div 10 = \underline{\quad}$

s) $18 \div 2 = \underline{\quad}$

t) $18 \div 3 = \underline{\quad}$

u) $16 \div 4 = \underline{\quad}$

v) $15 \div 5 = \underline{\quad}$

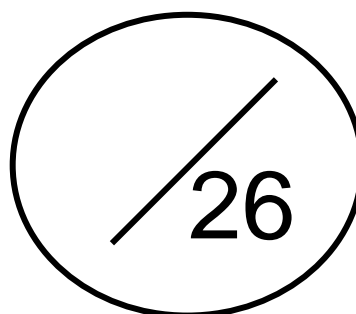
w) $54 \div 6 = \underline{\quad}$

x) $49 \div 7 = \underline{\quad}$

y) $48 \div 8 = \underline{\quad}$

z) $45 \div 9 = \underline{\quad}$

**How many did
you get correct?**



Obair Bhaile Mata 6

Déan na suimeanna seo.

a)

$$\begin{array}{r} \text{C D A} \\ 1\ 7\ 3 \\ +\ 1\ 1\ 8 \\ \hline \\ \hline \end{array}$$

b)

$$\begin{array}{r} \text{C D A} \\ 2\ 3\ 9 \\ -\ 1\ 6\ 6 \\ \hline \\ \hline \end{array}$$

c)

$$\begin{array}{r} \text{C D A} \\ 3\ 4\ 9 \\ -\ 2\ 0\ 2 \\ \hline \\ \hline \end{array}$$

d)

$$\begin{array}{r} \text{C D A} \\ 4\ 4\ 1 \\ +\ 2\ 8\ 9 \\ \hline \\ \hline \end{array}$$

e)

$$\begin{array}{r} \text{C D A} \\ 5\ 3\ 3 \\ -\ 2\ 7\ 8 \\ \hline \\ \hline \end{array}$$

f)

$$\begin{array}{r} \text{C D A} \\ 6\ 0\ 0 \\ -\ 1\ 0\ 7 \\ \hline \\ \hline \end{array}$$

g)

$$\begin{array}{r} \text{C D A} \\ 7\ 3\ 4 \\ +\ 3\ 2\ 8 \\ \hline \\ \hline \end{array}$$

h)

$$\begin{array}{r} \text{C D A} \\ 8\ 9\ 2 \\ +\ 4\ 5\ 8 \\ \hline \\ \hline \end{array}$$

i)

$$\begin{array}{r} \text{C D A} \\ 9\ 3\ 9 \\ +\ 3\ 5\ 7 \\ \hline \\ \hline \end{array}$$

j)

$$\begin{array}{r} \text{C D A} \\ 8\ 7\ 9 \\ -\ 5\ 4\ 0 \\ \hline \\ \hline \end{array}$$

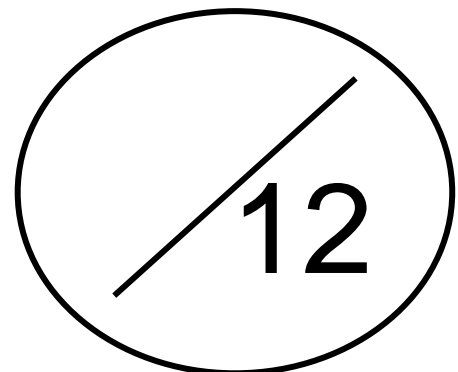
k)

$$\begin{array}{r} \text{C D A} \\ 7\ 2\ 7 \\ +\ 2\ 8\ 4 \\ \hline \\ \hline \end{array}$$

l)

$$\begin{array}{r} \text{C D A} \\ 6\ 7\ 9 \\ -\ 1\ 4\ 2 \\ \hline \\ \hline \end{array}$$

Cá mhéad a fuair tú ceart?



Maths Homework 6

Complete these sums.

a)

	H	T	U
	1	7	3
+	1	1	8
<hr/>			
<hr/>			

b)

	H	T	U
	2	3	9
-	1	6	6
<hr/>			
<hr/>			

c)

	H	T	U
	3	4	9
-	2	0	2
<hr/>			
<hr/>			

d)

	H	T	U
	4	4	1
+	2	8	9
<hr/>			
<hr/>			

e)

	H	T	U
	5	3	3
-	2	7	8
<hr/>			
<hr/>			

f)

	H	T	U
	6	0	0
-	1	0	7
<hr/>			
<hr/>			

g)

	H	T	U
	7	3	4
+	3	2	8
<hr/>			
<hr/>			

h)

	H	T	U
	8	9	2
+	4	5	8
<hr/>			
<hr/>			

i)

	H	T	U
	9	3	9
+	3	5	7
<hr/>			
<hr/>			

j)

	H	T	U
	8	7	9
-	5	4	0
<hr/>			
<hr/>			

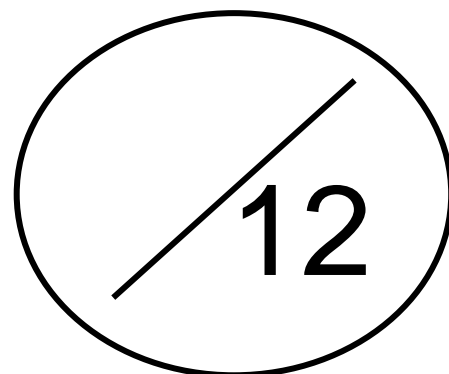
k)

	H	T	U
	7	2	7
+	2	8	4
<hr/>			
<hr/>			

l)

	H	T	U
	6	7	9
-	1	4	2
<hr/>			
<hr/>			

**How many did
you get correct?**



Obair Bhaile Mata 7

Déan na suimeanna iolraithe agus roinnte seo.

a) $14 \div 2 = \underline{\quad}$

b) $36 \div 6 = \underline{\quad}$

c) $3 \times 5 = \underline{\quad}$

d) $7 \times 7 = \underline{\quad}$

e) $20 \div 4 = \underline{\quad}$

f) $8 \times 8 = \underline{\quad}$

g) $5 \times 8 = \underline{\quad}$

h) $10 \div 10 = \underline{\quad}$

i) $6 \times 3 = \underline{\quad}$

j) $9 \times 4 = \underline{\quad}$

k) $35 \div 7 = \underline{\quad}$

l) $10 \times 1 = \underline{\quad}$

m) $72 \div 8 = \underline{\quad}$

n) $9 \div 9 = \underline{\quad}$

o) $18 \div 9 = \underline{\quad}$

p) $9 \times 4 = \underline{\quad}$

q) $10 \times 6 = \underline{\quad}$

r) $24 \div 8 = \underline{\quad}$

s) $12 \div 3 = \underline{\quad}$

t) $8 \times 0 = \underline{\quad}$

u) $2 \times 8 = \underline{\quad}$

v) $70 \div 7 = \underline{\quad}$


w) $4 \times 7 = \underline{\quad}$

x) $7 \times 0 = \underline{\quad}$

y) $30 \div 5 = \underline{\quad}$

z) $12 \div 6 = \underline{\quad}$

**Cá mhéad a
fuair tú ceart?**



Maths Homework 7

Complete these multiplication and division sums.

a) $14 \div 2 = \underline{\quad}$

b) $36 \div 6 = \underline{\quad}$

c) $3 \times 5 = \underline{\quad}$

d) $7 \times 7 = \underline{\quad}$

e) $20 \div 4 = \underline{\quad}$

f) $8 \times 8 = \underline{\quad}$

g) $5 \times 8 = \underline{\quad}$

h) $10 \div 10 = \underline{\quad}$

i) $6 \times 3 = \underline{\quad}$

j) $9 \times 4 = \underline{\quad}$

k) $35 \div 7 = \underline{\quad}$

l) $10 \times 1 = \underline{\quad}$

m) $72 \div 8 = \underline{\quad}$

n) $9 \div 9 = \underline{\quad}$

o) $18 \div 9 = \underline{\quad}$

p) $9 \times 4 = \underline{\quad}$

q) $10 \times 6 = \underline{\quad}$

r) $24 \div 8 = \underline{\quad}$

s) $12 \div 3 = \underline{\quad}$

t) $8 \times 0 = \underline{\quad}$

u) $2 \times 8 = \underline{\quad}$

v) $70 \div 7 = \underline{\quad}$


w) $4 \times 7 = \underline{\quad}$

x) $7 \times 0 = \underline{\quad}$

y) $30 \div 5 = \underline{\quad}$

z) $12 \div 6 = \underline{\quad}$

**How many did
you get correct?**



Obair Bhaile Mata 8

1. Scríobh an uimhir 5202 i bhfocail.

2. Scríobh an uimhir *seacht míle, ceithre chéad daichead a seacht* i bhfigiúirí.


3. Cá mhéad airgid atá léirithe thíos?



4. Cad é an t-am atá léirithe ar an chlog seo thíos?



5. Cá mhéad slios atá ar an chruth seo thíos?



6. Scríobh síos trí rud atá níos faide ná méadar.

7. Cé acu an ceann corr thíos?

Liam

Seán

Nóra

Ciarán

Maths Homework 8

1. Write the number 5202 in words.

2. Write the number *seven thousand, four hundred and forty seven* in figures.


3. How much money is shown below?



4. What time is shown on this clock?



5. How many sides does this shape have?



6. Write down three things that are longer than a metre.

7. Which is the odd one out?

Liam

Seán

Nóra

Ciarán

Obair Bhaile Mata 9

Déan na suimeanna roinnte seo.

a) $18 \div 2 = \underline{\quad}$

b) $15 \div 3 = \underline{\quad}$

c) $32 \div 4 = \underline{\quad}$

d) $10 \div 5 = \underline{\quad}$

e) $48 \div 6 = \underline{\quad}$

f) $21 \div 7 = \underline{\quad}$

g) $40 \div 8 = \underline{\quad}$

h) $45 \div 9 = \underline{\quad}$

i) $20 \div 10 = \underline{\quad}$

j) $14 \div 2 = \underline{\quad}$

k) $30 \div 3 = \underline{\quad}$

l) $28 \div 4 = \underline{\quad}$

m) $50 \div 5 = \underline{\quad}$

n) $18 \div 6 = \underline{\quad}$

o) $63 \div 7 = \underline{\quad}$

p) $56 \div 8 = \underline{\quad}$

q) $27 \div 9 = \underline{\quad}$

r) $40 \div 10 = \underline{\quad}$

s) $10 \div 2 = \underline{\quad}$

t) $6 \div 3 = \underline{\quad}$

u) $24 \div 4 = \underline{\quad}$

v) $20 \div 5 = \underline{\quad}$


w) $42 \div 6 = \underline{\quad}$

x) $14 \div 7 = \underline{\quad}$

y) $72 \div 8 = \underline{\quad}$

z) $90 \div 9 = \underline{\quad}$

**Cá mhéad a
fuair tú ceart?**



Maths Homework 9

Complete these division sums.

a) $18 \div 2 = \underline{\quad}$

b) $15 \div 3 = \underline{\quad}$

c) $32 \div 4 = \underline{\quad}$

d) $10 \div 5 = \underline{\quad}$

e) $48 \div 6 = \underline{\quad}$

f) $21 \div 7 = \underline{\quad}$

g) $40 \div 8 = \underline{\quad}$

h) $45 \div 9 = \underline{\quad}$

i) $20 \div 10 = \underline{\quad}$

j) $14 \div 2 = \underline{\quad}$

k) $30 \div 3 = \underline{\quad}$

l) $28 \div 4 = \underline{\quad}$

m) $50 \div 5 = \underline{\quad}$

n) $18 \div 6 = \underline{\quad}$

o) $63 \div 7 = \underline{\quad}$

p) $56 \div 8 = \underline{\quad}$

q) $27 \div 9 = \underline{\quad}$

r) $40 \div 10 = \underline{\quad}$

s) $10 \div 2 = \underline{\quad}$

t) $6 \div 3 = \underline{\quad}$

u) $24 \div 4 = \underline{\quad}$

v) $20 \div 5 = \underline{\quad}$


w) $42 \div 6 = \underline{\quad}$

x) $14 \div 7 = \underline{\quad}$

y) $72 \div 8 = \underline{\quad}$

z) $90 \div 9 = \underline{\quad}$

**How many did
you get correct?**



Obair Bhaile Mata 10

Déan na suimeanna seo.

a)

$$\begin{array}{r} \text{C D A} \\ 1 \ 8 \ 4 \\ + 1 \ 3 \ 8 \\ \hline \\ \hline \end{array}$$

b)

$$\begin{array}{r} \text{C D A} \\ 2 \ 8 \ 4 \\ - 1 \ 3 \ 7 \\ \hline \\ \hline \end{array}$$

c)

$$\begin{array}{r} \text{C D A} \\ 3 \ 7 \ 6 \\ - 2 \ 5 \ 0 \\ \hline \\ \hline \end{array}$$

d)

$$\begin{array}{r} \text{C D A} \\ 4 \ 8 \ 6 \\ + 2 \ 4 \ 8 \\ \hline \\ \hline \end{array}$$

e)

$$\begin{array}{r} \text{C D A} \\ 5 \ 4 \ 8 \\ - 2 \ 8 \ 5 \\ \hline \\ \hline \end{array}$$

f)

$$\begin{array}{r} \text{C D A} \\ 6 \ 2 \ 5 \\ - 1 \ 9 \ 9 \\ \hline \\ \hline \end{array}$$

g)

$$\begin{array}{r} \text{C D A} \\ 7 \ 4 \ 2 \\ + 3 \ 8 \ 7 \\ \hline \\ \hline \end{array}$$

h)

$$\begin{array}{r} \text{C D A} \\ 8 \ 8 \ 5 \\ + 4 \ 4 \ 8 \\ \hline \\ \hline \end{array}$$

i)

$$\begin{array}{r} \text{C D A} \\ 9 \ 5 \ 2 \\ + 3 \ 7 \ 9 \\ \hline \\ \hline \end{array}$$

j)

$$\begin{array}{r} \text{C D A} \\ 8 \ 2 \ 8 \\ - 5 \ 5 \ 7 \\ \hline \\ \hline \end{array}$$

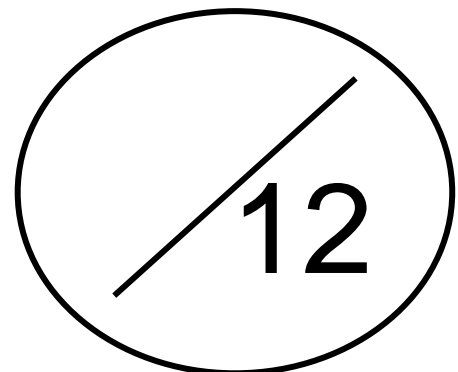
k)

$$\begin{array}{r} \text{C D A} \\ 7 \ 3 \ 8 \\ + 2 \ 7 \ 0 \\ \hline \\ \hline \end{array}$$

l)

$$\begin{array}{r} \text{C D A} \\ 6 \ 8 \ 3 \\ - 1 \ 4 \ 7 \\ \hline \\ \hline \end{array}$$

Cá mhéad a fuair tú ceart?



Maths Homework 10

Complete these sums.

a)

	H	T	U
	1	8	4
+	1	3	8
<hr/>			
<hr/>			

b)

	H	T	U
	2	8	4
-	1	3	7
<hr/>			
<hr/>			

c)

	H	T	U
	3	7	6
-	2	5	0
<hr/>			
<hr/>			

d)

	H	T	U
	4	8	6
+	2	4	8
<hr/>			
<hr/>			

e)

	H	T	U
	5	4	8
-	2	8	5
<hr/>			
<hr/>			

f)

	H	T	U
	6	2	5
-	1	9	9
<hr/>			
<hr/>			

g)

	H	T	U
	7	4	2
+	3	8	7
<hr/>			
<hr/>			

h)

	H	T	U
	8	8	5
+	4	4	8
<hr/>			
<hr/>			

i)

	H	T	U
	9	5	2
+	3	7	9
<hr/>			
<hr/>			

j)

	H	T	U
	8	2	8
-	5	5	7
<hr/>			
<hr/>			

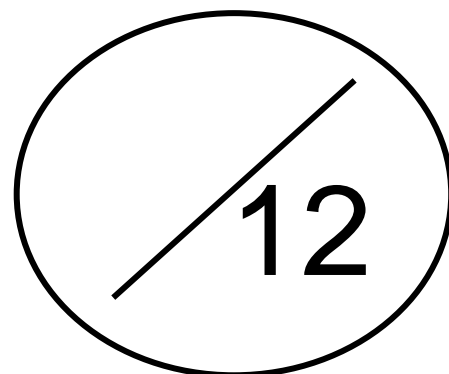
k)

	H	T	U
	7	3	8
+	2	7	0
<hr/>			
<hr/>			

l)

	H	T	U
	6	8	3
-	1	4	7
<hr/>			
<hr/>			

**How many did
you get correct?**



Obair Bhaile Mata 11

Déan na suimeanna iolraithe agus roinnte seo.

a) $6 \div 2 = \underline{\quad}$

b) $30 \div 6 = \underline{\quad}$

c) $3 \times 7 = \underline{\quad}$

d) $7 \times 5 = \underline{\quad}$

e) $20 \div 4 = \underline{\quad}$

f) $8 \times 4 = \underline{\quad}$

g) $5 \times 3 = \underline{\quad}$

h) $70 \div 10 = \underline{\quad}$

i) $6 \times 5 = \underline{\quad}$

j) $9 \times 8 = \underline{\quad}$

k) $56 \div 7 = \underline{\quad}$

l) $10 \times 5 = \underline{\quad}$

m) $16 \div 8 = \underline{\quad}$

n) $36 \div 9 = \underline{\quad}$

o) $36 \div 9 = \underline{\quad}$

p) $9 \times 4 = \underline{\quad}$

q) $10 \times 3 = \underline{\quad}$

r) $32 \div 8 = \underline{\quad}$

s) $18 \div 3 = \underline{\quad}$

t) $8 \times 5 = \underline{\quad}$

u) $2 \times 5 = \underline{\quad}$

v) $35 \div 7 = \underline{\quad}$


w) $4 \times 8 = \underline{\quad}$

x) $7 \times 6 = \underline{\quad}$

y) $45 \div 5 = \underline{\quad}$

z) $54 \div 6 = \underline{\quad}$

**Cá mhéad a
fuair tú ceart?**



Maths Homework 11

Complete these multiplication and division.

a) $6 \div 2 = \underline{\quad}$

b) $30 \div 6 = \underline{\quad}$

c) $3 \times 7 = \underline{\quad}$

d) $7 \times 5 = \underline{\quad}$

e) $20 \div 4 = \underline{\quad}$

f) $8 \times 4 = \underline{\quad}$

g) $5 \times 3 = \underline{\quad}$

h) $70 \div 10 = \underline{\quad}$

i) $6 \times 5 = \underline{\quad}$

j) $9 \times 8 = \underline{\quad}$

k) $56 \div 7 = \underline{\quad}$

l) $10 \times 5 = \underline{\quad}$

m) $16 \div 8 = \underline{\quad}$

n) $36 \div 9 = \underline{\quad}$

o) $36 \div 9 = \underline{\quad}$

p) $9 \times 4 = \underline{\quad}$

q) $10 \times 3 = \underline{\quad}$

r) $32 \div 8 = \underline{\quad}$

s) $18 \div 3 = \underline{\quad}$

t) $8 \times 5 = \underline{\quad}$

u) $2 \times 5 = \underline{\quad}$

v) $35 \div 7 = \underline{\quad}$


w) $4 \times 8 = \underline{\quad}$

x) $7 \times 6 = \underline{\quad}$

y) $45 \div 5 = \underline{\quad}$

z) $54 \div 6 = \underline{\quad}$

**How many did
you get correct?**



Obair Bhaile Mata 12

1. Scríobh an uimhir 7530 i bhfocail.

2. Scríobh an uimhir *naoi míle, sé chéad ochtó a cúig* i bhfigiúirí.

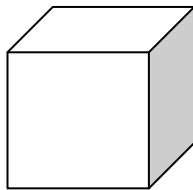
3. Cá mhéad airgid atá léirithe thíos?



4. Cad é an t-am atá léirithe ar an chlog seo thíos?



5. Cá mhéad aghaidh atá ag an chruth seo thíos?



6. Scríobh síos trí rud atá níos éadroime ná cileagram.

7. Cé acu an ceann corr thíos?

cóta

hata

scairf

ceapaire

Maths Homework 12

1. Write the number in 7530 words.

2. Write the number *nine thousand, six hundred and eighty five* in figures.

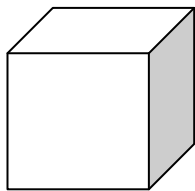
3. How much money is shown below?



4. What time is shown on this clock?



5. How many faces does this shape have?



6. Write down three things that are lighter than a kilogram.

7. Which is the odd one out?

coat

hat

scarf

sandwich

Obair Bhaile Mata 13

Déan na suimeanna roinnte seo go néata.

a) $6 \div 2 = \underline{\quad}$

b) $15 \div 3 = \underline{\quad}$

c) $20 \div 4 = \underline{\quad}$

d) $15 \div 5 = \underline{\quad}$

e) $30 \div 6 = \underline{\quad}$

f) $13 \div 7 = \underline{\quad}$

g) $48 \div 8 = \underline{\quad}$

h) $27 \div 9 = \underline{\quad}$

i) $30 \div 10 = \underline{\quad}$

j) $8 \div 2 = \underline{\quad}$

k) $30 \div 3 = \underline{\quad}$

l) $8 \div 4 = \underline{\quad}$

m) $30 \div 5 = \underline{\quad}$

n) $30 \div 6 = \underline{\quad}$

o) $35 \div 7 = \underline{\quad}$

p) $32 \div 8 = \underline{\quad}$

q) $45 \div 9 = \underline{\quad}$

r) $40 \div 10 = \underline{\quad}$

s) $18 \div 2 = \underline{\quad}$

t) $21 \div 3 = \underline{\quad}$

u) $16 \div 4 = \underline{\quad}$

v) $25 \div 5 = \underline{\quad}$

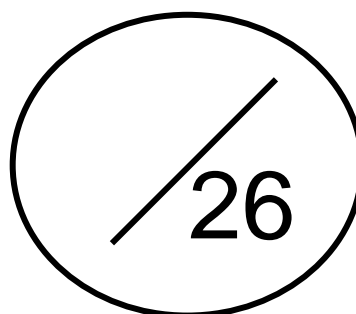
w) $12 \div 6 = \underline{\quad}$

x) $14 \div 7 = \underline{\quad}$

y) $64 \div 8 = \underline{\quad}$

z) $54 \div 9 = \underline{\quad}$

**Cá mhéad a
fuair tú ceart?**



Maths Homework 13

Complete these division sums.

a) $6 \div 2 = \underline{\quad}$

b) $15 \div 3 = \underline{\quad}$

c) $20 \div 4 = \underline{\quad}$

d) $15 \div 5 = \underline{\quad}$

e) $30 \div 6 = \underline{\quad}$

f) $13 \div 7 = \underline{\quad}$

g) $48 \div 8 = \underline{\quad}$

h) $27 \div 9 = \underline{\quad}$

i) $30 \div 10 = \underline{\quad}$

j) $8 \div 2 = \underline{\quad}$

k) $30 \div 3 = \underline{\quad}$

l) $8 \div 4 = \underline{\quad}$

m) $30 \div 5 = \underline{\quad}$

n) $30 \div 6 = \underline{\quad}$

o) $35 \div 7 = \underline{\quad}$

p) $32 \div 8 = \underline{\quad}$

q) $45 \div 9 = \underline{\quad}$

r) $40 \div 10 = \underline{\quad}$

s) $18 \div 2 = \underline{\quad}$

t) $21 \div 3 = \underline{\quad}$

u) $16 \div 4 = \underline{\quad}$

v) $25 \div 5 = \underline{\quad}$

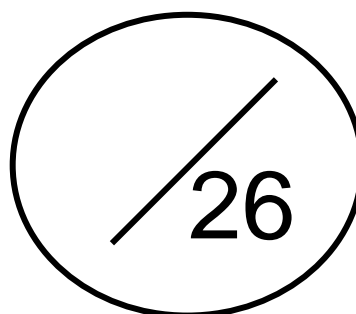
w) $12 \div 6 = \underline{\quad}$

x) $14 \div 7 = \underline{\quad}$

y) $64 \div 8 = \underline{\quad}$

z) $54 \div 9 = \underline{\quad}$

**How many did
you get correct?**



Obair Bhaile Mata 14

Déan na suimeanna seo.

a)

$$\begin{array}{r} \text{C D A} \\ 1\ 7\ 4 \\ +\ 1\ 2\ 9 \\ \hline \\ \hline \end{array}$$

b)

$$\begin{array}{r} \text{C D A} \\ 2\ 3\ 5 \\ -\ 1\ 1\ 9 \\ \hline \\ \hline \end{array}$$

c)

$$\begin{array}{r} \text{C D A} \\ 3\ 3\ 2 \\ -\ 2\ 7\ 8 \\ \hline \\ \hline \end{array}$$

d)

$$\begin{array}{r} \text{C D A} \\ 4\ 5\ 2 \\ +\ 2\ 7\ 4 \\ \hline \\ \hline \end{array}$$

e)

$$\begin{array}{r} \text{C D A} \\ 5\ 7\ 4 \\ -\ 2\ 2\ 8 \\ \hline \\ \hline \end{array}$$

f)

$$\begin{array}{r} \text{C D A} \\ 6\ 8\ 7 \\ -\ 1\ 2\ 5 \\ \hline \\ \hline \end{array}$$

g)

$$\begin{array}{r} \text{C D A} \\ 7\ 8\ 1 \\ +\ 3\ 4\ 9 \\ \hline \\ \hline \end{array}$$

h)

$$\begin{array}{r} \text{C D A} \\ 8\ 6\ 4 \\ +\ 4\ 3\ 7 \\ \hline \\ \hline \end{array}$$

i)

$$\begin{array}{r} \text{C D A} \\ 9\ 3\ 6 \\ +\ 3\ 7\ 2 \\ \hline \\ \hline \end{array}$$

j)

$$\begin{array}{r} \text{C D A} \\ 8\ 5\ 4 \\ -\ 5\ 3\ 0 \\ \hline \\ \hline \end{array}$$

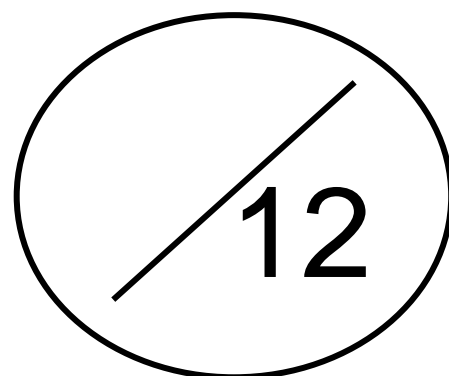
k)

$$\begin{array}{r} \text{C D A} \\ 7\ 2\ 4 \\ +\ 2\ 7\ 9 \\ \hline \\ \hline \end{array}$$

l)

$$\begin{array}{r} \text{C D A} \\ 6\ 4\ 1 \\ -\ 1\ 8\ 5 \\ \hline \\ \hline \end{array}$$

Cá mhéad a fuair tú ceart?



Maths Homework 14

Complete these sums.

a)

	H	T	U
	1	7	4
+	1	2	9
<hr/>			
<hr/>			

b)

	H	T	U
	2	3	5
-	1	1	9
<hr/>			
<hr/>			

c)

	H	T	U
	3	3	2
-	2	7	8
<hr/>			
<hr/>			

d)

	H	T	U
	4	5	2
+	2	7	4
<hr/>			
<hr/>			

e)

	H	T	U
	5	7	4
-	2	2	8
<hr/>			
<hr/>			

f)

	H	T	U
	6	8	7
-	1	2	5
<hr/>			
<hr/>			

g)

	H	T	U
	7	8	1
+	3	4	9
<hr/>			
<hr/>			

h)

	H	T	U
	8	6	4
+	4	3	7
<hr/>			
<hr/>			

i)

	H	T	U
	9	3	6
+	3	7	2
<hr/>			
<hr/>			

j)

	H	T	U
	8	5	4
-	5	3	0
<hr/>			
<hr/>			

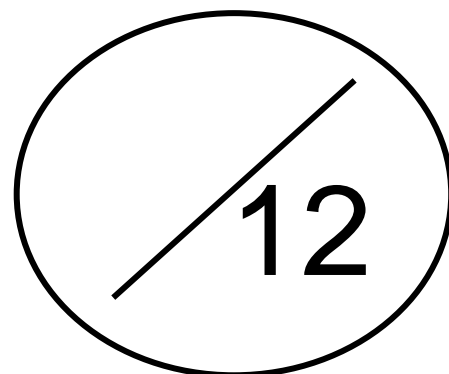
k)

	H	T	U
	7	2	4
+	2	7	9
<hr/>			
<hr/>			

l)

	H	T	U
	6	4	1
-	1	8	5
<hr/>			
<hr/>			

**How many did
you get correct?**



Obair Bhaile Mata 15

Déan na suimeanna iolraithe agus roinnte seo.

a) $10 \div 2 = \underline{\quad}$

b) $24 \div 6 = \underline{\quad}$

c) $3 \times 3 = \underline{\quad}$

d) $7 \times 8 = \underline{\quad}$

e) $12 \div 4 = \underline{\quad}$

f) $8 \times 3 = \underline{\quad}$

g) $5 \times 8 = \underline{\quad}$

h) $20 \div 10 = \underline{\quad}$

i) $6 \times 9 = \underline{\quad}$

j) $9 \times 10 = \underline{\quad}$

k) $49 \div 7 = \underline{\quad}$

l) $10 \times 9 = \underline{\quad}$

m) $64 \div 8 = \underline{\quad}$

n) $36 \div 9 = \underline{\quad}$

o) $81 \div 9 = \underline{\quad}$

p) $9 \times 3 = \underline{\quad}$

q) $10 \times 0 = \underline{\quad}$

r) $64 \div 8 = \underline{\quad}$

s) $15 \div 3 = \underline{\quad}$

t) $8 \times 5 = \underline{\quad}$

u) $2 \times 4 = \underline{\quad}$

v) $35 \div 7 = \underline{\quad}$


w) $4 \times 7 = \underline{\quad}$

x) $7 \times 0 = \underline{\quad}$

y) $15 \div 5 = \underline{\quad}$

z) $6 \div 6 = \underline{\quad}$

**Cá mhéad a
fuair tú ceart?**



Maths Homework 15

Complete these multiplication and division sums.

a) $10 \div 2 = \underline{\quad}$

b) $24 \div 6 = \underline{\quad}$

c) $3 \times 3 = \underline{\quad}$

d) $7 \times 8 = \underline{\quad}$

e) $12 \div 4 = \underline{\quad}$

f) $8 \times 3 = \underline{\quad}$

g) $5 \times 8 = \underline{\quad}$

h) $20 \div 10 = \underline{\quad}$

i) $6 \times 9 = \underline{\quad}$

j) $9 \times 10 = \underline{\quad}$

k) $49 \div 7 = \underline{\quad}$

l) $10 \times 9 = \underline{\quad}$

m) $64 \div 8 = \underline{\quad}$

n) $36 \div 9 = \underline{\quad}$

o) $81 \div 9 = \underline{\quad}$

p) $9 \times 3 = \underline{\quad}$

q) $10 \times 0 = \underline{\quad}$

r) $64 \div 8 = \underline{\quad}$

s) $15 \div 3 = \underline{\quad}$

t) $8 \times 5 = \underline{\quad}$

u) $2 \times 4 = \underline{\quad}$

v) $35 \div 7 = \underline{\quad}$

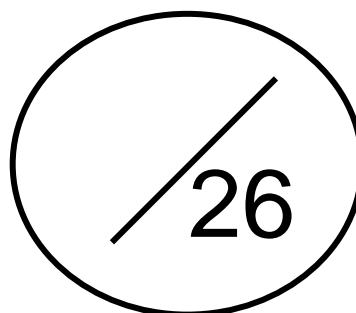
w) $4 \times 7 = \underline{\quad}$

x) $7 \times 0 = \underline{\quad}$

y) $15 \div 5 = \underline{\quad}$

z) $6 \div 6 = \underline{\quad}$

**How many did
you get correct?**



Obair Bhaile Mata 16

1. Scríobh an uimhir 7642 i bhfocail.

2. Scríobh an uimhir *míle, ocht gcéad is a ceathair déag* i bhfigiúirí.

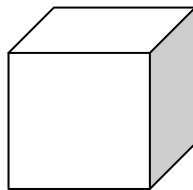
3. Cá mhéad airgid atá léirithe thíos?



4. Cad é an t-am atá léirithe ar an chlog seo thíos?



5. Cá mhéad faobhar atá ag an chruth seo thíos?



6. Scríobh síos trí rud a choinníonn níos mó ná lítear.

7. Cé acu an ceann corr thíos?

séabra

capall

asal

caora

Maths Homework 16

1. Write the number 7642 in words.

2. Write the number *one thousand, eight hundred and fourteen* in figures.

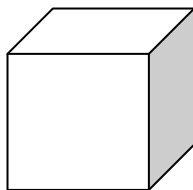
3. How much money is shown below?



4. What time is shown on this clock?



5. How many edges does this shape have?



6. Write down three things that hold less than a litre.

7. Which is the odd one out?

zebra

horse

donkey

sheep

Obair Bhaile Mata 17

Déan na suimeanna roinnte seo.

a) $6 \div 2 = \underline{\quad}$

b) $24 \div 3 = \underline{\quad}$

c) $8 \div 4 = \underline{\quad}$

d) $10 \div 5 = \underline{\quad}$

e) $12 \div 6 = \underline{\quad}$

f) $21 \div 7 = \underline{\quad}$

g) $24 \div 8 = \underline{\quad}$

h) $18 \div 9 = \underline{\quad}$

i) $80 \div 10 = \underline{\quad}$

j) $2 \div 2 = \underline{\quad}$

k) $15 \div 3 = \underline{\quad}$

l) $16 \div 4 = \underline{\quad}$

m) $30 \div 5 = \underline{\quad}$

n) $18 \div 6 = \underline{\quad}$

o) $49 \div 7 = \underline{\quad}$

p) $16 \div 8 = \underline{\quad}$

q) $36 \div 9 = \underline{\quad}$

r) $40 \div 10 = \underline{\quad}$

s) $4 \div 2 = \underline{\quad}$

t) $6 \div 3 = \underline{\quad}$

u) $12 \div 4 = \underline{\quad}$

v) $25 \div 5 = \underline{\quad}$


w) $30 \div 6 = \underline{\quad}$

x) $14 \div 7 = \underline{\quad}$

y) $56 \div 8 = \underline{\quad}$

z) $72 \div 9 = \underline{\quad}$

**Cá mhéad a
fuair tú ceart?**



Maths Homework 17

Complete these division sums.

a) $6 \div 2 = \underline{\quad}$

b) $24 \div 3 = \underline{\quad}$

c) $8 \div 4 = \underline{\quad}$

d) $10 \div 5 = \underline{\quad}$

e) $12 \div 6 = \underline{\quad}$

f) $21 \div 7 = \underline{\quad}$

g) $24 \div 8 = \underline{\quad}$

h) $18 \div 9 = \underline{\quad}$

i) $80 \div 10 = \underline{\quad}$

j) $2 \div 2 = \underline{\quad}$

k) $15 \div 3 = \underline{\quad}$

l) $16 \div 4 = \underline{\quad}$

m) $30 \div 5 = \underline{\quad}$

n) $18 \div 6 = \underline{\quad}$

o) $49 \div 7 = \underline{\quad}$

p) $16 \div 8 = \underline{\quad}$

q) $36 \div 9 = \underline{\quad}$

r) $40 \div 10 = \underline{\quad}$

s) $4 \div 2 = \underline{\quad}$

t) $6 \div 3 = \underline{\quad}$

u) $12 \div 4 = \underline{\quad}$

v) $25 \div 5 = \underline{\quad}$

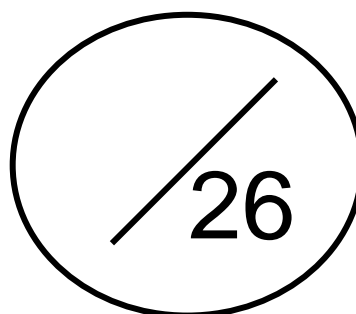
w) $30 \div 6 = \underline{\quad}$

x) $14 \div 7 = \underline{\quad}$

y) $56 \div 8 = \underline{\quad}$

z) $72 \div 9 = \underline{\quad}$

**How many did
you get correct?**



Obair Bhaile Mata 18

a)

$$\begin{array}{r} \text{C D A} \\ 1\ 4\ 5 \\ + 1\ 2\ 8 \\ \hline \\ \hline \end{array}$$

b)

$$\begin{array}{r} \text{C D A} \\ 2\ 6\ 6 \\ - 1\ 4\ 6 \\ \hline \\ \hline \end{array}$$

c)

$$\begin{array}{r} \text{C D A} \\ 3\ 0\ 3 \\ - 2\ 2\ 7 \\ \hline \\ \hline \end{array}$$

d)

$$\begin{array}{r} \text{C D A} \\ 4\ 3\ 6 \\ + 2\ 7\ 5 \\ \hline \\ \hline \end{array}$$

e)

$$\begin{array}{r} \text{C D A} \\ 5\ 8\ 3 \\ - 2\ 6\ 1 \\ \hline \\ \hline \end{array}$$

f)

$$\begin{array}{r} \text{C D A} \\ 6\ 9\ 2 \\ - 1\ 5\ 7 \\ \hline \\ \hline \end{array}$$

g)

$$\begin{array}{r} \text{C D A} \\ 7\ 1\ 6 \\ + 3\ 4\ 7 \\ \hline \\ \hline \end{array}$$

h)

$$\begin{array}{r} \text{C D A} \\ 8\ 8\ 7 \\ + 4\ 1\ 1 \\ \hline \\ \hline \end{array}$$

i)

$$\begin{array}{r} \text{C D A} \\ 9\ 4\ 7 \\ + 3\ 8\ 7 \\ \hline \\ \hline \end{array}$$

j)

$$\begin{array}{r} \text{C D A} \\ 8\ 8\ 4 \\ - 5\ 3\ 6 \\ \hline \\ \hline \end{array}$$


k)

$$\begin{array}{r} \text{C D A} \\ 7\ 4\ 5 \\ + 2\ 8\ 8 \\ \hline \\ \hline \end{array}$$

l)

$$\begin{array}{r} \text{C D A} \\ 6\ 8\ 1 \\ - 1\ 4\ 7 \\ \hline \\ \hline \end{array}$$

**Cá mhéad a
fuair tú ceart?**



Maths Homework 18

a)

	H	T	U
	1	4	5
+	1	2	8
<hr/>			
<hr/>			

b)

	H	T	U
	2	6	6
-	1	4	6
<hr/>			
<hr/>			

c)

	H	T	U
	3	0	3
-	2	2	7
<hr/>			
<hr/>			

d)

	H	T	U
	4	3	6
+	2	7	5
<hr/>			
<hr/>			

e)

	H	T	U
	5	8	3
-	2	6	1
<hr/>			
<hr/>			

f)

	H	T	U
	6	9	2
-	1	5	7
<hr/>			
<hr/>			

g)

	H	T	U
	7	1	6
+	3	4	7
<hr/>			
<hr/>			

h)

	H	T	U
	8	8	7
+	4	1	1
<hr/>			
<hr/>			

i)

	H	T	U
	9	4	7
+	3	8	7
<hr/>			
<hr/>			

j)

	H	T	U
	8	8	4
-	5	3	6
<hr/>			
<hr/>			

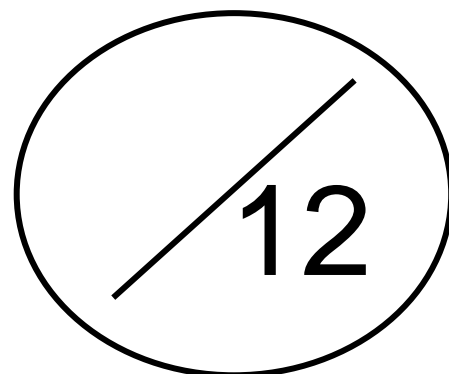
k)

	H	T	U
	7	4	5
+	2	8	8
<hr/>			
<hr/>			

l)

	H	T	U
	6	8	1
-	1	4	7
<hr/>			
<hr/>			

**How many did
you get correct?**



Obair Bhaile Mata 19

Déan na suimeanna iolraithe agus roinnte seo.

a) $10 \div 2 = \underline{\quad}$

b) $18 \div 6 = \underline{\quad}$

c) $3 \times 7 = \underline{\quad}$

d) $7 \times 5 = \underline{\quad}$

e) $20 \div 4 = \underline{\quad}$

f) $8 \times 0 = \underline{\quad}$

g) $5 \times 5 = \underline{\quad}$

h) $90 \div 10 = \underline{\quad}$

i) $6 \times 5 = \underline{\quad}$

j) $9 \times 9 = \underline{\quad}$

k) $49 \div 7 = \underline{\quad}$

l) $10 \times 4 = \underline{\quad}$

m) $72 \div 8 = \underline{\quad}$

n) $36 \div 9 = \underline{\quad}$

o) $54 \div 9 = \underline{\quad}$

p) $9 \times 4 = \underline{\quad}$

q) $10 \times 3 = \underline{\quad}$

r) $56 \div 8 = \underline{\quad}$

s) $18 \div 3 = \underline{\quad}$

t) $8 \times 3 = \underline{\quad}$

u) $2 \times 0 = \underline{\quad}$

v) $42 \div 7 = \underline{\quad}$

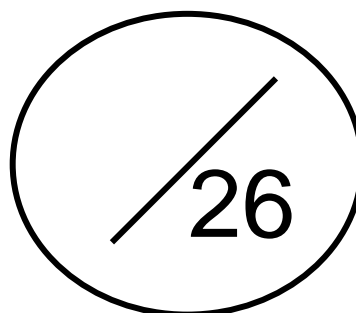
w) $4 \times 5 = \underline{\quad}$

x) $7 \times 1 = \underline{\quad}$

y) $20 \div 5 = \underline{\quad}$

z) $18 \div 6 = \underline{\quad}$

**Cá mhéad a
fuair tú ceart?**



Maths Homework 19

Complete these multiplication and division sums.

a) $10 \div 2 = \underline{\quad}$

b) $18 \div 6 = \underline{\quad}$

c) $3 \times 7 = \underline{\quad}$

d) $7 \times 5 = \underline{\quad}$

e) $20 \div 4 = \underline{\quad}$

f) $8 \times 0 = \underline{\quad}$

g) $5 \times 5 = \underline{\quad}$

h) $90 \div 10 = \underline{\quad}$

i) $6 \times 5 = \underline{\quad}$

j) $9 \times 9 = \underline{\quad}$

k) $49 \div 7 = \underline{\quad}$

l) $10 \times 4 = \underline{\quad}$

m) $72 \div 8 = \underline{\quad}$

n) $36 \div 9 = \underline{\quad}$

o) $54 \div 9 = \underline{\quad}$

p) $9 \times 4 = \underline{\quad}$

q) $10 \times 3 = \underline{\quad}$

r) $56 \div 8 = \underline{\quad}$

s) $18 \div 3 = \underline{\quad}$

t) $8 \times 3 = \underline{\quad}$

u) $2 \times 0 = \underline{\quad}$

v) $42 \div 7 = \underline{\quad}$

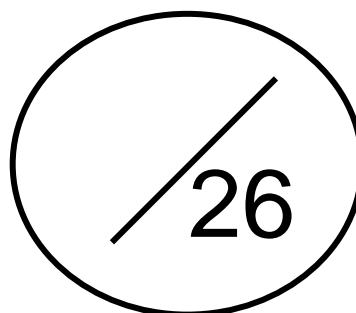
w) $4 \times 5 = \underline{\quad}$

x) $7 \times 1 = \underline{\quad}$

y) $20 \div 5 = \underline{\quad}$

z) $18 \div 6 = \underline{\quad}$

**How many did
you get correct?**




Obair Bhaile Mata 20

1. Scríobh an uimhir 7358 i bhfocail.

2. Scríobh an uimhir *dhá mhíle, cúig chéad caoga* i bhfigiúirí.

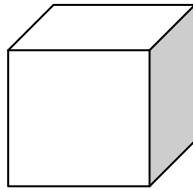
3. Cá mhéad airgid atá léirithe thíos?



4. Cad é an t-am atá léirithe ar an chlog seo thíos?



5. Cá mhéad rinn atá ag an chruth seo thíos?



6. Scríobh síos trí rud atá níos giorra ná méadar.

7. Cé acu an ceann corr thíos?

crann

bláth

lampa

fál

Maths Homework 20

1. Write the number 7358 in words.

2. Write the number *two thousand, five hundred and fifty* in figures.

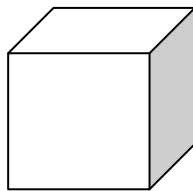
3. How much money is shown below?



4. What time is shown on this clock?



5. How many vertices does this shape have?



6. Write down three things that are shorter than a metre.

7. Which is the odd one out?

tree

flower

lamp

bush

Obair Bhaile Mata 21

Déan na suimeanna roinnte seo go néata.

a) $12 \div 2 = \underline{\quad}$

b) $3 \div 3 = \underline{\quad}$

c) $20 \div 4 = \underline{\quad}$

d) $25 \div 5 = \underline{\quad}$

e) $30 \div 6 = \underline{\quad}$

f) $42 \div 7 = \underline{\quad}$

g) $48 \div 8 = \underline{\quad}$

h) $45 \div 9 = \underline{\quad}$

i) $10 \div 10 = \underline{\quad}$

j) $8 \div 2 = \underline{\quad}$

k) $24 \div 3 = \underline{\quad}$

l) $28 \div 4 = \underline{\quad}$

m) $45 \div 5 = \underline{\quad}$

n) $36 \div 6 = \underline{\quad}$

o) $70 \div 7 = \underline{\quad}$

p) $40 \div 8 = \underline{\quad}$

q) $63 \div 9 = \underline{\quad}$

r) $70 \div 10 = \underline{\quad}$

s) $10 \div 2 = \underline{\quad}$

t) $15 \div 3 = \underline{\quad}$

u) $24 \div 4 = \underline{\quad}$

v) $40 \div 5 = \underline{\quad}$


w) $48 \div 6 = \underline{\quad}$

x) $35 \div 7 = \underline{\quad}$

y) $80 \div 8 = \underline{\quad}$

z) $9 \div 9 = \underline{\quad}$

**Cá mhéad a
fuair tú ceart?**



Maths Homework 21

Complete these division sums.

a) $12 \div 2 = \underline{\quad}$

b) $3 \div 3 = \underline{\quad}$

c) $20 \div 4 = \underline{\quad}$

d) $25 \div 5 = \underline{\quad}$

e) $30 \div 6 = \underline{\quad}$

f) $42 \div 7 = \underline{\quad}$

g) $48 \div 8 = \underline{\quad}$

h) $45 \div 9 = \underline{\quad}$

i) $10 \div 10 = \underline{\quad}$

j) $8 \div 2 = \underline{\quad}$

k) $24 \div 3 = \underline{\quad}$

l) $28 \div 4 = \underline{\quad}$

m) $45 \div 5 = \underline{\quad}$

n) $36 \div 6 = \underline{\quad}$

o) $70 \div 7 = \underline{\quad}$

p) $40 \div 8 = \underline{\quad}$

q) $63 \div 9 = \underline{\quad}$

r) $70 \div 10 = \underline{\quad}$

s) $10 \div 2 = \underline{\quad}$

t) $15 \div 3 = \underline{\quad}$

u) $24 \div 4 = \underline{\quad}$

v) $40 \div 5 = \underline{\quad}$

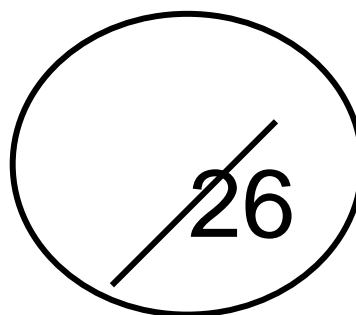
w) $48 \div 6 = \underline{\quad}$

x) $35 \div 7 = \underline{\quad}$

y) $80 \div 8 = \underline{\quad}$

z) $9 \div 9 = \underline{\quad}$

**How many did
you get correct?**



Obair Bhaile Mata 22

a)

$$\begin{array}{r} \text{C D A} \\ 1 2 7 \\ + 1 3 7 \\ \hline \\ \hline \end{array}$$

b)

$$\begin{array}{r} \text{C D A} \\ 2 9 7 \\ - 1 4 6 \\ \hline \\ \hline \end{array}$$

c)

$$\begin{array}{r} \text{C D A} \\ 3 2 2 \\ - 2 2 8 \\ \hline \\ \hline \end{array}$$

d)

$$\begin{array}{r} \text{C D A} \\ 4 4 0 \\ + 2 6 5 \\ \hline \\ \hline \end{array}$$

e)

$$\begin{array}{r} \text{C D A} \\ 5 2 7 \\ - 2 3 1 \\ \hline \\ \hline \end{array}$$

f)

$$\begin{array}{r} \text{C D A} \\ 6 1 6 \\ - 1 5 4 \\ \hline \\ \hline \end{array}$$

g)

$$\begin{array}{r} \text{C D A} \\ 7 8 2 \\ + 3 8 7 \\ \hline \\ \hline \end{array}$$

h)

$$\begin{array}{r} \text{C D A} \\ 8 4 0 \\ + 4 2 7 \\ \hline \\ \hline \end{array}$$

i)

$$\begin{array}{r} \text{C D A} \\ 9 4 7 \\ + 3 2 0 \\ \hline \\ \hline \end{array}$$

j)

$$\begin{array}{r} \text{C D A} \\ 8 6 2 \\ - 5 7 6 \\ \hline \\ \hline \end{array}$$

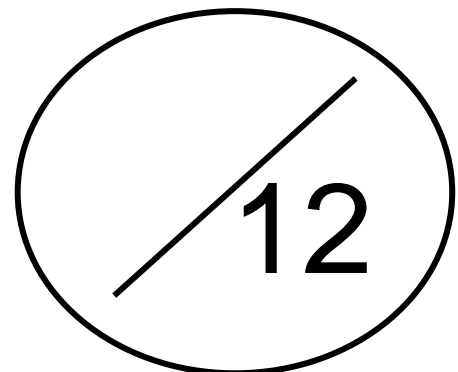
k)

$$\begin{array}{r} \text{C D A} \\ 7 9 3 \\ + 2 1 4 \\ \hline \\ \hline \end{array}$$

l)

$$\begin{array}{r} \text{C D A} \\ 6 0 0 \\ - 1 9 5 \\ \hline \\ \hline \end{array}$$

Cá mhéad a fuair tú ceart?



Maths Homework 22

a)

$$\begin{array}{r} \text{H T U} \\ 127 \\ + 137 \\ \hline \\ \hline \end{array}$$

b)

$$\begin{array}{r} \text{H T U} \\ 297 \\ - 146 \\ \hline \\ \hline \end{array}$$

c)

$$\begin{array}{r} \text{H T U} \\ 322 \\ - 228 \\ \hline \\ \hline \end{array}$$

d)

$$\begin{array}{r} \text{H T U} \\ 440 \\ + 265 \\ \hline \\ \hline \end{array}$$

e)

$$\begin{array}{r} \text{H T U} \\ 527 \\ - 231 \\ \hline \\ \hline \end{array}$$

f)

$$\begin{array}{r} \text{H T U} \\ 616 \\ - 154 \\ \hline \\ \hline \end{array}$$

g)

$$\begin{array}{r} \text{H T U} \\ 782 \\ + 387 \\ \hline \\ \hline \end{array}$$

h)

$$\begin{array}{r} \text{H T U} \\ 840 \\ + 427 \\ \hline \\ \hline \end{array}$$

i)

$$\begin{array}{r} \text{H T U} \\ 947 \\ + 320 \\ \hline \\ \hline \end{array}$$

j)

$$\begin{array}{r} \text{H T U} \\ 862 \\ - 576 \\ \hline \\ \hline \end{array}$$

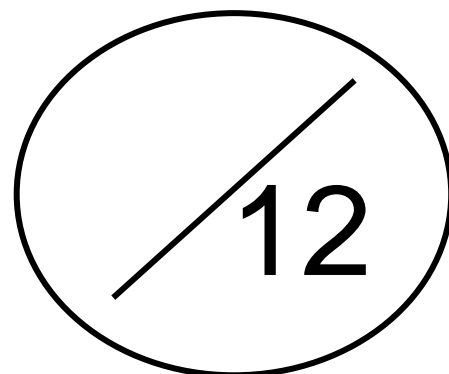
k)

$$\begin{array}{r} \text{H T U} \\ 793 \\ + 214 \\ \hline \\ \hline \end{array}$$

l)

$$\begin{array}{r} \text{H T U} \\ 600 \\ - 195 \\ \hline \\ \hline \end{array}$$

**How many did
you get correct?**



Obair Bhaile Mata 23

Déan na suimeanna iolraithe agus roinnte seo.

a) $18 \div 2 = \underline{\quad}$

b) $18 \div 6 = \underline{\quad}$

c) $3 \times 9 = \underline{\quad}$

d) $7 \times 0 = \underline{\quad}$

e) $36 \div 4 = \underline{\quad}$

f) $8 \times 8 = \underline{\quad}$

g) $5 \times 5 = \underline{\quad}$

h) $100 \div 10 = \underline{\quad}$

i) $6 \times 8 = \underline{\quad}$

j) $9 \times 6 = \underline{\quad}$

k) $56 \div 7 = \underline{\quad}$

l) $10 \times 2 = \underline{\quad}$

m) $56 \div 8 = \underline{\quad}$

n) $27 \div 9 = \underline{\quad}$

o) $72 \div 9 = \underline{\quad}$

p) $9 \times 4 = \underline{\quad}$

q) $10 \times 4 = \underline{\quad}$

r) $64 \div 8 = \underline{\quad}$

s) $21 \div 3 = \underline{\quad}$

t) $8 \times 5 = \underline{\quad}$

u) $2 \times 9 = \underline{\quad}$

v) $49 \div 7 = \underline{\quad}$

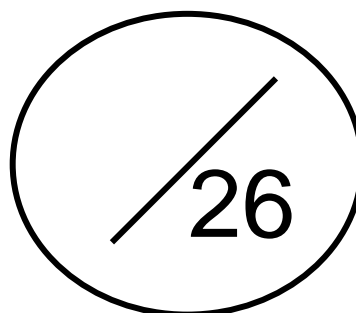
w) $4 \times 5 = \underline{\quad}$

x) $7 \times 3 = \underline{\quad}$

y) $35 \div 5 = \underline{\quad}$

z) $60 \div 6 = \underline{\quad}$

**Cá mhéad a
fuair tú ceart?**



Maths Homework 23

Complete these multiplication and division sums.

a) $18 \div 2 = \underline{\quad}$

b) $18 \div 6 = \underline{\quad}$

c) $3 \times 9 = \underline{\quad}$

d) $7 \times 0 = \underline{\quad}$

e) $36 \div 4 = \underline{\quad}$

f) $8 \times 8 = \underline{\quad}$

g) $5 \times 5 = \underline{\quad}$

h) $100 \div 10 = \underline{\quad}$

i) $6 \times 8 = \underline{\quad}$

j) $9 \times 6 = \underline{\quad}$

k) $56 \div 7 = \underline{\quad}$

l) $10 \times 2 = \underline{\quad}$

m) $56 \div 8 = \underline{\quad}$

n) $27 \div 9 = \underline{\quad}$

o) $72 \div 9 = \underline{\quad}$

p) $9 \times 4 = \underline{\quad}$

q) $10 \times 4 = \underline{\quad}$

r) $64 \div 8 = \underline{\quad}$

s) $21 \div 3 = \underline{\quad}$

t) $8 \times 5 = \underline{\quad}$

u) $2 \times 9 = \underline{\quad}$

v) $49 \div 7 = \underline{\quad}$

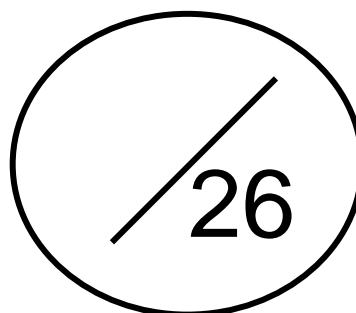
w) $4 \times 5 = \underline{\quad}$

x) $7 \times 3 = \underline{\quad}$

y) $35 \div 5 = \underline{\quad}$

z) $60 \div 6 = \underline{\quad}$

**How many did
you get correct?**



Obair Bhaile Mata 24


1. Scríobh an uimhir 4829 i bhfocail.

2. Scríobh an uimhir *sé mhíle, trí chéad daichead a naoi* i bhfigiúirí.

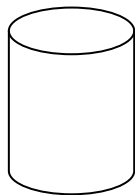
3. Cá mhéad airgid atá léirithe thíos?



4. Cad é an t-am atá léirithe ar an chlog seo thíos?



5. Cá mhéad faobhar atá ag an chruth seo thíos?



6. Scríobh síos trí rud a choinníonn níos lú ná lítear.

7. Cé acu an ceann corr thíos?

girseach

gasúr

fear

buachaill

Maths Homework 24

1. Write the number 4829 in words.

2. Write the number *six thousand, three hundred and forty nine* in figures.

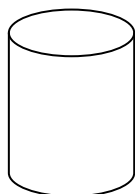
3. How much money is shown below?



4. What time is shown on this clock?



5. How many edges does this shape have?



6. Write down three things that hold less than a litre.

7. Which is the odd one out?

girl

boy

man

lad

