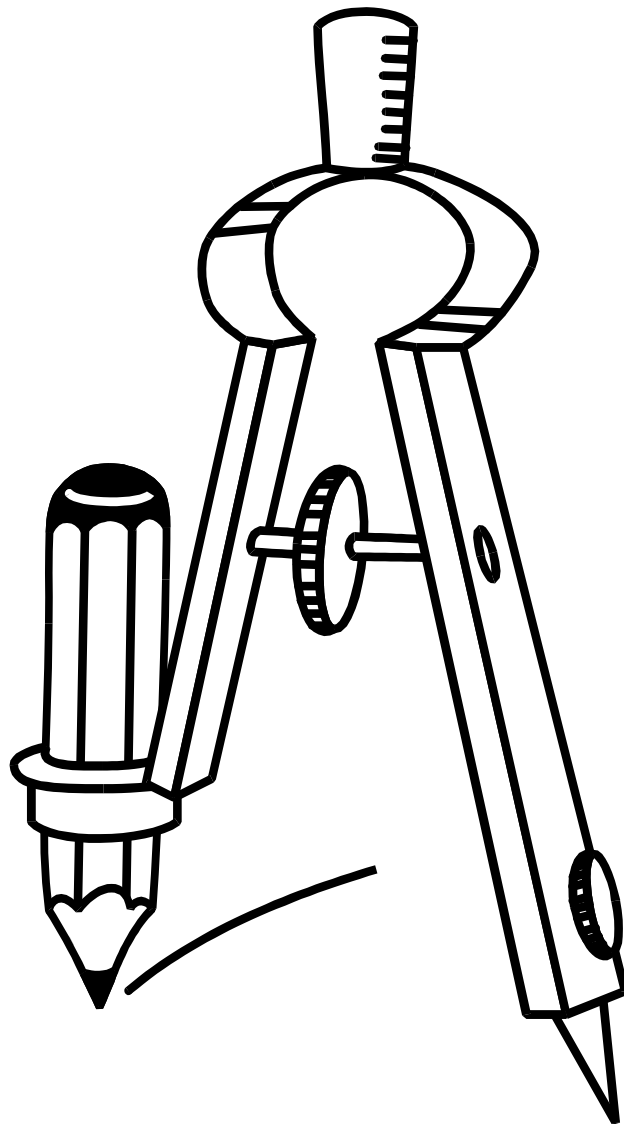


Obair Bhaile Mata

Leabhar 11



Ainm _____ Rang _____



Cearnóg Iolraithe Multiplication Square

X	1	2	3	4	5	6	7	8	9	10
1	1	2	3	4	5	6	7	8	9	10
2	2	4	6	8	10	12	14	16	18	20
3	3	6	9	12	15	18	21	24	27	30
4	4	8	12	16	20	24	28	32	36	40
5	5	10	15	20	25	30	35	40	45	50
6	6	12	18	24	30	36	42	48	54	60
7	7	14	21	28	35	42	49	56	63	70
8	8	16	24	32	40	48	56	64	72	80
9	9	18	27	36	45	54	63	72	81	90
10	10	20	30	40	50	60	70	80	90	100

Obair Bhaile Mata 1

1. Scríobh an uimhir *'ceithre mhíle, naoi gcéad seachtó a trí'* i bhfigiúirí.

2. Suimigh $8636 + 1253 =$ _____

3. Dealraith $984 - 357 =$ _____

4. Iolraigh $7 \times 5 =$ _____

5. Roinn $42 \div 6 =$ _____

6. Cad é $\frac{1}{3}$ de 27 = _____

7. Coinníonn paca milseán 10 taifí. Cá mhéad taifí a choinníonn 8 bpaca?

Maths Homework 1

1. Write the number 'four thousand, nine hundred and seventy three' in figures.

2. Add $8636 + 1253 =$ _____

3. Subtract $984 - 357 =$ _____

4. Multiply $7 \times 5 =$ _____

5. Divide $42 \div 6 =$ _____

6. What is $\frac{1}{3}$ of 27 = _____

7. There are 10 toffees in a packet of sweets. How many toffees are there in 8 packets?


Obair Bhaile Mata 2

1. Cad é an t-am atá léirithe ag an chlog seo?



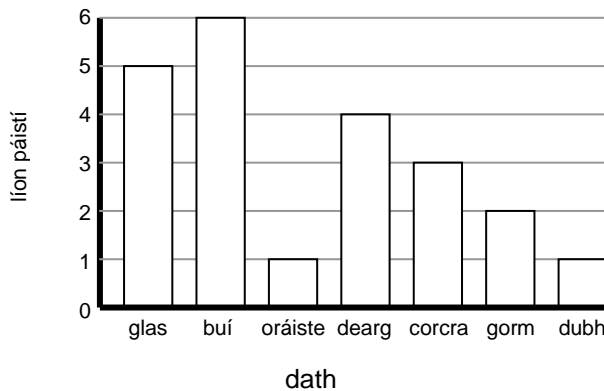
2. Scríobh 835p sa nodaireacht punta. _____

3. Cad é an t-ainm atá ar an chruth seo thíos?



4. Cad é an t-aonad tomhais a úsáideann daoine leis an méid uisce a choinníonn folcadán a thomhas (méadair, cileagram nó lítir)?

5. Seo graf a chuireann síos ar na dathanna is fearr le grúpa páistí. Cá mhéad páiste ar fearr leo dearg?




Maths Homework 2

1. What time does this clock show?



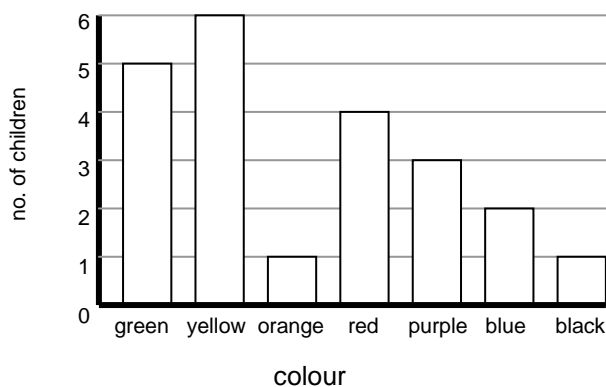
2. Write 835p in pound notation. _____

3. What is the name of the shape below?



4. What unit of measure do people use to measure how much water a bath holds (metre, kilogram or litre)?

5. Here is a graph which shows which colours a group of children prefer. How many children prefer red?



Obair Bhaile Mata 3

1. Scríobh an uimhir *'ocht míle, ocht gcéad nócha a cúig'* i bhfigiúirí.

2. Suimigh $3863 + 4262 =$ _____

3. Dealraith $482 - 234 =$ _____

4. Iolraigh $8 \times 3 =$ _____

5. Roinn $45 \div 9 =$ _____

6. Cad é $\frac{1}{5}$ de 35= _____

7. Tá 36 peann luaidhe i mbosca. Roinneann an mhúinteoir iad idir 6 dalta. Cá mhéad peann luaidhe a fhaigheann gach dalta?

Maths Homework 3

1. Write the number 'eight thousand, eight hundred and ninety five' in figures.

2. Add $3863 + 4262 =$ _____

3. Subtract $482 - 234 =$ _____

4. Multiply $8 \times 3 =$ _____

5. Divide $45 \div 9 =$ _____

6. What is $\frac{1}{5}$ of 35 = _____

7. A box holds 36 pencils. The teacher divides them between 6 pupils. How many pencils does each pupil get ?

Obair Bhaile Mata 4

1. Cad é an t-am atá léirithe ag an chlog seo?



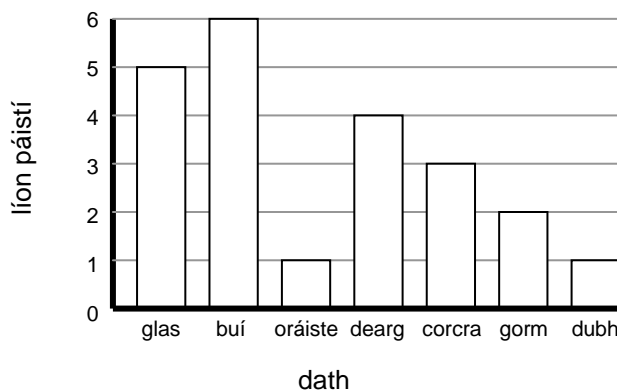
2. Scríobh 753p sa nodaireacht punta. _____

3. Cad é an t-ainm atá ar an chruth seo thíos?



4. Cad é an t-aonad tomhais a úsáideann daoine le cé chomh trom atá leabhar a thomhas (méadair, cileagram nó lítir)?

5. Seo graf a chuireann síos ar na dathanna is fearr le grúpa páistí. Cá mhéad páiste ar fearr leo buí?



Maths Homework 4

1. What time is shown on the clock below?



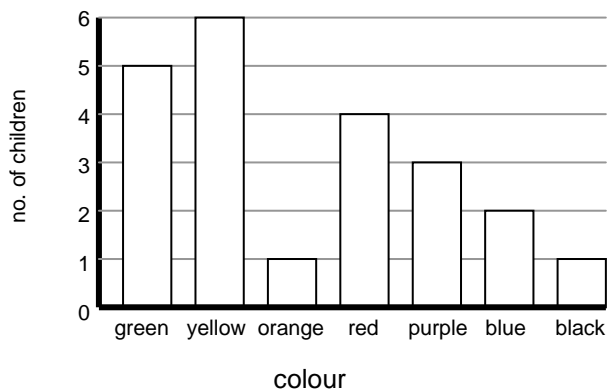
2. Write 753p in pound notation. _____

3. What is the name of the shape below?



4. What unit of measure do people use to measure the weight of a book (metre, kilogram or litre)?

5. Here is a graph which shows which colours a group of children prefer. How many children prefer yellow?



Obair Bhaile Mata 5

1. Scríobh an uimhir 'sé mhíle, seacht gcéad nócha a dó' i bhfigiúirí.

2. Suimigh $6865 + 1847 =$ _____

3. Dealraith $946 - 357 =$ _____

4. Iolraigh $5 \times 8 =$ _____

5. Roinn $35 \div 7 =$ _____

6. Cad é $\frac{1}{4}$ de 20 = _____

7. Coinníonn bosca uibheacha 6 ubh. Cá mhéad a choinníonn 3 bhosca?

Maths Homework 5

1. Write the number 'six thousand, seven hundred and ninety two' in figures.

2. Add $6865 + 1847 =$ _____

3. Subtract $946 - 357 =$ _____

4. Multiply $5 \times 8 =$ _____

5. Divide $35 \div 7 =$ _____

6. What is $\frac{1}{4}$ of 20 _____

7. A box holds 6 eggs. How many eggs does three boxes hold?


Obair Bhaile Mata 6

1. Cad é an t-am atá léirithe ag an chlog seo?



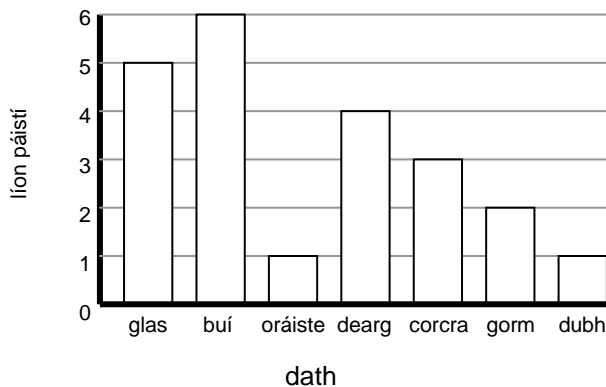
2. Scríobh 473p sa nodaireacht punta. _____

3. Cad é an t-ainm atá ar an chruth seo thíos?



4. Cad é an t-aonad tomhais a úsáideann daoine le cé chomh fada atá balla a thomhas (méadair, cileagramm nó lítir)?

5. Seo graf a chuireann síos ar na dathanna is fearr le grúpa páistí. Cá mhéad páiste ar fearr leo oráiste?




Maths Homework 6

1. What time is shown on the clock below?



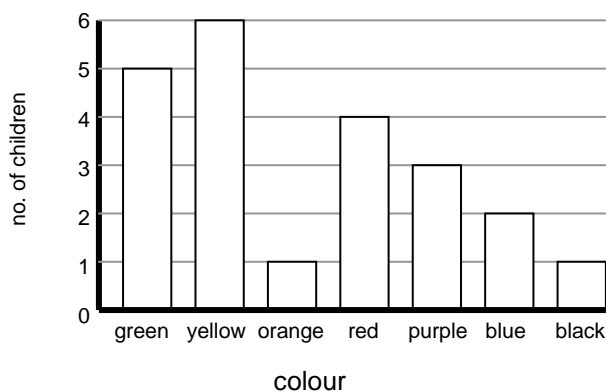
2. Write 473p in pound notation.

3. What is the name of the shape below?



4. What unit of measure do people use to measure the length of a wall (metre, kilogram or litre)?

5. Here is a graph which shows which colours a group of children prefer. How many children prefer orange?



Obair Bhaile Mata 7

1. Scríobh an uimhir *'dhá mhíle, trí chéad caoga a cúig'* i bhfigiúirí.

2. Suimigh $8654 + 425 =$ _____

3. Dealraith $863 - 367 =$ _____

4. Iolraigh $4 \times 7 =$ _____

5. Roinn $63 \div 9 =$ _____

6. Cad é $\frac{1}{5}$ de 25 = _____

7. Tá 27 greamaitheoir peile ag Liam. Ceannaíonn sé 15 cinn eile.
Cá mhéad greamaitheoir san iomlán atá aige anois?

Maths Homework 7

1. Write the number 'two thousand, three hundred and fifty five' in figures.

2. Add $8654 + 425 =$ _____

3. Subtract $863 - 367 =$ _____

4. Multiply $4 \times 7 =$ _____

5. Divide $63 \div 9 =$ _____

6. What is $\frac{1}{5}$ of 25 = _____

7. Liam has 25 stickers. He buys 15 more. How many stickers altogether does he now have?


Obair Bhaile Mata 8

1. Cad é an t-am atá léirithe ag an chlog seo?



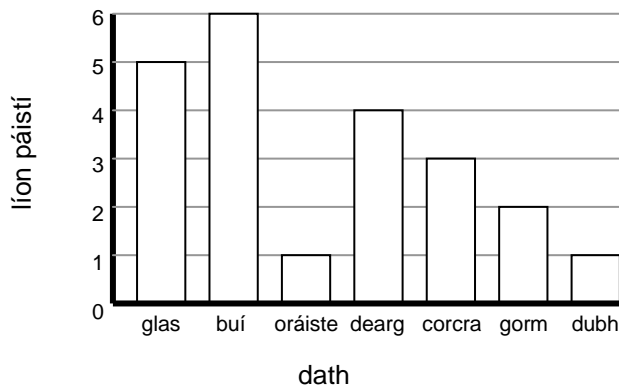
2. Scríobh 482p sa nodaireacht punta.

3. Cad é an t-ainm atá ar an chruth seo thíos?



4. Cad é an t-aonad tomhais a úsáideann daoine le cé chomh mór atá crann a thomhas (méadair, cileagram nó lítir)?

5. Seo graf a chuireann síos ar na dathanna is fearr le grúpa páistí. Cá mhéad páiste ar fearr leo dubh?




Maths Homework 8

1. What time is shown on the clock below?



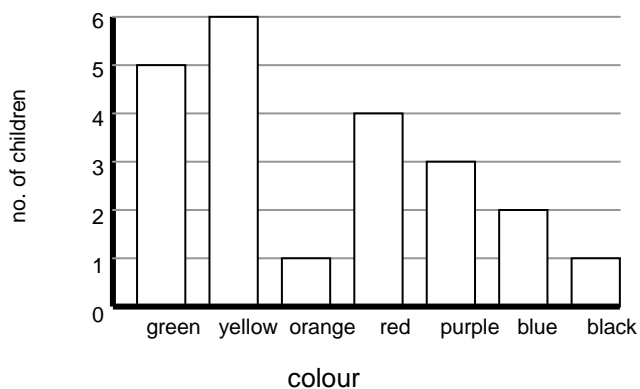
2. Write 482p in pound notation. _____

3. What is the name of the shape below?



4. What unit of measure do people use to measure the height of a tree (metre, kilogram or litre)?

5. Here is a graph which shows which colours a group of children prefer. How many children prefer black?



Obair Bhaile Mata 9

1. Scríobh an uimhir '*ocht míle, seacht gcéad nócha*' i bhfigiúirí.

2. Suimigh $5789 + 4789 =$ _____

3. Dealraith $579 - 432 =$ _____

4. Iolraigh $6 \times 9 =$ _____

5. Roinn $49 \div 7 =$ _____

6. Cad é $\frac{1}{2}$ de 18 = _____

7. Bhí 26 bó ag feirmeoir. Cheannaigh sé 16 bó eile. Cá mhéad bó atá aige anois?

Maths Homework 9

1. Write the number 'eight thousand, seven hundred and ninety' in figures.

2. Add $5789 + 4789 =$ _____

3. Subtract $579 - 432 =$ _____

4. Multiply $6 \times 9 =$ _____

5. Divide $49 \div 7 =$ _____

6. What is $\frac{1}{2}$ of 18 = _____

7. A farmer had 26 cows. He bought 16 more cows. How many cows does he now have?

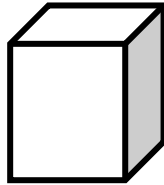
Obair Bhaile Mata 10

1. Cad é an t-am atá léirithe ag an chlog seo?



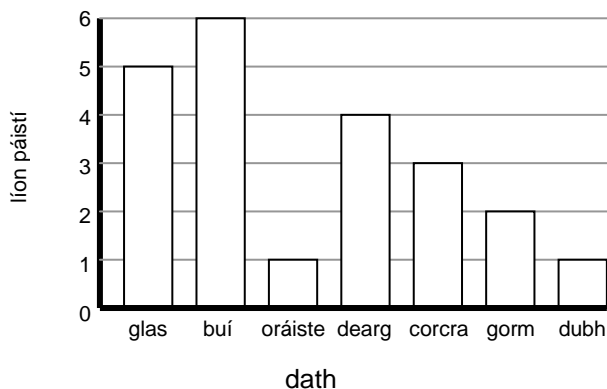
2. Scríobh 382p sa nodaireacht punta.

3. Cad é an t-ainm atá ar an chruth seo thíos?



4. Cé acu is faide, ceintiméadar nó méadar?

5. Seo graf a chuireann síos ar na dathanna is fearr le grúpa páistí. Cad é an dath is coitianta?



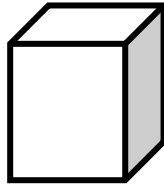
Maths Homework 10

1. What time is shown on the clock below?



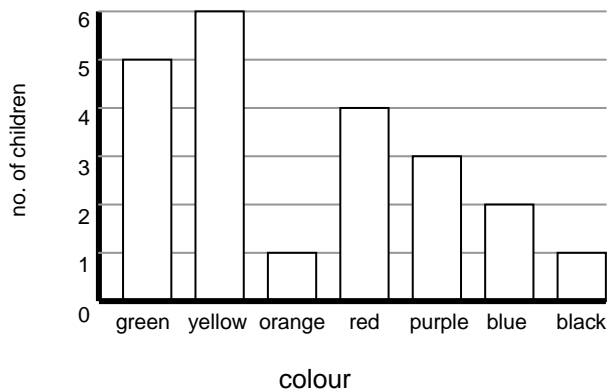
2. Write 382p in pound notation. _____

3. What is the name of the shape below?



4. Which is longer, a centimetre or a metre?

5. Here is a graph which shows which colours a group of children prefer. Which is the most popular colour?



Obair Bhaile Mata 11

1. Scríobh an uimhir *'dhá mhíle, trí chéad seasca a haon'* i bhfigiúirí.

2. Suimigh $3742 + 2763 =$ _____

3. Dealraith $272 - 196 =$ _____

4. Iolraigh $9 \times 7 =$ _____

5. Roinn $63 \div 9 =$ _____

6. Cad é $\frac{1}{5}$ de 50 = _____

7. Bhí 42 bó ag feirmeoir. Dhíol sé 16 acu. Cá mhéad bó atá fágtha aige anois?

Maths Homework 11

1. Write the number 'two thousand, three hundred and sixty one' in figures.

2. Add $3742 + 2763 =$ _____

3. Subtract $272 - 196 =$ _____

4. Multiply $9 \times 7 =$ _____

5. Divide $63 \div 9 =$ _____

6. What is $\frac{1}{5}$ of 50 = _____

7. A farmer had 42 cows. He sold 16 of them. How many cows does he now have?

Obair Bhaile Mata 12

1. Cad é an t-am atá léirithe ag an chlog seo?



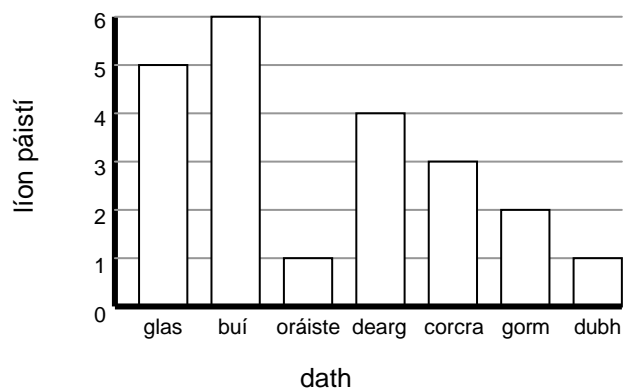
2. Scríobh 467p sa nodaireacht punta. _____

3. Cad é an t-ainm atá ar an chruth seo thíos?



4. Cé acu an toilleadh is mó, lítear nó millilítear? _____

5. Seo graf a chuireann síos ar na dathanna is fearr le grúpa páistí. Cad iad na dathanna is lú coitiantacht?



Maths Homework 12

1. What time is shown on the clock below?



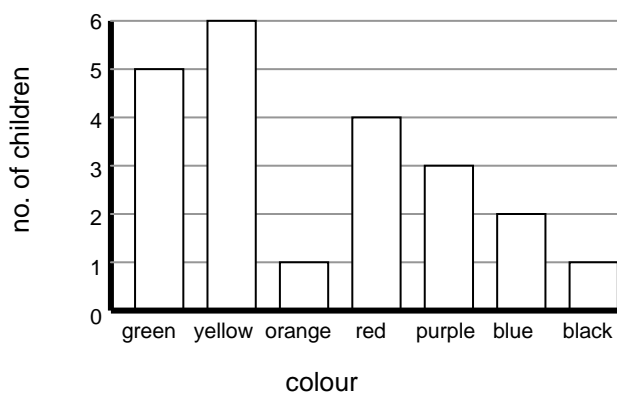
2. Write 467p in pound notation. _____

3. What is the name of the shape below?



4. Which is the biggest capacity, a litre or a millilitre?

5. Here is a graph which shows which colours a group of children prefer. Which are the least favourite colours?



Obair Bhaile Mata 13

1. Scríobh an uimhir *'naoi míle, sé chéad fiche a seacht'* i bhfigiúirí.

2. Suimigh $6953 + 3537 =$ _____

3. Dealraith $904 - 284 =$ _____

4. Iolraigh $8 \times 8 =$ _____

5. Roinn $48 \div 8 =$ _____

6. Cad é $\frac{1}{5}$ de 35 = _____

7. Bhí 18 bábóg ag cailín. Tháinig a breithlá agus fuair sí 4 bábóg eile. Cá mhéad bábóg san iomlán atá aici anois?

Maths Homework 13

1. Write the number '*nine thousand, six hundred and twenty seven*' in figures.

2. Add $6953 + 3537 =$ _____

3. Subtract $904 - 284 =$ _____

4. Multiply $8 \times 8 =$ _____

5. Divide $48 \div 8 =$ _____

6. What is $\frac{1}{5}$ of 35 = _____

7. A girl has 18 dolls. She got 4 more dolls on her birthday. How many dolls altogether does she now have?

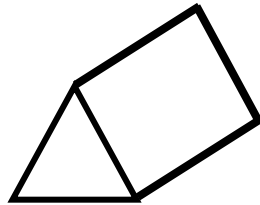
Obair Bhaile Mata 14

1. Cad é an t-am atá léirithe ag an chlog seo?



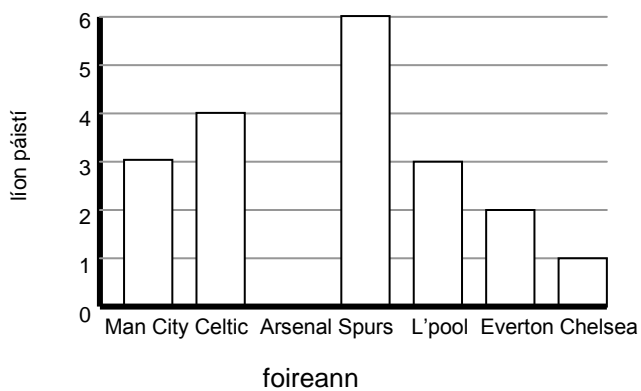
2. Scríobh 582p i nodaireacht punta.

3. Cad é an t-ainm atá ar an chruth seo thíos?



4. Cé acu is troime, gram nó cileagram?

5. Seo graf a chuireann síos ar na foirne peile is fearr le grúpa páistí. Cad é an fhoireann pheile is coitianta?



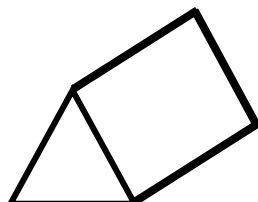
Maths Homework 14

1. What time is shown on the clock below?



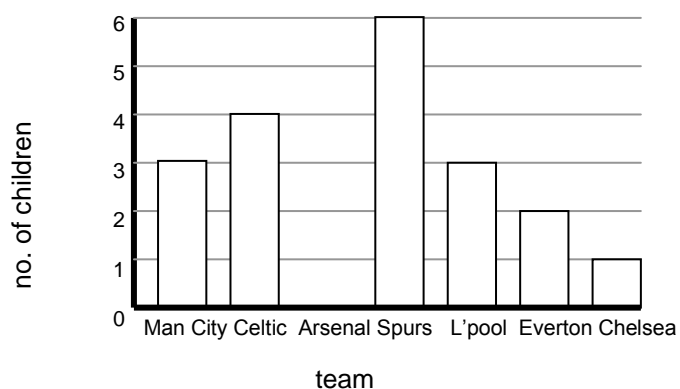
2. Write 582p in pound notation. _____

3. What is the name of the shape below?



4. Which is heavier, a gram or a kilogram?

5. Here is a graph which shows which football teams a group of children prefer. Which is the most popular team?



Obair Bhaile Mata 15

1. Scríobh an uimhir *'ceithre mhíle, seacht gcéad nócha a cúig'* i bhfigiúirí.

2. Suimigh $8539 + 3853 =$ _____

3. Dealraith $953 - 720 =$ _____

4. Iolraigh $9 \times 6 =$ _____

5. Roinn $64 \div 8 =$ _____

6. Cad é $\frac{1}{4}$ de 32 = _____

7. Cosnaíonn paca cártaí 10p. Cá mhéad a chosnaíonn 8 bpaca cártaí?

Maths Homework 15

1. Write the number '*four thousand, seven hundred and ninety five*' in figures.

2. Add $8539 + 3853 =$ _____

3. Subtract $953 - 720 =$ _____

4. Multiply $9 \times 6 =$ _____

5. Divide $64 \div 8 =$ _____

6. What is $\frac{1}{4}$ of 32 = _____

7. A pack of cards costs 10p. How much does 8 packets cost?

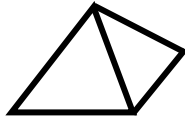
Obair Bhaile Mata 16

1. Cad é an t-am atá léirithe ag an chlog seo?



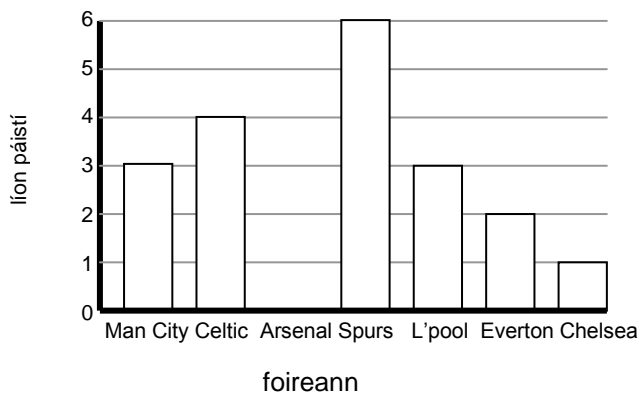
2. Scríobh 902p i nodaireacht punta. _____

3. Cad é an t-ainm atá ar an chruth seo thíos?



4. Cé a choinníonn an méid is mó uisce, cupán nó buicéad?

5. Seo graf a chuireann síos ar na foirne peile is fearr le grúpa páistí. Cad é an fhoireann pheile is lú coitiantacht?



Maths Homework 16

1. What time is shown on the clock below?



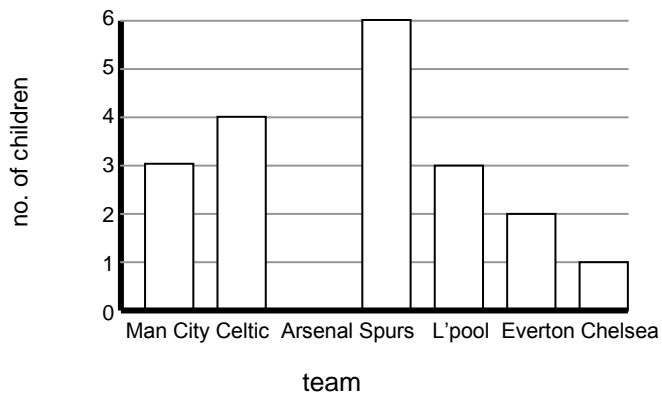
2. Write 902p in pound notation. _____

3. What is the name of the shape below?



4. Which holds the most water, a cup or a bucket?

5. Here is a graph which shows which football teams a group of children prefer. Which is the least popular team?



Obair Bhaile Mata 17

1. Scríobh an uimhir ‘seacht míle, ceithre chéad nócha a cúig’ i bhfigiúirí.

2. Suimigh $8543 + 3487 =$ _____

3. Dealraith $826 - 364 =$ _____

4. Iolraigh $9 \times 8 =$ _____

5. Roinn $72 \div 8 =$ _____

6. Cad é $\frac{1}{8}$ de 40 = _____

7. Coinníonn tábla i mbialann na scoile 8 daltaí. Cá mhéad dalta a thig leo suí thart ar 3 thábla?

Maths Homework 17

1. Write the number 'seven thousand, four hundred and ninety five' in figures.

2. Add $8543 + 3487 =$ _____

3. Subtract $826 - 364 =$ _____

4. Multiply $9 \times 8 =$ _____

5. Divide $72 \div 8 =$ _____

6. What is $\frac{1}{8}$ of 40 = _____

7. A table in the school canteen seats 8 pupils. How many pupils can sit around 3 tables?

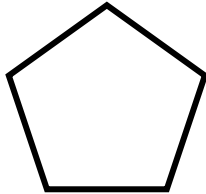
Obair Bhaile Mata 18

1. Cad é an t-am atá léirithe ag an chlog seo?



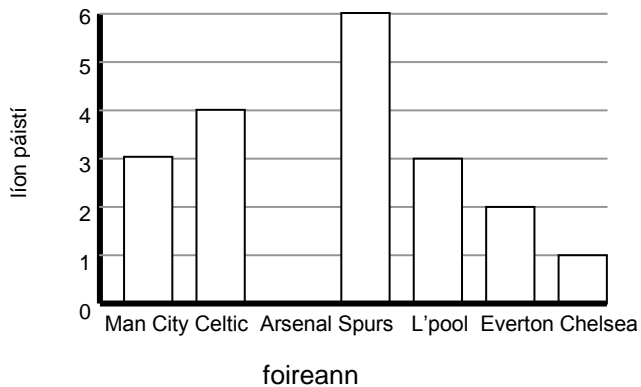
2. Scríobh 347p i nodaireacht punta? _____

3. Cad é an t-ainm atá ar an chruth seo thíos?



4. Cé acu is troime, carr nó rothar? _____

5. Seo graf a chuireann síos ar na foirne peile is fearr le grúpa páistí. Cá mhéad dalta a raibh dúil acu in Spurs?



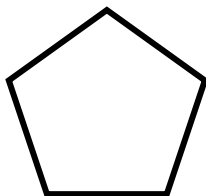
Maths Homework 18

1. What time is shown on the clock below?



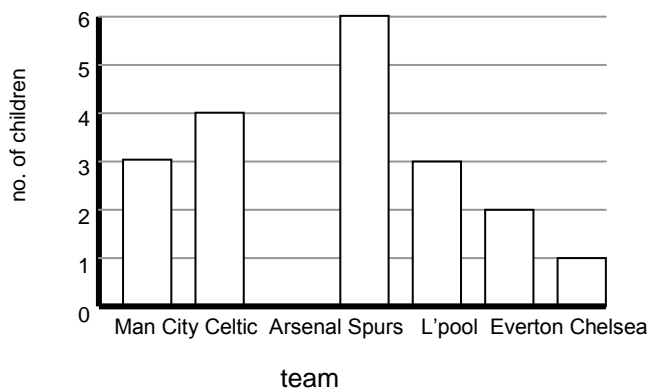
2. Write 347p in pound notation. _____

3. What is the name of the shape below?



4. Which is heavier, a car or a bicycle?

5. Here is a graph which shows which football teams a group of children prefer. How many children prefer Tottenham?



Obair Bhaile Mata 19

1. Scríobh an uimhir ‘*míle, naoi gcéad caoga a sé*’ i bhfigiúirí.

2. Suimigh $5726 + 7565 =$ _____

3. Dealraith $752 - 367 =$ _____

4. Iolraigh $4 \times 6 =$ _____

5. Roinn $35 \div 5 =$ _____

6. Cad é $\frac{1}{8}$ de 56 = _____

7. Cosnaíonn bosca seacláidí 10p. Cá mhéad a chosnaíonn 10 mbosca?

Maths Homework 19

1. Write the number 'one thousand, nine hundred and fifty six' in figures.

2. Add $5726 + 7565 =$ _____

3. Subtract $752 - 367 =$ _____

4. Multiply $4 \times 6 =$ _____

5. Divide $35 \div 5 =$ _____

6. What is $\frac{1}{8}$ of 56 = _____

7. A box of chocolates costs 10p. How much does 10 boxes cost?

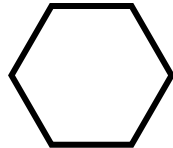
Obair Bhaile Mata 20

1. Cad é an t-am atá léirithe ag an chlog seo?



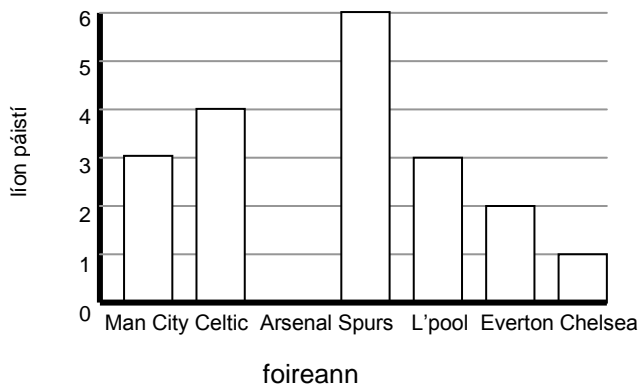
2. Scríobh 675p i nodaireacht punta. _____

3. Cad é an t-ainm atá ar an chruth seo thíos?



4. Cé acu is mó, punt nó pingin? _____

5. Seo graf a chuireann síos ar na foirne peile is fearr le grúpa páistí. Cá mhéad páiste a raibh dúil acu in Arsenal?



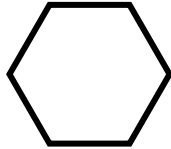
Maths Homework 20

1. What time is shown on the clock below?



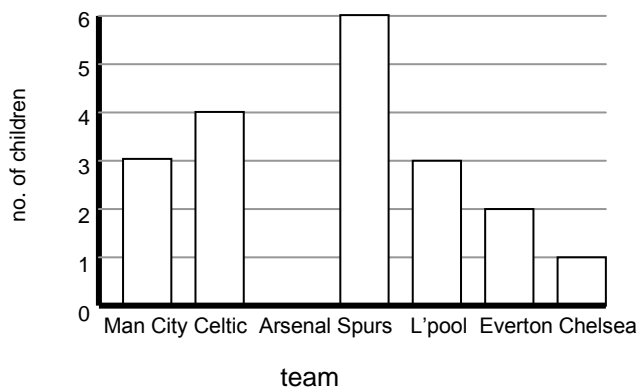
2. Write 675p in pound notation. _____

3. What is the name of the shape below?



4. Which is more, a pound or a penny?

5. Here is a graph which shows which football teams a group of children prefer. How many children prefer Arsenal?



Obair Bhaile Mata 21

1. Scríobh an uimhir *'trí mhíle, cúig chéad seasca'* i bhfigiúirí.

2. Suimigh $7538 + 8547 =$ _____

3. Dealraith $952 - 574 =$ _____

4. Iolraigh $6 \times 7 =$ _____

5. Roinn $49 \div 7 =$ _____

6. Cad é $\frac{1}{2}$ de 20 = _____

7. Bíonn sos sláintiúil ag na daltaí i nGaelscoil Uí Néill. Lá amháin ar scoil, thug na daltaí i Rang 6 isteach 6 úll, 5 oráiste, 4 phiorra agus 2 bhanana. Cá mhéad toradh ar fad a thug siad isteach ar an lá sin?

Maths Homework 21

1. Write the number '*three thousand, five hundred and sixty*' in figures.

2. Add $7538 + 8547 =$ _____

3. Subtract $952 - 574 =$ _____

4. Multiply $6 \times 7 =$ _____

5. Divide $49 \div 7 =$ _____

6. What is $\frac{1}{2}$ of 20 = _____

7. Pupils in Gaelscoil Uí Neill eat healthy lunches. One day at school, the pupils in Primary 6 brought in 6 apples, 5 oranges, 4 pears and 2 bananas. How many pieces of fruit altogether did they bring in that day?

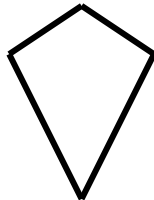
Obair Bhaile Mata 22

1. Cad é an t-am atá léirithe ag an chlog seo?



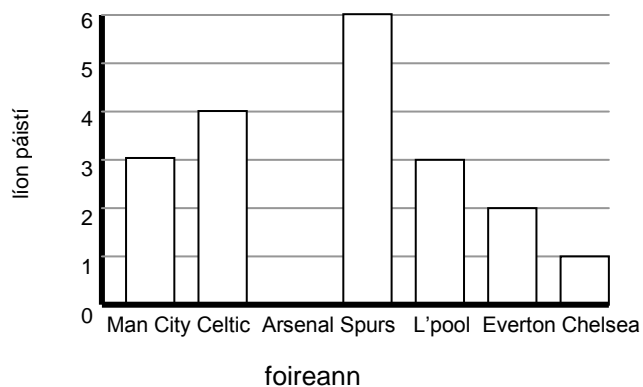
2. Scríobh 658p i nodaireacht punta. _____

3. Cad é an t-ainm atá ar an chruth seo thíos?



4. Cé acu is giorra, seomra ranga nó páirc pheile? _____

5. Seo graf a chuireann síos ar na foirne peile is fearr le grúpa páistí. Cén dá fhoireann a raibh dúil ag an méid céanna daltaí iontu?



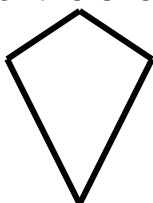
Maths Homework 22

1. What time is shown on the clock below?




2. Write 658p in pound notation. _____

3. What is the name of the shape below?



4. Which is shorter, a classroom or a football field? _____

5. Here is a graph which shows which football teams a group of children prefer. Which two teams did the same amount of children prefer?



Obair Bhaile Mata 23

1. Scríobh an uimhir *'dhá mhíle, ocht gcéad is a cúig'* i bhfigiúirí.

2. Suimigh $8648 + 2456 =$ _____

3. Dealraith $964 - 566 =$ _____

4. Iolraigh $6 \times 6 =$ _____

5. Roinn $63 \div 9 =$ _____

6. Cad é $\frac{1}{4}$ de 28 = _____

7. Cosnaíonn paca milseán 10p. Cá mhéad a chosnaíonn 10 bpaca?

Maths Homework 23

1. Write the number 'two thousand, eight hundred and five' in figures.

2. Add $8648 + 2456 =$ _____

3. Subtract $964 - 566 =$ _____

4. Multiply $6 \times 6 =$ _____

5. Divide $63 \div 9 =$ _____

6. What is $\frac{1}{4}$ of 28 = _____

7. A packet of sweets costs 10p. How much does 10 packets cost?

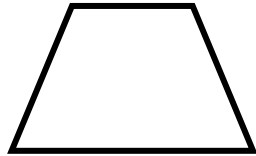
Obair Bhaile Mata 24

1. Cad é an t-am atá léirithe ag an chlog seo?



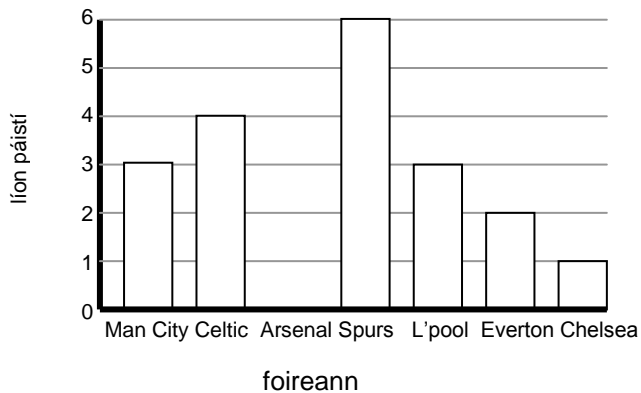
2. Scríobh 587p i nodaireacht punta. _____

3. Cad é an t-ainm atá ar an chruth seo thíos?



4. Cad é a choinníonn an méid is lú uisce, citeal nó folcadán?

5. Seo graf a chuireann síos ar na foirne peile is fearr le grúpa páistí. Cá mhéad páiste a ghlac páirt sa suirbhé?



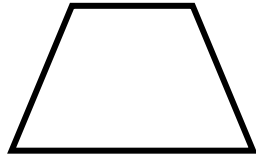
Maths Homework 24

1. What time is shown on the clock below?



2. Write 587p in pound notation. _____

3. What is the name of the shape below?



4. Which holds the least water, a kettle or a bath? _____

5. Here is a graph which shows which football teams a group of children prefer. How many children took part in the survey?

