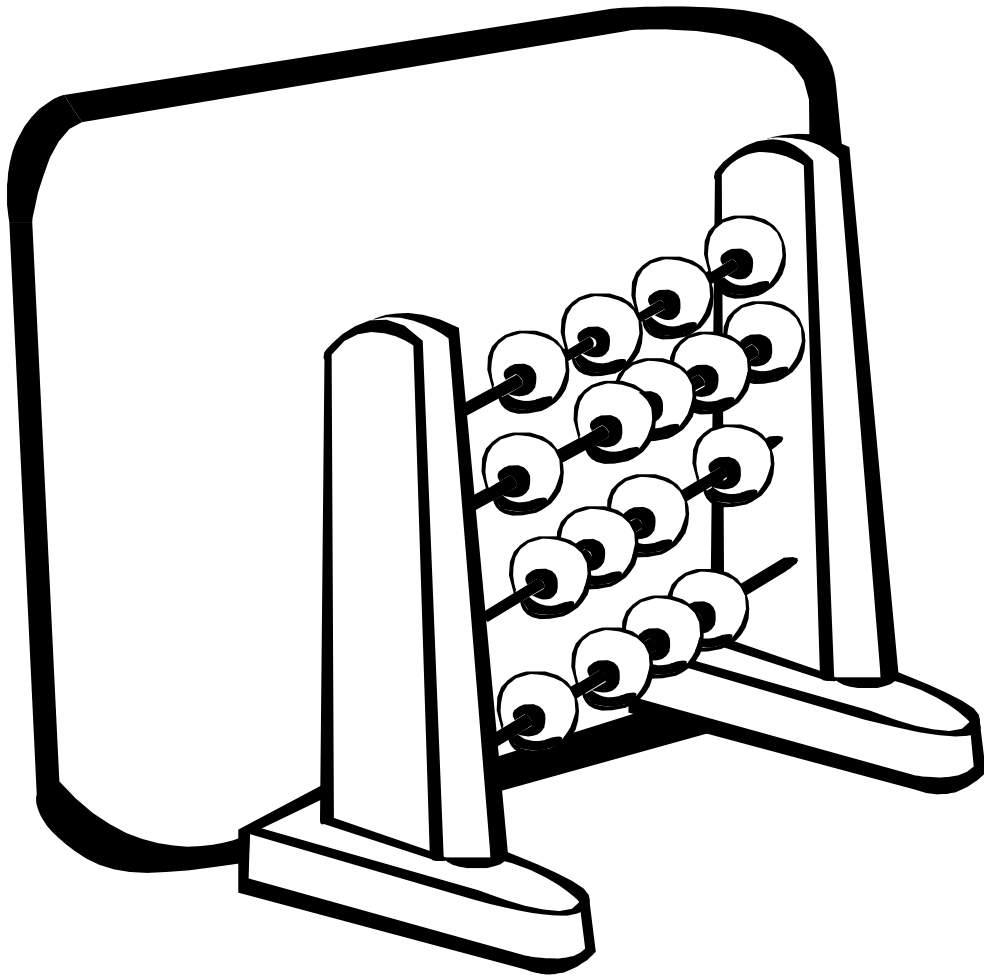


# Obair Bhaile

## Mata



# Leabhar 13

Ainm \_\_\_\_\_ Rang \_\_\_\_\_



## Cearnóg Iolraithe Multiplication Square

<b>X</b>	<b>1</b>	<b>2</b>	<b>3</b>	<b>4</b>	<b>5</b>	<b>6</b>	<b>7</b>	<b>8</b>	<b>9</b>	<b>10</b>
<b>1</b>	<b>1</b>	<b>2</b>	<b>3</b>	<b>4</b>	<b>5</b>	<b>6</b>	<b>7</b>	<b>8</b>	<b>9</b>	<b>10</b>
<b>2</b>	<b>2</b>	<b>4</b>	<b>6</b>	<b>8</b>	<b>10</b>	<b>12</b>	<b>14</b>	<b>16</b>	<b>18</b>	<b>20</b>
<b>3</b>	<b>3</b>	<b>6</b>	<b>9</b>	<b>12</b>	<b>15</b>	<b>18</b>	<b>21</b>	<b>24</b>	<b>27</b>	<b>30</b>
<b>4</b>	<b>4</b>	<b>8</b>	<b>12</b>	<b>16</b>	<b>20</b>	<b>24</b>	<b>28</b>	<b>32</b>	<b>36</b>	<b>40</b>
<b>5</b>	<b>5</b>	<b>10</b>	<b>15</b>	<b>20</b>	<b>25</b>	<b>30</b>	<b>35</b>	<b>40</b>	<b>45</b>	<b>50</b>
<b>6</b>	<b>6</b>	<b>12</b>	<b>18</b>	<b>24</b>	<b>30</b>	<b>36</b>	<b>42</b>	<b>48</b>	<b>54</b>	<b>60</b>
<b>7</b>	<b>7</b>	<b>14</b>	<b>21</b>	<b>28</b>	<b>35</b>	<b>42</b>	<b>49</b>	<b>56</b>	<b>63</b>	<b>70</b>
<b>8</b>	<b>8</b>	<b>16</b>	<b>24</b>	<b>32</b>	<b>40</b>	<b>48</b>	<b>56</b>	<b>64</b>	<b>72</b>	<b>80</b>
<b>9</b>	<b>9</b>	<b>18</b>	<b>27</b>	<b>36</b>	<b>45</b>	<b>54</b>	<b>63</b>	<b>72</b>	<b>81</b>	<b>90</b>
<b>10</b>	<b>10</b>	<b>20</b>	<b>30</b>	<b>40</b>	<b>50</b>	<b>60</b>	<b>70</b>	<b>80</b>	<b>90</b>	<b>100</b>

### Obair Bhaile 1

1. Scríobh an uimhir 23,751 i bhfocail. \_\_\_\_\_

2. Scríobh isteach an comhartha ceart: < (níos lú ná), > (níos mó ná) nó = (cothrom le):

$$28 \square 20$$

3. Ciorclaigh na corruimhreacha thíos:

1      2      3      4      5      6      7      8      9      10

4. Cad é an luach atá sa digit 7 san uimhir 32,572? \_\_\_\_\_

5. Oibrigh amach an freagra:

$$\begin{array}{r} 2764 \\ + 1837 \\ \hline \end{array}$$

6. Oibrigh amach an freagra:

$$\begin{array}{r} 3725 \\ - 1417 \\ \hline \end{array}$$

7. Oibrigh amach an freagra:

$$\begin{array}{r} 2000 \\ - 283 \\ \hline \end{array}$$

8. Cad é  $7 \times 8 =$  \_\_\_\_\_

9. Cad é  $32 \div 8 =$  \_\_\_\_\_

10. Oibrigh amach an freagra:

$$\begin{array}{r} 18 \\ \times 5 \\ \hline \end{array}$$

11. Oibrigh amach an freagra:

$$\begin{array}{r} 2 \overline{)24} \\ \hline \end{array}$$

### Homework 1

1. Write the number 23, 751 in words. \_\_\_\_\_

2. Write in the correct sign: < (less than), > (greater than) or = (equal to):

$$28 \square 20$$

3. Circle the odd numbers below:

1      2      3      4      5      6      7      8      9      10

4. What is the value of the digit 7 in the number 32,572? \_\_\_\_\_

5. Work out the answer:

$$\begin{array}{r} 2764 \\ + 1837 \\ \hline \end{array}$$

6. Work out the answer:

$$\begin{array}{r} 3725 \\ - 1417 \\ \hline \end{array}$$

7. Work out the answer:

$$\begin{array}{r} 2000 \\ - 283 \\ \hline \end{array}$$

8. What is  $7 \times 8 =$  \_\_\_\_\_

9. What is  $32 \div 8 =$  \_\_\_\_\_

10. Work out the answer:

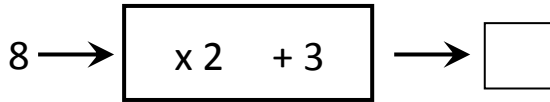
$$\begin{array}{r} 18 \\ \times 5 \\ \hline \end{array}$$

11. Work out the answer:

$$\begin{array}{r} 2 \overline{)24} \\ \hline \end{array}$$

## Obair Bhaile 2

1. Cad iad na hiolraithe de 3 idir 10 agus 20? \_\_\_\_\_
2. Cad iad na fachtóirí den uimhir 6? \_\_\_\_\_
3. Cad é an uimhir a thagann amach an mheaisín feidhme seo?



4. Cad é an chéad uimhir eile sa phatrún seo?

3            5            7            9            \_\_\_\_\_

5. Cá mhéad líne a bheadh i bPatrún 4 den seicheamh seo thíos?



6. Slánaigh an uimhir 246 go dtí an deich is cóngaraí. \_\_\_\_\_
7. Cén codán den chruth seo atá scáthaithe?



8. Cén codán den chruth seo atá scáthaithe?



9. Ciorclaigh an codán thíos atá cothrom le  $\frac{1}{2}$ .

$\frac{1}{3}$              $\frac{3}{4}$              $\frac{2}{4}$              $\frac{1}{4}$

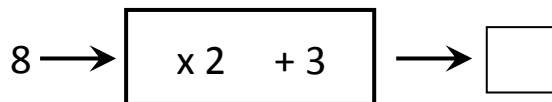
10. Cad é  $\frac{1}{2}$  de 18? \_\_\_\_\_
11. Scríobh an t-am *cúig i ndiaidh a dó* sa chlog digiteach. \_\_\_\_\_
12. Cá mhéad ceintiméadar atá i méadar? \_\_\_\_\_ cm
13. Cá mhéad gram atá i gCileagram? \_\_\_\_\_ g

## Homework 2

1. What are the multiples of 3 between 10 and 20? \_\_\_\_\_

2. What are the factors of the number 6? \_\_\_\_\_

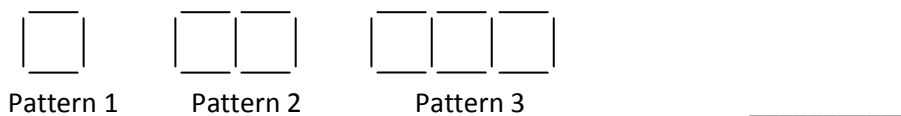
3. What is the number that comes out of this function machine?



4. What is the next number in this pattern?

3            5            7            9            \_\_\_\_\_

5. How many lines would be in Pattern 4 in this sequence below?



6. Round the number 246 to the nearest ten. \_\_\_\_\_

7. What fraction of this shape is shaded?



8. What fraction of this shape is shaded?



9. Circle the fraction below that is equal to  $\frac{1}{2}$ .

$\frac{1}{3}$              $\frac{3}{4}$              $\frac{2}{4}$              $\frac{1}{4}$

10. What is  $\frac{1}{2}$  of 18? \_\_\_\_\_

11. Write the time *five past two* in digital form. \_\_\_\_\_

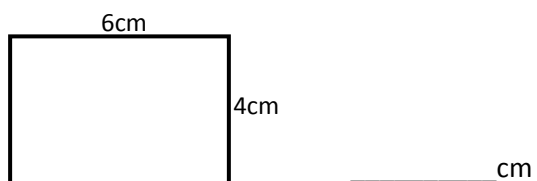
12. How many centimetres are in 1 metre? \_\_\_\_\_ cm

13. How many grams are in 1 kilogram? \_\_\_\_\_ g

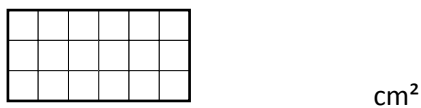
### Obair Bhaile 3

1. Cá mhéad millilítir atá i Lítear? \_\_\_\_\_ ml

2. Cad é an imlíne den dronuilleog seo thíos?




3. Cad é an t-achar den chruth seo thíos?

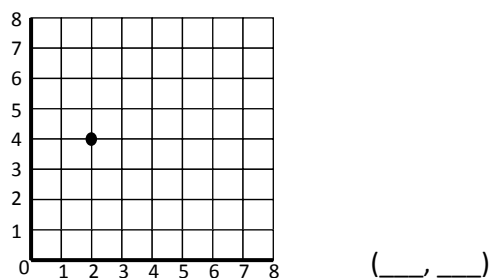


4. Cá mhéad slios atá ag ciorcal? \_\_\_\_\_

5. Tarraing líne chothrománach sa bhosca thíos.



6. Cad iad na comhordanáidí den pointe atá marcáilte ar an eangach thíos.



7. Ciorclaigh an ceathairshleasán thíos:

ciorcal

triantán

cearnóg

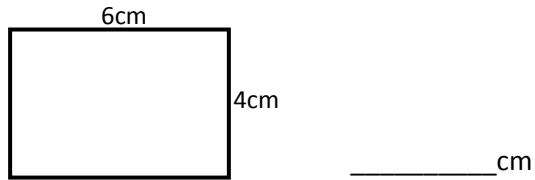
peinteagán



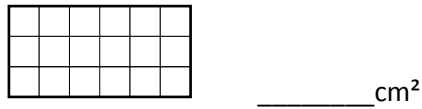
### Homework 3

1. How many millilitres are in 1 litre? \_\_\_\_\_ ml

2. What is the perimeter of this rectangle below?



3. What is the area of this shape below?

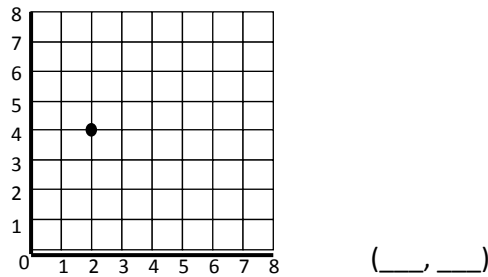


4. How many sides does a circle have? \_\_\_\_\_

5. Draw a horizontal line in the box below.



6. What are the coordinates of the point marked on the grid below.



7. Circle the quadrilateral below:

circle

triangle

square

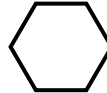
pentagon

**Obair Bhaile 4**

1. Tarraing an líne shiméadrachta ar an chruth seo thíos:



2. Cén cruth thíos a dhéanann teisiliú? Dathaigh é.



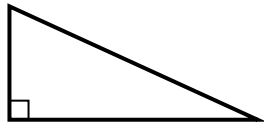
3. Cá mhéad aghaidh atá ag ciúb? \_\_\_\_\_

4. Cá mhéad rinn atá ag ciúbóideach? \_\_\_\_\_

5. Cá mhéad faobhar atá ag cón? \_\_\_\_\_

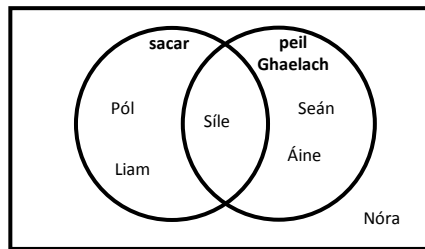
6. Cá mhéad céim ( $^{\circ}$ ) atá i ndronuillinn? \_\_\_\_\_<sup>o</sup>

7. Cén sórt triantáin é seo?



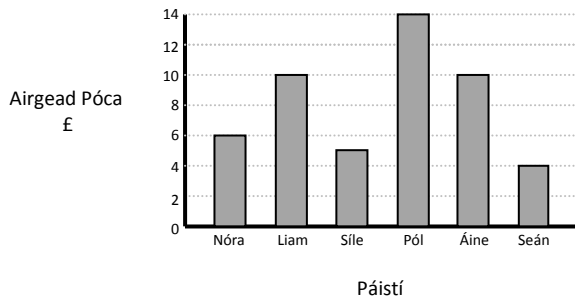
\_\_\_\_\_

8. Seo thíos Léaráid Venn faoin spórt a bhfuil dúil ag grúpa páistí iontu.



Cén páiste a bhfuil dúil aige i sacar agus peil Ghaelach? \_\_\_\_\_

9. Seo thíos barragraf ar an méid airgead póca a fhaigheann grúpa páistí gach seachtain.



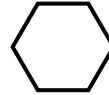
Cá mhéad airgead póca a fhaigheann Liam? £ \_\_\_\_\_

### Homework 4

1. Draw the line of symmetry on this shape below:



2. Which shape below tessellates? Shade it in.



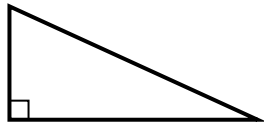
3. How many faces does a cube have? \_\_\_\_\_

4. How many corners does a cuboid have? \_\_\_\_\_

5. How many edges does a cone have? \_\_\_\_\_

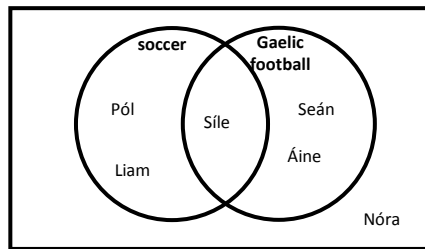
6. How many digress ( $^{\circ}$ ) in a right angle? \_\_\_\_\_<sup>o</sup>

7. What sort of triangle is this?



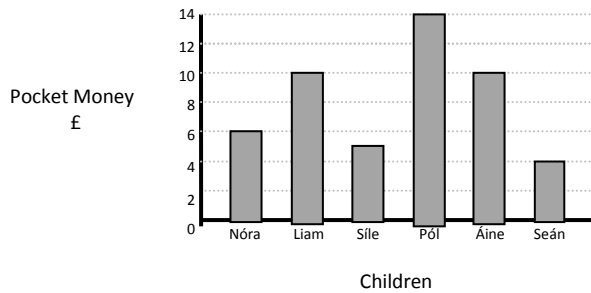
\_\_\_\_\_

8. Below is Venn Diagram about the sports a group of children enjoy.



Which child likes both soccer and Gaelic football? \_\_\_\_\_

9. Below is a bar-graph about the amount of pocket money a group of children get each week.



How much pocket money does Liam get? £ \_\_\_\_\_

### Obair Bhaile 5

1. Scríobh an uimhir 54, 873 i bhfocail. \_\_\_\_\_

2. Scríobh isteach an comhartha ceart: < (níos lú ná), > (níos mó ná) nó = (cothrom le):

$$64 \square 37$$

3. Ciorclaigh na ré-uimhreacha thíos:

1      2      3      4      5      6      7      8      9      10

4. Cad é an luach atá sa digit 3 san uimhir 76,382? \_\_\_\_\_

5. Oibrigh amach an freagra:

$$\begin{array}{r} 5 \ 6 \ 7 \ 9 \\ + \ 3 \ 5 \ 7 \ 2 \\ \hline \\ \hline \end{array}$$

6. Oibrigh amach an freagra:

$$\begin{array}{r} 4 \ 5 \ 3 \ 8 \\ - \ 3 \ 5 \ 8 \ 3 \\ \hline \\ \hline \end{array}$$

7. Oibrigh amach an freagra:

$$\begin{array}{r} 7 \ 0 \ 0 \ 0 \\ - \ 3 \ 5 \ 7 \ 2 \\ \hline \\ \hline \end{array}$$

8. Cad é  $5 \times 9 =$  \_\_\_\_\_

9. Cad é  $42 \div 7 =$  \_\_\_\_\_

10. Oibrigh amach an freagra:

$$\begin{array}{r} 2 \ 8 \\ \times \ 3 \\ \hline \\ \hline \end{array}$$

11. Oibrigh amach an freagra:

$$\begin{array}{r} 3 \overline{)36} \\ \underline{\quad} \end{array}$$

### Homework 5

1. Write the number 54, 873 in words. \_\_\_\_\_

2. Write in the correct sign: < (less than), > (greater than) or = (equal to):

$$64 \square 37$$

3. Circle the even numbers below:

1      2      3      4      5      6      7      8      9      10

4. What is the value of the digit 3 in the number 76,382? \_\_\_\_\_

5. Work out the answer:

$$\begin{array}{r} 5 \ 6 \ 7 \ 9 \\ + 3 \ 5 \ 7 \ 2 \\ \hline \end{array}$$

6. Work out the answer:

$$\begin{array}{r} 4 \ 5 \ 3 \ 8 \\ - 3 \ 5 \ 8 \ 3 \\ \hline \end{array}$$

7. Work out the answer:

$$\begin{array}{r} 7 \ 0 \ 0 \ 0 \\ - 3 \ 5 \ 7 \ 2 \\ \hline \end{array}$$

8. What is  $5 \times 9 =$  \_\_\_\_\_

9. What is  $42 \div 7 =$  \_\_\_\_\_

10. Work out the answer:


$$\begin{array}{r} 2 \ 8 \\ \times 3 \\ \hline \end{array}$$

11. Work out the answer:

$$\begin{array}{r} 3 \overline{)36} \\ \hline \end{array}$$

**Obair Bhaile 6**

1. Cad iad na hiolraithe de 4 idir 30 agus 50? \_\_\_\_\_
2. Cad iad na fachtóirí den uimhir 7? \_\_\_\_\_
3. Cad é an uimhir a thagann amach an mheaisín feidhme seo?



4. Cad é an chéad uimhir eile sa phatrún seo?

1      4      7      10      13      16      19      \_\_\_\_\_

5. Cá mhéad líne a bheadh i bPatrún 4 den seicheamh seo thíos?



6. Slánaigh an uimhir 753 go dtí an céad is cóngaraí. \_\_\_\_\_

7. Cén codán den chruth seo atá scáthaithe?



8. Cén codán den chruth seo atá scáthaithe?



9. Ciorclaigh an codán thíos atá cothrom le  $\frac{1}{4}$ .

$\frac{1}{3}$        $\frac{2}{6}$        $\frac{3}{12}$        $\frac{4}{10}$

10. Cad é  $\frac{1}{4}$  de 36? \_\_\_\_\_


11. Scríobh an t-am *a ceathrú go dtí a deich* sa chlog digiteach. \_\_\_\_\_

12. Cá mhéad ceintiméadar atá i 2m? \_\_\_\_\_ cm

13. Cá mhéad gram atá i 3kg? \_\_\_\_\_ g

### Homework 6

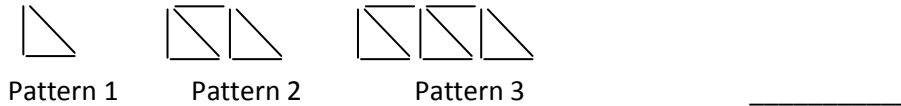
1. What are the multiples of 4 between 30 and 50? \_\_\_\_\_
2. What are the factors of the number 7? \_\_\_\_\_
3. What is the number that comes out of this function machine?




4. What is the next number in this pattern?

1      4      7      10      13      16      19      \_\_\_\_\_

5. How many lines would be in Pattern 4 in this sequence below?



6. Round the number 753 to the nearest hundred. \_\_\_\_\_
7. What fraction of this shape is shaded?



8. What fraction of this shape is shaded?



9. Circle the fraction below that is equal to  $\frac{1}{4}$ .

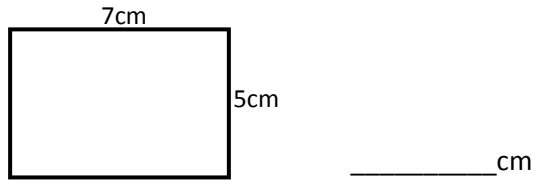
$\frac{1}{3}$        $\frac{2}{6}$        $\frac{3}{12}$        $\frac{4}{10}$

10. What is  $\frac{1}{4}$  of 36? \_\_\_\_\_
11. Write the time *a quarter to ten* in digital form. \_\_\_\_\_
12. How many centimetres are in 2m? \_\_\_\_\_ cm
13. How many grams are in 3kg? \_\_\_\_\_ g

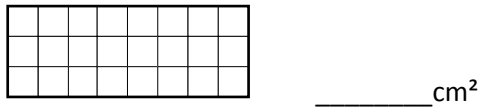
**Obair Bhaile 7**

1. Cá mhéad millilítir atá i 4 lítear? \_\_\_\_\_ ml

2. Cad é an imlíne den dronuilleog seo thíos?




3. Cad é an t-achar den chruth seo thíos?

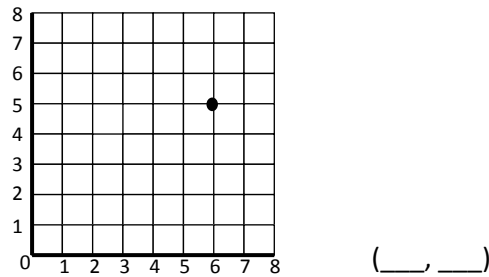


4. Cá mhéad slios atá ag triantán? \_\_\_\_\_

5. Tarraing líne cheartingearach bhosca thíos.



6. Cad iad na comhordanáidí den pointe atá marcáilte ar an eangach thíos.



7. Cad é an t-ainm atá ar an cheathairshleasán seo thíos:

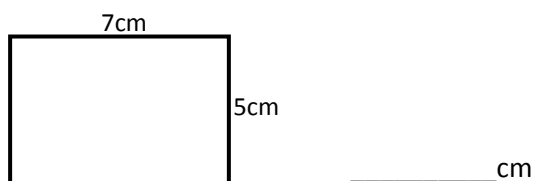




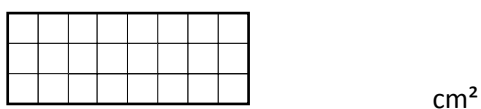
### Homework 7

1. How many millilitres are in 4 litres? \_\_\_\_\_ ml

2. What is the perimeter of this rectangle below?




3. What is the area of this shape below?

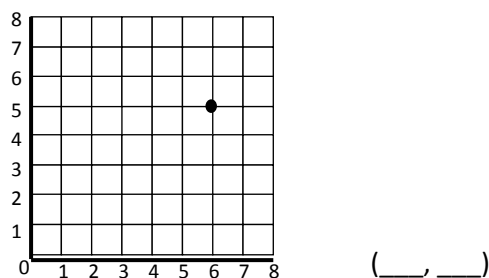


4. How many sides does a triangle have? \_\_\_\_\_

5. Draw a vertical line in this box.



6. What are the coordinates of the point marked on the grid below.

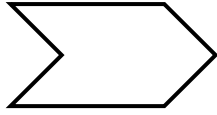


7. What is the name of this quadrilateral below:

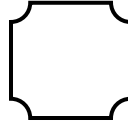
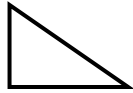


## Obair Bhaile 8

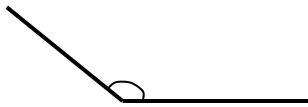
1. Tarraing an líne shiméadrachta nó na línte siméadrachta ar an chruth seo thíos:



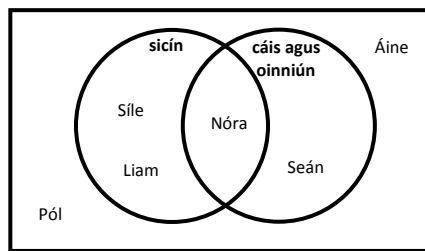
2. Cén cruth thíos a dhéanann teisiliú? Dathaigh é.



3. Cá mhéad aghaidh atá ag sféar? \_\_\_\_\_
4. Cá mhéad rinn atá ag sorcóir? \_\_\_\_\_
5. Cá mhéad faobhar atá ag priosma triantánach? \_\_\_\_\_
6. Cá mhéad dronuillinn atá ag cearnóg? \_\_\_\_\_
7. Cén sórt uillinne í seo? \_\_\_\_\_

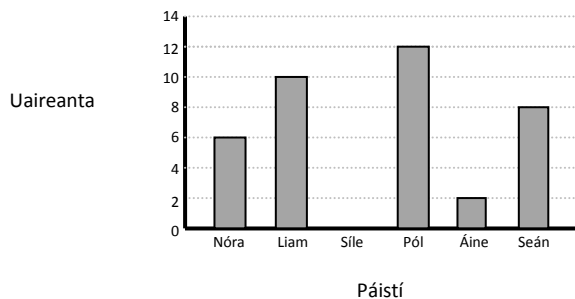


8. Seo thíos Léaráid Venn faoin bhlas criospaí is fearr le grúpa páistí.



Cén páiste a bhfuil dúil aige i gcáis agus oinniún ach nach maith leis sicín? \_\_\_\_\_

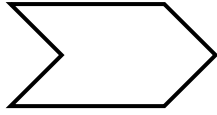
9. Seo thíos barragrah ar an fhad ama a chaitheann páistí ag súgradh ar ríomhaire gach lá.



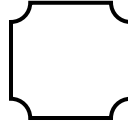
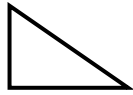
Cá fhad a chaitheann Áine ag súgradh ar an ríomhaire? \_\_\_\_\_ uair

## Homework 8

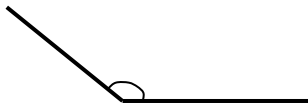
1. Draw the line/lines of symmetry on this shape below:



2. Which shape below tessellates? Shade it in.

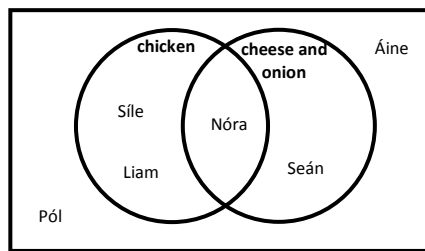


3. How many faces does a sphere have? \_\_\_\_\_
4. How many corners does a cylinder have? \_\_\_\_\_
5. How many edges does a triangular prism have? \_\_\_\_\_
6. How many right angles does a square have? \_\_\_\_\_
7. What type of angle is this?



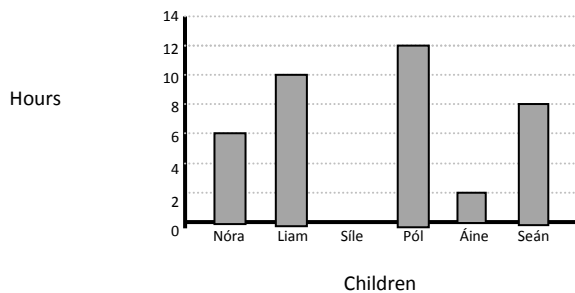
\_\_\_\_\_

8. Below is a Venn Diagram about the favourite flavour of crisps among a group of children .



Which child likes cheese and onion but doesn't like chicken? \_\_\_\_\_

9. Below is a bar graph on the amount of time children spend plating on the computer every day .



How long does Áine spend on the computer every day? \_\_\_\_\_ hours

### Obair Bhaile 9

1. Scríobh an uimhir 74,270 i bhfocail. \_\_\_\_\_

2. Scríobh isteach an comhartha ceart: < (níos lú ná), > (níos mó ná) nó = (cothrom le):

$$863 \square 638$$

3. Ciorclaigh na corruimhreacha thíos:

10    11    12    13    14    15    16    17    18    19

4. Cad é an luach atá sa digit 9 san uimhir 49,528? \_\_\_\_\_

5. Oibrigh amach an freagra:

$$\begin{array}{r} 4 \ 3 \ 5 \ 9 \\ + \ 2 \ 3 \ 6 \ 6 \\ \hline \end{array}$$

6. Oibrigh amach an freagra:

$$\begin{array}{r} 5 \ 7 \ 3 \ 9 \\ - \ 2 \ 5 \ 6 \ 7 \\ \hline \end{array}$$

7. Oibrigh amach an freagra:

$$\begin{array}{r} 9 \ 0 \ 0 \ 0 \\ - \ 2 \ 4 \ 6 \ 1 \\ \hline \end{array}$$

8. Cad é  $9 \times 8 =$  \_\_\_\_\_

9. Cad é  $54 \div 9 =$  \_\_\_\_\_

10. Oibrigh amach an freagra:

$$\begin{array}{r} 3 \ 7 \\ \times \ 4 \\ \hline \end{array}$$

11. Oibrigh amach an freagra:

$$\begin{array}{r} 4 \overline{)84} \\ \hline \end{array}$$

### Homework 9

1. Write the number 74,270 in words. \_\_\_\_\_

2. Write in the correct sign: < (less than), > (greater than) or = (equal to):

$$863 \square 638$$

3. Circle the odd numbers below:

10    11    12    13    14    15    16    17    18    19

4. What is the value of the digit 9 in the number 49,528? \_\_\_\_\_

5. Work out the answer:

$$\begin{array}{r} 4 \ 3 \ 5 \ 9 \\ + \ 2 \ 3 \ 6 \ 6 \\ \hline \end{array}$$

6. Work out the answer:

$$\begin{array}{r} 5 \ 7 \ 3 \ 9 \\ - \ 2 \ 5 \ 6 \ 7 \\ \hline \end{array}$$

7. Work out the answer:

$$\begin{array}{r} 9 \ 0 \ 0 \ 0 \\ - \ 2 \ 4 \ 6 \ 1 \\ \hline \end{array}$$

8. What is  $9 \times 8 =$  \_\_\_\_\_

9. What is  $54 \div 9 =$  \_\_\_\_\_

10. Work out the answer:

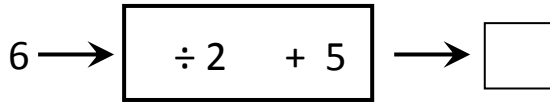
$$\begin{array}{r} 3 \ 7 \\ \times \ 4 \\ \hline \end{array}$$

11. Work out the answer:

$$\begin{array}{r} 4 \overline{)84} \\ \hline \end{array}$$

**Obair Bhaile 10**

1. Cad iad na hiolraithe de 5 idir 30 agus 50? \_\_\_\_\_
2. Cad iad na fachtóirí den uimhir 10? \_\_\_\_\_
3. Cad é an uimhir a thagann amach an mheaisín feidhme seo?



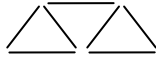
4. Cad é an chéad uimhir eile sa phatrún seo?

4      8      12      16      20      24      28      \_\_\_\_\_

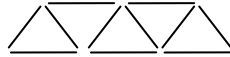
5. Cá mhéad líne a bheadh i bPatrún 4 den seicheamh seo thíos?



Patrún 1



Patrún 2



Patrún 3

\_\_\_\_\_

6. Slánaigh an uimhir 6278 go dtí an míle is cóngaraí. \_\_\_\_\_
7. Cén codán den chruth seo atá scáthaithe?



\_\_\_\_\_

8. Cén codán den chruth seo atá scáthaithe?



\_\_\_\_\_

9. Ciorclaigh an codán thíos atá cothrom le  $\frac{1}{3}$ .

$\frac{1}{2}$

$\frac{2}{6}$

$\frac{3}{6}$

$\frac{4}{8}$

10. Cad é  $\frac{1}{3}$  de 21? \_\_\_\_\_

11. Scríobh an t-am cúig i ndiaidh a dó dhéag sa chlog digiteach. \_\_\_\_\_

12. Cá mhéad ceintiméadar atá i  $1\frac{1}{2}$ m? \_\_\_\_\_ cm

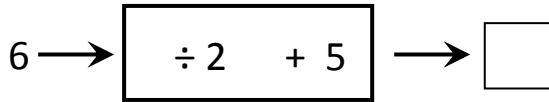
13. Cá mhéad gram atá i 5kg? \_\_\_\_\_ g

**Homework 10**

1. What are the multiples of 5 between 30 and 50? \_\_\_\_\_

2. What are the factors of the number 10? \_\_\_\_\_

3. What is the number that comes out of this function machine?



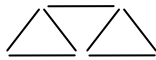
4. What is the next number in this pattern?

4      8      12      16      20      24      28      \_\_\_\_\_

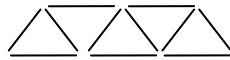
5. How many lines would be in Pattern 4 in this sequence below?



Pattern 1



Pattern 2



Pattern 3

\_\_\_\_\_

6. Round the number 6278 to the nearest thousand. \_\_\_\_\_

7. What fraction of this shape is shaded?



\_\_\_\_\_

8. What fraction of this shape is shaded?



\_\_\_\_\_

9. Circle the fraction below that is equal to  $\frac{1}{3}$ .

$\frac{1}{2}$

$\frac{2}{6}$

$\frac{3}{6}$

$\frac{4}{8}$

10. What is  $\frac{1}{3}$  of 21? \_\_\_\_\_

11. Write the time *five past twelve* in digital form. \_\_\_\_\_

12. How many centimetres are in  $1\frac{1}{2}$ m? \_\_\_\_\_ cm

13. How many grams are in 5kg? \_\_\_\_\_ g

**Obair Bhaile 11**

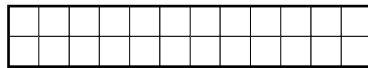
1. Cá mhéad millilítir atá i 7L? \_\_\_\_\_ml

2. Cad é an imlíne den dronuilleog seo thíos?



\_\_\_\_\_cm


3. Cad é an t-achar den chruth seo thíos?



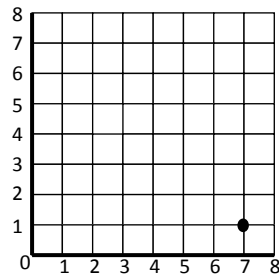
\_\_\_\_\_cm<sup>2</sup>

4. Cá mhéad slios atá ag peinteagán? \_\_\_\_\_

5. Tarraing líne thrasnánach bhosca thíos.

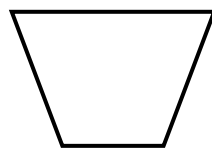


6. Cad iad na comhordanáidí den pointe atá marcáilte ar an eangach thíos.



( \_\_, \_\_ )

7. Cad é an t-ainm atá ar an cheathairshleasán seo thíos:



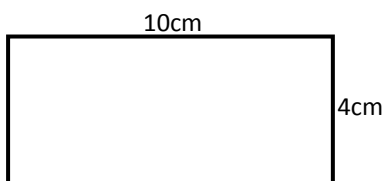
\_\_\_\_\_



### Homework 11

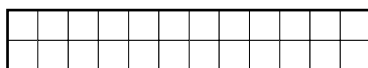
1. How many millilitres are in 7L? \_\_\_\_\_ ml

2. What is the perimeter of this rectangle below?



\_\_\_\_\_ cm


3. What is the area of this shape below?



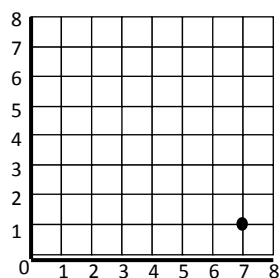
\_\_\_\_\_ cm<sup>2</sup>

4. How many sides does a pentagon have? \_\_\_\_\_

5. Draw a diagonal line in this box below.

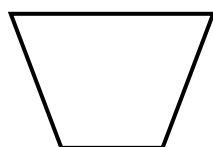


6. What are the coordinates of the point marked on the grid below.



( \_\_, \_\_ )

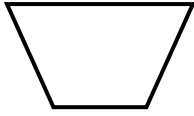
7. What is the name of this quadrilateral below:



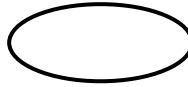
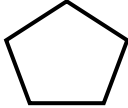
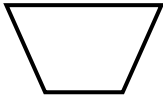
\_\_\_\_\_

**Obair Bhaile 12**

1. Tarraing an líne shiméadrachta nó na línte siméadrachta ar an chruth seo thíos:



2. Cén cruth thíos a dhéanann teisiliú? Dathaigh é.



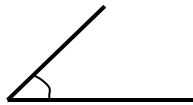
3. Cá mhéad aghaidh atá ag pirimid le bonn triantánach? \_\_\_\_\_

4. Cá mhéad rinn atá ag pirimid le bonn chearnach? \_\_\_\_\_

5. Cá mhéad faobhar atá ag ciúb? \_\_\_\_\_

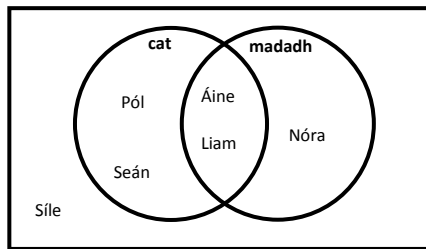
6. Cá mhéad dronuillinn atá ag heicseagán? \_\_\_\_\_

7. Cén sórt uillinne í seo?



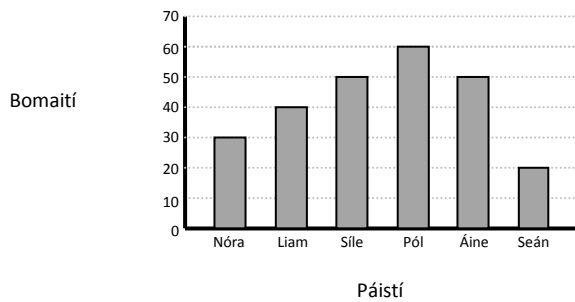
\_\_\_\_\_

8. Seo thíos Léaráid Venn faoin pheata is fearr le grúpa páistí.



Cén páiste nach bhfuil dúil aici i gceann ar bith acu? \_\_\_\_\_

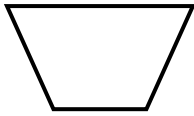
9. Seo thíos barragraf ar an fhad ama a ghlac sé ar ghrúpa páistí an obair bhaile a dhéanamh.



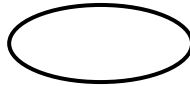
Cén páiste a chaith uair an chloig ag déanamh an obair bhaile? \_\_\_\_\_

## Homework 12

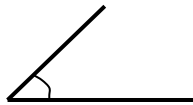
1. Draw the line/lines of symmetry on this shape below:



2. Which shape below tessellates? Shade it in.

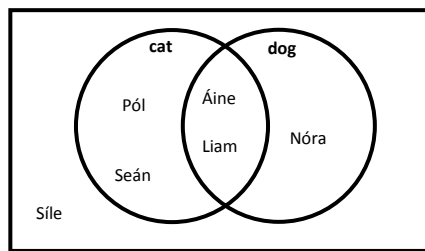


3. How many faces does a triangular-based pyramid have? \_\_\_\_\_
4. How many corners does a square-based pyramid have? \_\_\_\_\_
5. How many edges does a cube have? \_\_\_\_\_
6. How many right angles in a hexagon? \_\_\_\_\_
7. What type of angle is this?



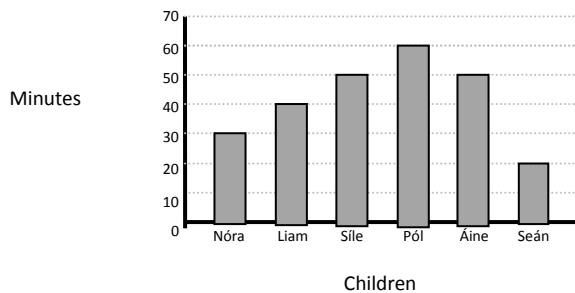
\_\_\_\_\_

8. Below is a Venn Diagram about the a group of children's favourite pet.



Which child likes neither cats nor dogs? \_\_\_\_\_

9. Below is a bar graph on the amount of time it took a group of children to complete their homework.



Which child spent an hour doing homework? \_\_\_\_\_

### Obair Bhaile 13

1. Scríobh an uimhir 54, 853 i bhfocail. \_\_\_\_\_

2. Scríobh isteach an comhartha ceart: <, > nó = thíos:

$$206 \square 206$$

3. Ciorclaigh na corruimhreacha thíos:

67    98    64    35    90    21    76    95    31    22    12

4. Cad é an luach atá sa digit 5 san uimhir 54,853? \_\_\_\_\_

5. Oibrigh amach an freagra:

$$\begin{array}{r} 8 \ 3 \ 2 \ 6 \\ + \ 6 \ 4 \ 3 \ 7 \\ \hline \end{array}$$

6. Oibrigh amach an freagra:

$$\begin{array}{r} 6 \ 3 \ 2 \ 6 \\ - \ 3 \ 5 \ 8 \ 9 \\ \hline \end{array}$$

7. Oibrigh amach an freagra:

$$\begin{array}{r} 9 \ 0 \ 0 \ 0 \\ - \ 3 \ 6 \ 4 \ 2 \\ \hline \end{array}$$

8. Cad é  $8 \times 8 =$  \_\_\_\_\_

9. Cad é  $54 \div 9 =$  \_\_\_\_\_

10. Oibrigh amach an freagra:

$$\begin{array}{r} 4 \ 8 \\ \times \ 6 \\ \hline \end{array}$$

11. Oibrigh amach an freagra:

$$\begin{array}{r} 5 \overline{)55} \\ \hline \end{array}$$

### Homework 13

1. Write the number 54, 853 in words. \_\_\_\_\_

2. Write in the correct sign: <, > or = below:

$$206 \square 206$$

3. Circle the odd numbers below:

67    98    64    35    90    21    76    95    31    22    12

4. What is the value of the digit 5 in the number 54,853? \_\_\_\_\_

5. Work out the answer:

$$\begin{array}{r} 8 \ 3 \ 2 \ 6 \\ + \ 6 \ 4 \ 3 \ 7 \\ \hline \end{array}$$

6. Work out the answer:

$$\begin{array}{r} 6 \ 3 \ 2 \ 6 \\ - \ 3 \ 5 \ 8 \ 9 \\ \hline \end{array}$$

7. Work out the answer:

$$\begin{array}{r} 9 \ 0 \ 0 \ 0 \\ - \ 3 \ 6 \ 4 \ 2 \\ \hline \end{array}$$

8. What is  $8 \times 8 =$  \_\_\_\_\_

9. What is  $54 \div 9 =$  \_\_\_\_\_

10. Work out the answer:

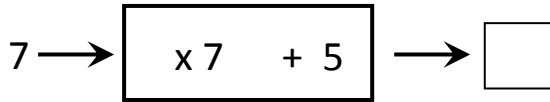
$$\begin{array}{r} 4 \ 8 \\ \times \ 6 \\ \hline \end{array}$$

11. Work out the answer:

$$\begin{array}{r} 5 \overline{)55} \\ \underline{\quad} \end{array}$$

**Obair Bhaile 14**

1. Cad iad na hiolraithe de 6 idir 20 agus 40? \_\_\_\_\_
2. Cad iad na fachtóirí den uimhir 15? \_\_\_\_\_
3. Cad é an uimhir a thagann amach an mheaisín feidhme seo?

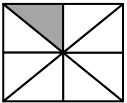


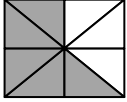
4. Cad é an chéad uimhir eile sa phatrún seo?  
6            10            14            18            22            \_\_\_\_\_

5. Cá mhéad ponc a bheadh i bPatrún 4 den seicheamh seo thíos?



6. Slánaigh an uimhir 7642 go dtí an deich is cóngaraí. \_\_\_\_\_

7. Cén codán den chruth seo atá scáthaithe?  
 \_\_\_\_\_

8. Cén codán den chruth seo atá scáthaithe?  
 \_\_\_\_\_

9. Ciorclaigh an codán thíos atá cothrom le  $\frac{1}{4}$ .

$\frac{1}{4}$              $\frac{2}{16}$              $\frac{3}{12}$              $\frac{4}{10}$

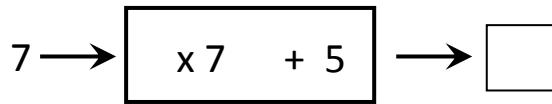
10. Cad é  $\frac{2}{3}$  de 45? \_\_\_\_\_
11. Scríobh an t-am *fiche go dtí a naoi* sa chlog digiteach. \_\_\_\_\_
12. Cá mhéad milliméadar atá i gceintiméadar? \_\_\_\_\_ mm
13. Cá mhéad gram atá i  $3\frac{1}{2}$ kg? \_\_\_\_\_ g

**Homework 14**

1. What are the multiples of 6 between 20 and 40? \_\_\_\_\_

2. What are the factors of the number 15? \_\_\_\_\_

3. What is the number that comes out of this function machine?



4. What is the next number in this pattern?

6            10            14            18            22            \_\_\_\_\_

5. How many dots would be in Pattern 4 in this sequence below?



6. Round the number 7642 to the nearest ten. \_\_\_\_\_

7. What fraction of this shape is shaded?



8. What fraction of this shape is shaded?



9. Circle the fraction below that is equal to  $\frac{1}{8}$ .

$\frac{1}{4}$              $\frac{2}{16}$              $\frac{3}{12}$              $\frac{4}{10}$

10. What is  $\frac{2}{3}$  of 45? \_\_\_\_\_

11. Write the time *twenty to nine* in digital form. \_\_\_\_\_

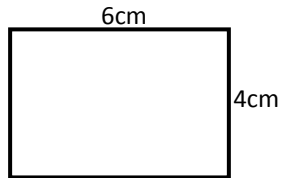
12. How many millimetres in a centimetre? \_\_\_\_\_ mm

13. How many grams are in  $3\frac{1}{2}$ kg? \_\_\_\_\_ g

**Obair Bhaile 15**

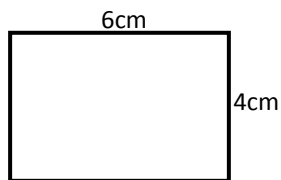
1. Cá mhéad millilítir atá i  $4\frac{1}{2}$ L? \_\_\_\_\_ml

2. Cad é an imlíne den dronuilleog seo thíos?



\_\_\_\_\_cm


3. Cad é an t-achar den chruth seo thíos?



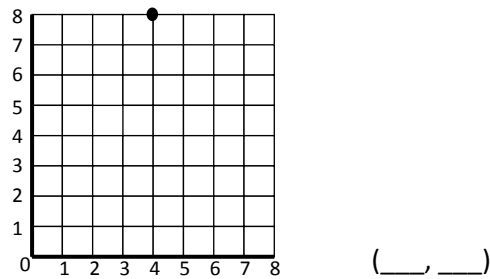
\_\_\_\_\_cm<sup>2</sup>

4. Cá mhéad slios atá ag ochtagán? \_\_\_\_\_

5. Tarraing líne chuartha bhosca thíos.



6. Cad iad na comhordanáidí den pointe atá marcáilte ar an eangach thíos.



7. Cad é an t-ainm atá ar an cheathairshleasán seo thíos:



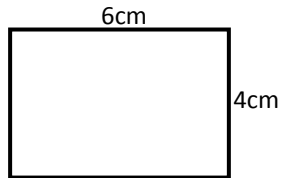
\_\_\_\_\_



**Homework 15**

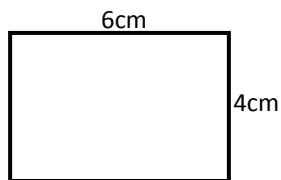
1. How many millilitres are in  $4\frac{1}{2}$ L? \_\_\_\_\_ ml

2. What is the perimeter of this rectangle below?



\_\_\_\_\_ cm


3. What is the area of this shape below?



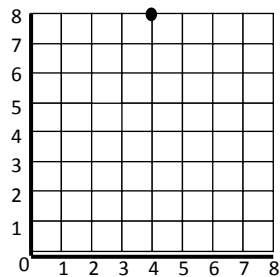
\_\_\_\_\_ cm<sup>2</sup>

4. How many sides does an octagon have? \_\_\_\_\_

5. Draw a curved line in this box.



6. What are the coordinates of the point marked on the grid below.



( \_\_, \_\_ )

7. What is the name of this quadrilateral below:



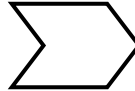
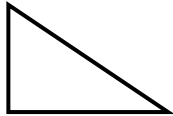
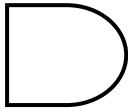
\_\_\_\_\_

**Obair Bhaile 16**

1. Tarraing an líne shiméadrachta nó na línte siméadrachta ar an chruth seo thíos:



2. Cén cruth thíos nach ndéanann teisiliú? Dathaigh é.



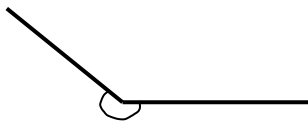
3. Cá mhéad aghaidh atá ag ciúbóideach? \_\_\_\_\_

4. Cá mhéad rinn atá ag cón? \_\_\_\_\_

5. Cá mhéad faobhar atá ag sorcóir? \_\_\_\_\_

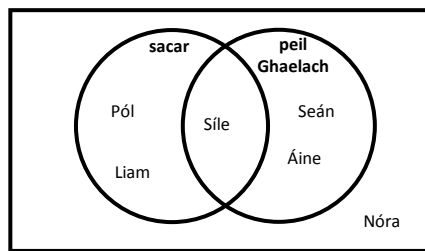
6. Cá mhéad dronuillinn atá ag triantán dronuilleach? \_\_\_\_\_

7. Cén sórt uillinne í seo?



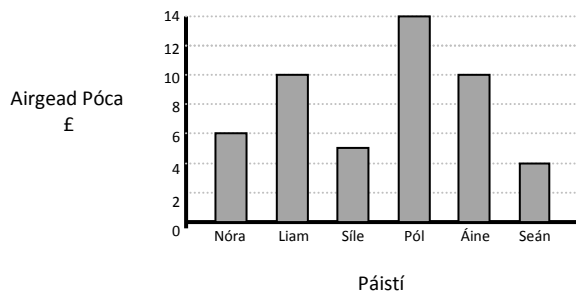
\_\_\_\_\_

8. Seo thíos Léaráid Venn faoin spórt a bhfuil dúil ag grúpa páistí iontu.



Cén páiste nach bhfuil dúil aici i sacar nó sa pheil Ghaelach? \_\_\_\_\_

9. Seo thíos barragrah ar an méid airgead póca a fhaigheann grúpa páistí gach seachtain.



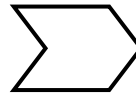
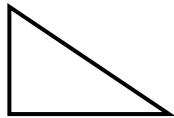
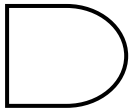
Cén dá pháiste a fhaigheann an méid céanna airgid? \_\_\_\_\_

## Homework 16

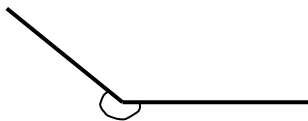
1. Draw the line/lines of symmetry on this shape below:



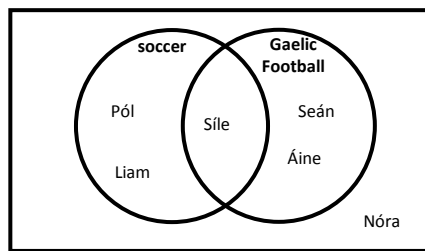
2. Which shape below does not tessellate? Shade it in.



3. How many faces does a cuboid have? \_\_\_\_\_
4. How many corners does a cone have? \_\_\_\_\_
5. How many edges does a cylinder have? \_\_\_\_\_
6. How many right angles are in a right angle triangle? \_\_\_\_\_
7. What type of angle is this? \_\_\_\_\_

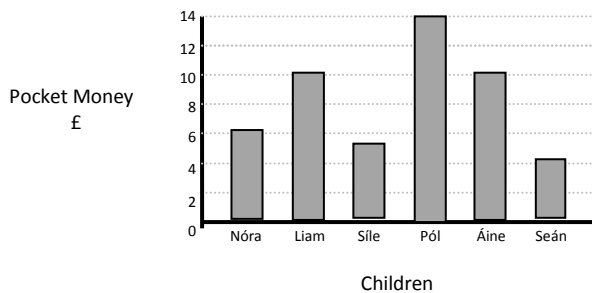


8. Below is Venn Diagram about the sports a group of children enjoy.



- Which child likes neither soccer nor Gaelic football? \_\_\_\_\_

9. Below is a bar-graph about the amount of pocket money a group of children get each week.



- Which two children get the same amount of pocket money? \_\_\_\_\_

### Obair Bhaile 17

1. Scríobh an uimhir 75,985 i bhfocail. \_\_\_\_\_

2. Scríobh isteach an comhartha ceart: <, > nó = :

$$851 \square 815$$

3. Ciorclaigh na ré-uimhreacha thíos:

67      98      64      35      90      21      76      95      31      22      12

4. Cad é an luach atá sa digit 3 san uimhir 46,931? \_\_\_\_\_

5. Oibrigh amach an freagra:

$$\begin{array}{r} 6 \ 4 \ 2 \ 5 \\ + \ 4 \ 3 \ 7 \ 5 \\ \hline \end{array}$$

6. Oibrigh amach an freagra:

$$\begin{array}{r} 4 \ 3 \ 7 \ 9 \\ - \ 2 \ 4 \ 6 \ 8 \\ \hline \end{array}$$

7. Oibrigh amach an freagra:

$$\begin{array}{r} 7 \ 0 \ 0 \ 0 \\ - \ 6 \ 5 \ 4 \ 7 \\ \hline \end{array}$$

8. Cad é  $9 \times 8 =$  \_\_\_\_\_

9. Cad é  $81 \div 9 =$  \_\_\_\_\_

10. Oibrigh amach an freagra:

$$\begin{array}{r} 6 \ 3 \\ \times \quad 7 \\ \hline \hline \end{array}$$

11. Oibrigh amach an freagra:

$$\begin{array}{r} 6 \overline{)90} \\ \hline \end{array}$$

**Homework 17**

1. Write the number 75,985 in words. \_\_\_\_\_

2. Write in the correct sign: <, > or = :

$$851 \square 815$$

3. Circle the even numbers below:

67      98      64      35      90      21      76      95      31      22      12

4. What is the value of the digit 3 in the number 46,931? \_\_\_\_\_

5. Work out the answer:

$$\begin{array}{r} 6425 \\ + 4375 \\ \hline \end{array}$$

6. Work out the answer:

$$\begin{array}{r} 4379 \\ - 2468 \\ \hline \end{array}$$

7. Work out the answer:

$$\begin{array}{r} 7000 \\ - 6547 \\ \hline \end{array}$$

8. What is  $9 \times 8 =$  \_\_\_\_\_

9. What is  $81 \div 9 =$  \_\_\_\_\_

10. Work out the answer:

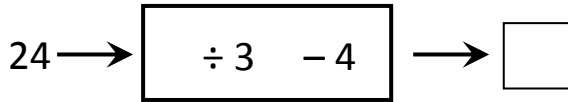
$$\begin{array}{r} 63 \\ \times 7 \\ \hline \end{array}$$

11. Work out the answer:

$$\begin{array}{r} 6 \overline{)90} \\ \hline \end{array}$$

**Obair Bhaile 18**

1. Cad iad na hiolraithe de 7 idir 20 agus 50? \_\_\_\_\_
2. Cad iad na fachtóirí den uimhir 12? \_\_\_\_\_
3. Cad é an uimhir a thagann amach an mheaisín feidhme seo?



4. Cad é an chéad uimhir eile sa phatrún seo?  
 1      2      4      7      11      16      22      \_\_\_\_\_

5. Cá mhéad ponc a bheadh i bPatrún 4 den seicheamh seo thíos?



6. Slánaigh an uimhir 73,863 go dtí an céad is cóngaraí. \_\_\_\_\_
7. Cén codán den chruth seo atá scáthaithe?



8. Cén codán den chruth seo atá scáthaithe?



9. Ciorclaigh an codán thíos atá cothrom le  $\frac{3}{4}$ .

$\frac{3}{4}$                    $\frac{4}{6}$                    $\frac{5}{10}$                    $\frac{8}{10}$

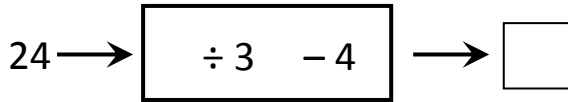
10. Cad é  $\frac{3}{4}$  de 36? \_\_\_\_\_
11. Scríobh an t-am cúig go dtí a dó sa chlog digiteach. \_\_\_\_\_
12. Cá mhéad méadar atá i gCilliméadar? \_\_\_\_\_ cm
13. Cá mhéad gram atá i 6½kg? \_\_\_\_\_ g

**Homework 18**

1. What are the multiples of 7 between 20 and 50? \_\_\_\_\_

2. What are the factors of the number 12? \_\_\_\_\_

3. What is the number that comes out of this function machine?



4. What is the next number in this pattern?

1      2      4      7      11      16      22      \_\_\_\_\_

5. How many dots would be in Pattern 4 in this sequence below?



6. Round the number 73,863 to the nearest hundred. \_\_\_\_\_

7. What fraction of this shape is shaded?



8. What fraction of this shape is shaded?



9. Circle the fraction below that is equal to  $\frac{3}{4}$ .

$\frac{3}{4}$        $\frac{4}{6}$        $\frac{5}{10}$        $\frac{8}{10}$

10. What is  $\frac{3}{4}$  of 36? \_\_\_\_\_

11. Write the time *five to two* in digital form. \_\_\_\_\_

12. How many metres in a kilometre? \_\_\_\_\_ cm

13. How many grams are in  $6\frac{1}{2}$ kg? \_\_\_\_\_ g

**Obair Bhaile 19**

1. Cá mhéad millilítir atá i  $7\frac{1}{2}$ L? \_\_\_\_\_ml

2. Cad é an imlíne den dronuilleog seo thíos?



\_\_\_\_\_cm


3. Cad é an t-achar den chruth seo thíos?



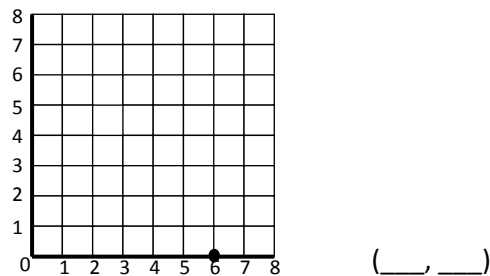
\_\_\_\_\_cm<sup>2</sup>

4. Cá mhéad síos atá ag comhthreomharán? \_\_\_\_\_

5. Tarraing línte comhthreomhara sa bhosca thíos.



6. Cad iad na comhordanáidí den phointe atá marcáilte ar an eangach thíos.



( \_\_, \_\_ )

7. Cad é an t-ainm atá ar an cheathairshleasán seo thíos:



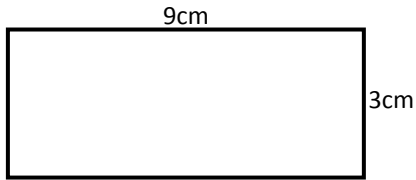
\_\_\_\_\_



**Homework 19**

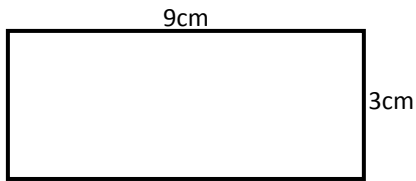
1. How many millilitres are in  $7\frac{1}{2}$ L? \_\_\_\_\_ ml

2. What is the perimeter of this rectangle below?



\_\_\_\_\_ cm


3. What is the area of this shape below?



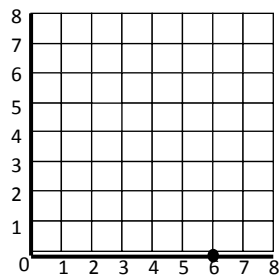
\_\_\_\_\_ cm<sup>2</sup>

4. How many sides does a parallelogram have? \_\_\_\_\_

5. Draw parallel lines in this box below.



6. What are the coordinates of the point marked on the grid below.



( \_\_, \_\_ )

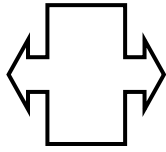
7. What is the name of this quadrilateral below:



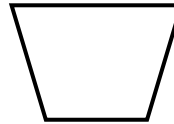
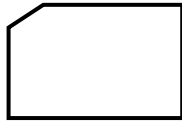
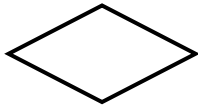
\_\_\_\_\_

## Obair Bhaile 20

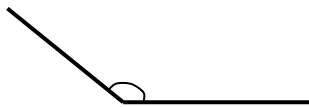
1. Tarraing an líne shiméadrachta nó na línte siméadrachta ar an chruth seo thíos:



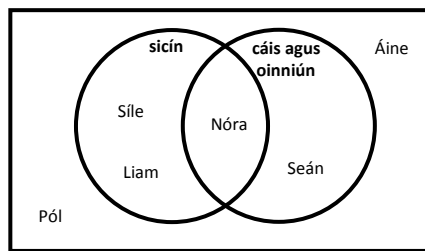
2. Cén cruth thíos nach déanann teisiliú? Dathaigh é.



3. Cá mhéad aghaidh atá ag sféar? \_\_\_\_\_
4. Cá mhéad rinn atá ag ciúb? \_\_\_\_\_
5. Cá mhéad faobhar atá ag sorcóir? \_\_\_\_\_
6. Cá mhéad dronuillinn atá ag ochtagán? \_\_\_\_\_
7. Cén sórt uillinne í seo? \_\_\_\_\_

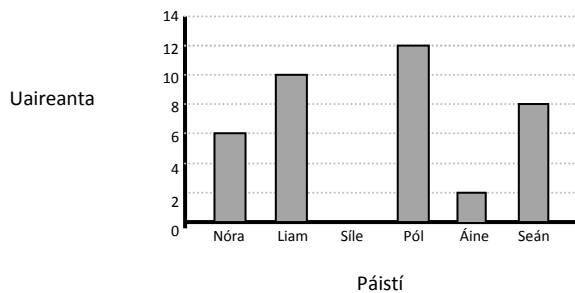


8. Seo thíos Léaráid Venn faoin bhlas criospaí is fearr le grúpa páistí.



Cén páistí a bhfuil dúil acu i sicín ach nach bhfuil dúil acu i gcáis agus oinniún? \_\_\_\_\_

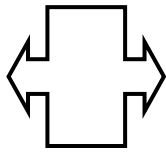
9. Seo thíos barragraf ar an fhad ama a chaitheann páistí ag súgradh ar ríomhaire gach lá.



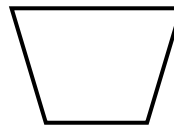
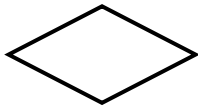
Cén páiste nach n-imríonn cluichí ríomhaire ag am ar bith? \_\_\_\_\_

**Homework 20**

1. Draw the line/lines of symmetry on this shape below:



2. Which shape below does not tessellate? Shade it in.



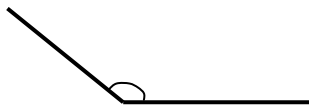
3. How many faces does a sphere have? \_\_\_\_\_

4. How many corners does a cube have? \_\_\_\_\_

5. How many edges does a cylinder have? \_\_\_\_\_

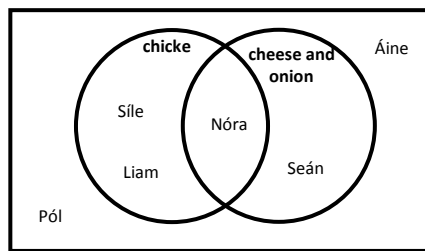
6. How many right angles does an octagon have? \_\_\_\_\_

7. What type of angle is this?



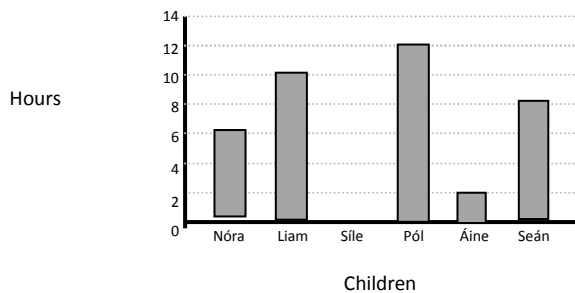
\_\_\_\_\_

8. Below is a Venn Diagram about the favourite flavour of crisps among a group of children .



Which children like chicken but don't like cheese and onion? \_\_\_\_\_

9. Below is a bar graph on the amount of time children spend plating on the computer every day.



Which child does not play computer games at all? \_\_\_\_\_

### Obair Bhaile 21

1. Scríobh an uimhir 62,951 i bhfocail. \_\_\_\_\_

2. Scríobh isteach an comhartha ceart: <, > nó = :

$$6732 \square 7623$$

3. Ciorclaigh na ré-uimhreacha thíos:

5      10      15      20      25      30      35      40      45

4. Cad é an luach atá sa digit 0 san uimhir 35,850? \_\_\_\_\_

5. Oibrigh amach an freagra:

$$\begin{array}{r} 4 \ 3 \ 2 \ 7 \\ + \ 3 \ 6 \ 8 \ 2 \\ \hline \end{array}$$

6. Oibrigh amach an freagra:

$$\begin{array}{r} 1 \ 4 \ 0 \ 9 \\ - \ 2 \ 5 \ 8 \\ \hline \end{array}$$

7. Oibrigh amach an freagra:

$$\begin{array}{r} 1 \ 0 \ 0 \ 0 \\ - \ 4 \ 6 \ 2 \\ \hline \end{array}$$

8. Cad é  $7 \times 7 =$  \_\_\_\_\_

9. Cad é  $63 \div 7 =$  \_\_\_\_\_

10. Oibrigh amach an freagra:

$$\begin{array}{r} 3 \ 8 \\ \times \ 9 \\ \hline \end{array}$$

11. Oibrigh amach an freagra:

$$\begin{array}{r} 7 \overline{)98} \\ \hline \end{array}$$

### Homework 21

1. Write the number 62,951 in words. \_\_\_\_\_

2. Write in the correct sign: <, > or = :

$$6732 \square 7623$$

3. Circle the even numbers below:

5      10      15      20      25      30      35      40      45

4. What is the value of the digit 0 in the number 35,850? \_\_\_\_\_

5. Work out the answer:

$$\begin{array}{r} 4 \ 3 \ 2 \ 7 \\ + \ 3 \ 6 \ 8 \ 2 \\ \hline \end{array}$$

6. Work out the answer:

$$\begin{array}{r} 1 \ 4 \ 0 \ 9 \\ - \ 2 \ 5 \ 8 \\ \hline \end{array}$$

7. Work out the answer:

$$\begin{array}{r} 1 \ 0 \ 0 \ 0 \\ - \ 4 \ 6 \ 2 \\ \hline \end{array}$$

8. What is  $7 \times 7 =$  \_\_\_\_\_

9. What is  $63 \div 7 =$  \_\_\_\_\_

10. Work out the answer:

$$\begin{array}{r} 3 \ 8 \\ \times \ 9 \\ \hline \end{array}$$

11. Work out the answer:

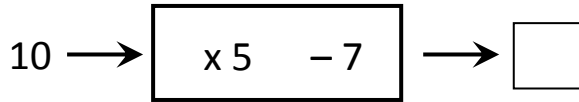
$$\begin{array}{r} 7 \overline{)98} \\ \hline \end{array}$$

**Obair Bhaile 22**

1. Cad iad na hiolraithe de 9 idir 10 agus 50? \_\_\_\_\_

2. Cad iad na factóirí den uimhir 24? \_\_\_\_\_

3. Cad é an uimhir a thagann amach an mheaisín feidhme seo?



4. Cad é an chéad uimhir eile sa phatrún seo?


3      8      13      18      23      28      \_\_\_\_\_

5. Cá mhéad ponc a bheadh i bPatrún 4 den seicheamh seo thíos?



6. Slánaigh an uimhir 23,975 go dtí an míle is cóngaraí. \_\_\_\_\_

7. Cén codán den chruth seo atá scáthaithe?



8. Cén codán den chruth seo atá scáthaithe?



9. Ciorclaigh an codán thíos atá cothrom le  $\frac{3}{4}$ .

$\frac{4}{6}$        $\frac{6}{9}$        $\frac{7}{9}$        $\frac{9}{12}$

10. Cad é  $\frac{5}{8}$  de 56? \_\_\_\_\_

11. Scríobh an t-am *deich i ndiaidh a sé* sa chlog digiteach. \_\_\_\_\_

12. Cá mhéad milliméadar atá i  $2\frac{1}{2}$ cm? \_\_\_\_\_mm

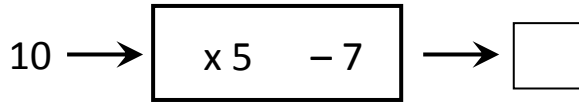
13. Cá mhéad gram atá i 10kg? \_\_\_\_\_g

**Homework 22**

1. What are the multiples of 9 between 10 and 50? \_\_\_\_\_

2. What are the factors of the number 24? \_\_\_\_\_

3. What is the number that comes out of this function machine?



4. What is the next number in this pattern?

3      8      13      18      23      28      \_\_\_\_\_

5. How many dots would be in Pattern 4 in this sequence below?




6. Round the number 23,975 to the nearest thousand. \_\_\_\_\_

7. What fraction of this shape is shaded?



8. What fraction of this shape is shaded?



9. Circle the fraction below that is equal to  $\frac{3}{4}$ .

$\frac{4}{6}$        $\frac{6}{9}$        $\frac{7}{9}$        $\frac{9}{12}$

10. What is  $\frac{5}{8}$  of 56? \_\_\_\_\_

11. Write the time *ten to six* in digital form. \_\_\_\_\_

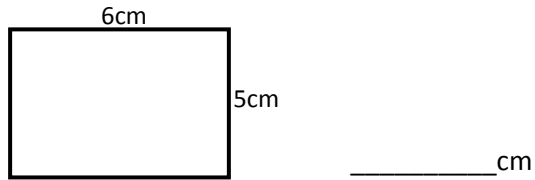
12. How many millimetres are in  $2\frac{1}{2}$ cm? \_\_\_\_\_ mm

13. How many grams are in 10kg? \_\_\_\_\_ g

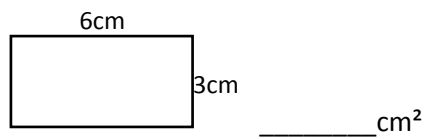
**Obair Bhaile 23**

1. Cá mhéad millilítir atá i 8L? \_\_\_\_\_ml

2. Cad é an imlíne den dronuilleog seo thíos?




3. Cad é an t-achar den chruth seo thíos?

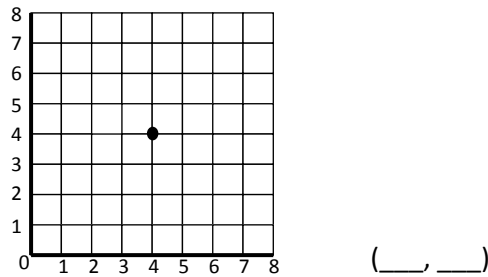


4. Cá mhéad slios atá ag heicseagán? \_\_\_\_\_

5. Tarraing línte atá ingearach le chéile sa bhosca thíos.



6. Cad iad na comhordanáidí den pointe atá marcáilte ar an eangach thíos.



7. Cad é an t-ainm atá ar an cheathairshleasán seo thíos:

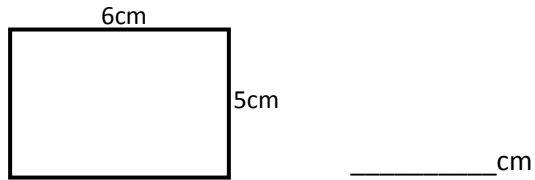




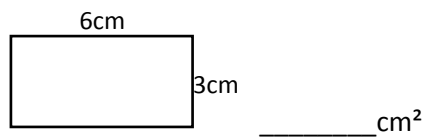
**Homework 23**

1. How many millilitres are in 8L? \_\_\_\_\_ ml

2. What is the perimeter of this rectangle below?



3. What is the area of this shape below?

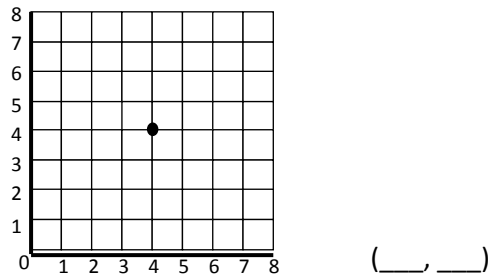


4. How many sides does a hexagon have? \_\_\_\_\_

5. Draw perpendicular lines in this box below.



6. What are the coordinates of the point marked on the grid below.

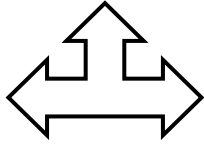


7. What is the name of this quadrilateral below:

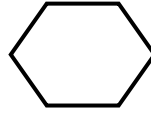
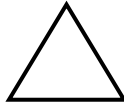
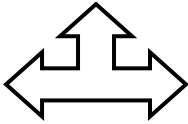


## Obair Bhaile 24

1. Tarraing an líne shiméadrachta nó na línte siméadrachta ar an chruth seo thíos:



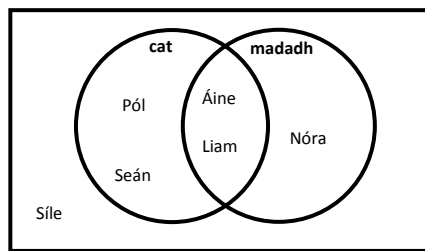
2. Cén cruth thíos nach ndéanann teisiliú? Dathaigh é.



3. Cá mhéad aghaidh atá ag priosma triantánach? \_\_\_\_\_
4. Cá mhéad rinn atá ag sféar? \_\_\_\_\_
5. Cá mhéad faobhar atá ag cón? \_\_\_\_\_
6. Cá mhéad dronuillinn atá ag dronuilleog? \_\_\_\_\_
7. Cén sórt uillinne í seo? \_\_\_\_\_

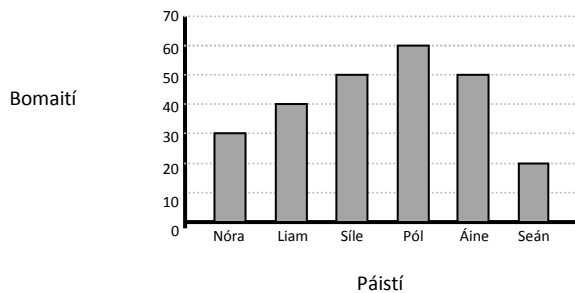


8. Seo thíos Léaráid Venn faoin pheata is fearr le grúpa páistí.



- Cén páiste a bhfuil dúil aici sna madaí ach nach maith léi cait? \_\_\_\_\_

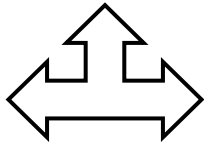
9. Seo thíos barragraf ar an fhad ama a ghlac sé ar ghrúpa páistí an obair bhaile a dhéanamh.



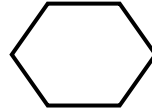
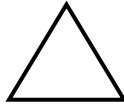
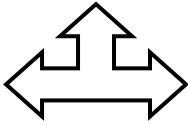
- Cén páiste is gasta a chríochnaíonn an obair bhaile? \_\_\_\_\_

## Homework 24

1. Draw the line/lines of symmetry on this shape below:



2. Which shape below does not tessellate? Shade it in.

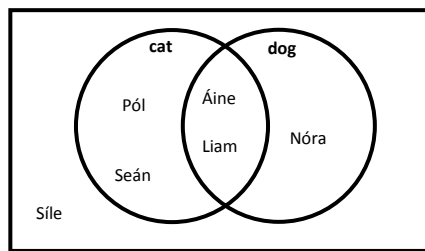


3. How many faces does a triangular prism have? \_\_\_\_\_
4. How many corners does a sphere have? \_\_\_\_\_
5. How many edges does a cone have? \_\_\_\_\_
6. How many right angles are in a rectangle? \_\_\_\_\_
7. What type of angle is this?



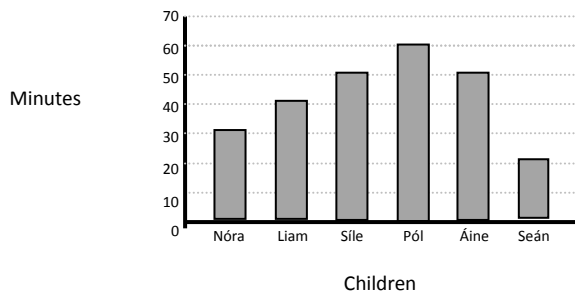
\_\_\_\_\_

8. Below is a Venn Diagram about the group of children's favourite pet.



- Which child likes dogs but doesn't like cats? \_\_\_\_\_

9. Below is a bar graph on the amount of time it took a group of children to complete their homework.



- Which child finished their homework fastest? \_\_\_\_\_









