


Obair Bhaile Mata

Leabhar 2



Ainm _____ Rang _____


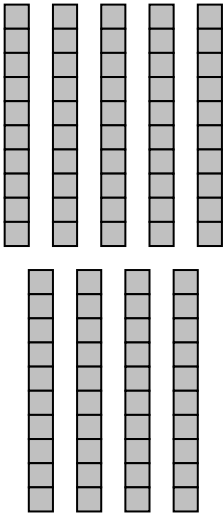



Cearnóg 100 / 100 Square

1	2	3	4	5	6	7	8	9	10
11	12	13	14	15	16	17	18	19	20
21	22	23	24	25	26	27	28	29	30
31	32	33	34	35	36	37	38	39	40
41	42	43	44	45	46	47	48	49	50
51	52	53	54	55	56	57	58	59	60
61	62	63	64	65	66	67	68	69	70
71	72	73	74	75	76	77	78	79	80
81	82	83	84	85	86	87	88	89	90
91	92	93	94	95	96	97	98	99	100

Obair Bhaile 1

1. Cén uimhir atá léirithe thíos?

Céadta	Deiceanna	Aonaid
		

2. Déan na suimeanna seo thíos.

$6 + 7 = \square$

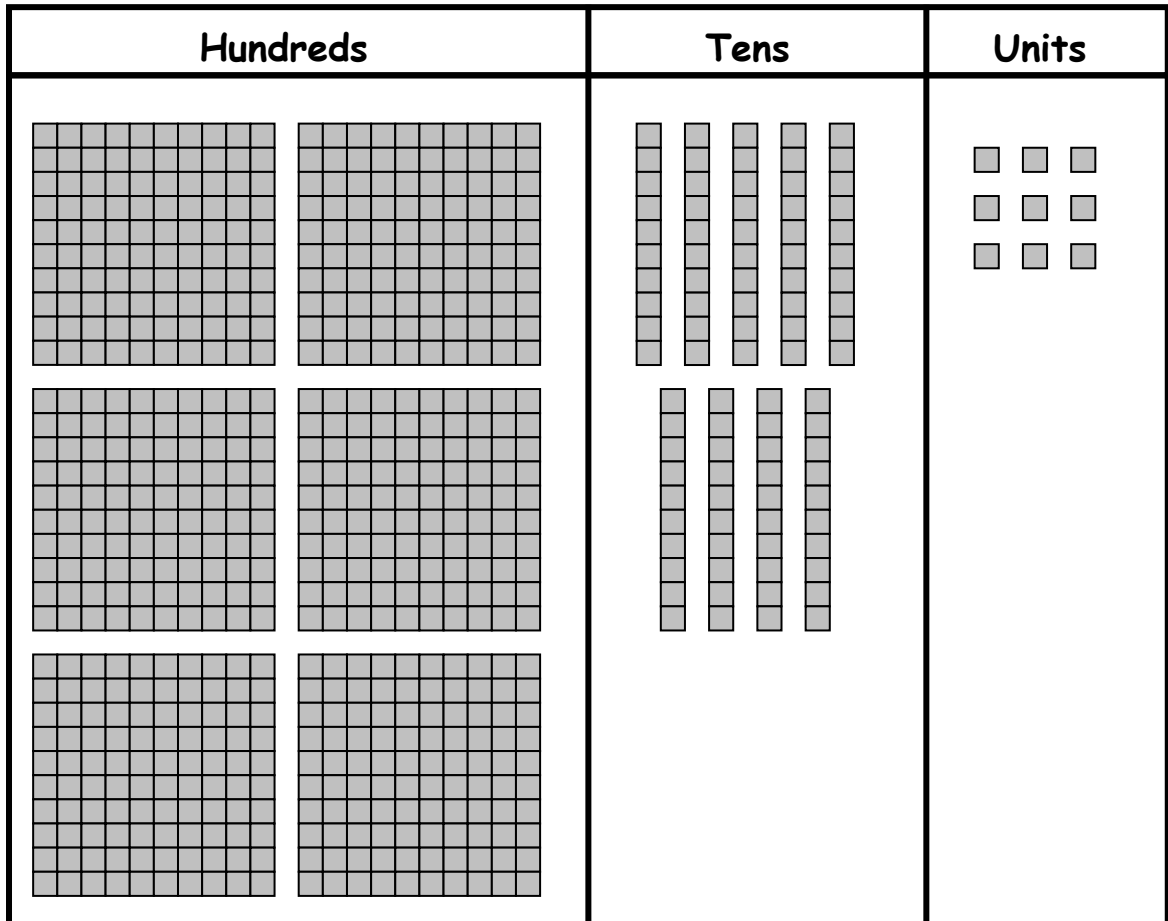
$14 - 5 = \square$

$75 + 4 = \square$

$88 - 2 = \square$

Homework 1

1. What number is illustrated below?



2. Complete these sums.

$6 + 7 = \square$

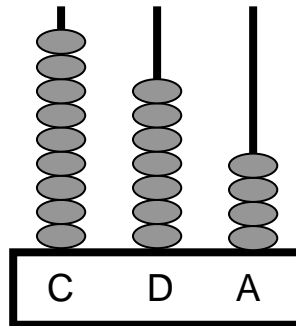
$14 - 5 = \square$

$75 + 4 = \square$

$88 - 2 = \square$

Obair Bhaile 2

1. Cad é an uimhir atá léirithe ar an abacas seo thíos?



2. Cad é an chéad uimhir eile sa seicheamh seo?

601 602 603 604 605 606

3. Cad é an uimhir atá 1 níos mó ná 407?

4. Cad é suim iomlán na n-uimhreacha seo thíos?

700 agus 50 agus 8

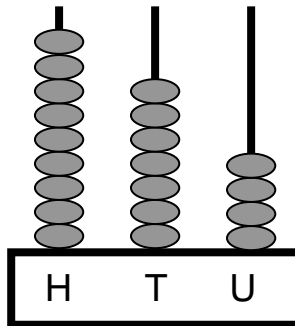
5. Déan na suimeanna seo thíos.

$77 - 5 =$

$43 + 6 =$

Homework 2

1. What number is displayed on this abacus?



2. What is the next number in this sequence?

601 602 603 604 605 606

3. What number is 1 **more** than 407?

4. What is the sum total of these numbers?

700 and 50 and 8

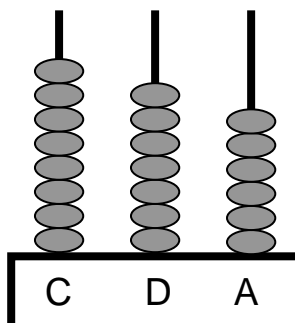
5. Complete these sums.

$$77 - 5 = \square$$

$$43 + 6 = \square$$

Obair Bhaile 3

1. Cad é an uimhir atá léirithe ar an abacas seo thíos?



2. Cad é an chéad uimhir eile sa seicheamh seo?

451 452 453 454 455 456

3. Cad é an uimhir atá 1 níos lú ná 536?

4. Cén uimhir atá i gceist leis na huimhreacha seo thíos?

500 agus 80 agus 2

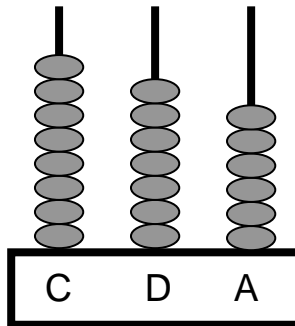
5. Déan na suimeanna seo thíos.

$$12 - 4 = \square$$

$$37 + 4 = \square$$

Homework 3

1. What number is displayed on this abacus?



2. What is the next number in this sequence?

451 452 453 454 455 456

3. What number is 1 **more** than 536?

4. What is the sum total of these numbers?


500 agus 80 agus 2

5. Complete these sums.

$12 - 4 = \square$

$37 + 4 = \square$

Obair Bhaile 4




TRASNA

- A** aon chéad fiche a trí
C dhá chéad seasca a hocht
E trí chéad is a deich
G ceithre chéad caoga a sé
I seasca a hocht
K naoi gcéad fiche a trí
L naoi déag
N trí chéad ceathair déag
Q seasca a dó
R seacht gcéad ochtó a trí
T naoi gcéad daichead a cúig
V dhá chéad caoga a naoi
X trí chéad is a haon
Z míle

ANUAS

- A** aon chéad caoga a ceathair
B trí chéad tríocha a sé
C dhá chéad is a cúig
D ocht gcéad tríocha sé
F seacht gcéad seasca a trí
H cúig chéad caoga a naoi
J ocht gcéad nócha
L aon chéad is a seacht
M fiche a haon
N tríocha a trí
O daichead a naoi
P cúig chéad caoga a dó
Q sé chéad seasca a naoi
S ocht gcéad seachtó a trí
U aon chéad cúig déag
W cúig chéad fiche
Y deich

Homework 4



ACROSS


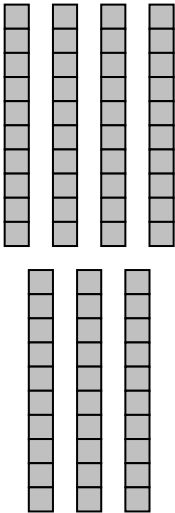

- A one hundred and three
- C two hundred and sixty eight
- E three hundred and ten
- G four hundred and fifty six
- I sixty eight
- K nine hundred and twenty three
- L nineteen
- N three hundred and fourteen
- Q sixty two
- R seven hundred and eighty three
- T nine hundred and forty five
- V two hundred and fifty nine
- X three hundred and one
- Z one thousand

DOWN

- A one hundred and four
- B three hundred and thirty six
- C two hundred and five
- D eight hundred and thirty six
- F seven hundred and sixty three
- H five hundred and fifty nine
- J eight hundred and ninety
- L one hundred and seven
- M twenty one
- N thirty three
- O forty nine
- P five hundred and fifty two
- Q six hundred and sixty nine
- S eight hundred and seventy three
- U one hundred and fifteen
- W five hundred and twenty
- Y ten

Obair Bhaile 5

1. Cén uimhir atá léirithe thíos?

Céadta	Deiceanna	Aonaid
		

2. Déan na suimeanna seo thíos.

$$8 + 7 = \square$$

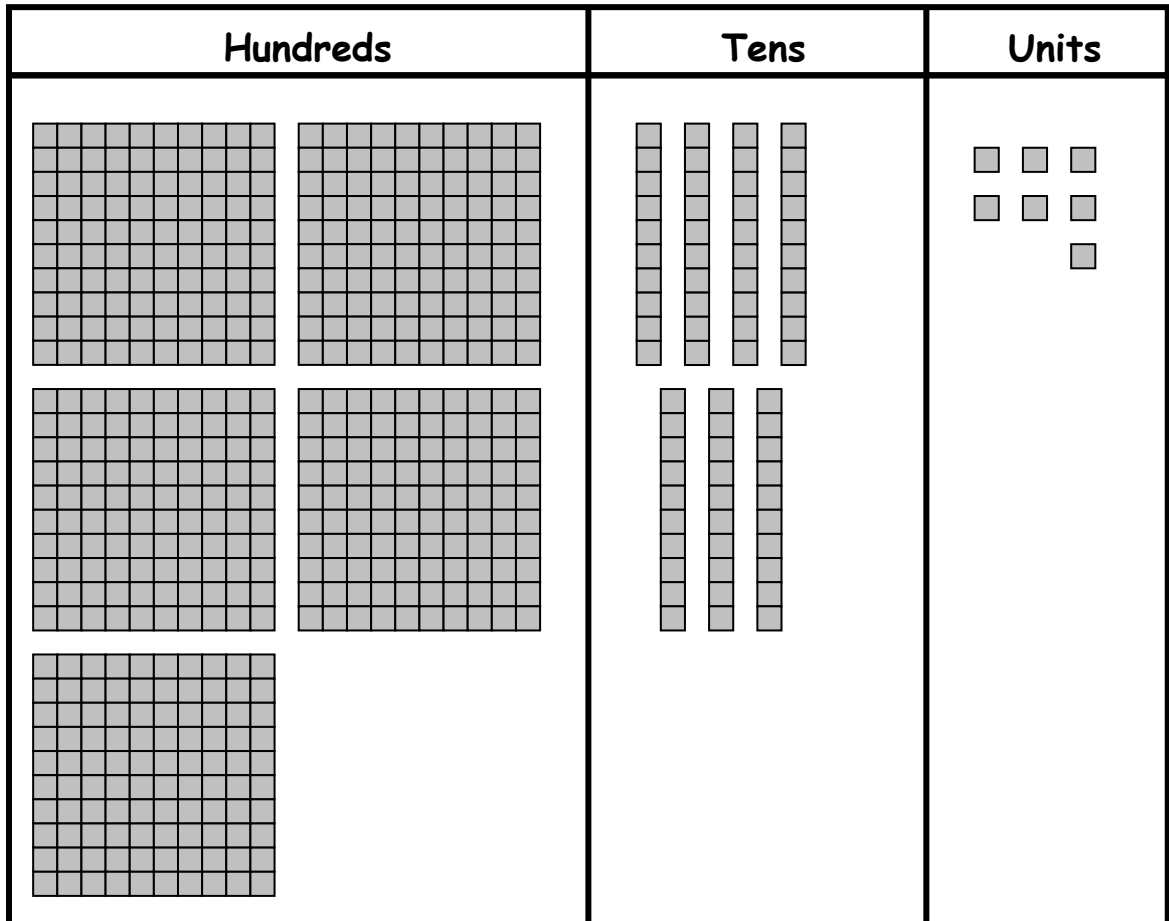
$$13 - 6 = \square$$

$$81 + 5 = \square$$

$$65 - 4 = \square$$

Homework 5

1. What number is illustrated below?



2. Complete these sums.

$$8 + 7 = \square$$

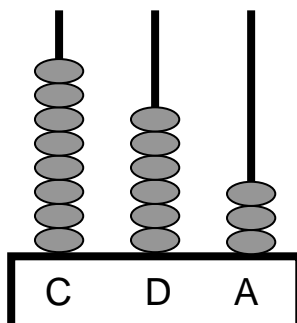
$$13 - 6 = \square$$

$$81 + 5 = \square$$

$$65 - 4 = \square$$

Obair Bhaile 6

1. Cad é an uimhir atá léirithe ar an abacas seo thíos?



2. Cad é an chéad uimhir eile sa seicheamh seo?

442 443 444 445 446 447

3. Cad é an uimhir atá 10 **níos mó** ná 635?

4. Cad é suim iomlán na n-uimhreacha seo thíos?

400 agus 20 agus 3

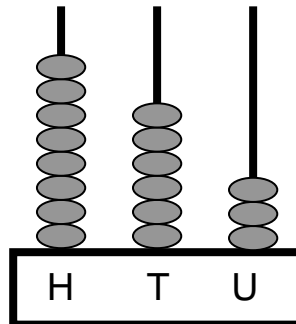
5. Déan na suimeanna seo thíos.

$9 + 7 =$

$51 + 4 =$

Homework 6

1. What number is displayed on this abacus?



2. What is the next number in this sequence?

442 443 444 445 446 447

3. What number is 10 **more** than 635?

4. What is the sum total of these numbers?

400 agus 20 agus 3

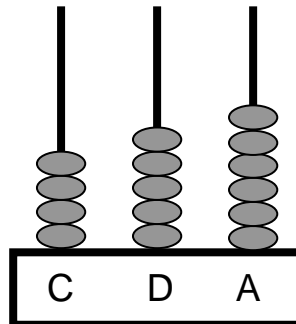
5. Complete these sums.

$9 + 7 =$

$51 + 4 =$

Obair Bhaile 7

1. Cad é an uimhir atá léirithe ar an abacas seo thíos?



2. Cad é an chéad uimhir eile sa seicheamh seo?

864 865 866 867 868 869

3. Cad é an uimhir atá 10 níos lú ná 376?

4. Cén uimhir atá i gceist leis na huimhreacha seo thíos?

200 agus 10 agus 9

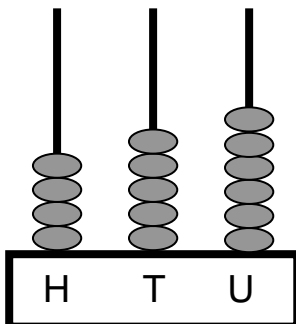
5. Déan na suimeanna seo thíos.

$11 - 7 =$

$76 - 2 =$

Homework 7

1. What number is displayed on this abacus?



2. What is the next number in this sequence?

864 865 866 867 868 869

6. What number is 10 less than 376?

3. What is the sum total of these numbers?


200 agus 10 agus 9

4. Complete these sums.

$11 - 7 = \square$

$76 - 2 = \square$

Obair Bhaile 8




TRASNA

- A** dhá chéad tríocha a trí
C dhá chéad seachtó a sé
E cúig chéad is a deich
G ceithre chéad nócha a sé
I seachtó a hocht
K naoi gcéad ochtó a trí
L fiche
N ceithre chéad cúig déag
Q seasca a sé
R ocht gcéad ochtó a sé
T seacht gcéad daichead a cúig
V aon chéad caoga a dó
X trí chéad seasca a haon
Z míle

ANUAS

- A** dhá chéad caoga a ceathair
B trí chéad caoga a sé
C dhá chéad is a cúig
D sé chéad tríocha seacht
F seacht gcéad seasca a trí
H naoi gcéad caoga
J ocht gcéad nócha
L dhá chéad is a hocht
M fiche a haon
N daichead a sé
O caoga a naoi
P cúig chéad caoga a haon
Q sé chéad seasca a dó
S ocht gcéad seachtó a trí
U aon chéad cúig déag
W cúig chéad fiche
Y nócha

Homework 8



ACROSS


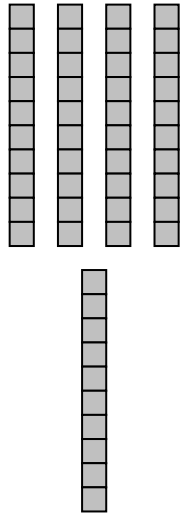
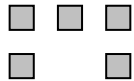
- A two hundred and thirty three
- C two hundred and seventy six
- E five hundred and ten
- G four hundred and ninety six
- I seventy eight
- K nine hundred and eighty three
- L twenty
- N four hundred and fifteen
- Q sixty six
- R eight hundred and eighty six
- T seven hundred and eighty five
- V one hundred and fifty two
- X three hundred and sixty one
- Z one thousand

DOWN

- A two hundred and fifty four
- B three hundred and fifty six
- C two hundred and five
- D six hundred and thirty seven
- F seven hundred and sixty three
- H nine hundred and fifty
- J eight hundred and ninety
- L two hundred and eight
- M twenty one
- N forty six
- O fifty nine
- P five hundred and fifty one
- Q six hundred and sixty two
- S eight hundred and seventy three
- U one hundred and fifteen
- W five hundred and twenty
- Y ninety

Obair Bhaile 9

1. Cén uimhir atá léirithe thíos?

Céadta	Deiceanna	Aonaid
		

2. Déan na suimeanna seo thíos.

$$6 + 5 = \square$$


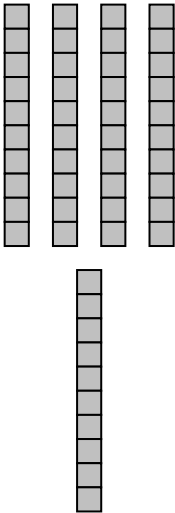
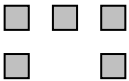
$$15 - 7 = \square$$

$$42 + 4 = \square$$

$$87 - 5 = \square$$

Homework 9

1. What number is illustrated below?

Céadta	Deiceanna	Aonaid
		

2. Complete these sums.

$6 + 5 = \square$

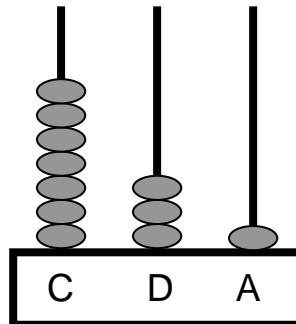
$15 - 7 = \square$

$42 + 4 = \square$

$87 - 5 = \square$

Obair Bhaile 10

1. Cad é an uimhir atá léirithe ar an abacas seo thíos?



2. Cad é an chéad uimhir eile sa seicheamh seo?

964 965 966 967 968 969

3. Cad é an uimhir atá 100 níos mó ná 473?

4. Cad é suim iomlán na n-uimhreacha seo thíos?

100 agus 70 agus 5

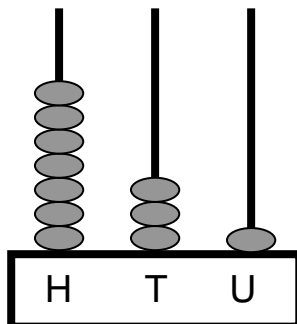
5. Déan na suimeanna seo thíos.

$7 + 4 =$

$84 + 3 =$

Homework 10

1. What number is displayed on this abacus?



2. What is the next number in this sequence?

964 965 966 967 968 969

3. What number is 100 **more** than 473?

4. What is the sum total of these numbers?

100 agus 70 agus 5

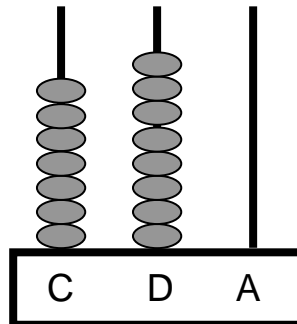
5. Complete these sums.

$7 + 4 =$

$84 + 3 =$

Obair Bhaile 11

1. Cad é an uimhir atá léirithe ar an abacas seo thíos?



2. Cad é an chéad uimhir eile sa seicheamh seo?

194 195 196 197 198 199

3. Cad é an uimhir atá 100 níos lú ná 483?

4. Cén uimhir atá i gceist leis na huimhreacha seo thíos?

900 agus 40 agus 2

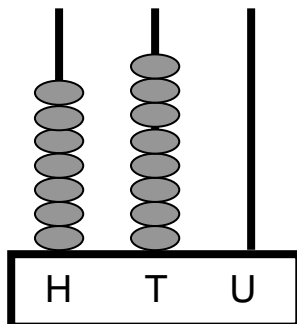
5. Déan na suimeanna seo thíos.

$13 - 5 =$

$53 - 1 =$

Homework 11

1. What number is displayed on this abacus?



2. What is the next number in this sequence?

194 195 196 197 198 199

3. What number is 100 **less** than 483?

4. What is the sum total of these numbers


900 agus 40 agus 2

5. Complete these sums

$13 - 5 = \square$

$53 - 1 = \square$

Obair Bhaile 12




TRASNA

- A** ceithre chéad seasca a dó
C seacht gcéad nócha a seacht
E aon chéad is a dó dhéag
G naoi gcéad fiche a seacht
I nócha a trí
K ocht gcéad fiche
L tríocha a ceathair
N naoi gcéad daichead a seacht
Q seachtó a naoi
R sé chéad fiche a trí
T cúig chéad daichead a seacht
V trí chéad nócha a seacht
X naoi gcéad seachtó a dó
Z míle

ANUAS

- A** ceithre chéad caoga a naoi
B dhá chéad is a seacht déag
C seacht gcéad fiche a cúig
D seacht gcéad tríocha a naoi
F seacht gcéad
H dhá chéad caoga a ceathair
J trí chéad ochtó
L trí chéad is a sé
M fiche a ceathair
N nócha a trí
O seachtó a cúig
P cúig chéad seachtó a trí
Q seacht gcéad seasca a seacht
S dhá chéad seachtó a naoi
U aon chéad fiche a cúig
W naoi gcéad fiche
Y ochtó

Homework 12



ACROSS


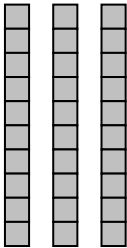

- A four hundred and sixty two
- C seven hundred and ninety seven
- E one hundred and twelve
- G nine hundred and twenty seven
- I ninety three
- K eight hundred and twenty
- L thirty four
- N nine hundred and forty seven
- Q seventy nine
- R six hundred and twenty three
- T five hundred and forty seven
- V three hundred and ninety seven
- X nine hundred and seventy two
- Z one thousand=

DOWN

- A four hundred and fifty nine
- B two hundred and seventeen
- C seven hundred and twenty five
- D seven hundred and thirty nine
- F seven hundred
- H two hundred and fifty four
- J three hundred and eighty
- L three hundred and six
- M twenty four
- N ninety three
- O seventy five
- P five hundred and seventy three
- Q seven hundred and sixty seven
- S two hundred and seventy nine
- U one hundred and twenty five
- W nine hundred and twenty
- Y eighty

Obair Bhaile 13

1. Cén uimhir atá léirithe thíos?

Céadta	Deiceanna	Aonaid
		

2. Déan na suimeanna seo thíos.

$9 + 8 =$

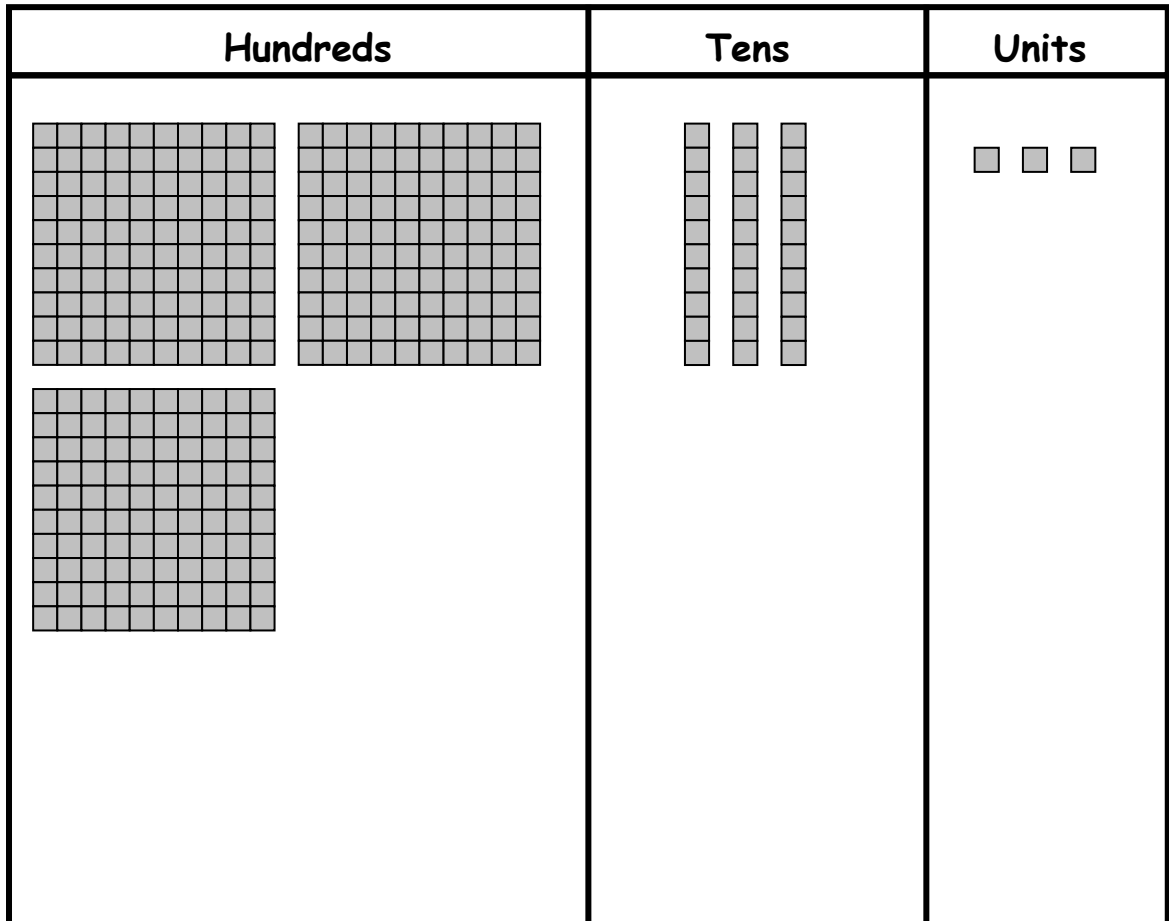
$13 - 3 =$

$55 + 4 =$

$45 - 3 =$

Homework 13

1. What number is illustrated below?



2. Complete these sums.

$9 + 8 = \square$

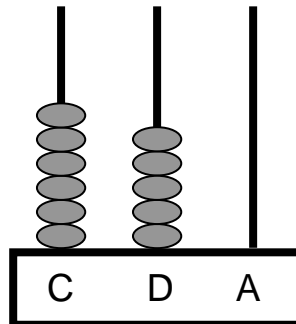
$13 - 3 = \square$

$55 + 4 = \square$

$45 - 3 = \square$

Obair Bhaile 14

1. Cad é an uimhir atá léirithe ar an abacas seo thíos?



2. Cad é an chéad uimhir eile sa seicheamh seo?

248 249 250 251 252 253

3. Cad é an uimhir atá 1 níos mó ná 862?

4. Cad é suim iomlán na n-uimhreacha seo thíos?

500 agus 30 agus 0

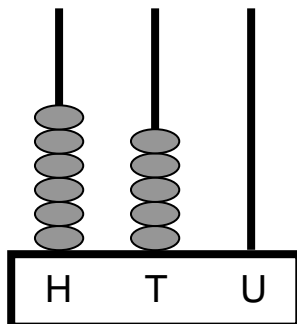
5. Déan na suimeanna seo thíos.

$9 + 3 =$

$36 + 3 =$

Homework 14

1. What number is displayed on this abacus?



2. What is the next number in this sequence?

248 249 250 251 252 253

3. What number is 1 **more** than 862?

4. What is the sum total of these numbers?

500 agus 30 agus 0

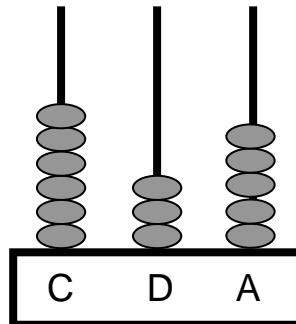
5. Complete these sums.

$9 + 3 =$

$36 + 3 =$

Obair Bhaile 15

1. Cad é an uimhir atá léirithe ar an abacas seo thíos?



2. Cad é an chéad uimhir eile sa seicheamh seo?

820 821 822 823 824 825

3. Cad é an uimhir atá 1 níos lú ná 362?

4. Cén uimhir atá i gceist leis na huimhreacha seo thíos?

300 agus 0 agus 7

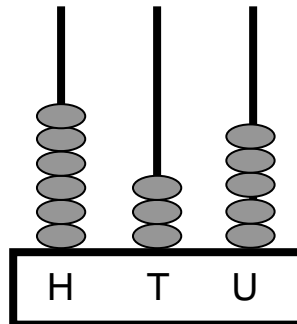
5. Déan na suimeanna seo thíos.

$16 - 9 = \square$

$88 - 6 = \square$

Homework 15

1. What number is displayed on this abacus?



2. What is the next number in this sequence?

820 821 822 823 824 825

3. What number is 1 less than 362?

4. What is the sum total of these numbers?

300 agus 0 agus 7

5. Complete these sums.

$16 - 9 = \square$

$88 - 6 = \square$

Obair Bhaile 16

1. Scríobh na huimhreacha seo i bhfigiúirí.

a) dhá chéad ochtó a ceathair _____

b) trí chéad nócha a sé _____

c) ceithre chéad sé déag _____

d) cúig chéad is a seacht _____

e) sé chéad is a dó _____

f) seacht gcéad seasca a trí _____

g) ocht gcéad fiche a ceathair _____

2. Scríobh na huimhreacha seo i bhfocail.

a) 173 _____

b) 753 _____

c) 484 _____

d) 282 _____

e) 384 _____

f) 529 _____

Homework 16

1. Write these numbers in figures.

a) two hundred and eighty four _____

b) three hundred and ninety six _____

c) four hundred and sixteen _____

d) five hundred and seven _____

e) six hundred and two _____

f) seven hundred and sixty three _____

g) eight hundred and twenty four _____

2. Write these numbers in words.

a) 173 _____

b) 753 _____

c) 484 _____


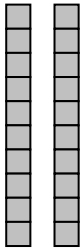

d) 282 _____

e) 384 _____

f) 529 _____

Obair Bhaile 17

1. Cén uimhir atá léirithe thíos?

Céadta	Deiceanna	Aonaid
		

2. Déan na suimeanna seo thíos.

$5 + 6 =$


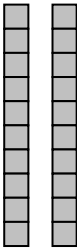

$12 - 7 =$

$95 + 2 =$

$85 - 5 =$

Homework 17

1. What number is illustrated below?

Hundreds	Tens	Units
		

2. Complete these sums.

$5 + 6 = \square$

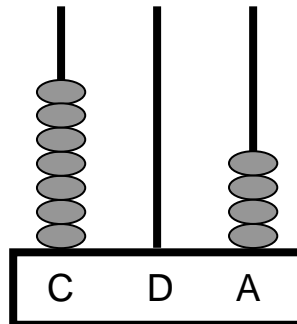
$12 - 7 = \square$

$95 + 2 = \square$

$85 - 5 = \square$

Obair Bhaile 18

1. Cad é an uimhir atá léirithe ar an abacas seo thíos?



2. Cad é an chéad uimhir eile sa seicheamh seo?

994 995 996 997 998 999

3. Cad é an uimhir atá 10 níos mó ná 593?

4. Cad é suim iomlán na n-uimhreacha seo thíos?

0 agus 40 agus 7

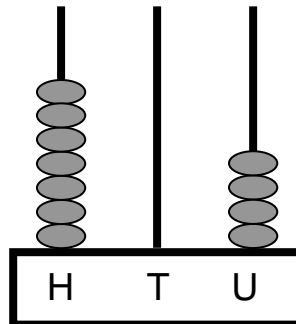
5. Déan na suimeanna seo thíos.

$7 + 8 =$

$23 + 6 =$

Homework 18

1. What number is displayed on this abacus?



2. What is the next number in this sequence?

994 995 996 997 998 999

3. What number is 10 **more** than 593?

4. What is the sum total of these numbers?

0 agus 40 agus 7

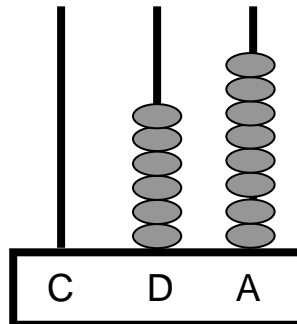
5. Complete these sums.

$7 + 8 =$

$23 + 6 =$

Obair Bhaile 19

1. Cad é an uimhir atá léirithe ar an abacas seo thíos?



2. Cad é an chéad uimhir eile sa seicheamh seo?

710 711 712 713 714 715

3. Cad é an uimhir atá 10 níos lú ná 705?

4. Cén uimhir atá i gceist leis na huimhreacha seo thíos?

900 agus 80 agus 0

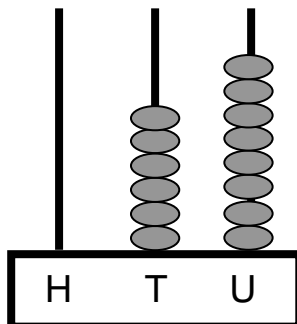
5. Déan na suimeanna seo thíos.

$$17 - 8 = \square$$

$$66 - 4 = \square$$

Homework 19

1. What number is displayed on this abacus?



2. What is the next number in this sequence?

710 711 712 713 714 715

6. What number is 10 less than 705?

3. What is the sum total of these numbers?

900 agus 80 agus 0

4. Complete these sums.

$17 - 8 = \square$

$66 - 4 = \square$

Obair Bhaile 20

1. Scríobh na huimhreacha seo i bhfigiúirí.

a) trí chéad seasca a sé _____

b) ceithre chéad ochtó a hocht _____

c) naoi gcéad seacht déag _____

d) aon chéad is a naoi _____

e) cúig chéad is a dó dhéag _____

f) seacht gcéad nócha a cúig _____

g) ocht gcéad tríocha a seacht _____

2. Scríobh na huimhreacha seo i bhfocail.

a) 740 _____

a) 953 _____

a) 276 _____

a) 195 _____

a) 642 _____

a) 963 _____

Homework 20

1. Write these numbers in figures.

a) three hundred and sixty six _____

b) four hundred and eighty eight _____

c) nine hundred and seventeen _____

d) one hundred and nine _____

e) five hundred and twelve _____

f) seven hundred and ninety five _____

g) eight hundred and thirty seven _____

2. Write these numbers in words.

a) 740 _____

b) 953 _____

c) 276 _____



d) 195 _____

e) 642 _____

f) 963 _____

Obair Bhaile 21

1. Cén uimhir atá léirithe thíos?

Céadta	Deiceanna	Aonaid
		

2. Déan na suimeanna seo thíos.

$9 + 9 =$



$16 - 7 =$

$75 + 4 =$

$98 - 7 =$

Homework 21

1. What number is illustrated below?

Céadta	Deiceanna	Aonaid
		

2. Complete these sums.

$9 + 9 = \square$

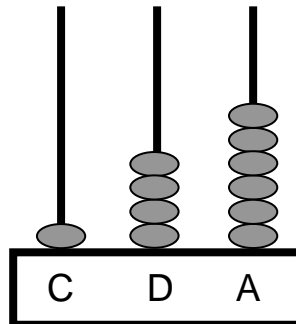
$16 - 7 = \square$

$75 + 4 = \square$

$98 - 7 = \square$

Obair Bhaile 22

1. Cad é an uimhir atá léirithe ar an abacas seo thíos?



2. Cad é an chéad uimhir eile sa seicheamh seo?

157 158 159 160 161 162

3. Cad é an uimhir atá 100 níos mó ná 200?

4. Cad é suim iomlán na n-uimhreacha seo thíos?

100 agus 80 agus 2

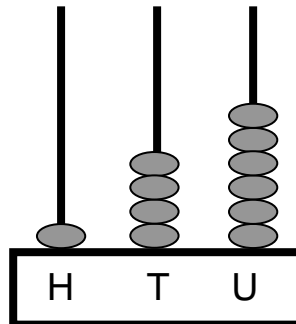
5. Déan na suimeanna seo thíos.

$6 + 5 =$

$42 + 4 =$

Homework 22

1. What number is displayed on this abacus?



2. What is the next number in this sequence

157 158 159 160 161 162

3. What number is 100 **more** than 200?

4. What is the sum total of these numbers?

100 agus 80 agus 2

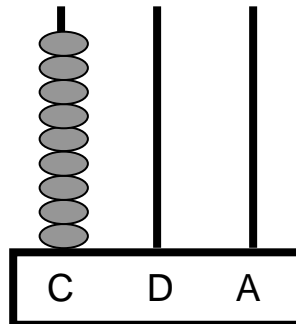
5. Complete these sums.

$6 + 5 = \square$

$42 + 4 = \square$

Obair Bhaile 23

1. Cad é an uimhir atá léirithe ar an abacas seo thíos?



2. Cad é an chéad uimhir eile sa seicheamh seo?

832 833 834 835 836 837

3. Cad é an uimhir atá 100 níos lú ná 1000?

4. Cén uimhir atá i gceist leis na huimhreacha seo thíos?

400 agus 10 agus 7

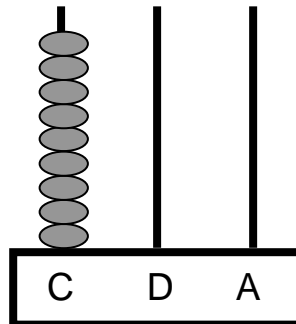
5. Déan na suimeanna seo thíos.

$$17 - 9 = \square$$

$$59 - 7 = \square$$

Homework 23

1. What number is displayed on this abacus?



2. What is the next number in this sequence?

832 833 834 835 836 837

3. What number is 100 **less** than 1000?

4. What is the sum total of these numbers?

400 agus 10 agus 7

5. Complete these sums.

$17 - 9 = \square$

$59 - 7 = \square$

Obair Bhaile 24

1. Scríobh na huimhreacha seo i bhfigiúirí.

a) ceithre chéad fiche a cúig

b) naoi gcéad seachtó a dó

c) ocht gcéad caoga a cúig

d) dhá chéad seachtó a sé

e) trí chéad fiche a naoi

f) seacht gcéad caoga

g) míle

2. Scríobh na huimhreacha seo i bhfocail.

a) 598

a) 280

a) 763

a) 379

a) 482

a) 843

Homework 24

1. Write these numbers in figures.

a) four hundred and twenty five _____

b) nine hundred and seventy two _____

c) eight hundred and fifty five _____

d) two hundred and seventy six _____

e) three hundred and twenty nine _____

f) seven hundred and fifty _____

g) one thousand _____

2. Write these numbers in words.

a) 598 _____

b) 280 _____

c) 763 _____

d) 379 _____

e) 482 _____

f) 843 _____

