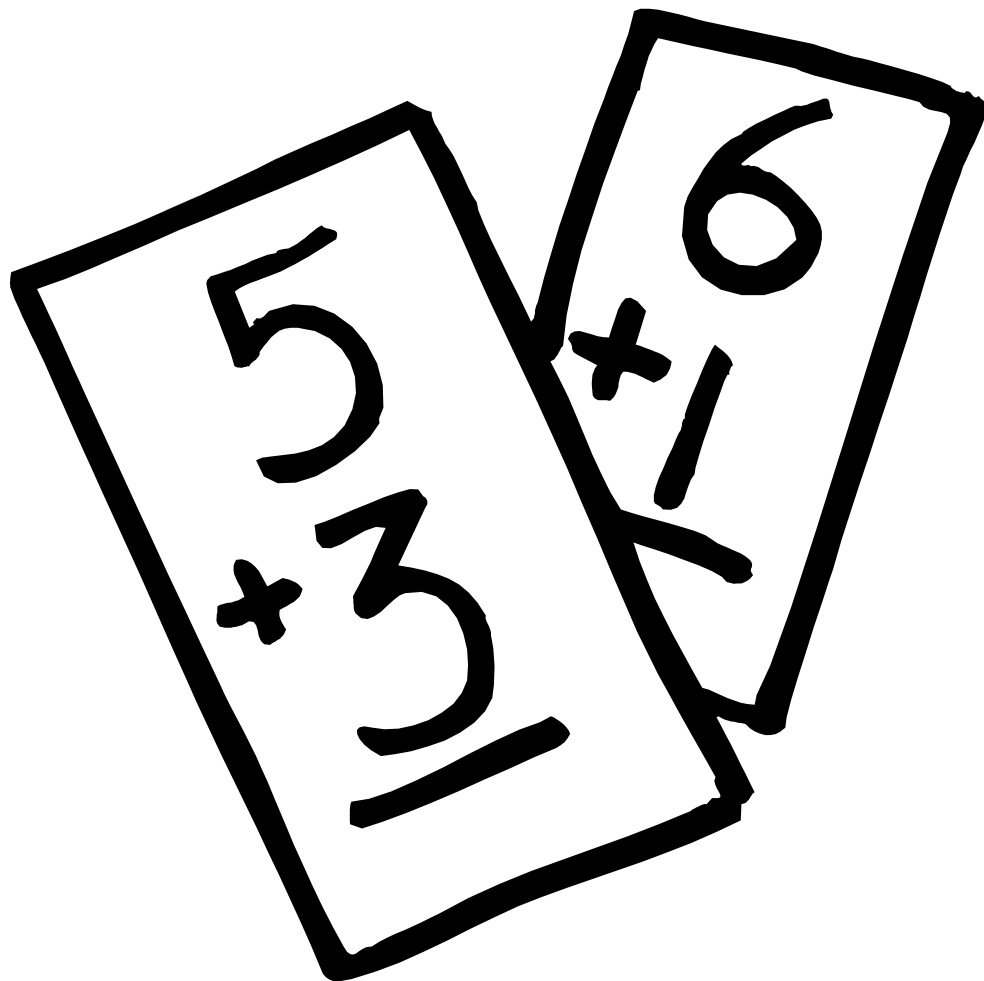


Obair Bhaile Mata

Leabhar 3



Ainm _____ Rang _____



Cearnóg 100

1	2	3	4	5	6	7	8	9	10
11	12	13	14	15	16	17	18	19	20
21	22	23	24	25	26	27	28	29	30
31	32	33	34	35	36	37	38	39	40
41	42	43	44	45	46	47	48	49	50
51	52	53	54	55	56	57	58	59	60
61	62	63	64	65	66	67	68	69	70
71	72	73	74	75	76	77	78	79	80
81	82	83	84	85	86	87	88	89	90
91	92	93	94	95	96	97	98	99	100

Obair Bhaile 1

1. Comhlánaigh na suimeanna seo:

$$3 + 5 + 7 = \square$$

$$3 + 5 + 7 + 4 = \square$$

$$48 + 30 = \square$$

$$22 + 11 = \square$$

$$48 + 9 = \square$$

$$22 + 6 = \square$$

$$24 + 8 = \square$$

$$30 + 30 = \square$$

$$61 + 25 = \square$$

2. Cad iad na ceithre shuim ar féidir a dhéanamh leis na huimhreacha 25, 10 agus 35?

$$25 + 10 = \square$$

$$10 + 25 = \square$$

$$35 - 10 = \square$$

$$35 - 25 = \square$$

Homework 1

1. Complete these sums:

$$3 + 5 + 7 = \square$$

$$3 + 5 + 7 + 4 = \square$$

$$48 + 30 = \square$$

$$22 + 11 = \square$$

$$48 + 9 = \square$$

$$22 + 6 = \square$$

$$24 + 8 = \square$$

$$30 + 30 = \square$$

$$61 + 25 = \square$$

2. What are the four sums that can be made using the numbers 25, 10 and 35?

$$25 + 10 = \square$$

$$10 + 25 = \square$$

$$35 - 10 = \square$$

$$35 - 25 = \square$$

Obair Bhaile 2

Déan na suimeanna seo thíos:

a)

$$\begin{array}{r} \text{D} \quad \text{A} \\ 6 \quad 2 \\ + 2 \quad 7 \\ \hline \\ \hline \end{array}$$

b)

$$\begin{array}{r} \text{D} \quad \text{A} \\ 5 \quad 0 \\ + 3 \quad 9 \\ \hline \\ \hline \end{array}$$

c)

$$\begin{array}{r} \text{D} \quad \text{A} \\ 2 \quad 7 \\ + 3 \quad 1 \\ \hline \\ \hline \end{array}$$

d)

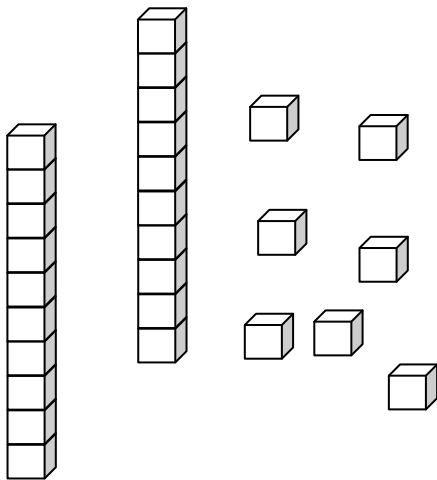
$$\begin{array}{r} \text{D} \quad \text{A} \\ 5 \quad 0 \\ + 2 \quad 4 \\ \hline \\ \hline \end{array}$$

e)

$$\begin{array}{r} \text{D} \quad \text{A} \\ 2 \quad 8 \\ + 4 \quad 1 \\ \hline \\ \hline \end{array}$$

f)

$$\begin{array}{r} \text{D} \quad \text{A} \\ 6 \quad 0 \\ + 2 \quad 5 \\ \hline \\ \hline \end{array}$$



Cá mhéad a fuair tú ceart?

Fuair mé

ceart.

Homework 2

Work out the answers to these sums:

a)

$$\begin{array}{r} \text{T U} \\ 62 \\ + 27 \\ \hline \\ \hline \end{array}$$

b)

$$\begin{array}{r} \text{T U} \\ 50 \\ + 39 \\ \hline \\ \hline \end{array}$$

c)

$$\begin{array}{r} \text{T U} \\ 27 \\ + 31 \\ \hline \\ \hline \end{array}$$

d)

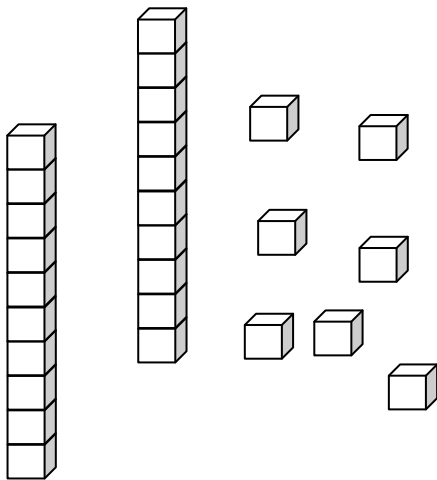
$$\begin{array}{r} \text{T U} \\ 50 \\ + 24 \\ \hline \\ \hline \end{array}$$

e)

$$\begin{array}{r} \text{T U} \\ 28 \\ + 41 \\ \hline \\ \hline \end{array}$$

f)

$$\begin{array}{r} \text{T U} \\ 60 \\ + 25 \\ \hline \\ \hline \end{array}$$



**How many did
you get right?**

I got right.

Obair Bhaile 3

Déan na suimeanna seo thíos:

a)

	C	D	A
		2	2
+		8	5
<hr/>			
<hr/>			

b)

	C	D	A
		3	2
+		7	1
<hr/>			
<hr/>			

c)

	C	D	A
		6	7
+		4	2
<hr/>			
<hr/>			

d)

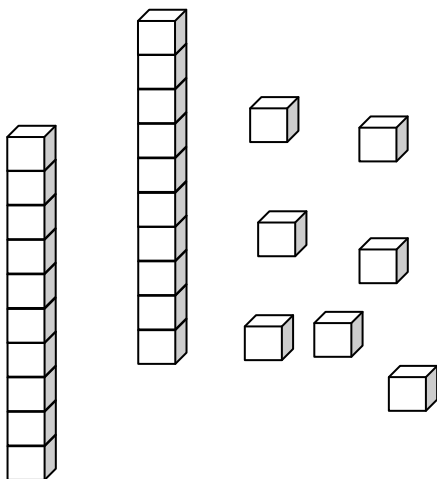
	C	D	A
		4	3
+		6	1
<hr/>			
<hr/>			

e)

	C	D	A
		5	2
+		5	4
<hr/>			
<hr/>			

f)

	C	D	A
		7	4
+		3	1
<hr/>			
<hr/>			



Cá mhéad a
fuair tú ceart?

Fuair mé ceart.

Homework 3

Work out the answers to these sums:

a)

	H	T	U
		2	2
+		8	5
<hr/>			
<hr/>			

b)

	H	T	U
		3	2
+		7	1
<hr/>			
<hr/>			

c)

	H	T	U
		6	7
+		4	2
<hr/>			
<hr/>			

d)

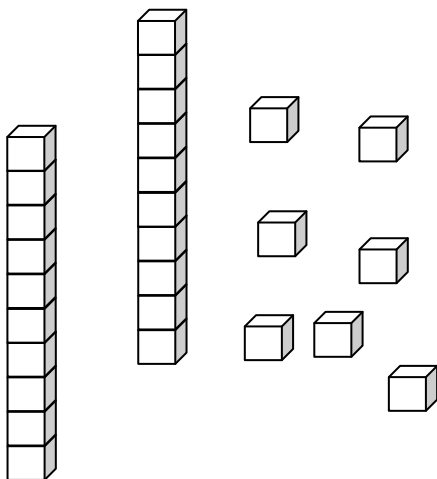
	H	T	U
		4	3
+		6	1
<hr/>			
<hr/>			

e)

	H	T	U
		5	2
+		5	4
<hr/>			
<hr/>			

f)

	H	T	U
		7	4
+		3	1
<hr/>			
<hr/>			

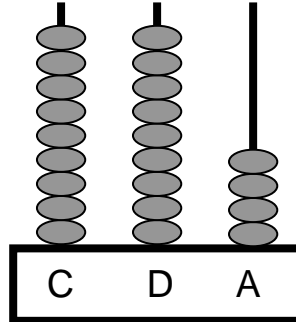


**How many did
you get right?**

Fuair mé ceart.

Obair Bhaile 4

1. Cad é an uimhir atá léirithe ar an abacas seo thíos?



2. Cad é an chéad uimhir eile sa seicheamh seo?

121 122 123 124 125 126

3. Cad é an uimhir atá 1 níos mó ná 476?

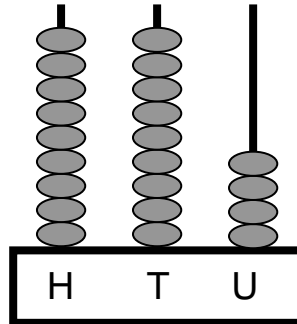
4. Cad é suim iomlán na n-uimhreacha seo thíos?

300 agus 20 agus 4

5. Scríobh an uimhir 485 i bhfocail.

Homework 4

1. What number is displayed on this abacus below?



2. What is the next number in this sequence?

121 122 123 124 125 126 _____

3. What number is 1 more than 476?

4. What is the sum of these numbers below?

300 and 20 and 4

5. Write the number 485 in words.

Obair Bhaile 5

1. Comhlánaigh na suimeanna seo:

$$2 + 6 + 8 = \square$$

$$2 + 3 + 6 + 7 = \square$$

$$53 + 20 = \square$$

$$34 + 11 = \square$$

$$36 + 9 = \square$$

$$31 + 5 = \square$$

$$46 + 7 = \square$$

$$20 + 20 = \square$$

$$52 + 26 = \square$$

2. Cad iad na ceithre shuim ar féidir a dhéanamh leis na huimhreacha 23, 11 agus 34?

$$23 + 11 = \square$$

$$11 + 23 = \square$$

$$34 - 11 = \square$$

$$34 - 23 = \square$$

Homework 5

1. Complete these sums:

$$2 + 6 + 8 = \square$$

$$2 + 3 + 6 + 7 = \square$$

$$53 + 20 = \square$$

$$34 + 11 = \square$$

$$36 + 9 = \square$$

$$31 + 5 = \square$$

$$46 + 7 = \square$$

$$20 + 20 = \square$$

$$52 + 26 = \square$$

2. What are the four sums that can be made using the numbers 23, 11 and 34?

$$23 + 11 = \square$$

$$11 + 23 = \square$$

$$34 - 11 = \square$$

$$34 - 23 = \square$$

Obair Bhaile 6

Déan na suimeanna seo thíos:

a)

$$\begin{array}{r} \text{D} \quad \text{A} \\ 5 \quad 2 \\ + 2 \quad 5 \\ \hline \\ \hline \end{array}$$

b)

$$\begin{array}{r} \text{D} \quad \text{A} \\ 4 \quad 0 \\ + 2 \quad 5 \\ \hline \\ \hline \end{array}$$

c)

$$\begin{array}{r} \text{D} \quad \text{A} \\ 4 \quad 7 \\ + 2 \quad 2 \\ \hline \\ \hline \end{array}$$

d)

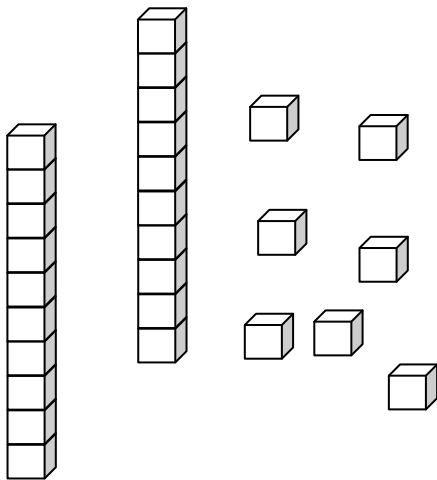
$$\begin{array}{r} \text{D} \quad \text{A} \\ 6 \quad 0 \\ + 3 \quad 7 \\ \hline \\ \hline \end{array}$$

e)

$$\begin{array}{r} \text{D} \quad \text{A} \\ 4 \quad 8 \\ + 4 \quad 0 \\ \hline \\ \hline \end{array}$$

f)

$$\begin{array}{r} \text{D} \quad \text{A} \\ 6 \quad 2 \\ + 2 \quad 7 \\ \hline \\ \hline \end{array}$$



Cá mhéad a fuair tú ceart?

Fuair mé

ceart.

Homework 6

Work out the answers to these sums:

a)

$$\begin{array}{r} \text{T U} \\ 52 \\ + 25 \\ \hline \\ \hline \end{array}$$

b)

$$\begin{array}{r} \text{T U} \\ 40 \\ + 25 \\ \hline \\ \hline \end{array}$$

c)

$$\begin{array}{r} \text{T U} \\ 47 \\ + 22 \\ \hline \\ \hline \end{array}$$

d)

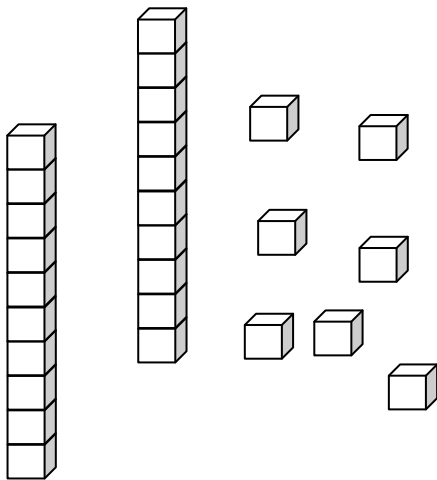
$$\begin{array}{r} \text{T U} \\ 60 \\ + 37 \\ \hline \\ \hline \end{array}$$

e)

$$\begin{array}{r} \text{T U} \\ 48 \\ + 40 \\ \hline \\ \hline \end{array}$$

f)

$$\begin{array}{r} \text{T U} \\ 62 \\ + 27 \\ \hline \\ \hline \end{array}$$



**How many did
you get right?**

I got right.

Obair Bhaile 7

Déan na suimeanna seo thíos:

a)

	C	D	A
		5	2
+		5	4
<hr/>			
<hr/>			

b)

	C	D	A
		8	2
+		2	4
<hr/>			
<hr/>			

c)

	C	D	A
		7	7
+		3	0
<hr/>			
<hr/>			

d)

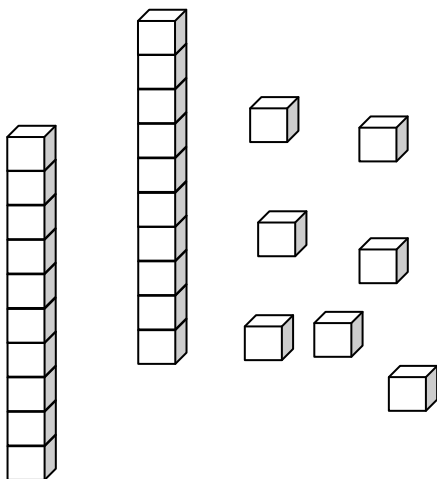
	C	D	A
		6	3
+		4	5
<hr/>			
<hr/>			

e)

	C	D	A
		5	3
+		5	6
<hr/>			
<hr/>			

f)

	C	D	A
		8	4
+		2	3
<hr/>			
<hr/>			



Cá mhéad a
fuair tú ceart?

Fuair mé ceart.

Homework 7

Work out the answers to these sums:

a)

$$\begin{array}{r} \text{H T U} \\ 52 \\ + 54 \\ \hline \\ \hline \end{array}$$

b)

$$\begin{array}{r} \text{H T U} \\ 82 \\ + 24 \\ \hline \\ \hline \end{array}$$

c)

$$\begin{array}{r} \text{H T U} \\ 77 \\ + 30 \\ \hline \\ \hline \end{array}$$

d)

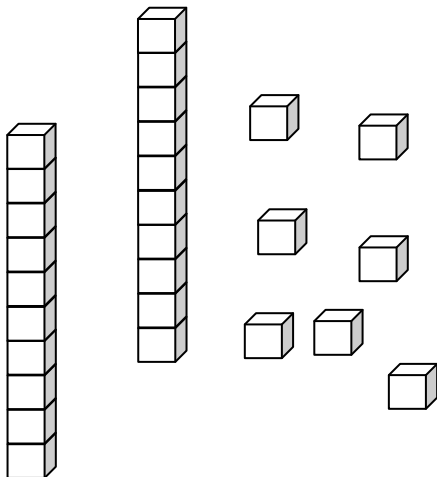
$$\begin{array}{r} \text{H T U} \\ 63 \\ + 45 \\ \hline \\ \hline \end{array}$$

e)

$$\begin{array}{r} \text{H T U} \\ 53 \\ + 56 \\ \hline \\ \hline \end{array}$$

f)

$$\begin{array}{r} \text{H T U} \\ 84 \\ + 23 \\ \hline \\ \hline \end{array}$$

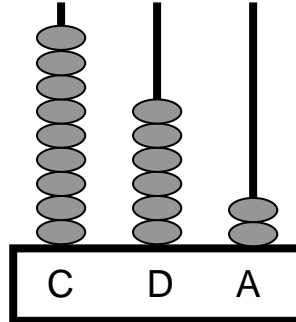


**How many did
you get right?**

Fuair mé ceart.

Obair Bhaile 8

1. Cad é an uimhir atá léirithe ar an abacas seo thíos?



2. Cad é an chéad uimhir eile sa seicheamh seo?

234 235 236 237 238 239 _____

3. Cad é an uimhir atá 10 níos mó ná 476?

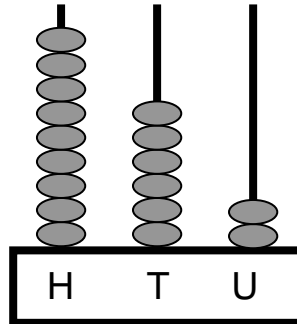
4. Cad é suim iomlán na n-uimhreacha seo thíos?

500 agus 60 agus 3

5. Scríobh an uimhir 735 i bhfocail.

Homework 8

1. What number is displayed on this abacus below?



2. What is the next number in this sequence?

234 235 236 237 238 239 _____

3. What number is 10 more than 476?

4. What is the sum of these numbers below?

500 agus 60 agus 3

5. Write the number 735 in words.

Obair Bhaile 9

1. Comhlánaigh na suimeanna seo:

$$3 + 4 + 6 = \square$$

$$2 + 4 + 6 + 7 = \square$$

$$53 + 20 = \square$$

$$45 + 11 = \square$$

$$53 + 9 = \square$$

$$41 + 5 = \square$$

$$55 + 8 = \square$$

$$60 + 20 = \square$$

$$73 + 14 = \square$$

2. Cad iad na ceithre shuim ar féidir a dhéanamh leis na huimhreacha 25, 15 agus 40?

$$25 + 10 = \square$$

$$10 + 25 = \square$$

$$35 - 10 = \square$$

$$35 - 25 = \square$$

Homework 9

1. Complete these sums:

$$3 + 4 + 6 = \square$$

$$2 + 4 + 6 + 7 = \square$$

$$53 + 20 = \square$$

$$45 + 11 = \square$$

$$53 + 9 = \square$$

$$41 + 5 = \square$$

$$55 + 8 = \square$$

$$60 + 20 = \square$$

$$73 + 14 = \square$$

2. What are the four sums that can be made using the numbers 25, 15 and 40?

$$25 + 15 = \square$$

$$15 + 25 = \square$$

$$40 - 15 = \square$$

$$50 - 25 = \square$$

Obair Bhaile 10

Déan na suimeanna seo thíos:

a)

$$\begin{array}{r} \text{D} \quad \text{A} \\ 5 \quad 1 \\ + 4 \quad 4 \\ \hline \\ \hline \end{array}$$

b)

$$\begin{array}{r} \text{D} \quad \text{A} \\ 4 \quad 0 \\ + 3 \quad 5 \\ \hline \\ \hline \end{array}$$

c)

$$\begin{array}{r} \text{D} \quad \text{A} \\ 6 \quad 7 \\ + 1 \quad 1 \\ \hline \\ \hline \end{array}$$

d)

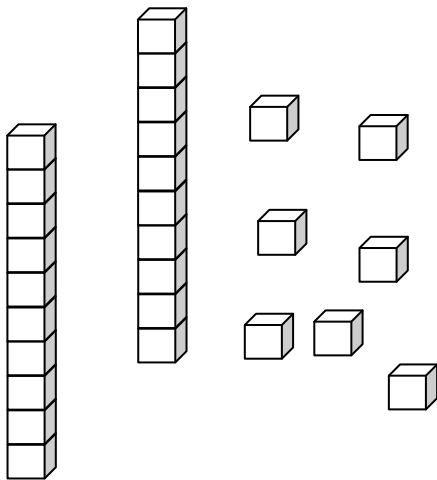
$$\begin{array}{r} \text{D} \quad \text{A} \\ 7 \quad 0 \\ + 2 \quad 4 \\ \hline \\ \hline \end{array}$$

e)

$$\begin{array}{r} \text{D} \quad \text{A} \\ 5 \quad 4 \\ + 4 \quad 1 \\ \hline \\ \hline \end{array}$$

f)

$$\begin{array}{r} \text{D} \quad \text{A} \\ 6 \quad 0 \\ + 3 \quad 3 \\ \hline \\ \hline \end{array}$$



Cá mhéad a fuair tú ceart?

Fuair mé

ceart.

Homework 10

Work out the answers to these sums:

a)

$$\begin{array}{r} \text{T U} \\ 51 \\ + 44 \\ \hline \\ \hline \end{array}$$

b)

$$\begin{array}{r} \text{T U} \\ 40 \\ + 35 \\ \hline \\ \hline \end{array}$$

c)

$$\begin{array}{r} \text{T U} \\ 67 \\ + 11 \\ \hline \\ \hline \end{array}$$

d)

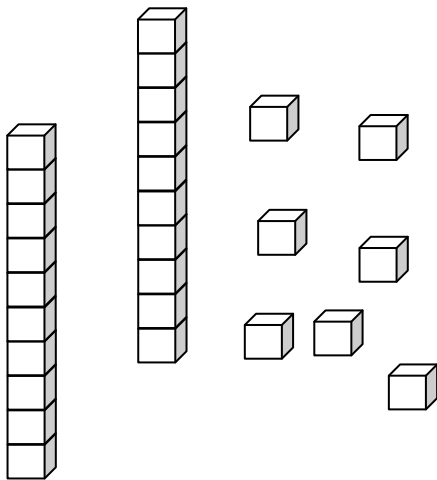
$$\begin{array}{r} \text{T U} \\ 70 \\ + 24 \\ \hline \\ \hline \end{array}$$

e)

$$\begin{array}{r} \text{T U} \\ 54 \\ + 41 \\ \hline \\ \hline \end{array}$$

f)

$$\begin{array}{r} \text{T U} \\ 60 \\ + 33 \\ \hline \\ \hline \end{array}$$



**How many did
you get right?**

I got right.

Obair Bhaile 11

Déan na suimeanna seo thíos:

a)

	C	D	A
		1	2
+		9	5
<hr/>			
<hr/>			

b)

	C	D	A
		2	2
+		8	6
<hr/>			
<hr/>			

c)

	C	D	A
		3	4
+		7	2
<hr/>			
<hr/>			

d)

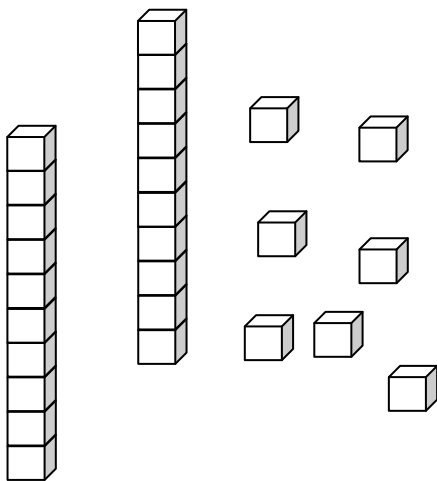
	C	D	A
		4	3
+		6	6
<hr/>			
<hr/>			

e)

	C	D	A
		5	5
+		5	4
<hr/>			
<hr/>			

f)

	C	D	A
		6	4
+		4	3
<hr/>			
<hr/>			



Cá mhéad a fuair tú ceart?

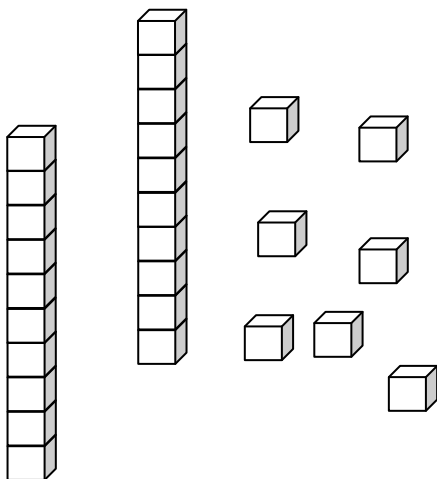
Fuair mé ceart.

Homework 11

Work out the answers to these sums:

<p>a)</p> <table style="margin-left: auto; margin-right: auto;"> <tr><td>H</td><td>T</td><td>U</td></tr> <tr><td></td><td>1</td><td>2</td></tr> <tr><td>+</td><td>9</td><td>5</td></tr> <tr><td colspan="3"><hr/></td></tr> <tr><td colspan="3"><hr/></td></tr> </table>	H	T	U		1	2	+	9	5	<hr/>			<hr/>			<p>b)</p> <table style="margin-left: auto; margin-right: auto;"> <tr><td>H</td><td>T</td><td>U</td></tr> <tr><td></td><td>2</td><td>2</td></tr> <tr><td>+</td><td>8</td><td>6</td></tr> <tr><td colspan="3"><hr/></td></tr> <tr><td colspan="3"><hr/></td></tr> </table>	H	T	U		2	2	+	8	6	<hr/>			<hr/>			<p>c)</p> <table style="margin-left: auto; margin-right: auto;"> <tr><td>H</td><td>T</td><td>U</td></tr> <tr><td></td><td>3</td><td>4</td></tr> <tr><td>+</td><td>7</td><td>2</td></tr> <tr><td colspan="3"><hr/></td></tr> <tr><td colspan="3"><hr/></td></tr> </table>	H	T	U		3	4	+	7	2	<hr/>			<hr/>		
H	T	U																																													
	1	2																																													
+	9	5																																													
<hr/>																																															
<hr/>																																															
H	T	U																																													
	2	2																																													
+	8	6																																													
<hr/>																																															
<hr/>																																															
H	T	U																																													
	3	4																																													
+	7	2																																													
<hr/>																																															
<hr/>																																															

<p>d)</p> <table style="margin-left: auto; margin-right: auto;"> <tr><td>H</td><td>T</td><td>U</td></tr> <tr><td></td><td>4</td><td>3</td></tr> <tr><td>+</td><td>6</td><td>6</td></tr> <tr><td colspan="3"><hr/></td></tr> <tr><td colspan="3"><hr/></td></tr> </table>	H	T	U		4	3	+	6	6	<hr/>			<hr/>			<p>e)</p> <table style="margin-left: auto; margin-right: auto;"> <tr><td>H</td><td>T</td><td>U</td></tr> <tr><td></td><td>5</td><td>5</td></tr> <tr><td>+</td><td>5</td><td>4</td></tr> <tr><td colspan="3"><hr/></td></tr> <tr><td colspan="3"><hr/></td></tr> </table>	H	T	U		5	5	+	5	4	<hr/>			<hr/>			<p>f)</p> <table style="margin-left: auto; margin-right: auto;"> <tr><td>H</td><td>T</td><td>U</td></tr> <tr><td></td><td>6</td><td>4</td></tr> <tr><td>+</td><td>4</td><td>3</td></tr> <tr><td colspan="3"><hr/></td></tr> <tr><td colspan="3"><hr/></td></tr> </table>	H	T	U		6	4	+	4	3	<hr/>			<hr/>		
H	T	U																																													
	4	3																																													
+	6	6																																													
<hr/>																																															
<hr/>																																															
H	T	U																																													
	5	5																																													
+	5	4																																													
<hr/>																																															
<hr/>																																															
H	T	U																																													
	6	4																																													
+	4	3																																													
<hr/>																																															
<hr/>																																															

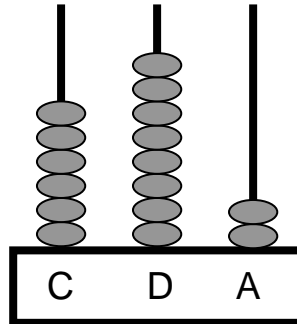


**How many did
you get right?**

Fuair mé ceart.

Obair Bhaile 12

1. Cad é an uimhir atá léirithe ar an abacas seo thíos?



2. Cad é an chéad uimhir eile sa seicheamh seo?

562 563 564 565 566 567 _____

3. Cad é an uimhir atá 100 níos mó ná 476?

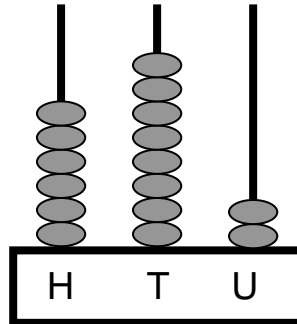
4. Cad é suim iomlán na n-uimhreacha seo thíos?

800 agus 50 agus 3

5. Scríobh an uimhir 942 i bhfocail.

Homework 12

1. What number is displayed on this abacus below?



2. What is the next number in this sequence?

562 563 564 565 566 567 _____

3. What number is 100 more than 476?

4. What is the sum of these numbers below?

800 agus 50 agus 3

5. Write the number 942 in words.

Obair Bhaile 13

1. Comhlánaigh na suimeanna seo:

$$5 + 5 + 8 = \square$$

$$2 + 2 + 5 + 8 = \square$$

$$53 + 40 = \square$$

$$75 + 11 = \square$$

$$52 + 9 = \square$$

$$63 + 4 = \square$$

$$75 + 7 = \square$$

$$50 + 10 = \square$$

$$82 + 14 = \square$$

2. Cad iad na ceithre shuim ar féidir a dhéanamh leis na huimhreacha 20, 30 agus 50?

$$30 + 20 = \square$$

$$20 + 30 = \square$$

$$50 - 30 = \square$$

$$50 - 20 = \square$$

Homework 13

1. Complete these sums:

$$5 + 5 + 8 = \square$$

$$2 + 2 + 5 + 8 = \square$$

$$53 + 40 = \square$$

$$75 + 11 = \square$$

$$52 + 9 = \square$$

$$63 + 4 = \square$$

$$75 + 7 = \square$$

$$50 + 10 = \square$$

$$82 + 14 = \square$$

3. What are the four sums that can be made using the numbers 20, 30 and 50?

$$30 + 20 = \square$$

$$20 + 30 = \square$$

$$50 - 30 = \square$$

$$50 - 20 = \square$$

Obair Bhaile 14

Déan na suimeanna seo thíos:

a)

$$\begin{array}{r} \text{D} \quad \text{A} \\ 3 \quad 6 \\ + 1 \quad 2 \\ \hline \\ \hline \end{array}$$

b)

$$\begin{array}{r} \text{D} \quad \text{A} \\ 5 \quad 5 \\ + 2 \quad 3 \\ \hline \\ \hline \end{array}$$

c)

$$\begin{array}{r} \text{D} \quad \text{A} \\ 5 \quad 7 \\ + 2 \quad 1 \\ \hline \\ \hline \end{array}$$

d)

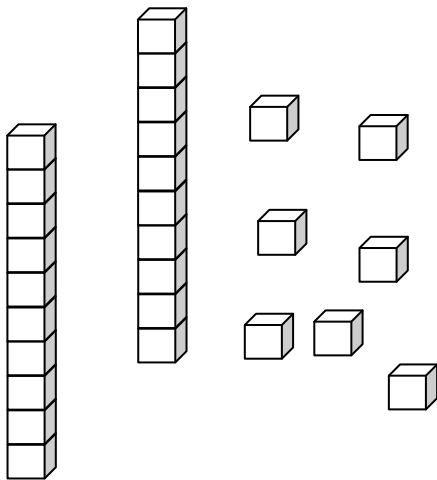
$$\begin{array}{r} \text{D} \quad \text{A} \\ 6 \quad 2 \\ + 2 \quad 4 \\ \hline \\ \hline \end{array}$$

e)

$$\begin{array}{r} \text{D} \quad \text{A} \\ 5 \quad 5 \\ + 4 \quad 1 \\ \hline \\ \hline \end{array}$$

f)

$$\begin{array}{r} \text{D} \quad \text{A} \\ 5 \quad 2 \\ + 2 \quad 5 \\ \hline \\ \hline \end{array}$$



Cá mhéad a fuair tú ceart?

Fuair mé

ceart.

Homework 14

Work out the answers to these sums:

a)

$$\begin{array}{r} \text{T U} \\ 36 \\ + 12 \\ \hline \\ \hline \end{array}$$

b)

$$\begin{array}{r} \text{T U} \\ 55 \\ + 23 \\ \hline \\ \hline \end{array}$$

c)

$$\begin{array}{r} \text{T U} \\ 57 \\ + 21 \\ \hline \\ \hline \end{array}$$

d)

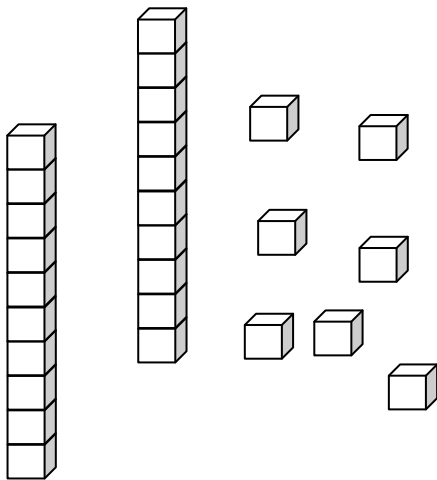
$$\begin{array}{r} \text{T U} \\ 62 \\ + 24 \\ \hline \\ \hline \end{array}$$

e)

$$\begin{array}{r} \text{T U} \\ 55 \\ + 41 \\ \hline \\ \hline \end{array}$$

f)

$$\begin{array}{r} \text{T U} \\ 52 \\ + 25 \\ \hline \\ \hline \end{array}$$



**How many did
you get right?**

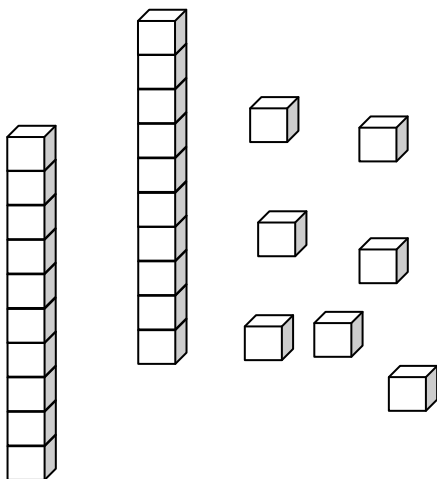
I got right.

Obair Bhaile 15

Déan na suimeanna seo thíos:

<p>a)</p> <table style="margin-left: auto; margin-right: auto;"> <tr><td style="padding: 0 10px;">C</td><td style="padding: 0 10px;">D</td><td style="padding: 0 10px;">A</td></tr> <tr><td></td><td style="text-align: center;">7</td><td style="text-align: center;">3</td></tr> <tr><td style="text-align: right;">+</td><td style="text-align: center;">3</td><td style="text-align: center;">5</td></tr> <tr><td colspan="3" style="border-top: 1px solid black;"></td></tr> <tr><td colspan="3" style="border-top: 1px solid black;"></td></tr> </table>	C	D	A		7	3	+	3	5							<p>b)</p> <table style="margin-left: auto; margin-right: auto;"> <tr><td style="padding: 0 10px;">C</td><td style="padding: 0 10px;">D</td><td style="padding: 0 10px;">A</td></tr> <tr><td></td><td style="text-align: center;">8</td><td style="text-align: center;">2</td></tr> <tr><td style="text-align: right;">+</td><td style="text-align: center;">2</td><td style="text-align: center;">6</td></tr> <tr><td colspan="3" style="border-top: 1px solid black;"></td></tr> <tr><td colspan="3" style="border-top: 1px solid black;"></td></tr> </table>	C	D	A		8	2	+	2	6							<p>c)</p> <table style="margin-left: auto; margin-right: auto;"> <tr><td style="padding: 0 10px;">C</td><td style="padding: 0 10px;">D</td><td style="padding: 0 10px;">A</td></tr> <tr><td></td><td style="text-align: center;">9</td><td style="text-align: center;">7</td></tr> <tr><td style="text-align: right;">+</td><td style="text-align: center;">1</td><td style="text-align: center;">1</td></tr> <tr><td colspan="3" style="border-top: 1px solid black;"></td></tr> <tr><td colspan="3" style="border-top: 1px solid black;"></td></tr> </table>	C	D	A		9	7	+	1	1						
C	D	A																																													
	7	3																																													
+	3	5																																													
C	D	A																																													
	8	2																																													
+	2	6																																													
C	D	A																																													
	9	7																																													
+	1	1																																													

<p>d)</p> <table style="margin-left: auto; margin-right: auto;"> <tr><td style="padding: 0 10px;">C</td><td style="padding: 0 10px;">D</td><td style="padding: 0 10px;">A</td></tr> <tr><td></td><td style="text-align: center;">1</td><td style="text-align: center;">3</td></tr> <tr><td style="text-align: right;">+</td><td style="text-align: center;">9</td><td style="text-align: center;">4</td></tr> <tr><td colspan="3" style="border-top: 1px solid black;"></td></tr> <tr><td colspan="3" style="border-top: 1px solid black;"></td></tr> </table>	C	D	A		1	3	+	9	4							<p>e)</p> <table style="margin-left: auto; margin-right: auto;"> <tr><td style="padding: 0 10px;">C</td><td style="padding: 0 10px;">D</td><td style="padding: 0 10px;">A</td></tr> <tr><td></td><td style="text-align: center;">2</td><td style="text-align: center;">5</td></tr> <tr><td style="text-align: right;">+</td><td style="text-align: center;">8</td><td style="text-align: center;">4</td></tr> <tr><td colspan="3" style="border-top: 1px solid black;"></td></tr> <tr><td colspan="3" style="border-top: 1px solid black;"></td></tr> </table>	C	D	A		2	5	+	8	4							<p>f)</p> <table style="margin-left: auto; margin-right: auto;"> <tr><td style="padding: 0 10px;">C</td><td style="padding: 0 10px;">D</td><td style="padding: 0 10px;">A</td></tr> <tr><td></td><td style="text-align: center;">3</td><td style="text-align: center;">4</td></tr> <tr><td style="text-align: right;">+</td><td style="text-align: center;">7</td><td style="text-align: center;">2</td></tr> <tr><td colspan="3" style="border-top: 1px solid black;"></td></tr> <tr><td colspan="3" style="border-top: 1px solid black;"></td></tr> </table>	C	D	A		3	4	+	7	2						
C	D	A																																													
	1	3																																													
+	9	4																																													
C	D	A																																													
	2	5																																													
+	8	4																																													
C	D	A																																													
	3	4																																													
+	7	2																																													



Cá mhéad a fuair tú ceart?

Fuair mé ceart.

Homework 15

Work out the answers to these sums:

a)

$$\begin{array}{r} \text{H T U} \\ 73 \\ + 35 \\ \hline \\ \hline \end{array}$$

b)

$$\begin{array}{r} \text{H T U} \\ 82 \\ + 26 \\ \hline \\ \hline \end{array}$$

c)

$$\begin{array}{r} \text{H T U} \\ 97 \\ + 11 \\ \hline \\ \hline \end{array}$$

d)

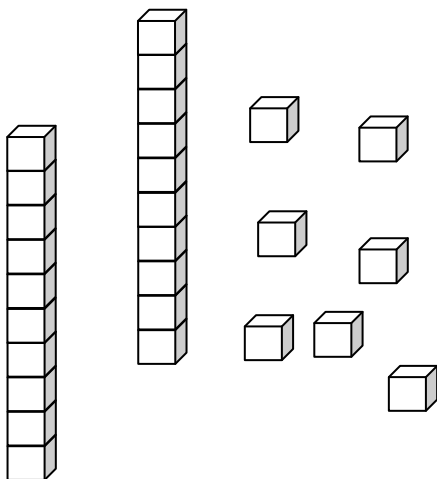
$$\begin{array}{r} \text{H T U} \\ 13 \\ + 94 \\ \hline \\ \hline \end{array}$$

e)

$$\begin{array}{r} \text{H T U} \\ 25 \\ + 84 \\ \hline \\ \hline \end{array}$$

f)

$$\begin{array}{r} \text{H T U} \\ 34 \\ + 72 \\ \hline \\ \hline \end{array}$$

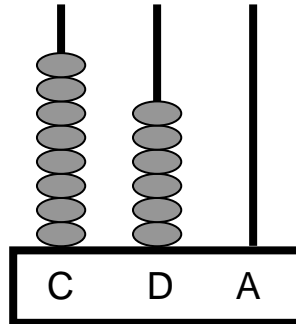


**How many did
you get right?**

Fuair mé ceart.

Obair Bhaile 16

1. Cad é an uimhir atá léirithe ar an abacas seo thíos?



2. Cad é an chéad uimhir eile sa seicheamh seo?

877 878 879 880 881 882 _____

3. Cad é an uimhir atá 1 níos lú ná 476?

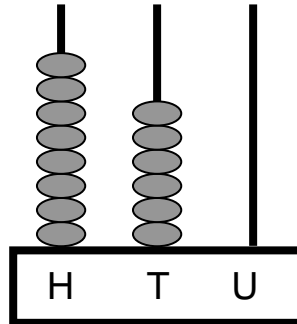
4. Cad é suim iomlán na n-uimhreacha seo thíos?

100 agus 80 agus 0

5. Scríobh an uimhir 953 i bhfocail.

Homework 16

1. What number is displayed on this abacus below?



2. What is the next number in this sequence?

877 878 879 880 881 882 _____

3. What number is 1 less than 476?

6. What is the sum of these numbers below?

100 agus 80 agus 0

4. Write the number 953 in words.

Obair Bhaile 17

1. Comhlánaigh na suimeanna seo:

$$2 + 6 + 9 = \square$$

$$1 + 3 + 5 + 7 = \square$$

$$72 + 20 = \square$$

$$68 + 11 = \square$$

$$59 + 9 = \square$$

$$72 + 7 = \square$$

$$57 + 6 = \square$$

$$50 + 40 = \square$$

$$52 + 43 = \square$$

2. Cad iad na ceithre shuim ar féidir a dhéanamh leis na huimhreacha 8, 7 agus 15?

$$8 + 7 = \square$$

$$7 + 8 = \square$$

$$15 - 8 = \square$$

$$15 - 7 = \square$$

Homework 17

1. Complete these sums:

$$2 + 6 + 9 = \square$$

$$1 + 3 + 5 + 7 = \square$$

$$72 + 20 = \square$$

$$68 + 11 = \square$$

$$59 + 9 = \square$$

$$72 + 7 = \square$$

$$57 + 6 = \square$$

$$50 + 40 = \square$$

$$52 + 43 = \square$$

2. What are the four sums that can be made using the numbers 8, 7 and 15?

$$8 + 7 = \square$$

$$7 + 8 = \square$$

$$15 - 8 = \square$$

$$15 - 7 = \square$$

Obair Bhaile 18

Déan na suimeanna seo thíos:

a)

$$\begin{array}{r} \text{D} \quad \text{A} \\ 7 \quad 2 \\ + 1 \quad 5 \\ \hline \\ \hline \end{array}$$

b)

$$\begin{array}{r} \text{D} \quad \text{A} \\ 5 \quad 4 \\ + 3 \quad 2 \\ \hline \\ \hline \end{array}$$

c)

$$\begin{array}{r} \text{D} \quad \text{A} \\ 4 \quad 7 \\ + 2 \quad 2 \\ \hline \\ \hline \end{array}$$

d)

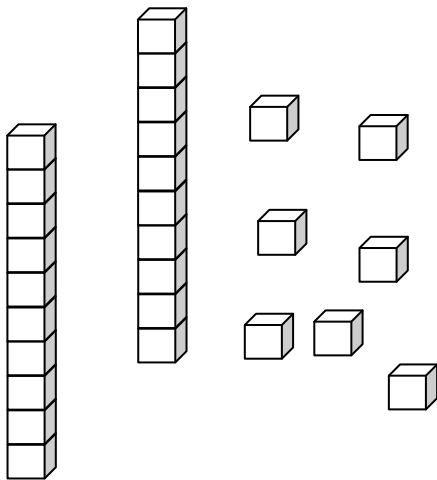
$$\begin{array}{r} \text{D} \quad \text{A} \\ 5 \quad 5 \\ + 2 \quad 2 \\ \hline \\ \hline \end{array}$$

e)

$$\begin{array}{r} \text{D} \quad \text{A} \\ 5 \quad 8 \\ + 4 \quad 1 \\ \hline \\ \hline \end{array}$$

f)

$$\begin{array}{r} \text{D} \quad \text{A} \\ 5 \quad 0 \\ + 4 \quad 9 \\ \hline \\ \hline \end{array}$$



Cá mhéad a fuair tú ceart?

Fuair mé

ceart.

Homework 18

Work out the answers to these sums:

a)

$$\begin{array}{r} \text{T U} \\ 72 \\ + 15 \\ \hline \\ \hline \end{array}$$

b)

$$\begin{array}{r} \text{T U} \\ 54 \\ + 32 \\ \hline \\ \hline \end{array}$$

c)

$$\begin{array}{r} \text{T U} \\ 47 \\ + 22 \\ \hline \\ \hline \end{array}$$

d)

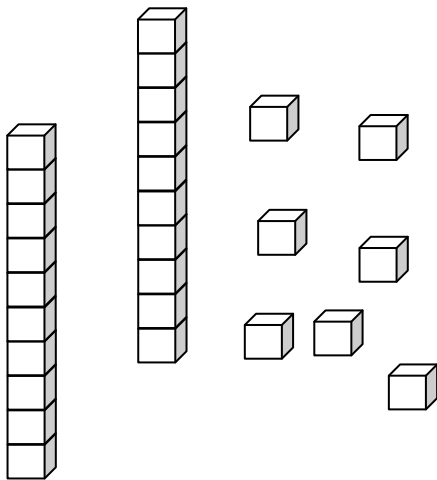
$$\begin{array}{r} \text{T U} \\ 55 \\ + 22 \\ \hline \\ \hline \end{array}$$

e)

$$\begin{array}{r} \text{T U} \\ 58 \\ + 41 \\ \hline \\ \hline \end{array}$$

f)

$$\begin{array}{r} \text{T U} \\ 50 \\ + 49 \\ \hline \\ \hline \end{array}$$



**How many did
you get right?**

I got right.

Obair Bhaile 19

Déan na suimeanna seo thíos:

a)

	C	D	A
		2	0
+		8	5
<hr/>			
<hr/>			

b)

	C	D	A
		4	2
+		6	4
<hr/>			
<hr/>			

c)

	C	D	A
		6	5
+		4	2
<hr/>			
<hr/>			

d)

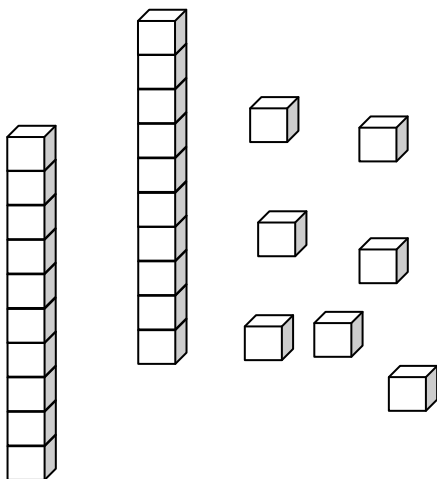
	C	D	A
		8	3
+		2	6
<hr/>			
<hr/>			

e)

	C	D	A
		1	4
+		9	4
<hr/>			
<hr/>			

f)

	C	D	A
		3	4
+		7	2
<hr/>			
<hr/>			



Cá mhéad a
fuair tú ceart?

Fuair mé

ceart.

Homework 19

Work out the answers to these sums:

a)

$$\begin{array}{r} \text{H T U} \\ 20 \\ + 85 \\ \hline \\ \hline \end{array}$$

b)

$$\begin{array}{r} \text{H T U} \\ 42 \\ + 64 \\ \hline \\ \hline \end{array}$$

c)

$$\begin{array}{r} \text{H T U} \\ 65 \\ + 42 \\ \hline \\ \hline \end{array}$$

d)

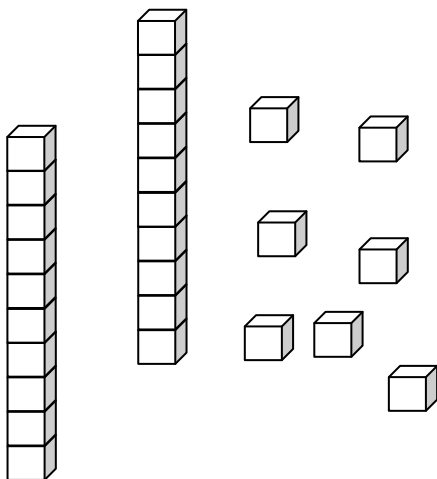
$$\begin{array}{r} \text{H T U} \\ 83 \\ + 26 \\ \hline \\ \hline \end{array}$$

e)

$$\begin{array}{r} \text{H T U} \\ 14 \\ + 94 \\ \hline \\ \hline \end{array}$$

f)

$$\begin{array}{r} \text{H T U} \\ 34 \\ + 72 \\ \hline \\ \hline \end{array}$$

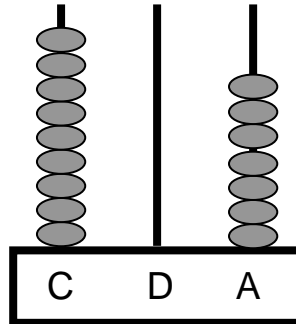


**How many did
you get right?**

Fuair mé ceart.

Obair Bhaile 20

1. Cad é an uimhir atá léirithe ar an abacas seo thíos?



2. Cad é an chéad uimhir eile sa seicheamh seo?

921 922 923 924 925 926 _____

3. Cad é an uimhir atá 10 níos lú ná 476?

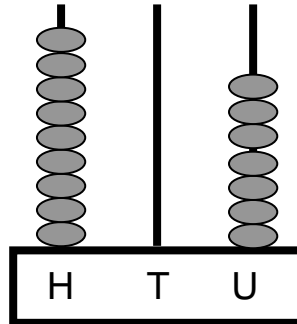
4. Cad é suim iomlán na n-uimhreacha seo thíos?

500 agus 90 agus 2

5. Scríobh an uimhir 269 i bhfocail.

Homework 20

1. What number is displayed on this abacus below?



2. What is the next number in this sequence?

921 922 923 924 925 926 _____

3. What number is 10 less than 476?

4. What is the sum of these numbers below?

500 agus 90 agus 2

5. Write the number 269 in words.

Obair Bhaile 21

1. Comhlánaigh na suimeanna seo:

$$4 + 4 + 9 = \square$$

$$2 + 5 + 8 + 4 = \square$$

$$52 + 40 = \square$$

$$61 + 11 = \square$$

$$65 + 9 = \square$$

$$44 + 5 = \square$$

$$85 + 7 = \square$$

$$70 + 30 = \square$$

$$73 + 16 = \square$$

2. Cad iad na ceithre shuim ar féidir a dhéanamh leis na huimhreacha 42, 24 agus 66?

$$42 + 24 = \square$$

$$24 + 42 = \square$$

$$66 - 42 = \square$$

$$66 - 24 = \square$$

Homework 21

1. Complete these sums:

$$4 + 4 + 9 = \square$$

$$2 + 5 + 8 + 4 = \square$$

$$52 + 40 = \square$$

$$61 + 11 = \square$$

$$65 + 9 = \square$$

$$44 + 5 = \square$$

$$85 + 7 = \square$$

$$70 + 30 = \square$$

$$73 + 16 = \square$$

2. What are the four sums that can be made using the numbers 42, 24 and 66?

$$42 + 24 = \square$$

$$24 + 42 = \square$$

$$66 - 42 = \square$$

$$66 - 24 = \square$$

Obair Bhaile 22

Déan na suimeanna seo thíos:

a)

$$\begin{array}{r} \text{D} \quad \text{A} \\ 6 \quad 3 \\ + 3 \quad 4 \\ \hline \\ \hline \end{array}$$

b)

$$\begin{array}{r} \text{D} \quad \text{A} \\ 7 \quad 2 \\ + 2 \quad 5 \\ \hline \\ \hline \end{array}$$

c)

$$\begin{array}{r} \text{D} \quad \text{A} \\ 4 \quad 7 \\ + 3 \quad 1 \\ \hline \\ \hline \end{array}$$

d)

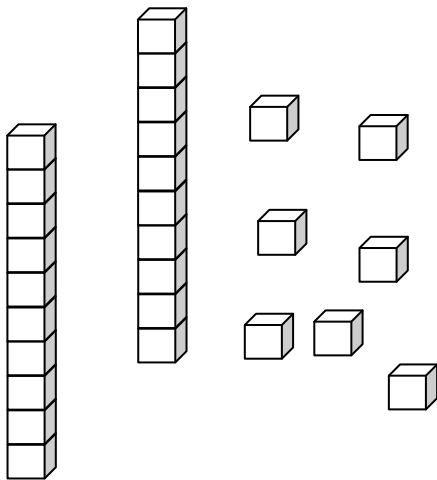
$$\begin{array}{r} \text{D} \quad \text{A} \\ 5 \quad 4 \\ + 2 \quad 4 \\ \hline \\ \hline \end{array}$$

e)

$$\begin{array}{r} \text{D} \quad \text{A} \\ 5 \quad 8 \\ + 4 \quad 1 \\ \hline \\ \hline \end{array}$$

f)

$$\begin{array}{r} \text{D} \quad \text{A} \\ 6 \quad 0 \\ + 2 \quad 9 \\ \hline \\ \hline \end{array}$$



Cá mhéad a fuair tú ceart?

Fuair mé

ceart.

Homework 22

Work out the answers to these sums:

a)

$$\begin{array}{r} \text{T U} \\ 63 \\ + 34 \\ \hline \\ \hline \end{array}$$

b)

$$\begin{array}{r} \text{T U} \\ 72 \\ + 25 \\ \hline \\ \hline \end{array}$$

c)

$$\begin{array}{r} \text{T U} \\ 47 \\ + 31 \\ \hline \\ \hline \end{array}$$

d)

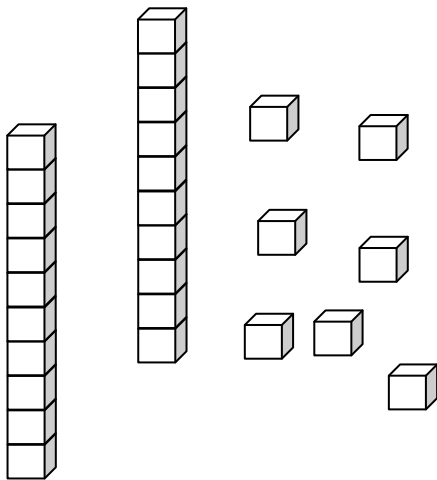
$$\begin{array}{r} \text{T U} \\ 54 \\ + 24 \\ \hline \\ \hline \end{array}$$

e)

$$\begin{array}{r} \text{T U} \\ 58 \\ + 41 \\ \hline \\ \hline \end{array}$$

f)

$$\begin{array}{r} \text{T U} \\ 60 \\ + 29 \\ \hline \\ \hline \end{array}$$



**How many did
you get right?**

I got right.

Obair Bhaile 23

Déan na suimeanna seo thíos:

a)

	C	D	A
		1	2
+		9	4
<hr/>			
<hr/>			

b)

	C	D	A
		3	2
+		7	6
<hr/>			
<hr/>			

c)

	C	D	A
		5	7
+		5	1
<hr/>			
<hr/>			

d)

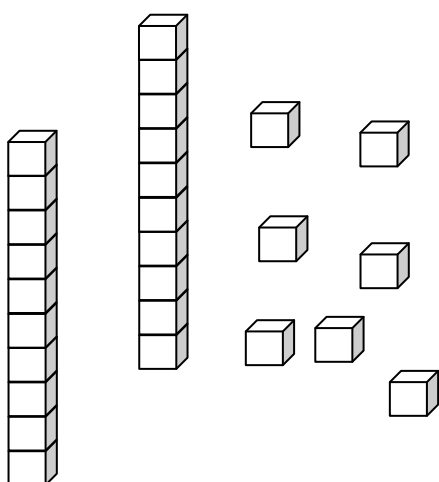
	C	D	A
		7	3
+		3	5
<hr/>			
<hr/>			

e)

	C	D	A
		9	2
+		1	4
<hr/>			
<hr/>			

f)

	C	D	A
		2	4
+		8	4
<hr/>			
<hr/>			



Cá mhéad a fuair tú ceart?

Fuair mé ceart.

Homework 23

Work out the answers to these sums:

a)

	H	T	U
		1	2
+		9	4
<hr/>			
<hr/>			

b)

	H	T	U
		3	2
+		7	6
<hr/>			
<hr/>			

c)

	H	T	U
		5	7
+		5	1
<hr/>			
<hr/>			

d)

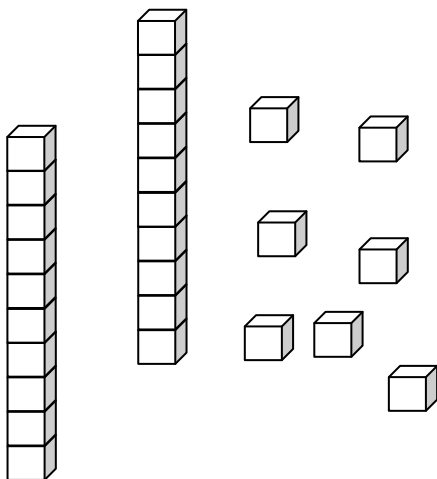
	H	T	U
		7	3
+		3	5
<hr/>			
<hr/>			

e)

	H	T	U
		9	2
+		1	4
<hr/>			
<hr/>			

f)

	H	T	U
		2	4
+		8	4
<hr/>			
<hr/>			

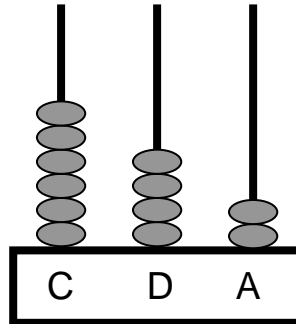


**How many did
you get right?**

Fuair mé ceart.

Obair Bhaile 24

1. Cad é an uimhir atá léirithe ar an abacas seo thíos?



2. Cad é an chéad uimhir eile sa seicheamh seo?

121 122 123 124 125 126

3. Cad é an uimhir atá 100 níos lú ná 476?

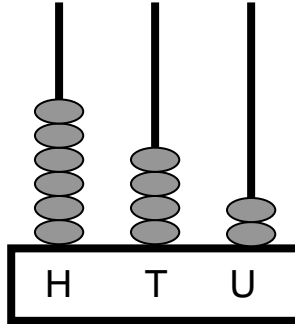
4. Cad é suim iomlán na n-uimhreacha seo thíos?

900 agus 80 agus 7

5. Scríobh an uimhir 342 i bhfocail.

Homework 24

1. What number is displayed on this abacus below?



2. What is the next number in this sequence?

764 765 766 767 768 769 _____

3. What number is 100 less than 476?

4. What is the sum of these numbers below?

900 agus 80 agus 7

5. Write the number 342 in words.

