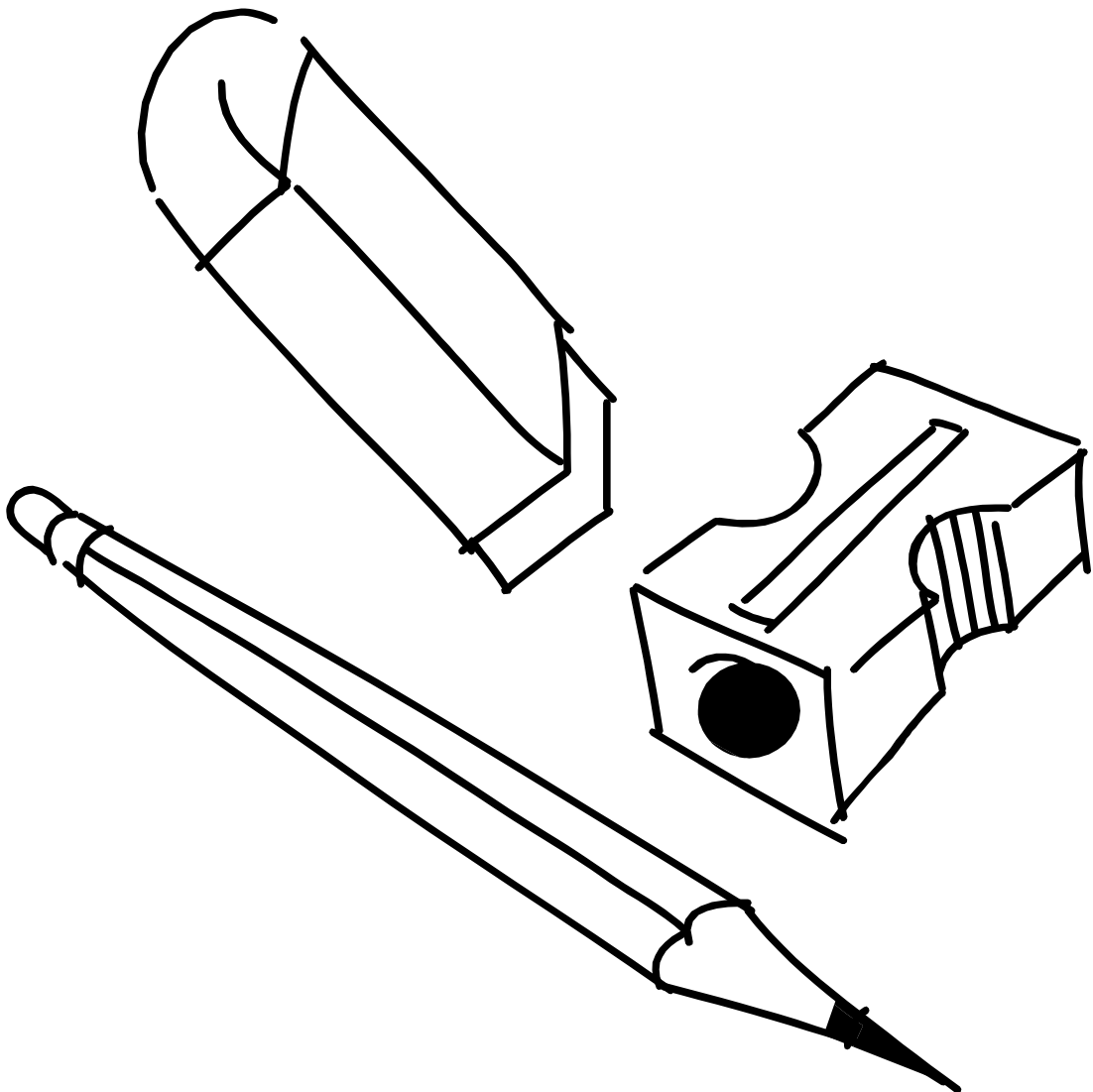


# Obair Bhaile Mata

## Leabhar 4



Ainm \_\_\_\_\_ Rang \_\_\_\_\_

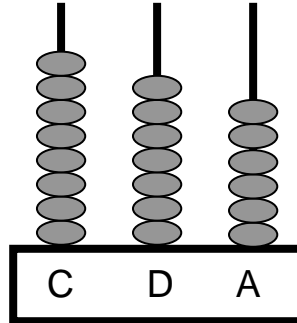


## Cearnóg 100

1	2	3	4	5	6	7	8	9	10
11	12	13	14	15	16	17	18	19	20
21	22	23	24	25	26	27	28	29	30
31	32	33	34	35	36	37	38	39	40
41	42	43	44	45	46	47	48	49	50
51	52	53	54	55	56	57	58	59	60
61	62	63	64	65	66	67	68	69	70
71	72	73	74	75	76	77	78	79	80
81	82	83	84	85	86	87	88	89	90
91	92	93	94	95	96	97	98	99	100

## Obair Bhaile 1

1. Cad é an uimhir atá léirithe ar an abacas seo thíos?



\_\_\_\_\_

2. Cad é an uimhir atá 1 níos mó ná 407?

\_\_\_\_\_

3. Cad é an uimhir atá léirithe thíos?

7 céadta + 3 deiceanna + 8 aonaid =

4. Suimigh:  $73 + 15 =$  \_\_\_\_\_

5. Dealraith:  $94 - 21 =$  \_\_\_\_\_

6. Cad iad na ceithre shuim ar féidir a dhéanamh leis na huimhreacha 10, 20 agus 30?

$$20 + 10 = \square$$

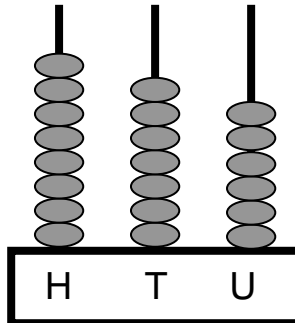
$$10 + 20 = \square$$

$$30 - 20 = \square$$

$$30 - 10 = \square$$

# Homework 1

1. What number is illustrated on this abacus below?



\_\_\_\_\_

2. What number is 1 more than 407?

\_\_\_\_\_

3. What number is indicated below?

$$7 \text{ hundreds} + 3 \text{ tens} + 8 \text{ units} = \boxed{\phantom{000}}$$

4. Add:  $73 + 15 =$  \_\_\_\_\_

5. Subtract:  $94 - 21 =$  \_\_\_\_\_

6. What four sums can be made with the numbers 10, 20 and 30?

$$20 + 10 = \boxed{\phantom{00}}$$

$$10 + 20 = \boxed{\phantom{00}}$$

$$30 - 20 = \boxed{\phantom{00}}$$

$$30 - 10 = \boxed{\phantom{00}}$$

## Obair Bhaile 2

Déan na suimeanna seo thíos:

a)

	C	D	A
		2	2
+		8	5
<hr/>			
<hr/>			

b)

	C	D	A
		3	2
+		7	1
<hr/>			
<hr/>			

c)

	C	D	A
		6	7
+		4	2
<hr/>			
<hr/>			

d)

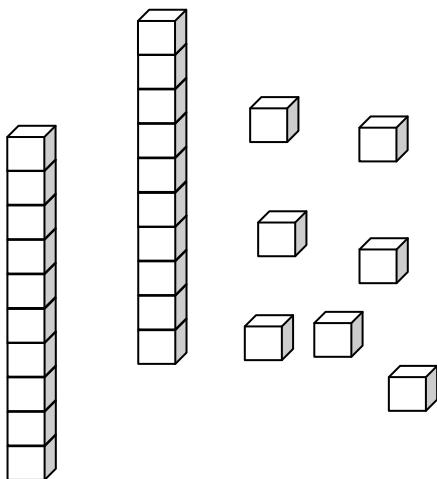
	C	D	A
		6	3
+		6	1
<hr/>			
<hr/>			

e)

	C	D	A
		5	2
+		5	4
<hr/>			
<hr/>			

f)

	C	D	A
		7	4
+		3	9
<hr/>			
<hr/>			



Cá mhéad a  
fuair tú ceart?

Fuair mé  ceart.

## Homework 2

Complete these sums below:

a)

	H	T	U
		2	2
+		8	5
<hr/>			
<hr/>			

b)

	H	T	U
		3	2
+		7	1
<hr/>			
<hr/>			

c)

	H	T	U
		6	7
+		4	2
<hr/>			
<hr/>			

d)

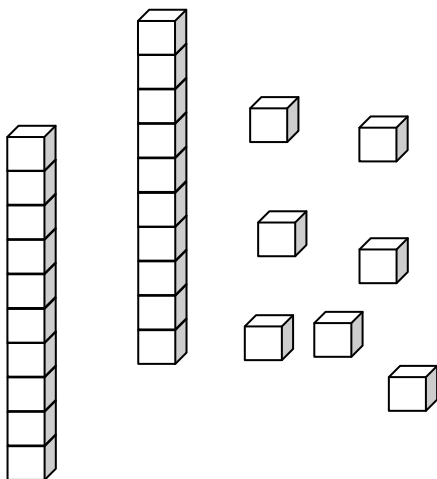
	H	T	U
		6	3
+		6	1
<hr/>			
<hr/>			

e)

	H	T	U
		5	2
+		5	4
<hr/>			
<hr/>			

f)

	H	T	U
		7	4
+		3	9
<hr/>			
<hr/>			



**How many did  
you get right?**

I got  right.

### Obair Bhaile 3

Déan na suimeanna seo thíos:

a)

	C	D	A
	4	3	7
+	2	4	5
<hr/>			
<hr/>			

b)

	C	D	A
	3	5	8
+	3	0	8
<hr/>			
<hr/>			

c)

	C	D	A
	4	6	7
+	4	9	1
<hr/>			
<hr/>			

d)


	C	D	A
	4	7	7
+	3	1	5
<hr/>			
<hr/>			

e)

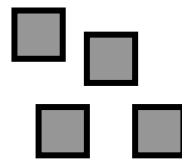
	C	D	A
	2	8	6
+	3	6	0
<hr/>			
<hr/>			

f)

	C	D	A
	5	5	8
+	2	2	9
<hr/>			
<hr/>			



# Cá mhéad a fuair tú ceart?



Fuair mé  ceart.



### Homework 3

Complete these sums below:

a)

	H	T	U	
	4	3	7	
+	2	4	5	
<hr/>				
<hr/>				

b)

	H	T	U	
	3	5	8	
+	3	0	8	
<hr/>				
<hr/>				

c)

	H	T	U	
	4	6	7	
+	4	9	1	
<hr/>				
<hr/>				

d)


	H	T	U	
	4	7	7	
+	3	1	5	
<hr/>				
<hr/>				

e)

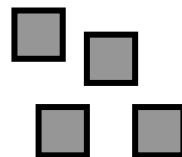
	H	T	U	
	2	8	6	
+	3	6	0	
<hr/>				
<hr/>				

f)

	H	T	U	
	5	5	8	
+	2	2	9	
<hr/>				
<hr/>				



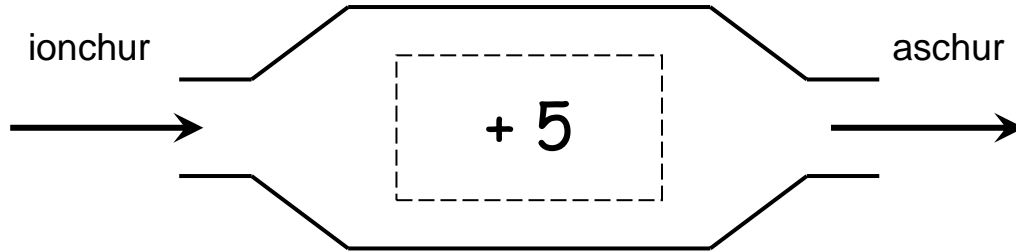
**How many did  
you get right?**



I got  right.

## Obair Bhaile 4

Amharc ar an mheaisín feidhme seo agus oibrigh amach na freagraí de na ceisteanna thíos.



1. Cad é a thagann amach nuair a chuirtear 10 isteach? \_\_\_\_\_


2. Cad é a thagann amach nuair atá ionchur 40 ann? \_\_\_\_\_

3. Cad é an uimhir a cuireadh isteach nuair a thagann 20 amach? \_\_\_\_\_


4. Cá mhéad airgid atá léirithe thíos? \_\_\_\_\_



5. Cad é an t-am atá léirithe ar an chlog seo thíos? \_\_\_\_\_

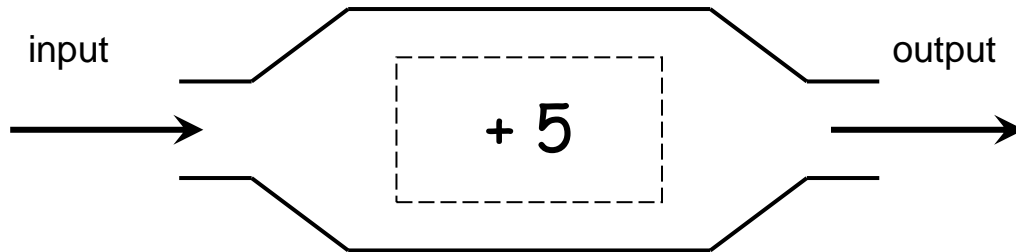


6. Cad é an t-ainm atá ar an chruth seo? \_\_\_\_\_



## Homework 4

Look at this function machine below and work out the answers to the questions below.



1. What number comes out when 10 is put in?

\_\_\_\_\_


2. What number comes out when the input is 40?

\_\_\_\_\_

3. What number was put in if the answer 20 comes out?

\_\_\_\_\_

4. How much money is indicated below?




\_\_\_\_\_

5. What time is indicated on this clock?



\_\_\_\_\_

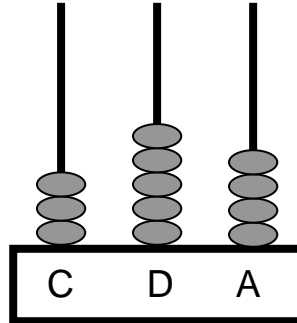
6. What is the name of  
of this shape?



\_\_\_\_\_

## Obair Bhaile 5

1. Cad é an uimhir atá léirithe ar an abacas seo thíos?



\_\_\_\_\_

2. Cad é an uimhir atá 10 níos mó ná 863?

\_\_\_\_\_

3. Cad é an uimhir atá léirithe thíos?

4 céadta + 0 deiceanna + 5 aonaid =

4. Suimigh:  $62 + 33 =$  \_\_\_\_\_

5. Dealraith:  $88 - 24 =$  \_\_\_\_\_

6. Cad iad na ceithre shuim ar féidir a dhéanamh leis na huimhreacha 12, 15 agus 27?

$$15 + 12 = \square$$

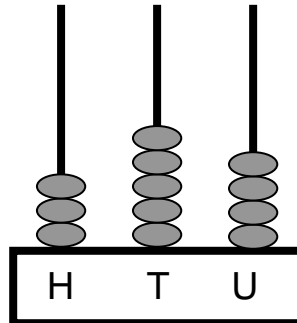
$$12 + 15 = \square$$

$$27 - 15 = \square$$

$$27 - 12 = \square$$

## Homework 5

1. What number is illustrated on this abacus below?



\_\_\_\_\_

2. What number is 10 more than 863?

\_\_\_\_\_

3. What number is indicated below?

4 hundreds + 0 tens + 5 units =

4. Add:  $62 + 33 =$  \_\_\_\_\_

5. Subtract:  $88 - 24 =$  \_\_\_\_\_

6. What four sums can be made with the numbers 12, 15 and 27?

$$15 + 12 = \square$$

$$12 + 15 = \square$$

$$27 - 15 = \square$$

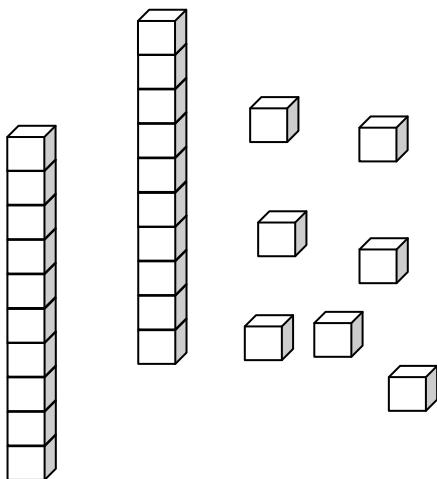
$$27 - 12 = \square$$

## Obair Bhaile 6

Déan na suimeanna seo thíos:

<p>a)</p> <table style="margin-left: auto; margin-right: auto;"> <tr><td style="padding: 0 10px;">C</td><td style="padding: 0 10px;">D</td><td style="padding: 0 10px;">A</td></tr> <tr><td></td><td style="text-align: center;">9</td><td style="text-align: center;">2</td></tr> <tr><td style="text-align: right;">+</td><td style="text-align: center;">8</td><td style="text-align: center;">8</td></tr> <tr><td colspan="3"><hr/></td></tr> <tr><td colspan="3"><hr/></td></tr> </table>	C	D	A		9	2	+	8	8	<hr/>			<hr/>			<p>b)</p> <table style="margin-left: auto; margin-right: auto;"> <tr><td style="padding: 0 10px;">C</td><td style="padding: 0 10px;">D</td><td style="padding: 0 10px;">A</td></tr> <tr><td></td><td style="text-align: center;">7</td><td style="text-align: center;">2</td></tr> <tr><td style="text-align: right;">+</td><td style="text-align: center;">7</td><td style="text-align: center;">1</td></tr> <tr><td colspan="3"><hr/></td></tr> <tr><td colspan="3"><hr/></td></tr> </table>	C	D	A		7	2	+	7	1	<hr/>			<hr/>			<p>c)</p> <table style="margin-left: auto; margin-right: auto;"> <tr><td style="padding: 0 10px;">C</td><td style="padding: 0 10px;">D</td><td style="padding: 0 10px;">A</td></tr> <tr><td></td><td style="text-align: center;">6</td><td style="text-align: center;">9</td></tr> <tr><td style="text-align: right;">+</td><td style="text-align: center;">4</td><td style="text-align: center;">2</td></tr> <tr><td colspan="3"><hr/></td></tr> <tr><td colspan="3"><hr/></td></tr> </table>	C	D	A		6	9	+	4	2	<hr/>			<hr/>		
C	D	A																																													
	9	2																																													
+	8	8																																													
<hr/>																																															
<hr/>																																															
C	D	A																																													
	7	2																																													
+	7	1																																													
<hr/>																																															
<hr/>																																															
C	D	A																																													
	6	9																																													
+	4	2																																													
<hr/>																																															
<hr/>																																															

<p>d)</p> <table style="margin-left: auto; margin-right: auto;"> <tr><td style="padding: 0 10px;">C</td><td style="padding: 0 10px;">D</td><td style="padding: 0 10px;">A</td></tr> <tr><td></td><td style="text-align: center;">8</td><td style="text-align: center;">3</td></tr> <tr><td style="text-align: right;">+</td><td style="text-align: center;">6</td><td style="text-align: center;">6</td></tr> <tr><td colspan="3"><hr/></td></tr> <tr><td colspan="3"><hr/></td></tr> </table>	C	D	A		8	3	+	6	6	<hr/>			<hr/>			<p>e)</p> <table style="margin-left: auto; margin-right: auto;"> <tr><td style="padding: 0 10px;">C</td><td style="padding: 0 10px;">D</td><td style="padding: 0 10px;">A</td></tr> <tr><td></td><td style="text-align: center;">5</td><td style="text-align: center;">9</td></tr> <tr><td style="text-align: right;">+</td><td style="text-align: center;">5</td><td style="text-align: center;">4</td></tr> <tr><td colspan="3"><hr/></td></tr> <tr><td colspan="3"><hr/></td></tr> </table>	C	D	A		5	9	+	5	4	<hr/>			<hr/>			<p>f)</p> <table style="margin-left: auto; margin-right: auto;"> <tr><td style="padding: 0 10px;">C</td><td style="padding: 0 10px;">D</td><td style="padding: 0 10px;">A</td></tr> <tr><td></td><td style="text-align: center;">9</td><td style="text-align: center;">4</td></tr> <tr><td style="text-align: right;">+</td><td style="text-align: center;">6</td><td style="text-align: center;">8</td></tr> <tr><td colspan="3"><hr/></td></tr> <tr><td colspan="3"><hr/></td></tr> </table>	C	D	A		9	4	+	6	8	<hr/>			<hr/>		
C	D	A																																													
	8	3																																													
+	6	6																																													
<hr/>																																															
<hr/>																																															
C	D	A																																													
	5	9																																													
+	5	4																																													
<hr/>																																															
<hr/>																																															
C	D	A																																													
	9	4																																													
+	6	8																																													
<hr/>																																															
<hr/>																																															



**Cá mhéad a fuair tú ceart?**

Fuair mé  ceart.

## Homework 6

Complete these sums below:

a)

	H	T	U
		9	2
+		8	8
<hr/>			
<hr/>			

b)

	H	T	U
		7	2
+		7	1
<hr/>			
<hr/>			

c)

	H	T	U
		6	9
+		4	2
<hr/>			
<hr/>			

d)

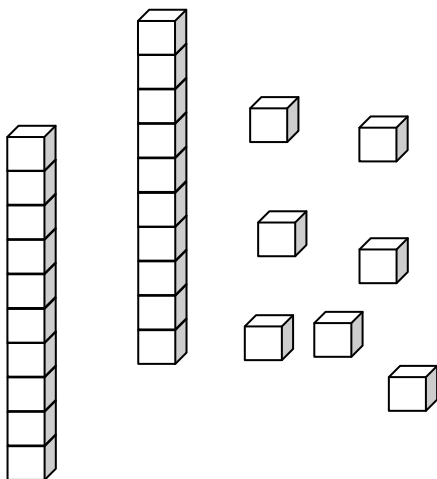
	H	T	U
		8	3
+		6	6
<hr/>			
<hr/>			

e)

	H	T	U
		5	9
+		5	4
<hr/>			
<hr/>			

f)

	H	T	U
		9	4
+		6	8
<hr/>			
<hr/>			



How many did  
you get right?

I got  right.

## Obair Bhaile 7

Déan na suimeanna seo thíos:

a)

	C	D	A
	7	9	7
+	1	4	3
<hr/>			
<hr/>			

b)

	C	D	A
	3	5	9
+	2	6	8
<hr/>			
<hr/>			

c)

	C	D	A
	5	0	7
+	4	8	5
<hr/>			
<hr/>			

d)


	C	D	A
	4	6	7
+	2	1	2
<hr/>			
<hr/>			

e)

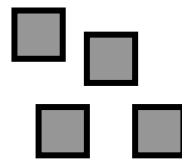
	C	D	A
	5	8	6
+	3	6	9
<hr/>			
<hr/>			

f)

	C	D	A
	5	3	8
+	2	8	6
<hr/>			
<hr/>			



# Cá mhéad a fuair tú ceart?



Fuair mé  ceart.



## Homework 7

Complete these sums below:

a)

$$\begin{array}{r} \text{H T U} \\ 797 \\ + 143 \\ \hline \\ \hline \end{array}$$

b)

$$\begin{array}{r} \text{H T U} \\ 359 \\ + 268 \\ \hline \\ \hline \end{array}$$

c)

$$\begin{array}{r} \text{H T U} \\ 507 \\ + 485 \\ \hline \\ \hline \end{array}$$

d)


$$\begin{array}{r} \text{H T U} \\ 467 \\ + 212 \\ \hline \\ \hline \end{array}$$

e)

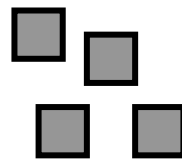
$$\begin{array}{r} \text{H T U} \\ 586 \\ + 369 \\ \hline \\ \hline \end{array}$$

f)

$$\begin{array}{r} \text{H T U} \\ 538 \\ + 286 \\ \hline \\ \hline \end{array}$$



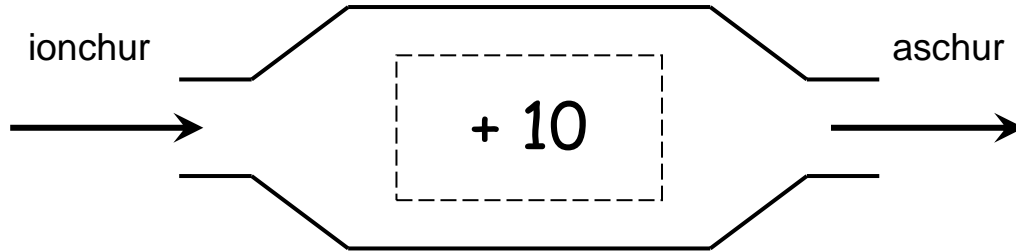
**How many did  
you get right?**



I got  right.

## Obair Bhaile 8

Amharc ar an mheaisín feidhme seo agus oibrigh amach na freagraí de na ceisteanna thíos.



1. Cad é a thagann amach nuair a chuirtear 20 isteach? \_\_\_\_\_

2. Cad é a thagann amach nuair atá ionchur 55 ann? \_\_\_\_\_

3. Cad é an uimhir a cuireadh isteach nuair a thagann 60 amach? \_\_\_\_\_


4. Cá mhéad airgid atá léirithe thíos? \_\_\_\_\_



5. Cad é an t-am atá léirithe ar an chlog seo thíos? \_\_\_\_\_

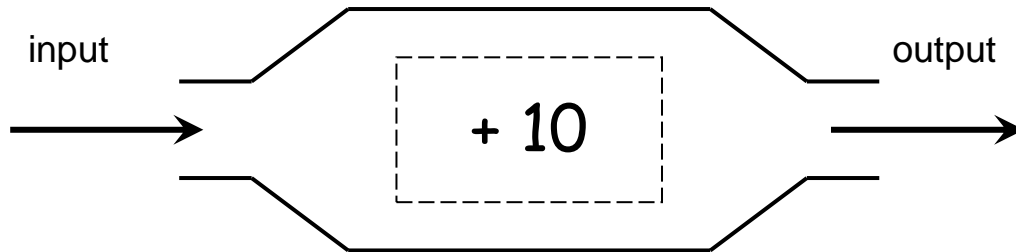


6. Cad é an t-ainm atá ar an chruth seo thíos? \_\_\_\_\_



## Homework 8

Look at this function machine below and work out the answers to the questions below.



1. What number comes out when 20 is put in?

\_\_\_\_\_

2. What number comes out when the input is 55?

\_\_\_\_\_

3. What number was put in if the answer 60 comes out?


\_\_\_\_\_

4. How much money is indicated below?




\_\_\_\_\_

5. What time is indicated on this clock?



\_\_\_\_\_

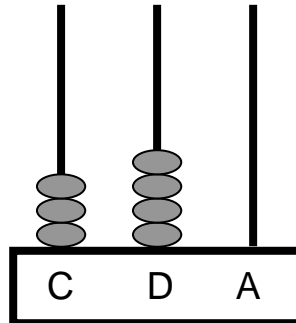
6. What is the name of  
of this shape?



\_\_\_\_\_

## Obair Bhaile 9

1. Cad é an uimhir atá léirithe ar an abacas seo thíos?



\_\_\_\_\_

2. Cad é an uimhir atá 100 níos mó ná 842?

\_\_\_\_\_

3. Cad é an uimhir atá léirithe thíos?

4 céadta + 2 deicheanna + 5 aonaid =

4. Suimigh:  $44 + 34 =$  \_\_\_\_\_

5. Dealraith:  $58 - 35 =$  \_\_\_\_\_

6. Cad iad na ceithre shuim ar féidir a dhéanamh leis na huimhreacha 20, 28 agus 48?

$$28 + 20 = \square$$

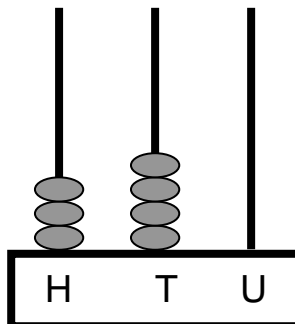
$$20 + 28 = \square$$

$$48 - 28 = \square$$

$$48 - 20 = \square$$

## Homework 9

1. What number is illustrated on this abacus below?



\_\_\_\_\_

2. What number is 100 **more than** 842?

\_\_\_\_\_

3. What number is indicated below?

4 hundreds + 2 tens + 5 units =

4. Add:  $44 + 34 =$  \_\_\_\_\_

5. Subtract:  $58 - 35 =$  \_\_\_\_\_

6. What four sums can be made with the numbers 20, 28 and 48?

$$28 + 20 = \square$$

$$20 + 28 = \square$$

$$48 - 28 = \square$$

$$48 - 20 = \square$$

## Obair Bhaile 10

Déan na suimeanna seo thíos:

a)

	C	D	A
		2	8
+		1	5
<hr/>			
<hr/>			

b)

	C	D	A
		8	2
+		7	1
<hr/>			
<hr/>			

c)

	C	D	A
		9	9
+		4	2
<hr/>			
<hr/>			

d)

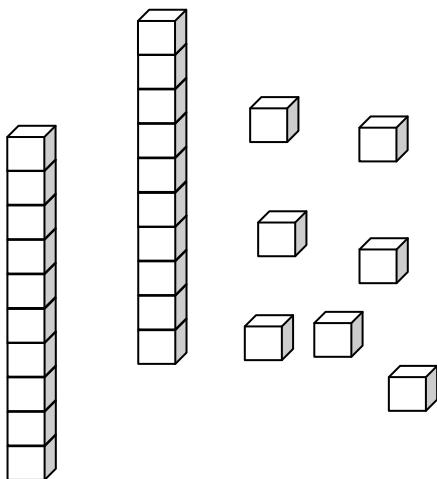
	C	D	A
		7	6
+		6	1
<hr/>			
<hr/>			

e)

	C	D	A
		8	8
+		5	4
<hr/>			
<hr/>			

f)

	C	D	A
		7	9
+		4	1
<hr/>			
<hr/>			



Cá mhéad a  
fuair tú ceart?

Fuair mé  ceart.

## Homework 10

Complete these sums below:

a)

	H	T	U
		2	8
+		1	5
<hr/>			
<hr/>			

b)

	H	T	U
		8	2
+		7	1
<hr/>			
<hr/>			

c)

	H	T	U
		9	9
+		4	2
<hr/>			
<hr/>			

d)

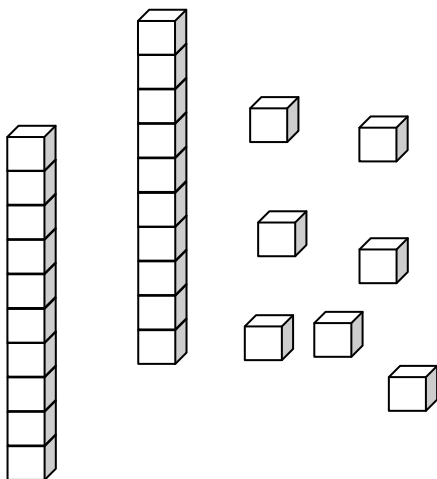
	H	T	U
		7	6
+		6	1
<hr/>			
<hr/>			

e)

	H	T	U
		8	8
+		5	4
<hr/>			
<hr/>			

f)

	H	T	U
		7	9
+		4	1
<hr/>			
<hr/>			




**How many did  
you get right?**

I got  right.

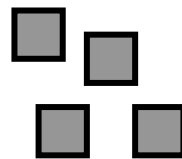
## Obair Bhaile 11

Déan na suimeanna seo thíos:

<p>a)</p> <table style="margin-left: auto; margin-right: auto;"> <tr><td></td><td><b>C</b></td><td><b>D</b></td><td><b>A</b></td><td></td></tr> <tr><td></td><td>4</td><td>8</td><td>6</td><td></td></tr> <tr><td>+</td><td>3</td><td>4</td><td>5</td><td></td></tr> <tr><td colspan="5"><hr/></td></tr> <tr><td colspan="5"><hr/></td></tr> </table>		<b>C</b>	<b>D</b>	<b>A</b>			4	8	6		+	3	4	5		<hr/>					<hr/>					<p>b)</p> <table style="margin-left: auto; margin-right: auto;"> <tr><td></td><td><b>C</b></td><td><b>D</b></td><td><b>A</b></td><td></td></tr> <tr><td></td><td>5</td><td>2</td><td>6</td><td></td></tr> <tr><td>+</td><td>3</td><td>5</td><td>8</td><td></td></tr> <tr><td colspan="5"><hr/></td></tr> <tr><td colspan="5"><hr/></td></tr> </table>		<b>C</b>	<b>D</b>	<b>A</b>			5	2	6		+	3	5	8		<hr/>					<hr/>					<p>c)</p> <table style="margin-left: auto; margin-right: auto;"> <tr><td></td><td><b>C</b></td><td><b>D</b></td><td><b>A</b></td><td></td></tr> <tr><td></td><td>5</td><td>8</td><td>4</td><td></td></tr> <tr><td>+</td><td>3</td><td>9</td><td>3</td><td></td></tr> <tr><td colspan="5"><hr/></td></tr> <tr><td colspan="5"><hr/></td></tr> </table>		<b>C</b>	<b>D</b>	<b>A</b>			5	8	4		+	3	9	3		<hr/>					<hr/>				
	<b>C</b>	<b>D</b>	<b>A</b>																																																																										
	4	8	6																																																																										
+	3	4	5																																																																										
<hr/>																																																																													
<hr/>																																																																													
	<b>C</b>	<b>D</b>	<b>A</b>																																																																										
	5	2	6																																																																										
+	3	5	8																																																																										
<hr/>																																																																													
<hr/>																																																																													
	<b>C</b>	<b>D</b>	<b>A</b>																																																																										
	5	8	4																																																																										
+	3	9	3																																																																										
<hr/>																																																																													
<hr/>																																																																													
<p>d)</p> <table style="margin-left: auto; margin-right: auto;"> <tr><td></td><td><b>C</b></td><td><b>D</b></td><td><b>A</b></td><td></td></tr> <tr><td></td><td>6</td><td>7</td><td>7</td><td></td></tr> <tr><td>+</td><td>1</td><td>5</td><td>3</td><td></td></tr> <tr><td colspan="5"><hr/></td></tr> <tr><td colspan="5"><hr/></td></tr> </table>		<b>C</b>	<b>D</b>	<b>A</b>			6	7	7		+	1	5	3		<hr/>					<hr/>					<p>e)</p> <table style="margin-left: auto; margin-right: auto;"> <tr><td></td><td><b>C</b></td><td><b>D</b></td><td><b>A</b></td><td></td></tr> <tr><td></td><td>5</td><td>8</td><td>7</td><td></td></tr> <tr><td>+</td><td>3</td><td>9</td><td>0</td><td></td></tr> <tr><td colspan="5"><hr/></td></tr> <tr><td colspan="5"><hr/></td></tr> </table>		<b>C</b>	<b>D</b>	<b>A</b>			5	8	7		+	3	9	0		<hr/>					<hr/>					<p>f)</p> <table style="margin-left: auto; margin-right: auto;"> <tr><td></td><td><b>C</b></td><td><b>D</b></td><td><b>A</b></td><td></td></tr> <tr><td></td><td>5</td><td>5</td><td>7</td><td></td></tr> <tr><td>+</td><td>3</td><td>3</td><td>9</td><td></td></tr> <tr><td colspan="5"><hr/></td></tr> <tr><td colspan="5"><hr/></td></tr> </table>		<b>C</b>	<b>D</b>	<b>A</b>			5	5	7		+	3	3	9		<hr/>					<hr/>				
	<b>C</b>	<b>D</b>	<b>A</b>																																																																										
	6	7	7																																																																										
+	1	5	3																																																																										
<hr/>																																																																													
<hr/>																																																																													
	<b>C</b>	<b>D</b>	<b>A</b>																																																																										
	5	8	7																																																																										
+	3	9	0																																																																										
<hr/>																																																																													
<hr/>																																																																													
	<b>C</b>	<b>D</b>	<b>A</b>																																																																										
	5	5	7																																																																										
+	3	3	9																																																																										
<hr/>																																																																													
<hr/>																																																																													



**Cá mhéad a fuair tú ceart?**



Fuair mé  ceart.



# Homework 11

Complete these sums below:

a)

	H	T	U	
	4	8	6	
+	3	4	5	
<hr/>				
<hr/>				

b)

	H	T	U	
	5	2	6	
+	3	5	8	
<hr/>				
<hr/>				

c)

	H	T	U	
	5	8	4	
+	3	9	3	
<hr/>				
<hr/>				

d)


	H	T	U	
	6	7	7	
+	1	5	3	
<hr/>				
<hr/>				

e)

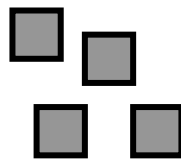
	H	T	U	
	5	8	7	
+	3	9	0	
<hr/>				
<hr/>				

f)

	H	T	U	
	5	5	7	
+	3	3	9	
<hr/>				
<hr/>				



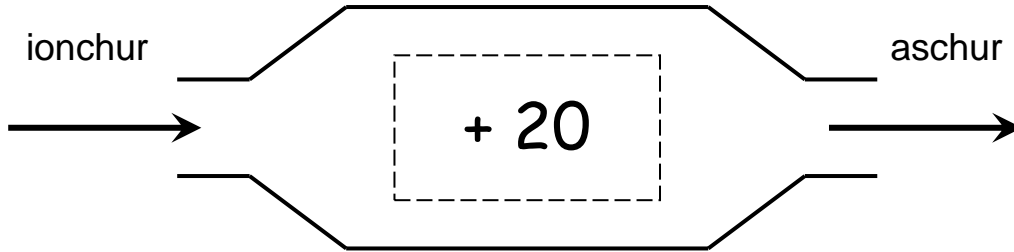
How many did you get right?



I got  right.

## Obair Bhaile 12

Amharc ar an mheaisín feidhme seo agus oibrigh amach na freagraí de na ceisteanna thíos.



1. Cad é a thagann amach nuair a chuirtear 30 isteach? \_\_\_\_\_

2. Cad é a thagann amach nuair atá ionchur 50 ann? \_\_\_\_\_

3. Cad é an uimhir a cuireadh isteach nuair a thagann 30 amach? \_\_\_\_\_


4. Cá mhéad airgid atá léirithe thíos?



5. Cad é an t-am atá léirithe ar an chlog seo thíos? \_\_\_\_\_

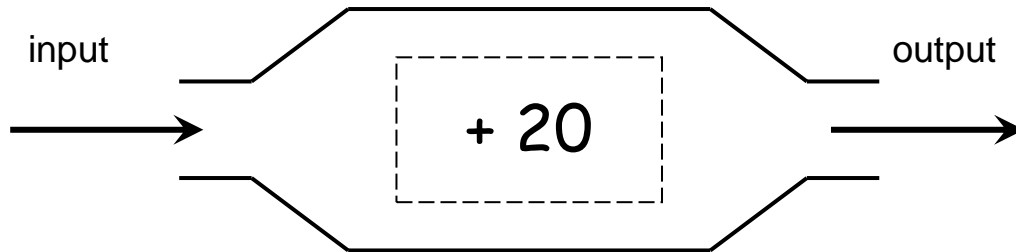


6. Cad é an t-ainm atá ar an chruth seo thíos? \_\_\_\_\_



## Homework 12

Look at this function machine below and work out the answers to the questions below.



1. What number comes out when 30 is put in?

\_\_\_\_\_

2. What number comes out when the input is 50?

\_\_\_\_\_

3. What number was put in if the answer 30 comes out?

\_\_\_\_\_

4. How much money is indicated below?




\_\_\_\_\_

5. What time is indicated on this clock?



\_\_\_\_\_

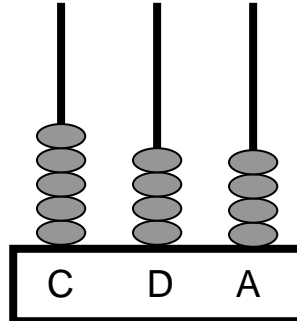
6. What is the name of  
of this shape ?



\_\_\_\_\_

## Obair Bhaile 13

1. Cad é an uimhir atá léirithe ar an abacas seo thíos?



\_\_\_\_\_

2. Cad é an uimhir atá 1 níos lú ná 300?

\_\_\_\_\_

3. Cad é an uimhir atá léirithe thíos?

4 céadta + 0 deiceanna + 9 aonaid =

4. Suimigh:  $32 + 25 =$  \_\_\_\_\_

5. Dealraith:  $67 - 52 =$  \_\_\_\_\_

6. Cad iad na ceithre shuim ar féidir a dhéanamh leis na huimhreacha 14, 16 agus 30?

$$16 + 14 = \square$$

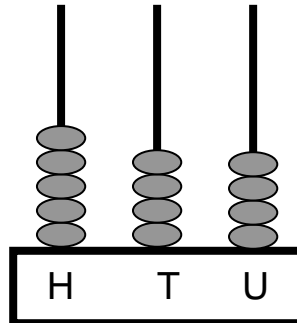
$$14 + 16 = \square$$

$$30 - 16 = \square$$

$$30 - 14 = \square$$

## Homework 13

1. What number is illustrated on this abacus below?



\_\_\_\_\_

2. What number is 1 less than 300?

\_\_\_\_\_

3. What number is indicated below?

4 hundreds + 0 tens + 9 units =

4. Add:  $32 + 25 =$  \_\_\_\_\_

5. Subtract:  $67 - 52 =$  \_\_\_\_\_

6. What four sums can be made with the numbers 14, 16 and 30?

$$16 + 14 = \square$$

$$14 + 16 = \square$$

$$30 - 16 = \square$$

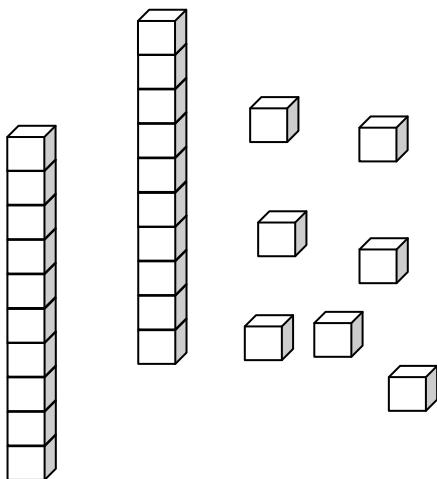
$$30 - 14 = \square$$

## Obair Bhaile 14

Déan na suimeanna seo thíos:

<p>a)</p> <table style="margin-left: auto; margin-right: auto;"> <tr><td></td><td><b>C</b></td><td><b>D</b></td><td><b>A</b></td></tr> <tr><td></td><td></td><td>5</td><td>8</td></tr> <tr><td>+</td><td></td><td>3</td><td>6</td></tr> <tr><td colspan="4"><hr/></td></tr> <tr><td colspan="4"><hr/></td></tr> </table>		<b>C</b>	<b>D</b>	<b>A</b>			5	8	+		3	6	<hr/>				<hr/>				<p>b)</p> <table style="margin-left: auto; margin-right: auto;"> <tr><td></td><td><b>C</b></td><td><b>D</b></td><td><b>A</b></td></tr> <tr><td></td><td></td><td>9</td><td>6</td></tr> <tr><td>+</td><td></td><td>7</td><td>2</td></tr> <tr><td colspan="4"><hr/></td></tr> <tr><td colspan="4"><hr/></td></tr> </table>		<b>C</b>	<b>D</b>	<b>A</b>			9	6	+		7	2	<hr/>				<hr/>				<p>c)</p> <table style="margin-left: auto; margin-right: auto;"> <tr><td></td><td><b>C</b></td><td><b>D</b></td><td><b>A</b></td></tr> <tr><td></td><td></td><td>8</td><td>6</td></tr> <tr><td>+</td><td></td><td>4</td><td>2</td></tr> <tr><td colspan="4"><hr/></td></tr> <tr><td colspan="4"><hr/></td></tr> </table>		<b>C</b>	<b>D</b>	<b>A</b>			8	6	+		4	2	<hr/>				<hr/>			
	<b>C</b>	<b>D</b>	<b>A</b>																																																											
		5	8																																																											
+		3	6																																																											
<hr/>																																																														
<hr/>																																																														
	<b>C</b>	<b>D</b>	<b>A</b>																																																											
		9	6																																																											
+		7	2																																																											
<hr/>																																																														
<hr/>																																																														
	<b>C</b>	<b>D</b>	<b>A</b>																																																											
		8	6																																																											
+		4	2																																																											
<hr/>																																																														
<hr/>																																																														

<p>d)</p> <table style="margin-left: auto; margin-right: auto;"> <tr><td></td><td><b>C</b></td><td><b>D</b></td><td><b>A</b></td></tr> <tr><td></td><td></td><td>7</td><td>7</td></tr> <tr><td>+</td><td></td><td>6</td><td>1</td></tr> <tr><td colspan="4"><hr/></td></tr> <tr><td colspan="4"><hr/></td></tr> </table>		<b>C</b>	<b>D</b>	<b>A</b>			7	7	+		6	1	<hr/>				<hr/>				<p>e)</p> <table style="margin-left: auto; margin-right: auto;"> <tr><td></td><td><b>C</b></td><td><b>D</b></td><td><b>A</b></td></tr> <tr><td></td><td></td><td>8</td><td>9</td></tr> <tr><td>+</td><td></td><td>5</td><td>4</td></tr> <tr><td colspan="4"><hr/></td></tr> <tr><td colspan="4"><hr/></td></tr> </table>		<b>C</b>	<b>D</b>	<b>A</b>			8	9	+		5	4	<hr/>				<hr/>				<p>f)</p> <table style="margin-left: auto; margin-right: auto;"> <tr><td></td><td><b>C</b></td><td><b>D</b></td><td><b>A</b></td></tr> <tr><td></td><td></td><td>7</td><td>4</td></tr> <tr><td>+</td><td></td><td>4</td><td>8</td></tr> <tr><td colspan="4"><hr/></td></tr> <tr><td colspan="4"><hr/></td></tr> </table>		<b>C</b>	<b>D</b>	<b>A</b>			7	4	+		4	8	<hr/>				<hr/>			
	<b>C</b>	<b>D</b>	<b>A</b>																																																											
		7	7																																																											
+		6	1																																																											
<hr/>																																																														
<hr/>																																																														
	<b>C</b>	<b>D</b>	<b>A</b>																																																											
		8	9																																																											
+		5	4																																																											
<hr/>																																																														
<hr/>																																																														
	<b>C</b>	<b>D</b>	<b>A</b>																																																											
		7	4																																																											
+		4	8																																																											
<hr/>																																																														
<hr/>																																																														



**Cá mhéad a fuair tú ceart?**

Fuair mé  ceart.

## Homework 14

Complete these sums below:

a)

	H	T	U	
		5	8	
+		3	6	
<hr/>				
<hr/>				

b)

	H	T	U	
		9	6	
+		7	2	
<hr/>				
<hr/>				

c)

	H	T	U	
		8	6	
+		4	2	
<hr/>				
<hr/>				

d)

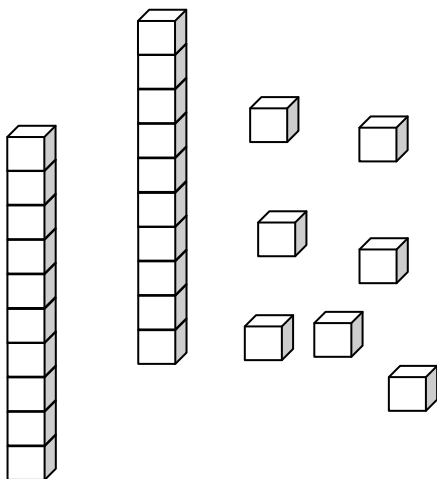
	H	T	U	
		7	7	
+		6	1	
<hr/>				
<hr/>				

e)

	H	T	U	
		8	9	
+		5	4	
<hr/>				
<hr/>				

f)

	H	T	U	
		7	4	
+		4	8	
<hr/>				
<hr/>				



How many did  
you get right?

I got  right.

## Obair Bhaile 15

Déan na suimeanna seo thíos:

a)

	C	D	A
	2	3	7
+	2	6	8

b)

	C	D	A
	3	6	3
+	1	7	8

c)

	C	D	A
	6	6	4
+	2	4	1

d)


	C	D	A
	4	2	8
+	1	1	5

e)

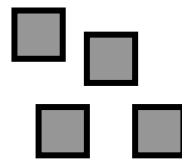
	C	D	A
	6	8	6
+	3	0	9

f)

	C	D	A
	5	5	0
+	2	8	4



**Cá mhéad a fuair tú ceart?**



Fuair mé

ceart.



## Homework 15

Complete these sums below:

a)

	H	T	U	
	2	3	7	
+	2	6	8	
<hr/>				
<hr/>				

b)

	H	T	U	
	3	6	3	
+	1	7	8	
<hr/>				
<hr/>				

c)

	H	T	U	
	6	6	4	
+	2	4	1	
<hr/>				
<hr/>				

d)


	H	T	U	
	4	2	8	
+	1	1	5	
<hr/>				
<hr/>				

e)

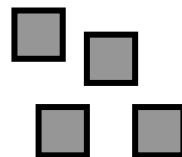
	H	T	U	
	6	8	6	
+	3	0	9	
<hr/>				
<hr/>				

f)

	H	T	U	
	5	5	0	
+	2	8	4	
<hr/>				
<hr/>				



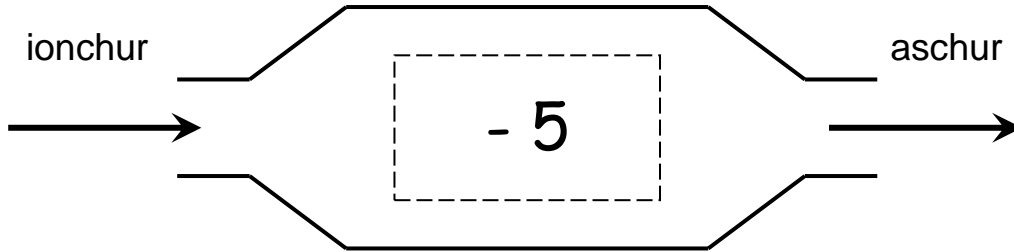
**How many did  
you get right?**



I got  right.

## Obair Bhaile 16

Amharc ar an mheaisín feidhme seo agus oibrigh amach na freagraí de na ceisteanna thíos.



1. Cad é a thagann amach nuair a chuirtear 10 isteach? \_\_\_\_\_

2. Cad é a thagann amach nuair atá ionchur 20 ann? \_\_\_\_\_

3. Cad é an uimhir a cuireadh isteach nuair a thagann 25 amach? \_\_\_\_\_


4. Cá mhéad airgid atá léirithe thíos?



5. Cad é an t-am atá léirithe ar an chlog seo thíos? \_\_\_\_\_

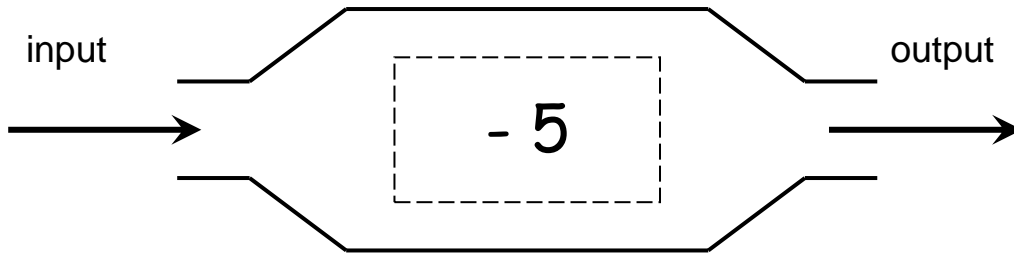


6. Cad é an t-ainm atá ar an chruth seo thíos? \_\_\_\_\_



# Homework 16

Look at this function machine below and work out the answers to the questions below.



1. What number comes out when 10 is put in?

\_\_\_\_\_

2. What number comes out when the input is 20?

\_\_\_\_\_

3. What number was put in if the answer 25 comes out?

\_\_\_\_\_

4. How much money is indicated below?




\_\_\_\_\_

5. What time is indicated on this clock?



\_\_\_\_\_

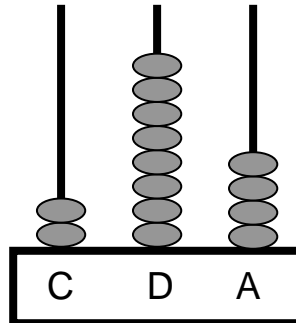
6. What is the name of  
of this shape?



\_\_\_\_\_

## Obair Bhaile 17

1. Cad é an uimhir atá léirithe ar an abacas seo thíos?



\_\_\_\_\_

2. Cad é an uimhir atá 10 níos lú ná 529?

\_\_\_\_\_

3. Cad é an uimhir atá léirithe thíos?

0 céadta + 4 deiceanna + 5 aonaid =

4. Suimigh:  $41 + 37 =$  \_\_\_\_\_

5. Dealraith:  $55 - 24 =$  \_\_\_\_\_

6. Cad iad na ceithre shuim ar féidir a dhéanamh leis na huimhreacha 12, 24 agus 36?

$$24 + 12 = \square$$

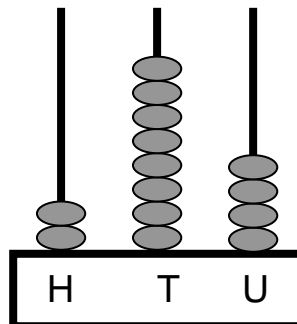
$$12 + 24 = \square$$

$$36 - 24 = \square$$

$$36 - 12 = \square$$

## Homework 17

1. What number is illustrated on this abacus below?



\_\_\_\_\_

2. What number is 10 less than 529?

\_\_\_\_\_

3. What number is indicated below?

$$0 \text{ hundreds} + 4 \text{ tens} + 5 \text{ units} = \boxed{\phantom{00}}$$

4. Add:  $41 + 37 =$  \_\_\_\_\_

5. Subtract:  $55 - 24 =$  \_\_\_\_\_

6. What four sums can be made with the numbers 10, 20 and 30?

$$24 + 12 = \boxed{\phantom{00}}$$

$$12 + 24 = \boxed{\phantom{00}}$$

$$36 - 24 = \boxed{\phantom{00}}$$

$$36 - 12 = \boxed{\phantom{00}}$$

## Obair Bhaile 18

Déan na suimeanna seo thíos:

a)

	C	D	A
		2	2
+		1	9
<hr/>			
<hr/>			

b)

	C	D	A
		3	2
+		2	5
<hr/>			
<hr/>			

c)

	C	D	A
		6	7
+		4	8
<hr/>			
<hr/>			

d)

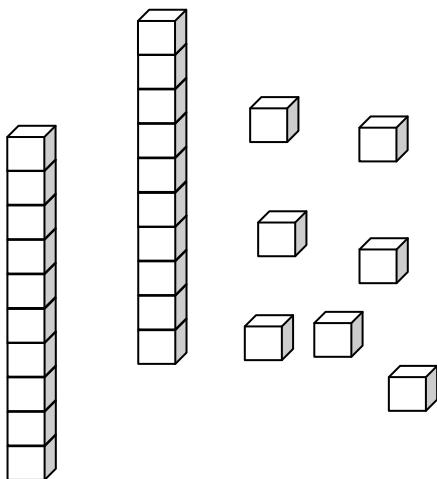
	C	D	A
		4	3
+		3	1
<hr/>			
<hr/>			

e)

	C	D	A
		5	2
+		3	9
<hr/>			
<hr/>			

f)

	C	D	A
		7	4
+		3	7
<hr/>			
<hr/>			



Cá mhéad a  
fuair tú ceart?

Fuair mé  ceart.

## Homework 18

Complete these sums below:

a)

	H	T	U	
		2	2	
+		1	9	
<hr/>				
<hr/>				

b)

	H	T	U	
		3	2	
+		2	5	
<hr/>				
<hr/>				

c)

	H	T	U	
		6	7	
+		4	8	
<hr/>				
<hr/>				

d)

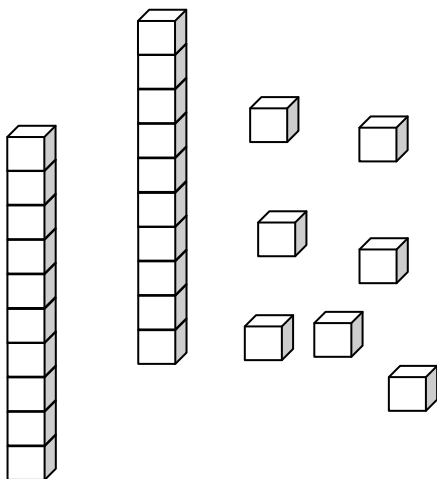
	H	T	U	
		4	3	
+		3	1	
<hr/>				
<hr/>				

e)

	H	T	U	
		5	2	
+		3	9	
<hr/>				
<hr/>				

f)

	H	T	U	
		7	4	
+		3	7	
<hr/>				
<hr/>				



**How many did  
you get right?**

I got  right.

## Obair Bhaile 19

Déan na suimeanna seo thíos:

a)

	C	D	A
	6	3	8
+	1	3	3

b)

	C	D	A
	6	3	9
+	2	6	4

c)

	C	D	A
	4	6	8
+	3	5	1

d)


	C	D	A
	4	7	5
+	2	9	5

e)

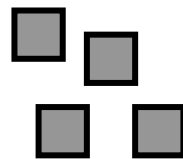
	C	D	A
	9	4	6
+		2	8

f)

	C	D	A
	4	7	5
+	2	3	0



**Cá mhéad a fuair tú ceart?**



Fuair mé  ceart.



## Homework 19

Complete these sums below:

a)

	H	T	U
	6	3	8
+	1	3	3
<hr/>			
<hr/>			

b)

	H	T	U
	6	3	9
+	2	6	4
<hr/>			
<hr/>			

c)

	H	T	U
	4	6	8
+	3	5	1
<hr/>			
<hr/>			

d)


	H	T	U
	4	7	5
+	2	9	5
<hr/>			
<hr/>			

e)

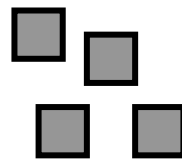
	H	T	U
	9	4	6
+		2	8
<hr/>			
<hr/>			

f)

	H	T	U
	4	7	5
+	2	3	0
<hr/>			
<hr/>			



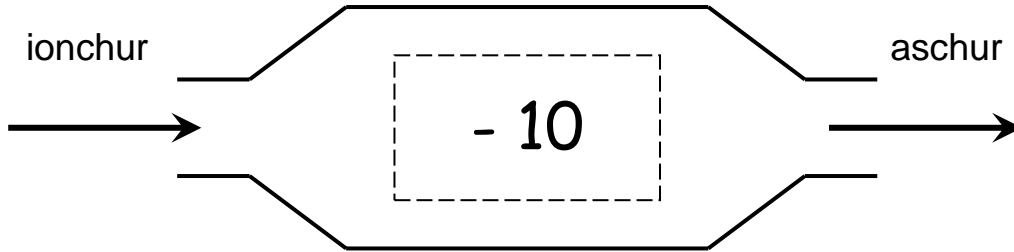
**How many did  
you get right?**



I got  right.

## Obair Bhaile 20

Amharc ar an mheaisín feidhme seo agus oibrigh amach na freagraí de na ceistanna thíos.



1. Cad é a thagann amach nuair a chuirtear 20 isteach? \_\_\_\_\_

2. Cad é a thagann amach nuair atá ionchur 50 ann? \_\_\_\_\_

3. Cad é an uimhir a cuireadh isteach nuair a thagann 30 amach? \_\_\_\_\_

4. Cá mhéad airgid atá léirithe thíos? \_\_\_\_\_



5. Cad é an t-am atá léirithe ar an chlog seo thíos? \_\_\_\_\_

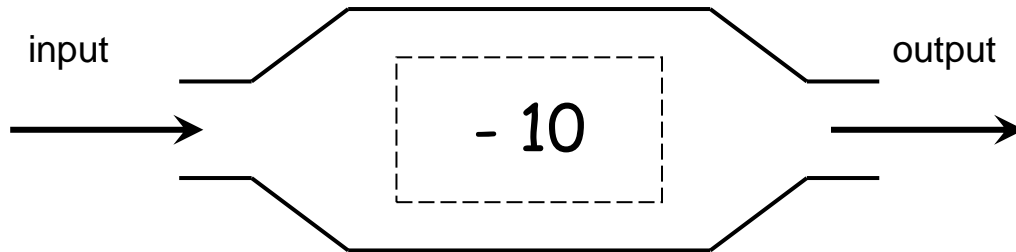


6. Cad é an t-ainm atá ar an chruth seo thíos? \_\_\_\_\_



## Homework 20

Look at this function machine below and work out the answers to the questions below.



1. What number comes out when 20 is put in?

\_\_\_\_\_

2. What number comes out when the input is 50?

\_\_\_\_\_

3. What number was put in if the answer 30 comes out?


\_\_\_\_\_

4. How much money is indicated below?



\_\_\_\_\_

5. What time is indicated on this clock?



\_\_\_\_\_

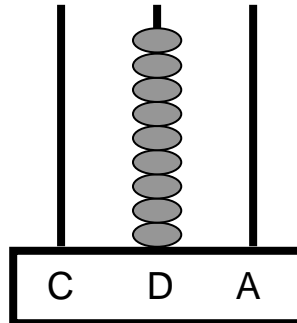
6. What is the name of  
of this shape ?



\_\_\_\_\_

## Obair Bhaile 21

1. Cad é an uimhir atá léirithe ar an abacas seo thíos?



\_\_\_\_\_

2. Cad é an uimhir atá 100 níos lú ná 729?

\_\_\_\_\_

3. Cad é an uimhir atá léirithe thíos?

9 céadta + 1 deiceanna + 0 aonaid =

4. Suimigh:  $65 + 31 =$  \_\_\_\_\_

5. Dealraith:  $44 - 12 =$  \_\_\_\_\_

6. Cad iad na ceithre shuim ar féidir a dhéanamh leis na huimhreacha 15, 30 agus 45?

$$30 + 15 = \square$$

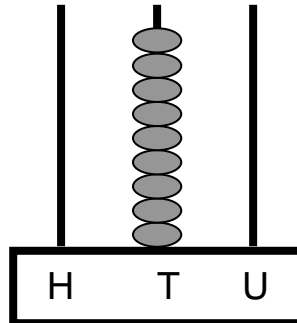
$$15 + 30 = \square$$

$$45 - 30 = \square$$

$$45 - 15 = \square$$

## Homework 21

1. What number is illustrated on this abacus below?



\_\_\_\_\_

2. What number is 100 **more than** 729?

\_\_\_\_\_

3. What number is indicated below?

9 hundreds + 1 tens + 0 units =

4. Add:  $65 + 31 =$  \_\_\_\_\_

5. Subtract:  $44 - 12 =$  \_\_\_\_\_

6. What four sums can be made with the numbers 15, 30 and 45?

$$30 + 15 = \square$$

$$15 + 30 = \square$$

$$45 - 30 = \square$$

$$45 - 15 = \square$$

## Obair Bhaile 22

Déan na suimeanna seo thíos:

a)

	C	D	A
		9	9
+		8	5
<hr/>			
<hr/>			

b)

	C	D	A
		8	5
+		7	1
<hr/>			
<hr/>			

c)

	C	D	A
		6	9
+		5	2
<hr/>			
<hr/>			

d)

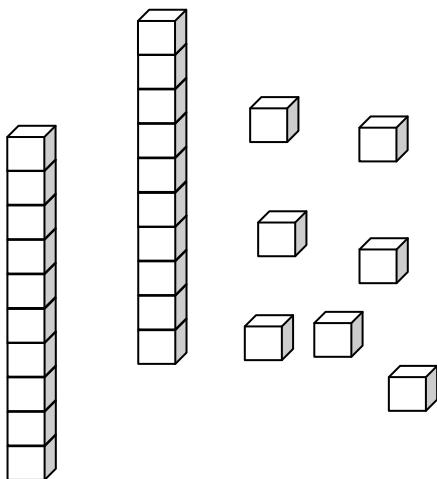
	C	D	A
		8	9
+		6	1
<hr/>			
<hr/>			

e)

	C	D	A
		7	4
+		5	4
<hr/>			
<hr/>			

f)

	C	D	A
		8	4
+		3	9
<hr/>			
<hr/>			



# Cá mhéad a fuair tú ceart?

Fuair mé  ceart.

## Homework 22

Complete these sums below:

a)

	H	T	U
		9	9
+		8	5
<hr/>			
<hr/>			

b)

	H	T	U
		8	5
+		7	1
<hr/>			
<hr/>			

c)

	H	T	U
		6	9
+		5	2
<hr/>			
<hr/>			

d)

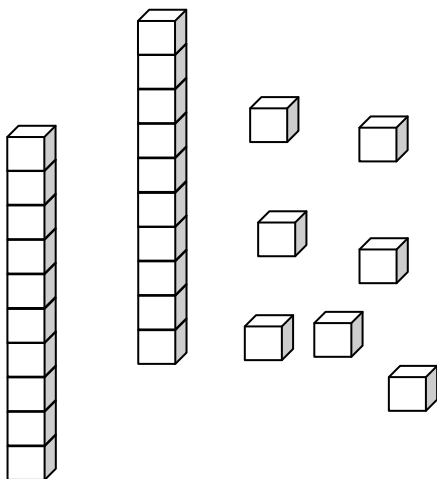
	H	T	U
		8	9
+		6	1
<hr/>			
<hr/>			

e)

	H	T	U
		7	4
+		5	4
<hr/>			
<hr/>			

f)

	H	T	U
		8	4
+		3	9
<hr/>			
<hr/>			



**How many did  
you get right?**


I got  right.

## Obair Bhaile 23

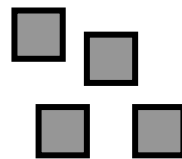
Déan na suimeanna seo thíos:

<p>a)</p> <table style="margin-left: auto; margin-right: auto;"> <tr><td></td><td><b>C</b></td><td><b>D</b></td><td><b>A</b></td><td></td></tr> <tr><td></td><td>7</td><td>3</td><td>8</td><td></td></tr> <tr><td>+</td><td>2</td><td>3</td><td>6</td><td></td></tr> <tr><td colspan="5"><hr/></td></tr> <tr><td colspan="5"><hr/></td></tr> </table>		<b>C</b>	<b>D</b>	<b>A</b>			7	3	8		+	2	3	6		<hr/>					<hr/>					<p>b)</p> <table style="margin-left: auto; margin-right: auto;"> <tr><td></td><td><b>C</b></td><td><b>D</b></td><td><b>A</b></td><td></td></tr> <tr><td></td><td>5</td><td>3</td><td>8</td><td></td></tr> <tr><td>+</td><td>3</td><td>7</td><td>2</td><td></td></tr> <tr><td colspan="5"><hr/></td></tr> <tr><td colspan="5"><hr/></td></tr> </table>		<b>C</b>	<b>D</b>	<b>A</b>			5	3	8		+	3	7	2		<hr/>					<hr/>					<p>c)</p> <table style="margin-left: auto; margin-right: auto;"> <tr><td></td><td><b>C</b></td><td><b>D</b></td><td><b>A</b></td><td></td></tr> <tr><td></td><td>4</td><td>9</td><td>9</td><td></td></tr> <tr><td>+</td><td>2</td><td>6</td><td>1</td><td></td></tr> <tr><td colspan="5"><hr/></td></tr> <tr><td colspan="5"><hr/></td></tr> </table>		<b>C</b>	<b>D</b>	<b>A</b>			4	9	9		+	2	6	1		<hr/>					<hr/>				
	<b>C</b>	<b>D</b>	<b>A</b>																																																																										
	7	3	8																																																																										
+	2	3	6																																																																										
<hr/>																																																																													
<hr/>																																																																													
	<b>C</b>	<b>D</b>	<b>A</b>																																																																										
	5	3	8																																																																										
+	3	7	2																																																																										
<hr/>																																																																													
<hr/>																																																																													
	<b>C</b>	<b>D</b>	<b>A</b>																																																																										
	4	9	9																																																																										
+	2	6	1																																																																										
<hr/>																																																																													
<hr/>																																																																													

<p>d)</p> <table style="margin-left: auto; margin-right: auto;"> <tr><td></td><td><b>C</b></td><td><b>D</b></td><td><b>A</b></td><td></td></tr> <tr><td></td><td>5</td><td>7</td><td>5</td><td></td></tr> <tr><td>+</td><td>3</td><td>4</td><td>7</td><td></td></tr> <tr><td colspan="5"><hr/></td></tr> <tr><td colspan="5"><hr/></td></tr> </table>		<b>C</b>	<b>D</b>	<b>A</b>			5	7	5		+	3	4	7		<hr/>					<hr/>					<p>e)</p> <table style="margin-left: auto; margin-right: auto;"> <tr><td></td><td><b>C</b></td><td><b>D</b></td><td><b>A</b></td><td></td></tr> <tr><td></td><td>5</td><td>3</td><td>6</td><td></td></tr> <tr><td>+</td><td>3</td><td>3</td><td>7</td><td></td></tr> <tr><td colspan="5"><hr/></td></tr> <tr><td colspan="5"><hr/></td></tr> </table>		<b>C</b>	<b>D</b>	<b>A</b>			5	3	6		+	3	3	7		<hr/>					<hr/>					<p>f)</p> <table style="margin-left: auto; margin-right: auto;"> <tr><td></td><td><b>C</b></td><td><b>D</b></td><td><b>A</b></td><td></td></tr> <tr><td></td><td>5</td><td>9</td><td>8</td><td></td></tr> <tr><td>+</td><td>3</td><td>2</td><td>4</td><td></td></tr> <tr><td colspan="5"><hr/></td></tr> <tr><td colspan="5"><hr/></td></tr> </table>		<b>C</b>	<b>D</b>	<b>A</b>			5	9	8		+	3	2	4		<hr/>					<hr/>				
	<b>C</b>	<b>D</b>	<b>A</b>																																																																										
	5	7	5																																																																										
+	3	4	7																																																																										
<hr/>																																																																													
<hr/>																																																																													
	<b>C</b>	<b>D</b>	<b>A</b>																																																																										
	5	3	6																																																																										
+	3	3	7																																																																										
<hr/>																																																																													
<hr/>																																																																													
	<b>C</b>	<b>D</b>	<b>A</b>																																																																										
	5	9	8																																																																										
+	3	2	4																																																																										
<hr/>																																																																													
<hr/>																																																																													



**Cá mhéad a fuair tú ceart?**



Fuair mé  ceart.



## Homework 23

Complete these sums below:

a)

	H	T	U	
	7	3	8	
+	2	3	6	
<hr/>				
<hr/>				

b)

	H	T	U	
	5	3	8	
+	3	7	2	
<hr/>				
<hr/>				

c)

	H	T	U	
	4	9	9	
+	2	6	1	
<hr/>				
<hr/>				

d)


	H	T	U	
	5	7	5	
+	3	4	7	
<hr/>				
<hr/>				

e)

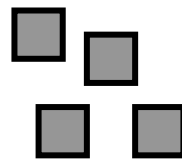
	H	T	U	
	5	3	6	
+	3	3	7	
<hr/>				
<hr/>				

f)

	H	T	U	
	5	9	8	
+	3	2	4	
<hr/>				
<hr/>				



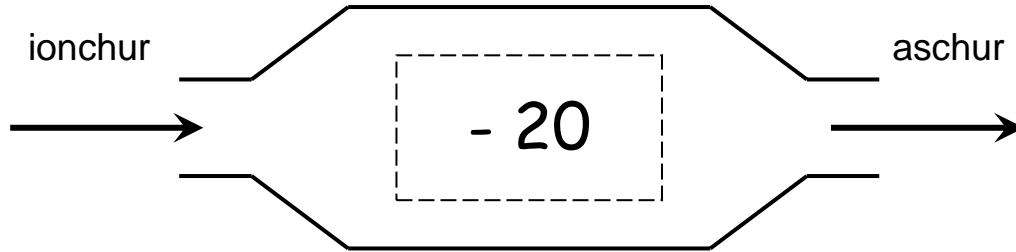
**How many did  
you get right?**



I got  right.

## Obair Bhaile 24

Amharc ar an mheaisín feidhme seo agus oibrigh amach na freagraí de na ceisteanna thíos.



1. Cad é a thagann amach nuair a chuirtear 20 isteach? \_\_\_\_\_

2. Cad é a thagann amach nuair atá ionchur 50 ann? \_\_\_\_\_

3. Cad é an uimhir a cuireadh isteach nuair a thagann 80 amach? \_\_\_\_\_

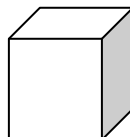
4. Cá mhéad airgid atá léirithe thíos?



5. Cad é an t-am atá léirithe ar an chlog seo thíos? \_\_\_\_\_

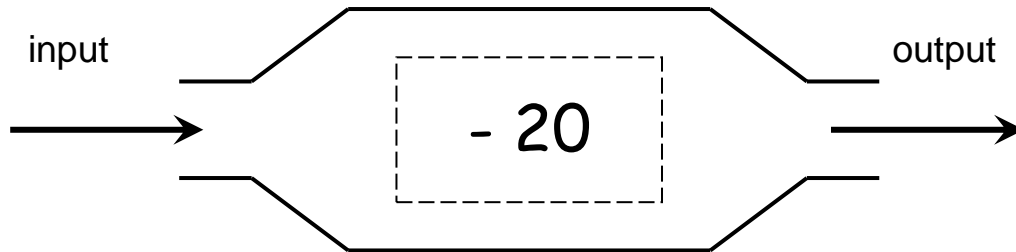


6. Cad é an t-ainm atá ar an chruth seo thíos? \_\_\_\_\_



## Homework 24

Look at this function machine below and work out the answers to the questions below.



1. What number comes out when 20 is put in?

\_\_\_\_\_

2. What number comes out when the input is 50?

\_\_\_\_\_

3. What number was put in if the answer 80 comes out?

\_\_\_\_\_

4. How much money is indicated below?



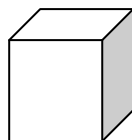
\_\_\_\_\_

5. What time is indicated on this clock?



\_\_\_\_\_

6. What is the name of  
of this shape?



\_\_\_\_\_









