

Obair Bhaile Mata

Leabhar 6



Ainm _____ Rang _____

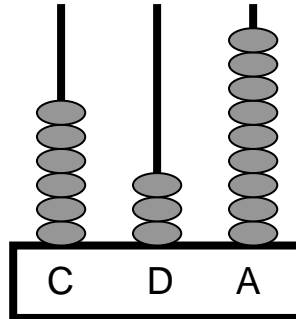


Cearnóg Iolraithe Multiplication Square

X	1	2	3	4	5	6	7	8	9	10
1	1	2	3	4	5	6	7	8	9	10
2	2	4	6	8	10	12	14	16	18	20
3	3	6	9	12	15	18	21	24	27	30
4	4	8	12	16	20	24	28	32	36	40
5	5	10	15	20	25	30	35	40	45	50
6	6	12	18	24	30	36	42	48	54	60
7	7	14	21	28	35	42	49	56	63	70
8	8	16	24	32	40	48	56	64	72	80
9	9	18	27	36	45	54	63	72	81	90
10	10	20	30	40	50	60	70	80	90	100

Obair Bhaile Mata 1

1. Cad é an uimhir atá léirithe ar an abacas seo thíos?



2. Suimigh $64 + 23 =$ _____

3. Déan an tsuim seo thíos.

$$\begin{array}{r} \text{D} \quad \text{A} \\ 4 \quad 7 \\ + 3 \quad 5 \\ \hline \\ \hline \end{array}$$

4. Dealraith $75 - 31 =$ _____

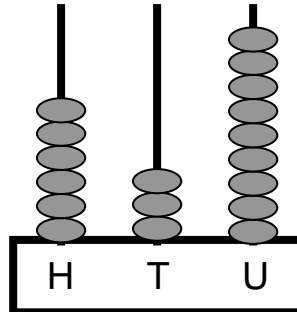
5. Déan an tsuim seo thíos.

$$\begin{array}{r} \text{D} \quad \text{A} \\ 5 \quad 5 \\ - 2 \quad 4 \\ \hline \\ \hline \end{array}$$

6. Iolraigh $5 \times 2 =$ _____

Maths Homework 1

1. What number is displayed on this abacus?



2. Add $64 + 23 =$ _____

3. Complete this sum:

$$\begin{array}{r} \text{T} \quad \text{U} \\ 4 \quad 7 \\ + 3 \quad 5 \\ \hline \\ \hline \end{array}$$

4. Subtract $75 - 31 =$ _____

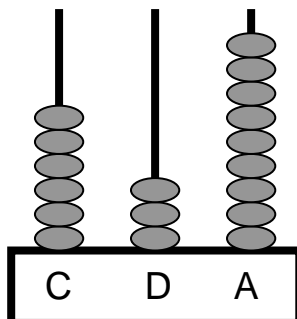
5. Complete this sum:

$$\begin{array}{r} \text{T} \quad \text{U} \\ 5 \quad 5 \\ - 2 \quad 4 \\ \hline \\ \hline \end{array}$$

6. Multiply $5 \times 2 =$ _____

Obair Bhaile Mata 2

1. Cad é an uimhir atá léirithe ar an abacas seo thíos?



2. Suimigh $22 + 52 =$ _____

3. Déan an tsuim seo thíos.

$$\begin{array}{r} \text{D} \quad \text{A} \\ 5 \quad 4 \\ + 3 \quad 8 \\ \hline \\ \hline \end{array}$$

4. Dealraigh $78 - 43 =$ _____

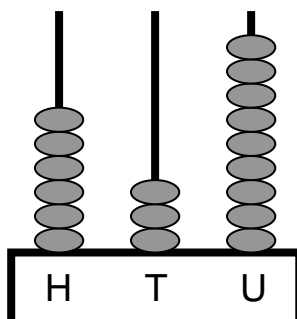
5. Déan an tsuim seo thíos.

$$\begin{array}{r} \text{D} \quad \text{A} \\ 7 \quad 8 \\ - 5 \quad 4 \\ \hline \\ \hline \end{array}$$

6. Iolraigh $8 \times 2 =$ _____

Maths Homework 2

1. What number is displayed on this abacus?



2. Add $22 + 52 =$ _____

3. Complete this sum:

$$\begin{array}{r} \text{T} \quad \text{U} \\ 5 \quad 4 \\ + 3 \quad 8 \\ \hline \\ \hline \end{array}$$

4. Subtract $78 - 43 =$ _____

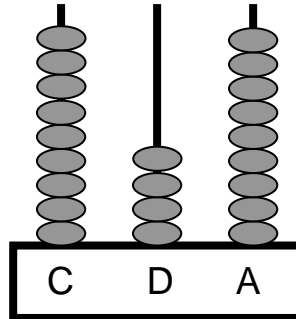
5. Complete this sum:

$$\begin{array}{r} \text{T} \quad \text{U} \\ 7 \quad 8 \\ - 5 \quad 4 \\ \hline \\ \hline \end{array}$$

6. Multiply $8 \times 2 =$ _____

Obair Bhaile Mata 3

1. Cad é an uimhir atá léirithe ar an abacas seo thíos?



2. Suimigh $63 + 32 =$ _____

3. Déan an tsuim seo thíos.

$$\begin{array}{r} \text{D} \quad \text{A} \\ 6 \quad 2 \\ + 1 \quad 9 \\ \hline \\ \hline \end{array}$$

4. Dealraith $53 - 23 =$ _____

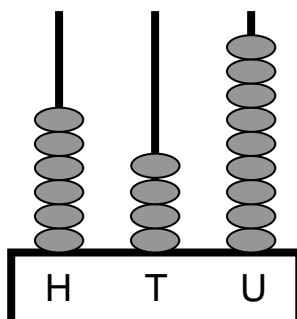
5. Déan an tsuim seo thíos.

$$\begin{array}{r} \text{D} \quad \text{A} \\ 6 \quad 7 \\ - 4 \quad 2 \\ \hline \\ \hline \end{array}$$

6. Iolraigh $4 \times 2 =$ _____

Maths Homework 3

1. What number is displayed on this abacus?



2. Add $63 + 32 =$ _____

3. Complete this sum:

$$\begin{array}{r} \text{T} \quad \text{U} \\ 6 \quad 2 \\ + 1 \quad 9 \\ \hline \\ \hline \end{array}$$

4. Subtract $53 - 23 =$ _____

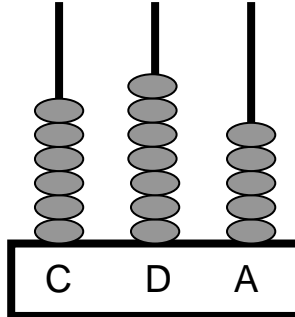
5. Complete this sum:

$$\begin{array}{r} \text{T} \quad \text{U} \\ 6 \quad 7 \\ - 4 \quad 2 \\ \hline \\ \hline \end{array}$$

6. Multiply $4 \times 2 =$ _____

Obair Bhaile Mata 4

1. Cad é an uimhir atá léirithe ar an abacas seo thíos?



2. Suimigh $73 + 15 =$ _____

3. Déan an tsuim seo thíos.

$$\begin{array}{r} \text{D} \quad \text{A} \\ 6 \quad 5 \\ + 2 \quad 4 \\ \hline \\ \hline \end{array}$$

4. Dealraith $88 - 25 =$ _____

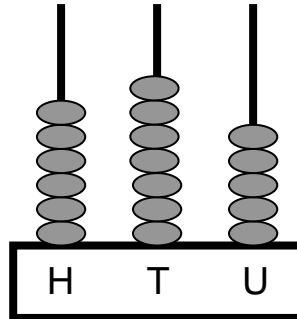
5. Déan an tsuim seo thíos.

$$\begin{array}{r} \text{D} \quad \text{A} \\ 7 \quad 4 \\ - 6 \quad 1 \\ \hline \\ \hline \end{array}$$

6. Iolraigh $7 \times 2 =$ _____

Maths Homework 4

1. What number is displayed on this abacus?



2. Add $73 + 15 =$ _____

3. Complete this sum:

$$\begin{array}{r} \text{T} \quad \text{U} \\ 6 \quad 5 \\ + 2 \quad 4 \\ \hline \\ \hline \end{array}$$

4. Subtract $88 - 25 =$ _____

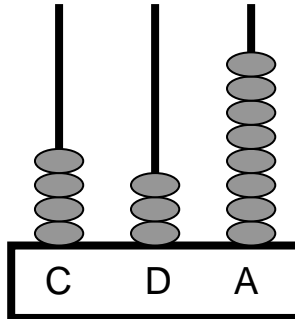
5. Complete this sum:

$$\begin{array}{r} \text{T} \quad \text{U} \\ 7 \quad 4 \\ - 6 \quad 1 \\ \hline \\ \hline \end{array}$$

6. Multiply $7 \times 2 =$ _____

Obair Bhaile Mata 5

1. Cad é an uimhir atá léirithe ar an abacas seo thíos?



2. Suimigh $34 + 62 =$ _____

3. Déan an tsuim seo thíos.

$$\begin{array}{r} \text{D} \quad \text{A} \\ 2 \quad 7 \\ + 5 \quad 8 \\ \hline \\ \hline \end{array}$$

4. Dealraigh $36 - 30 =$ _____

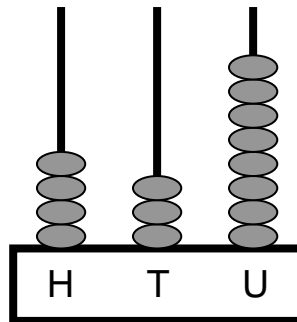
5. Déan an tsuim seo thíos.

$$\begin{array}{r} \text{D} \quad \text{A} \\ 6 \quad 8 \\ - 5 \quad 3 \\ \hline \\ \hline \end{array}$$

6. Iolraigh $5 \times 4 =$ _____

Maths Homework 5

1. What number is displayed on this abacus?



2. Add $34 + 62 =$ _____

3. Complete this sum.

$$\begin{array}{r} \text{D} \quad \text{A} \\ 2 \quad 7 \\ + \quad 5 \quad 8 \\ \hline \\ \hline \end{array}$$

4. Subtract $36 - 30 =$ _____

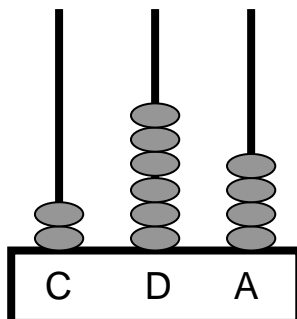
5. Complete this sum

$$\begin{array}{r} \text{D} \quad \text{A} \\ 6 \quad 8 \\ - \quad 5 \quad 3 \\ \hline \\ \hline \end{array}$$

6. Multiply $5 \times 4 =$ _____

Obair Bhaile Mata 6

1. Cad é an uimhir atá léirithe ar an abacas seo thíos?



2. Suimigh $31 + 50 =$ _____

3. Déan an tsuim seo thíos.

$$\begin{array}{r} \text{D} \quad \text{A} \\ 4 \quad 6 \\ + 1 \quad 6 \\ \hline \\ \hline \end{array}$$

4. Dealraigh $75 - 23 =$ _____

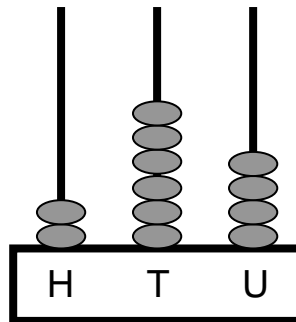
5. Déan an tsuim seo thíos.

$$\begin{array}{r} \text{D} \quad \text{A} \\ 8 \quad 8 \\ - 3 \quad 7 \\ \hline \\ \hline \end{array}$$

6. Iolraigh $5 \times 3 =$ _____

Maths Homework 6

1. What number is displayed on this abacus?



2. Add $31 + 50 =$ _____

3. Complete this sum :

$$\begin{array}{r} \text{D} \quad \text{A} \\ 4 \quad 6 \\ + 1 \quad 6 \\ \hline \\ \hline \end{array}$$

4. Subtract $75 - 23 =$ _____

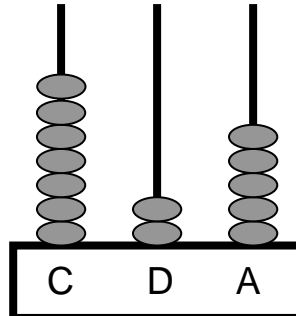
5. Complete this sum :

$$\begin{array}{r} \text{D} \quad \text{A} \\ 8 \quad 8 \\ - 3 \quad 7 \\ \hline \\ \hline \end{array}$$

6. Multiply $5 \times 3 =$ _____

Obair Bhaile Mata 7

1. Cad é an uimhir atá léirithe ar an abacas seo thíos?



2. Suimigh $73 + 11 =$ _____

3. Déan an tsuim seo thíos.

$$\begin{array}{r} \text{D} \quad \text{A} \\ 5 \quad 7 \\ + 3 \quad 3 \\ \hline \\ \hline \end{array}$$

4. Dealraith $74 - 44 =$ _____

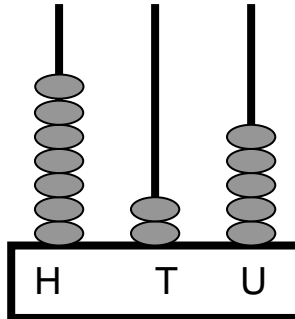
5. Déan an tsuim seo thíos.

$$\begin{array}{r} \text{D} \quad \text{A} \\ 5 \quad 8 \\ - 3 \quad 0 \\ \hline \\ \hline \end{array}$$

6. Iolraigh $5 \times 9 =$ _____

Maths Homework 7

1. What number is displayed on this abacus?



2. Add $73 + 11 =$ _____

3. Complete this sum.

$$\begin{array}{r} \text{T} \quad \text{U} \\ 5 \quad 7 \\ + 3 \quad 3 \\ \hline \\ \hline \end{array}$$

4. Subtract $74 - 44 =$ _____

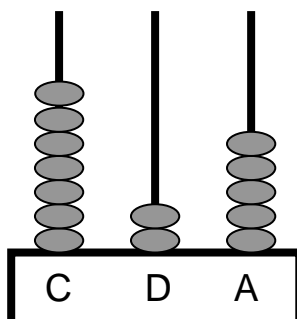
5. Complete this sum

$$\begin{array}{r} \text{T} \quad \text{U} \\ 5 \quad 8 \\ - 3 \quad 0 \\ \hline \\ \hline \end{array}$$

6. Multiply $5 \times 9 =$ _____

Obair Bhaile Mata 8

1. Cad é an uimhir atá léirithe ar an abacas seo thíos?



2. Suimigh $54 + 24 =$ _____

3. Déan an tsuim seo thíos.

$$\begin{array}{r} \text{D} \quad \text{A} \\ 5 \quad 9 \\ + 2 \quad 6 \\ \hline \\ \hline \end{array}$$

4. Dealraith $74 - 52 =$ _____

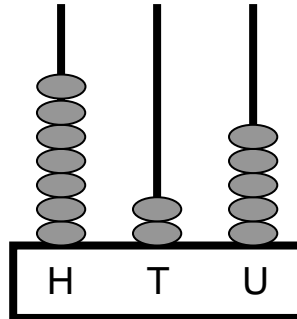
5. Déan an tsuim seo thíos.

$$\begin{array}{r} \text{D} \quad \text{A} \\ 7 \quad 8 \\ - 2 \quad 6 \\ \hline \\ \hline \end{array}$$

6. Iolraigh $5 \times 7 =$ _____

Maths Homework 8

1. What number is displayed on this abacus?



2. Add $54 + 24 =$ _____

3. Complete this sum.

$$\begin{array}{r} \text{T} \quad \text{U} \\ 5 \quad 9 \\ + 2 \quad 6 \\ \hline \\ \hline \end{array}$$

4. Subtract $74 - 52 =$ _____

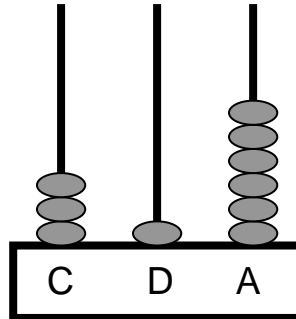
5. Complete this sum

$$\begin{array}{r} \text{T} \quad \text{U} \\ 7 \quad 8 \\ - 2 \quad 6 \\ \hline \\ \hline \end{array}$$

6. Multiply $5 \times 7 =$ _____

Obair Bhaile Mata 9

1. Cad é an uimhir atá léirithe ar an abacas seo thíos?



2. Suimigh $53 + 26 =$ _____

3. Déan an tsuim seo thíos.

$$\begin{array}{r} \text{D} \quad \text{A} \\ 5 \quad 8 \\ + 2 \quad 4 \\ \hline \\ \hline \end{array}$$

4. Dealraith $63 - 22 =$ _____

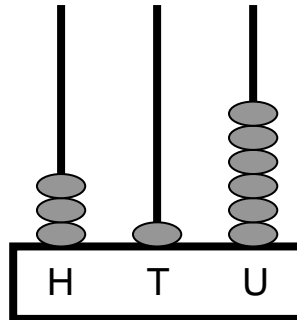
5. Déan an tsuim seo thíos.

$$\begin{array}{r} \text{D} \quad \text{A} \\ 4 \quad 9 \\ - 3 \quad 5 \\ \hline \\ \hline \end{array}$$

6. Iolraigh $10 \times 3 =$ _____

Maths Homework 9

1. What number is displayed on this abacus?



2. Add $53 + 26 =$ _____

3. Complete this sum :

$$\begin{array}{r} \text{T} \quad \text{U} \\ 5 \quad 8 \\ + 2 \quad 4 \\ \hline \\ \hline \end{array}$$

4. Subtract $63 - 22 =$ _____

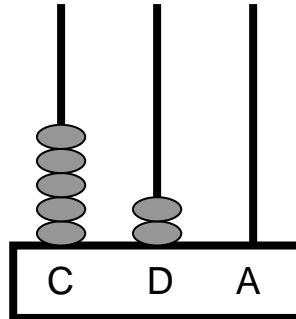
5. Complete this sum :

$$\begin{array}{r} \text{T} \quad \text{U} \\ 4 \quad 9 \\ - 3 \quad 5 \\ \hline \\ \hline \end{array}$$

6. Multiply $10 \times 3 =$ _____

Obair Bhaile Mata 10

1. Cad é an uimhir atá léirithe ar an abacas seo thíos?



2. Suimigh $36 + 23 =$ _____

3. Déan an tsuim seo thíos.

$$\begin{array}{r} \text{D} \quad \text{A} \\ 7 \quad 3 \\ + \quad 9 \\ \hline \\ \hline \end{array}$$

4. Dealraith $52 - 11 =$ _____

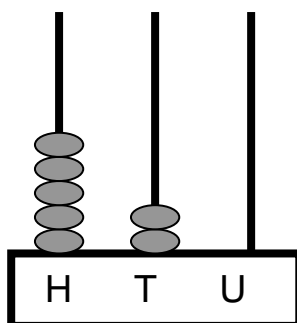
5. Déan an tsuim seo thíos.

$$\begin{array}{r} \text{D} \quad \text{A} \\ 6 \quad 3 \\ - \quad 4 \quad 2 \\ \hline \\ \hline \end{array}$$

6. Iolraigh $10 \times 7 =$ _____

Maths Homework 10

1. What number is displayed on this abacus?



2. Add $36 + 23 =$ _____

3. Complete this sum :

$$\begin{array}{r} \text{T} \quad \text{U} \\ 7 \quad 3 \\ + \quad 9 \\ \hline \\ \hline \end{array}$$

4. Subtract $52 - 11 =$ _____

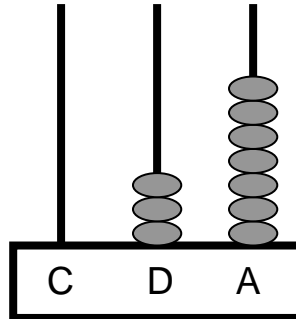
5. Complete this sum :

$$\begin{array}{r} \text{T} \quad \text{U} \\ 6 \quad 3 \\ - \quad 4 \quad 2 \\ \hline \\ \hline \end{array}$$

6. Multiply $10 \times 7 =$ _____

Obair Bhaile Mata 11

1. Cad é an uimhir atá léirithe ar an abacas seo thíos?



2. Suimigh $56 + 12 =$ _____

3. Déan an tsuim seo thíos.

$$\begin{array}{r} \text{D} \quad \text{A} \\ 4 \quad 7 \\ + 4 \quad 5 \\ \hline \\ \hline \end{array}$$

4. Dealraith $85 - 31 =$ _____

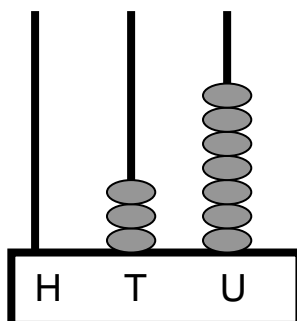
5. Déan an tsuim seo thíos.

$$\begin{array}{r} \text{D} \quad \text{A} \\ 7 \quad 8 \\ - 3 \quad 6 \\ \hline \\ \hline \end{array}$$

6. Iolraigh $10 \times 5 =$ _____

Maths Homework 11

1. What number is displayed on this abacus?



2. Add $56 + 12 =$ _____

3. Complete this sum :

$$\begin{array}{r} \text{T} \quad \text{U} \\ 4 \quad 7 \\ + 4 \quad 5 \\ \hline \\ \hline \end{array}$$

4. Subtract $85 - 31 =$ _____

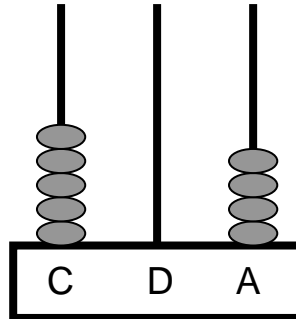
5. Complete this sum :

$$\begin{array}{r} \text{T} \quad \text{U} \\ 7 \quad 8 \\ - 3 \quad 6 \\ \hline \\ \hline \end{array}$$

6. Multiply $10 \times 5 =$ _____

Obair Bhaile Mata 12

1. Cad é an uimhir atá léirithe ar an abacas seo thíos?



2. Suimigh $47 + 30 =$ _____

3. Déan an tsuim seo thíos.

$$\begin{array}{r} \text{D} \quad \text{A} \\ 7 \quad 2 \\ + 1 \quad 9 \\ \hline \\ \hline \end{array}$$

4. Dealraith $57 - 46 =$ _____

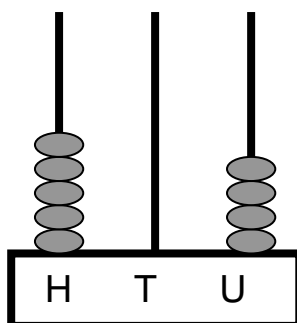
5. Déan an tsuim seo thíos.

$$\begin{array}{r} \text{D} \quad \text{A} \\ 8 \quad 5 \\ - 4 \quad 9 \\ \hline \\ \hline \end{array}$$

6. Iolraigh $10 \times 9 =$ _____

Maths Homework 12

1. What number is displayed on this abacus?



2. Add $47 + 30 =$ _____

3. Complete this sum :

$$\begin{array}{r} \text{T} \quad \text{U} \\ 7 \quad 2 \\ + 1 \quad 9 \\ \hline \\ \hline \end{array}$$

4. Subtract $57 - 46 =$ _____

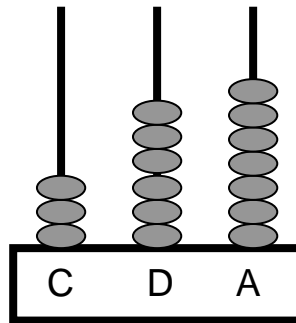
5. Complete this sum :

$$\begin{array}{r} \text{T} \quad \text{U} \\ 8 \quad 5 \\ - 4 \quad 9 \\ \hline \\ \hline \end{array}$$

6. Iolraigh $10 \times 9 =$ _____

Obair Bhaile Mata 13

1. Cad é an uimhir atá léirithe ar an abacas seo thíos?



2. Suimigh $45 + 32 =$ _____

3. Déan an tsuim seo thíos.

$$\begin{array}{r} \text{D} \quad \text{A} \\ 6 \quad 8 \\ + 2 \quad 2 \\ \hline \\ \hline \end{array}$$

4. Dealraith $48 - 22 =$ _____

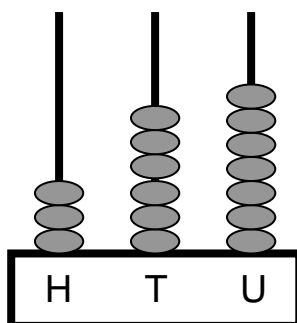
5. Déan an tsuim seo thíos.

$$\begin{array}{r} \text{D} \quad \text{A} \\ 8 \quad 6 \\ - 5 \quad 3 \\ \hline \\ \hline \end{array}$$

6. Iolraigh $6 \times 2 =$ _____

Maths Homework 13

1. What number is displayed on this abacus?



2. Add $45 + 32 =$ _____

3. Complete this sum :

$$\begin{array}{r} \text{T} \quad \text{U} \\ 6 \quad 8 \\ + 2 \quad 2 \\ \hline \\ \hline \end{array}$$

4. Subtract $48 - 22 =$ _____

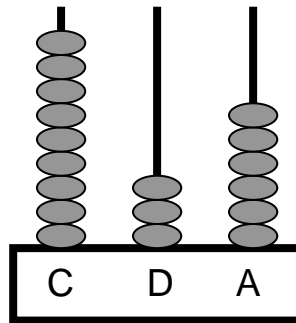
5. Complete this sum :

$$\begin{array}{r} \text{T} \quad \text{U} \\ 8 \quad 6 \\ - 5 \quad 3 \\ \hline \\ \hline \end{array}$$

6. Multiply $6 \times 2 =$ _____

Obair Bhaile Mata 14

1. Cad é an uimhir atá léirithe ar an abacas seo thíos?



2. Suimigh $72 + 15 =$ _____

3. Déan an tsuim seo thíos.

$$\begin{array}{r} \text{D} \quad \text{A} \\ 5 \quad 4 \\ + 2 \quad 9 \\ \hline \\ \hline \end{array}$$

4. Dealraith $82 - 21 =$ _____

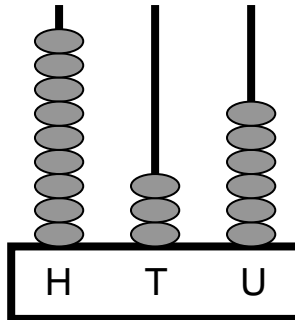
5. Déan an tsuim seo thíos.

$$\begin{array}{r} \text{D} \quad \text{A} \\ 6 \quad 7 \\ - 3 \quad 2 \\ \hline \\ \hline \end{array}$$

6. Iolraigh $9 \times 2 =$ _____

Maths Homework 14

1. What number is displayed on this abacus?



2. Add $72 + 15 =$ _____

3. Complete this sum :

$$\begin{array}{r} \text{T} \quad \text{U} \\ 5 \quad 4 \\ + 2 \quad 9 \\ \hline \\ \hline \end{array}$$

4. Subtract $82 - 21 =$ _____

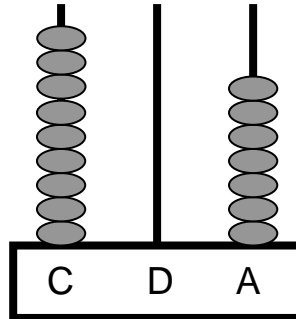
5. Complete this sum :

$$\begin{array}{r} \text{T} \quad \text{U} \\ 6 \quad 7 \\ - 3 \quad 2 \\ \hline \\ \hline \end{array}$$

6. Multiply $9 \times 2 =$ _____

Obair Bhaile Mata 15

1. Cad é an uimhir atá léirithe ar an abacas seo thíos?



2. Suimigh $39 + 20 =$ _____

3. Déan an tsuim seo thíos.

$$\begin{array}{r} \text{D} \quad \text{A} \\ 5 \quad 6 \\ + \quad 3 \quad 4 \\ \hline \\ \hline \end{array}$$

4. Dealraith $84 - 61 =$ _____

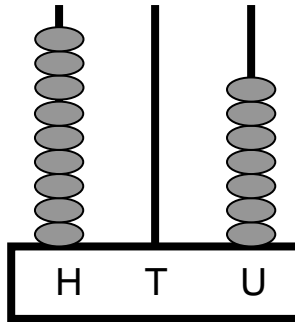
5. Déan an tsuim seo thíos.

$$\begin{array}{r} \text{D} \quad \text{A} \\ 8 \quad 8 \\ - \quad 3 \quad 5 \\ \hline \\ \hline \end{array}$$

6. Iolraigh $2 \times 2 =$ _____

Maths Homework 15

1. What number is displayed on this abacus?



2. Add $39 + 20 =$ _____

3. Complete this sum :

$$\begin{array}{r} \text{T} \quad \text{U} \\ 5 \quad 6 \\ + 3 \quad 4 \\ \hline \\ \hline \end{array}$$

4. Subtract $84 - 61 =$ _____

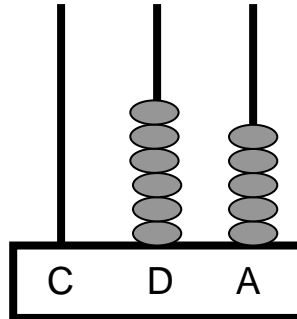
5. Complete this sum :

$$\begin{array}{r} \text{T} \quad \text{U} \\ 8 \quad 8 \\ - 3 \quad 5 \\ \hline \\ \hline \end{array}$$

6. Multiply $2 \times 2 =$ _____

Obair Bhaile Mata 16

1. Cad é an uimhir atá léirithe ar an abacas seo thíos?



2. Suimigh $68 + 11 =$ _____

3. Déan an tsuim seo thíos.

$$\begin{array}{r} \text{D} \quad \text{A} \\ 5 \quad 9 \\ + 2 \quad 9 \\ \hline \\ \hline \end{array}$$

4. Dealraith $77 - 44 =$ _____

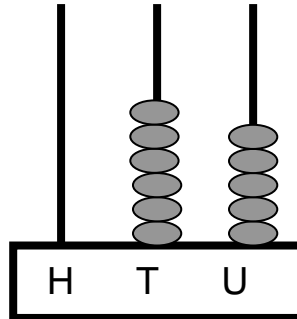
5. Déan an tsuim seo thíos.

$$\begin{array}{r} \text{D} \quad \text{A} \\ 9 \quad 8 \\ - 3 \quad 6 \\ \hline \\ \hline \end{array}$$

6. Iolraigh $8 \times 2 =$ _____

Maths Homework 16

1. What number is displayed on this abacus?



2. Add $68 + 11 =$ _____

3. Complete this sum :

$$\begin{array}{r} \text{T} \quad \text{U} \\ 5 \quad 9 \\ + 2 \quad 9 \\ \hline \\ \hline \end{array}$$

4. Subtract $77 - 44 =$ _____

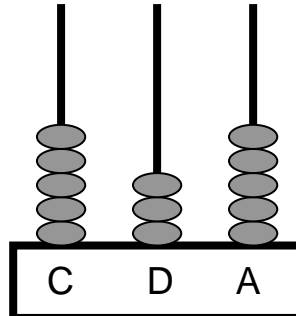
5. Complete this sum :

$$\begin{array}{r} \text{T} \quad \text{U} \\ 9 \quad 8 \\ - 3 \quad 6 \\ \hline \\ \hline \end{array}$$

6. Multiply $8 \times 2 =$ _____

Obair Bhaile Mata 17

1. Cad é an uimhir atá léirithe ar an abacas seo thíos?



2. Suimigh $53 + 44 =$ _____

3. Déan an tsuim seo thíos.

$$\begin{array}{r} \text{D} \quad \text{A} \\ 5 \quad 3 \\ + 3 \quad 8 \\ \hline \\ \hline \end{array}$$

4. Dealraith $48 - 22 =$ _____

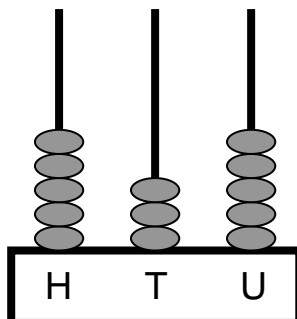
5. Déan an tsuim seo thíos.

$$\begin{array}{r} \text{D} \quad \text{A} \\ 6 \quad 8 \\ - 3 \quad 6 \\ \hline \\ \hline \end{array}$$

6. Iolraigh $5 \times 5 =$ _____

Maths Homework 17

1. What number is displayed on this abacus?



2. Add $53 + 44 =$ _____

3. Complete this sum :

$$\begin{array}{r} \text{T} \quad \text{U} \\ 5 \quad 3 \\ + 3 \quad 8 \\ \hline \\ \hline \end{array}$$

4. Subtract $48 - 22 =$ _____

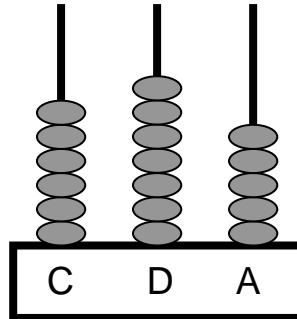
5. Complete this sum :

$$\begin{array}{r} \text{T} \quad \text{U} \\ 6 \quad 8 \\ - 3 \quad 6 \\ \hline \\ \hline \end{array}$$

6. Multiply $5 \times 5 =$ _____

Obair Bhaile Mata 18

1. Cad é an uimhir atá léirithe ar an abacas seo thíos?



2. Suimigh $36 + 41 =$ _____

3. Déan an tsuim seo thíos.

$$\begin{array}{r} \text{D} \quad \text{A} \\ 3 \quad 7 \\ + 2 \quad 9 \\ \hline \\ \hline \end{array}$$

4. Dealraith $55 - 34 =$ _____

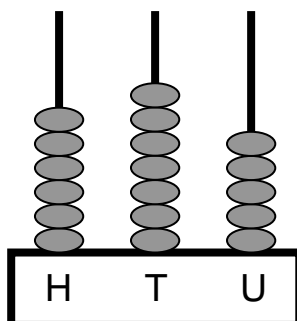
5. Déan an tsuim seo thíos.

$$\begin{array}{r} \text{D} \quad \text{A} \\ 5 \quad 8 \\ - 3 \quad 3 \\ \hline \\ \hline \end{array}$$

6. Iolraigh $6 \times 5 =$ _____

Maths Homework 18

1. What number is displayed on this abacus?



2. Add $36 + 41 =$ _____

3. Complete this sum :

$$\begin{array}{r} \text{T} \quad \text{U} \\ 3 \quad 7 \\ + 2 \quad 9 \\ \hline \\ \hline \end{array}$$

4. Subtract $55 - 34 =$ _____

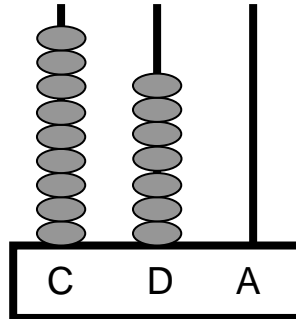
5. Complete this sum :

$$\begin{array}{r} \text{T} \quad \text{U} \\ 5 \quad 8 \\ - 3 \quad 3 \\ \hline \\ \hline \end{array}$$

6. Multiply $6 \times 5 =$ _____

Obair Bhaile Mata 19

1. Cad é an uimhir atá léirithe ar an abacas seo thíos?



2. Suimigh $47 + 30 =$ _____

3. Déan an tsuim seo thíos.

$$\begin{array}{r} \text{D} \quad \text{A} \\ 4 \quad 4 \\ + 2 \quad 8 \\ \hline \\ \hline \end{array}$$

4. Dealraith $88 - 47 =$ _____

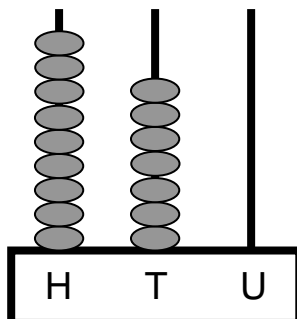
5. Déan an tsuim seo thíos.

$$\begin{array}{r} \text{D} \quad \text{A} \\ 9 \quad 5 \\ - 2 \quad 5 \\ \hline \\ \hline \end{array}$$

6. Iolraigh $9 \times 5 =$ _____

Maths Homework 19

1. What number is displayed on this abacus?



2. Add $47 + 30 =$ _____

3. Complete this sum :

$$\begin{array}{r} \text{T} \quad \text{U} \\ 4 \quad 4 \\ + 2 \quad 8 \\ \hline \\ \hline \end{array}$$

4. Subtract $88 - 47 =$ _____

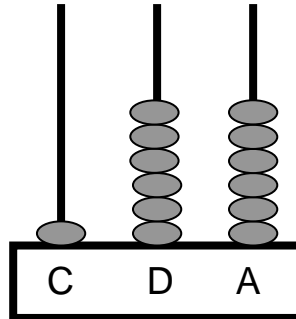
5. Complete this sum :

$$\begin{array}{r} \text{T} \quad \text{U} \\ 9 \quad 5 \\ - 2 \quad 5 \\ \hline \\ \hline \end{array}$$

6. Multiply $9 \times 5 =$ _____

Obair Bhaile Mata 20

1. Cad é an uimhir atá léirithe ar an abacas seo thíos?



2. Suimigh $67 + 21 =$ _____

3. Déan an tsuim seo thíos.

$$\begin{array}{r} \text{D} \quad \text{A} \\ 4 \quad 9 \\ + 2 \quad 9 \\ \hline \\ \hline \end{array}$$

4. Dealraigh $75 - 43 =$ _____

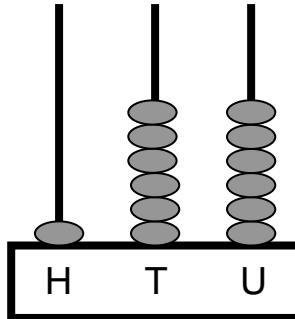
5. Déan an tsuim seo thíos.

$$\begin{array}{r} \text{D} \quad \text{A} \\ 9 \quad 9 \\ - 1 \quad 1 \\ \hline \\ \hline \end{array}$$

6. Iolraigh $7 \times 5 =$ _____

Maths Homework 20

1. What number is displayed on this abacus?



2. Add $67 + 21 =$ _____

3. Complete this sum :

$$\begin{array}{r} \text{T} \quad \text{U} \\ 4 \quad 9 \\ + 2 \quad 9 \\ \hline \\ \hline \end{array}$$

4. Subtract $75 - 43 =$ _____

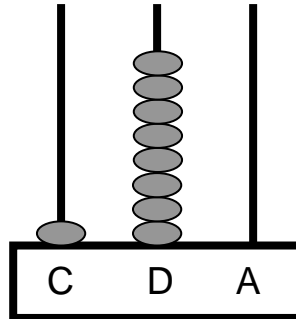
5. Complete this sum :

$$\begin{array}{r} \text{T} \quad \text{U} \\ 9 \quad 9 \\ - 1 \quad 1 \\ \hline \\ \hline \end{array}$$

6. Multiply $7 \times 5 =$ _____

Obair Bhaile Mata 21

1. Cad é an uimhir atá léirithe ar an abacas seo thíos?



2. Suimigh $67 + 32 =$ _____

3. Déan an tsuim seo thíos.

$$\begin{array}{r} \text{D} \quad \text{A} \\ 6 \quad 8 \\ + 1 \quad 4 \\ \hline \\ \hline \end{array}$$

4. Dealraith $75 - 52 =$ _____

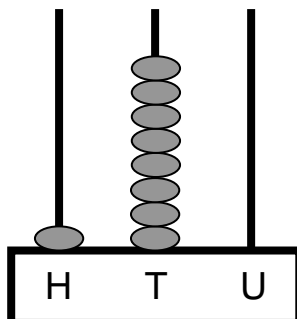
5. Déan an tsuim seo thíos.

$$\begin{array}{r} \text{D} \quad \text{A} \\ 8 \quad 9 \\ - 6 \quad 8 \\ \hline \\ \hline \end{array}$$

6. Iolraigh $9 \times 2 =$ _____

Maths Homework 21

1. What number is displayed on this abacus?



2. Add $67 + 32 =$ _____

3. Complete this sum :

$$\begin{array}{r} \text{T} \quad \text{U} \\ 6 \quad 8 \\ + 1 \quad 4 \\ \hline \\ \hline \end{array}$$

4. Subtract $75 - 52 =$ _____

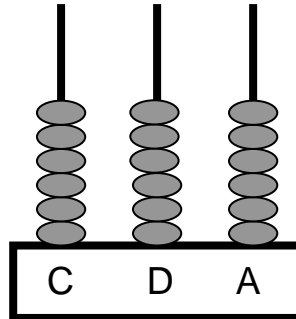
5. Complete this sum :

$$\begin{array}{r} \text{T} \quad \text{U} \\ 8 \quad 9 \\ - 6 \quad 8 \\ \hline \\ \hline \end{array}$$

6. Multiply $9 \times 2 =$ _____

Obair Bhaile Mata 22

1. Cad é an uimhir atá léirithe ar an abacas seo thíos?



2. Suimigh $73 + 15 =$ _____

3. Déan an tsuim seo thíos.

$$\begin{array}{r} \text{D} \quad \text{A} \\ 7 \quad 4 \\ + 1 \quad 9 \\ \hline \\ \hline \end{array}$$

4. Dealraith $94 - 21 =$ _____

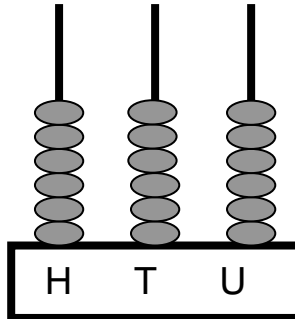
5. Déan an tsuim seo thíos.

$$\begin{array}{r} \text{D} \quad \text{A} \\ 8 \quad 9 \\ - 4 \quad 3 \\ \hline \\ \hline \end{array}$$

6. Iolraigh $8 \times 5 =$ _____

Maths Homework 22

1. What number is displayed on this abacus?



2. Add $73 + 15 =$ _____

3. Complete this sum :

$$\begin{array}{r} \text{T} \quad \text{U} \\ 7 \quad 4 \\ + 1 \quad 9 \\ \hline \\ \hline \end{array}$$

4. Subtract $94 - 21 =$ _____

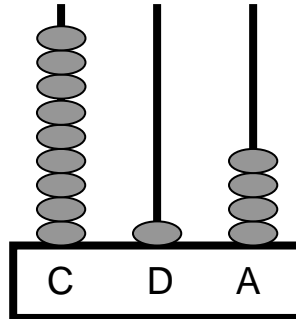
5. Complete this sum :

$$\begin{array}{r} \text{T} \quad \text{U} \\ 8 \quad 9 \\ - 4 \quad 3 \\ \hline \\ \hline \end{array}$$

6. Multiply $8 \times 5 =$ _____

Obair Bhaile Mata 23

1. Cad é an uimhir atá léirithe ar an abacas seo thíos?



2. Suimigh $45 + 44 =$ _____

3. Déan an tsuim seo thíos.

$$\begin{array}{r} \text{D} \quad \text{A} \\ 5 \quad 9 \\ + 1 \quad 9 \\ \hline \\ \hline \end{array}$$

4. Dealraigh $85 - 43 =$ _____

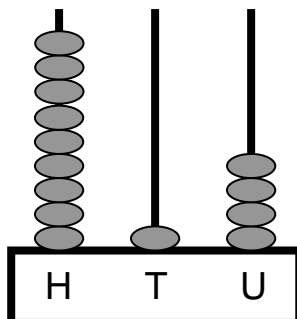
5. Déan an tsuim seo thíos.

$$\begin{array}{r} \text{D} \quad \text{A} \\ 6 \quad 7 \\ - 5 \quad 7 \\ \hline \\ \hline \end{array}$$

6. Iolraigh $4 \times 10 =$ _____

Maths Homework 23

1. What number is displayed on this abacus?



2. Add $45 + 44 =$ _____

3. Complete this sum :

$$\begin{array}{r} \text{T} \quad \text{U} \\ 5 \quad 9 \\ + 1 \quad 9 \\ \hline \\ \hline \end{array}$$

4. Subtract $85 - 43 =$ _____

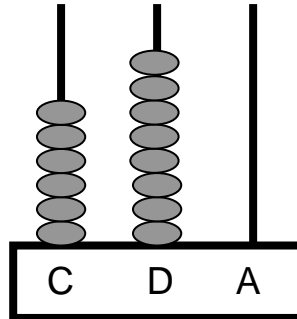
5. Complete this sum :

$$\begin{array}{r} \text{T} \quad \text{U} \\ 6 \quad 7 \\ - 5 \quad 7 \\ \hline \\ \hline \end{array}$$

6. Multiply $4 \times 10 =$ _____

Obair Bhaile Mata 24

1. Cad é an uimhir atá léirithe ar an abacas seo thíos?



2. Suimigh $63 + 25 =$ _____

3. Déan an tsuim seo thíos.

$$\begin{array}{r} \text{D} \quad \text{A} \\ 5 \quad 9 \\ + 2 \quad 0 \\ \hline \\ \hline \end{array}$$

4. Dealraith $88 - 26 =$ _____

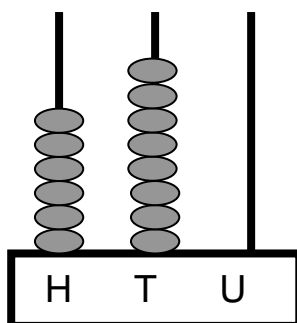
5. Déan an tsuim seo thíos.

$$\begin{array}{r} \text{D} \quad \text{A} \\ 7 \quad 9 \\ - 3 \quad 1 \\ \hline \\ \hline \end{array}$$

6. Iolraigh $7 \times 10 =$ _____

Maths Homework 24

1. What number is displayed on this abacus?



2. Add $63 + 25 =$ _____

3. Complete this sum.

$$\begin{array}{r} \text{T} \quad \text{U} \\ 5 \quad 9 \\ + 2 \quad 0 \\ \hline \\ \hline \end{array}$$

4. Subtract $88 - 26 =$ _____

5. Complete this sum.

$$\begin{array}{r} \text{T} \quad \text{U} \\ 7 \quad 9 \\ - 3 \quad 1 \\ \hline \\ \hline \end{array}$$

6. Multiply $7 \times 10 =$ _____

