


Obair Bhaile Mata

Leabhar 7



Ainm _____ Rang _____

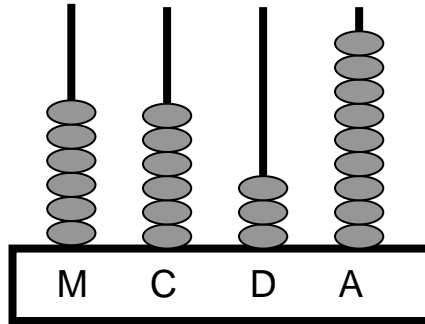


Cearnóg Iolraithe Multiplication Square

X	1	2	3	4	5	6	7	8	9	10
1	1	2	3	4	5	6	7	8	9	10
2	2	4	6	8	10	12	14	16	18	20
3	3	6	9	12	15	18	21	24	27	30
4	4	8	12	16	20	24	28	32	36	40
5	5	10	15	20	25	30	35	40	45	50
6	6	12	18	24	30	36	42	48	54	60
7	7	14	21	28	35	42	49	56	63	70
8	8	16	24	32	40	48	56	64	72	80
9	9	18	27	36	45	54	63	72	81	90
10	10	20	30	40	50	60	70	80	90	100

Obair Bhaile Mata 1

1. Cad é an uimhir atá léirithe ar an abacas seo thíos?



2. Comhlánaigh an seicheamh seo?

1601 1602 1603 1604 1605 1606 _____

3. Cad é an uimhir atá 1 **níos mó** ná 7563? _____

4. Cad é suim iomlán na n-uimhreacha seo thíos?

1000 agus 700 agus 50 agus 8 = _____

5. Scríobh an uimhir 1874 i bhfocail.

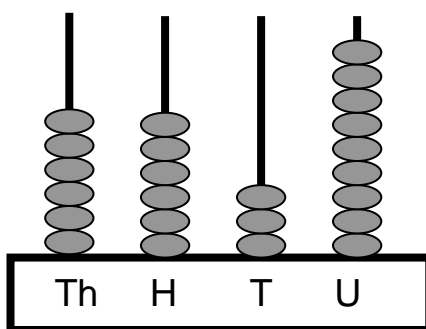
6. Scríobh an uimhir *naoi míle, trí chéad seasca a hocht* i bhfigiúirí.

7. Scríobh na huimhreacha seo in ord ardaitheach, ag tosú leis an cheann is lú.

7000	6000	5000	8000	9000
------	------	------	------	------

Maths Homework 1

1. What number is displayed on this abacus?



2. Complete this sequence.

1601 1602 1603 1604 1605 1606 _____

3. What number is 1 **more** than 7563? _____

4. What is the total of the following numbers?

1000 and 700 and 50 and 8 = _____

5. Write the number 1874 in words.

6. Write the *number nine thousand, three hundred and sixty eight* in figures.

7. Write these numbers in ascending order, beginning with the smallest number.

7000	6000	5000	8000	9000
------	------	------	------	------

Obair Bhaile Mata 2

1. Suimigh $37 + 42 =$ _____

2. Déan an tsuim seo thíos.

$$\begin{array}{r} \text{C} \quad \text{D} \quad \text{A} \\ 3 \quad 4 \quad 7 \\ + 2 \quad 3 \quad 5 \\ \hline \\ \hline \end{array}$$

3. Dealraith $75 - 31 =$ _____

4. Déan an tsuim seo thíos.

$$\begin{array}{r} \text{D} \quad \text{A} \\ 5 \quad 2 \\ - 2 \quad 7 \\ \hline \\ \hline \end{array}$$

5. Iolraigh $2 \times 3 =$ _____

6. Iolraigh $5 \times 8 =$ _____

7. Iolraigh $10 \times 7 =$ _____

8. Iolraigh $3 \times 9 =$ _____

9. Iolraigh $4 \times 5 =$ _____

10. Iolraigh $6 \times 0 =$ _____

Maths Homework 2

1. Add $37 + 42 =$ _____

2. Complete this sum.

	H	T	U
	3	4	7
+	2	3	5
<hr/>			
<hr/>			

3. Subtract $75 - 31 =$ _____

4. Complete this sum.

	T	U
	5	2
-	2	7
<hr/>		
<hr/>		

5. Multiply $2 \times 3 =$ _____

6. Multiply $5 \times 8 =$ _____

7. Multiply $10 \times 7 =$ _____

8. Multiply $3 \times 9 =$ _____

9. Multiply $4 \times 5 =$ _____

10. Multiply $6 \times 0 =$ _____

Obair Bhaile Mata 3

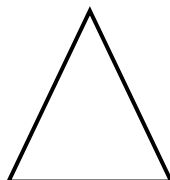
1. Cá mhéad airgid atá léirithe thíos?




2. Cad é an t-am atá léirithe ar an chlog seo thíos?



3. Cad é an t-ainm atá ar an chruth seo thíos?



4. Cé acu is troime, eilifint nó luchóg?



5. Cé acu an ceann corr thíos?

cat

madadh

carr

luchóg

Maths Homework 3

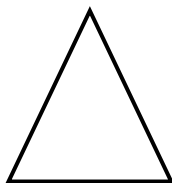
1. How much money is displayed below?




2. What time does the clock below show?



3. What is the name of the shape below?



4. Which is heavier, an elephant or a mouse?



5. Which is the odd one out?

cat


dog

car

mouse

Obair Bhaile Mata 4

Comhlánaigh an crosfhocal uimhreacha seo:



TRASNA


a naoi míle, seacht gcéad dó dhéag
d dhá mhíle, ocht gcéad tríocha a trí
e naoi míle, sé chéad nócha a trí
h ceithre mhíle, trí chéad fiche a cúig
i naoi míle, cúig chéad ochtó a cúig
k naoi míle, sé chéad is a cúig
m naoi míle, seacht gcéad caoga a naoi
p ocht míle, sé chéad daichead a seacht
q naoi míle, ceithre chéad nócha a dó
t naoi míle, ocht gcéad tríocha a sé
u naoi míle, aon chéad fiche a ceathair
v naoi míle, dhá chéad ochtó a seacht
w naoi míle, trí chéad seachtó a dó

ANUAS

a naoi míle is nócha a haon
b míle, ocht gcéad nócha a ceathair
c naoi míle, trí chéad seachtó a sé
d dhá mhíle, sé chéad seachtó a hocht
f trí mhíle, trí chéad daichead a cúig
g naoi míle, cúig chéad nócha a trí
j cúig mhíle, naoi gcéad daichead a naoi
l sé mhíle, cúig chéad daichead a trí
n seacht míle, seacht gcéad ochtó a dó
o naoi míle, cúig chéad seasca a naoi
r dhá mhíle, naoi gcéad seasca a seacht
s míle, dhá chéad is a naoi

Maths Homework 4

Complete this number crossword:



ACROSS

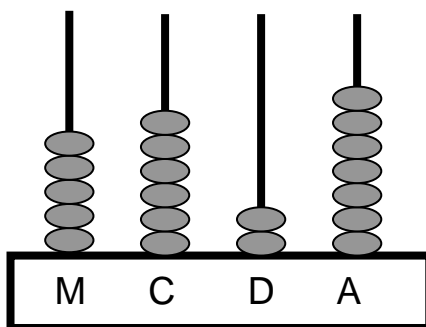
- a** nine thousand, seven hundred and twelve
- d** two thousand, eight hundred and thirty three
- e** nine thousand, six hundred and ninety three
- h** four thousand, three hundred and twenty five
- i** nine thousand, five hundred and eighty five
- k** nine thousand, six hundred and five
- m** nine thousand, seven hundred and fifty nine
- p** eight thousand, six hundred and forty seven
- q** nine thousand, four hundred and ninety two
- t** nine thousand, eight hundred and thirty six
- u** nine thousand, one hundred and twenty four
- v** nine thousand, two hundred and eighty seven
- w** nine thousand, three hundred and seventy two

DOWN

- a** nine thousand and ninety one
- b** one thousand, eight hundred and ninety four
- c** nine thousand, three hundred and seventy six
- d** two thousand, six hundred and seventy eight
- f** three thousand, three hundred and forty five
- g** nine thousand, five hundred and ninety three
- j** five thousand, nine hundred and forty nine
- l** six thousand, five hundred and forty three
- n** seven thousand, seven hundred and eighty two
- o** nine thousand, five hundred and sixty nine
- r** two thousand, nine hundred and sixty seven
- s** one thousand, two hundred and nine

Obair Bhaile Mata 5

1. Cad é an uimhir atá léirithe ar an abacas seo thíos?



2. Comhlánaigh an seicheamh seo?

1206 1207 1208 1209 1210 1211 _____

3. Cad é an uimhir atá 1 **níos lú** ná 8539? _____

4. Cad é suim iomlán na n-uimhreacha seo thíos?

4000 agus 300 agus 90 agus 2 = _____

5. Scríobh an uimhir 8537 i bhfocail.

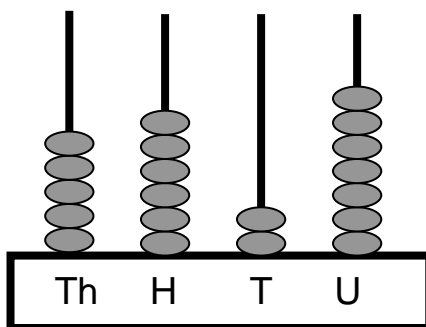
6. Scríobh an uimhir *seacht míle, dhá chéad nócha a seacht* i bhfigiúirí.

7. Scríobh na huimhreacha seo in ord ardaitheach, ag tosú leis an cheann is lú.

7600	8200	3900	9700	5300
------	------	------	------	------

Maths Homework 5

1. What number is displayed on this abacus?



2. Complete this sequence.

1206 1207 1208 1209 1210 1211 _____

3. What number is 1 less than 8539? _____

4. What is the total of the following numbers?

4000 and 300 and 90 and 2 = _____

5. Write the number 8537 in words

6. Write the number *seven thousand, two hundred and ninety seven* in figures.

7. Write these numbers in ascending order, beginning with the smallest number.

7600	8200	3900	9700	5300
------	------	------	------	------

Obair Bhaile Mata 6

1. Suimigh $45 + 33 =$ _____

2. Déan an tsuim seo thíos.

	C	D	A
	4	8	8
+	3	0	7
<hr/>			
<hr/>			

3. Dealraith $85 - 42 =$ _____

4. Déan an tsuim seo thíos.

	D	A
	8	1
-	4	5
<hr/>		
<hr/>		

5. Iolraigh $2 \times 9 =$ _____

6. Iolraigh $5 \times 5 =$ _____

7. Iolraigh $10 \times 3 =$ _____

8. Iolraigh $3 \times 3 =$ _____

9. Iolraigh $4 \times 7 =$ _____

10. Iolraigh $6 \times 8 =$ _____

Maths Homework 6

1. Add $45 + 33 =$ _____

2. Complete this sum.

	H	T	U
	4	8	8
+	3	0	7
<hr/>			
<hr/>			

3. Subtract $85 - 42 =$ _____

4. Complete this sum.

	T	U
	8	1
-	4	5
<hr/>		
<hr/>		

5. Multiply $2 \times 9 =$ _____

6. Multiply $5 \times 5 =$ _____

7. Multiply $10 \times 3 =$ _____

8. Multiply $3 \times 3 =$ _____

9. Multiply $4 \times 7 =$ _____


10. Multiply $6 \times 8 =$ _____

Obair Bhaile Mata 7

1. Cá mhéad airgid atá léirithe thíos?




2. Cad é an t-am atá léirithe ar an chlog seo thíos?



3. Cad é an t-ainm atá ar an chruth seo thíos?



4. Cé acu is faide, carr nó bus?



5. Cé acu an ceann corr thíos?

bus

long

carr


leoraí

Maths Homework 7

1. How much money is shown below?




2. What time does the clock below show?



3. What is the name of the shape below?



4. Which is longer, a car or a bus?



5. Which is the odd one out?

bus


ship

car

lorry

Obair Bhaile Mata 8

Comhlánaigh an crosfhocal uimhreacha seo:



TRASNA


a naoi míle, trí chéad cúig déag
d dhá mhíle, seacht gcéad fiche a trí
e naoi míle, aon chéad nócha a sé
h cúig mhíle, trí chéad ochtó a cúig
i naoi míle, dhá chéad ochtó a naoi
k ocht míle, sé chéad is a cúig déag
m seacht míle, ocht gcéad seasca a sé
p míle, trí chéad daichead a seacht
q trí mhíle, cúig chéad ochtó a haon
t dhá mhíle, ocht gcéad nócha a sé
u naoi míle agus daichead a ceathair
v ceithre mhíle, ocht gcéad is a seacht
w naoi míle, naoi gcéad nócha a naoi

ANUAS

a naoi míle is nócha a dó
b míle, sé chéad nócha a cúig
c ocht míle, trí chéad caoga a haon
d dhá mhíle, trí chéad nócha a hocht
f trí mhíle, trí chéad daichead a cúig
g dhá mhíle, cúig chéad nócha a haon
j naoi míle, seacht gcéad daichead a dó
l sé mhíle, dhá chéad daichead a haon
n seacht míle, seacht gcéad ochtó
o sé mhíle agus seasca a naoi
r míle, naoi gcéad seasca a naoi
s dhá mhíle, ceithre chéad is a naoi

Maths Homework 8

Complete this number crossword:



ACROSS

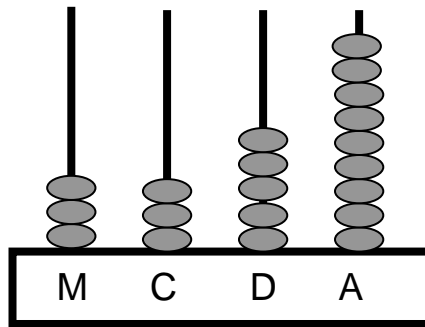
- a** nine thousand, three hundred and fifteen
- d** two thousand, seven hundred and twenty three
- e** nine thousand, one hundred and ninety six
- h** five thousand, three hundred and eighty five
- i** nine thousand, two hundred and eighty nine
- k** eight thousand, six hundred and fifteen
- m** seven thousand, eight hundred and sixty six
- p** one thousand, three hundred and forty seven
- q** three thousand, five hundred and eighty one
- t** two thousand, eight hundred and ninety six
- u** nine thousand and forty four
- v** four thousand, eight hundred and seven
- w** nine thousand, nine hundred and ninety nine

DOWN

- a** nine thousand and ninety two
- b** one thousand, six hundred and ninety five
- c** eight thousand, three hundred and fifty one
- d** two thousand, three hundred and ninety eight
- f** three thousand, three hundred and forty five
- g** two thousand, five hundred and ninety one
- j** nine thousand, seven hundred and forty two
- l** six thousand, two hundred and forty one
- n** seven thousand, seven hundred and eighty
- o** six thousand and sixty nine
- r** one thousand, nine hundred and sixty nine
- s** two thousand, four hundred and nine

Obair Bhaile Mata 9

1. Cad é an uimhir atá léirithe ar an abacas seo thíos?



2. Comhlánaigh an seicheamh seo?

3458 3459 3460 3461 3462 3463 _____

3. Cad é an uimhir atá 10 **níos mó** ná 5843? _____

4. Cad é suim iomlán na n-uimhreacha seo thíos?

8000 agus 400 agus 60 agus 3 = _____

5. Scríobh an uimhir 2638 i bhfocail.

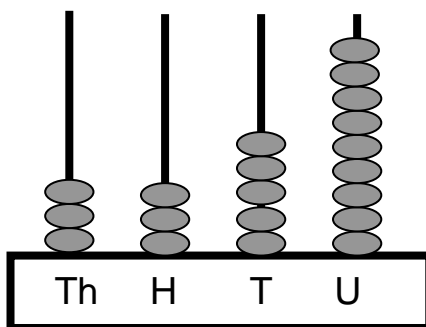
6. Scríobh an uimhir *ocht míle, trí chéad ochtó a cúig* i bhfigiúirí.

7. Scríobh na huimhreacha seo in ord ardaitheach, ag tosú leis an cheann is lú.

9640	2460	5960	4880	9630
------	------	------	------	------

Maths Homework 9

1. What number is displayed on this abacus?



2. Complete this sequence.

3458 3459 3460 3461 3462 3463 _____

3. What number is 10 more than 5843? _____

4. What is the total of the following numbers?

8000 and 400 and 60 and 3 = _____

5. Write the number 2638 in words.

6. Write the number *eight thousand, three hundred and eighty five* in figures.

7. Write these numbers in ascending order, beginning with the smallest number.

9640	2460	5960	4880	9630
------	------	------	------	------

Obair Bhaile Mata 10

1. Suimigh $25 + 32 =$ _____

2. Déan an tsuim seo thíos.

$$\begin{array}{r} \text{C D A} \\ 5 2 7 \\ + 1 4 6 \\ \hline \\ \hline \end{array}$$

3. Dealraith $95 - 73 =$ _____

4. Déan an tsuim seo thíos.

$$\begin{array}{r} \text{D A} \\ 5 6 \\ - 3 8 \\ \hline \\ \hline \end{array}$$

5. Iolraigh $2 \times 6 =$ _____

6. Iolraigh $5 \times 2 =$ _____

7. Iolraigh $10 \times 4 =$ _____

8. Iolraigh $3 \times 8 =$ _____

9. Iolraigh $4 \times 2 =$ _____

10. Iolraigh $6 \times 6 =$ _____

Maths Homework 10

1. Add $25 + 32 =$ _____

2. Complete this sum.

$$\begin{array}{r} \text{H T U} \\ 5 \ 2 \ 7 \\ + 1 \ 4 \ 6 \\ \hline \\ \hline \end{array}$$

3. Subtract $95 - 73 =$ _____

4. Complete this sum.

$$\begin{array}{r} \text{T U} \\ 5 \ 6 \\ - 3 \ 8 \\ \hline \\ \hline \end{array}$$

5. Multiply $2 \times 6 =$ _____

6. Multiply $5 \times 2 =$ _____

7. Multiply $10 \times 4 =$ _____

8. Multiply $3 \times 8 =$ _____

9. Multiply $4 \times 2 =$ _____


10. Multiply $6 \times 6 =$ _____

Obair Bhaile Mata 11


1. Cá mhéad airgid atá léirithe thíos?




2. Cad é an t-am atá léirithe ar an chlog seo thíos?



3. Cad é an t-ainm atá ar an chruth seo thíos?



4. Cé acu is mó toilleadh, buicéad nó cupán?



5. Cé acu an ceann corr thíos?

páirc

scoil

siopa

leabharlann

Maths Homework 11


1. How much money is shown below?




2. What time is shown on the clock below?



3. What is the name of the shape below?



4. Which holds the most, a bucket or a cup?



5. Which is the odd one out?

park


school

shop

library

Obair Bhaile Mata 12

Comhlánaigh an crosfhocal uimhreacha seo:



TRASNA


a naoi míle, trí chéad cúig déag
d dhá mhíle, seacht gcéad fiche a trí
e naoi míle, aon chéad nócha a sé
h cúig mhíle, trí chéad ochtó a cúig
i naoi míle, dhá chéad ochtó a naoi
k ocht míle, sé chéad is a cúig déag
m sé mhíle, ocht gcéad seasca a sé
p míle, trí chéad daichead a sé
q trí mhíle, cúig chéad ochtó a haon
t dhá mhíle, ocht gcéad nócha a sé
u naoi míle agus fiche a ceathair
v ceithre mhíle, ocht gcéad is a seacht
w naoi míle, naoi gcéad nócha a naoi

ANUAS

a naoi míle, aon chéad is nócha
b míle, trí chéad nócha a cúig
c seacht míle, trí chéad nócha a sé
d dhá mhíle, dhá chéad seachtó a hocht
f trí mhíle, trí chéad seasca a cúig
g míle, cúig chéad nócha a seacht
j naoi míle, sé chéad daichead a dó
l sé mhíle, trí chéad daichead
n seacht míle, sé chéad ochtó a trí
o sé mhíle agus seasca a haon
r míle, naoi gcéad nócha a naoi
s ceithre mhíle, dhá chéad is a naoi

Maths Homework 12

Complete this number crossword:



ACROSS

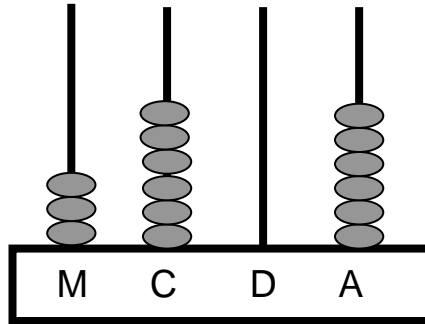
- a** nine thousand, three hundred and fifteen
- d** two thousand, seven hundred and twenty three
- e** nine thousand, one hundred and ninety six
- h** five thousand, three hundred and eighty five
- i** nine thousand, two hundred and eighty nine
- k** eight thousand, six hundred and fifteen
- m** six thousand, eight hundred and sixty six
- p** one thousand, three hundred and forty six
- q** three thousand, five hundred and eighty one
- t** two thousand, eight hundred and ninety six
- u** nine thousand and twenty four
- v** four thousand, eight hundred and seven
- w** nine thousand, nine hundred and ninety nine

DOWN

- a** nine thousand, one hundred and ninety
- b** one thousand, three hundred and ninety five
- c** seven thousand, three hundred and ninety six
- d** two thousand, two hundred and seventy eight
- f** three thousand, three hundred and sixty five
- g** one thousand, five hundred and ninety seven
- j** nine thousand, six hundred and forty two
- l** six thousand, three hundred and forty
- n** seven thousand, six hundred and eighty three
- o** six thousand and sixty one
- r** one thousand, nine hundred and ninety nine
- s** four thousand, two hundred and nine

Obair Bhaile Mata 13

1. Cad é an uimhir atá léirithe ar an abacas seo thíos?



2. Comhlánaigh an seicheamh seo?

6352 6353 6354 6355 6356 6357 _____

3. Cad é an uimhir atá 10 **níos lú** ná 8536? _____

4. Cad é suim iomlán na n-uimhreacha seo thíos?

2000 agus 700 agus 40 agus 1 = _____

5. Scríobh an uimhir 8381 i bhfocail.

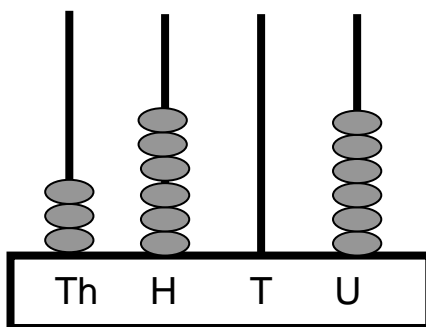
6. Scríobh an uimhir *dhá mhíle, ceithre chéad nócha a sé* i bhfigiúirí.

7. Scríobh na huimhreacha seo in ord ardaitheach, ag tosú leis an cheann is lú.

6839	7379	3762	2757	2651
------	------	------	------	------

Maths Homework 13

1. What number is displayed on this abacus?



2. Complete this sequence.

6352 6353 6354 6355 6356 6357 _____

3. What number is 10 **less than** 8536? _____

4. What is the total of the following numbers?

2000 and 700 and 40 and 1 = _____

5. Write the number 8381 in words.

6. Write the number *two thousand, four hundred and ninety six* in figures.

7. Write these numbers in ascending order, beginning with the smallest number.

6839	7379	3762	2757	2651
------	------	------	------	------

Obair Bhaile Mata 14

1. Suimigh $34 + 45 =$ _____

2. Déan an tsuim seo thíos.

$$\begin{array}{r} \text{C} \quad \text{D} \quad \text{A} \\ 7 \quad 4 \quad 6 \\ + 1 \quad 8 \quad 8 \\ \hline \\ \hline \end{array}$$

3. Dealraith $94 - 22 =$ _____

4. Déan an tsuim seo thíos.

$$\begin{array}{r} \text{D} \quad \text{A} \\ 7 \quad 3 \\ - 5 \quad 5 \\ \hline \\ \hline \end{array}$$

5. Iolraigh $2 \times 7 =$ _____

6. Iolraigh $5 \times 3 =$ _____

7. Iolraigh $10 \times 8 =$ _____

8. Iolraigh $3 \times 4 =$ _____

9. Iolraigh $4 \times 8 =$ _____

10. Iolraigh $6 \times 10 =$ _____

Maths Homework 14

1. Add $34 + 45 =$ _____

2. Complete this sum.

$$\begin{array}{r} \text{H T U} \\ 746 \\ + 188 \\ \hline \\ \hline \end{array}$$

3. Subtract $94 - 22 =$ _____

4. Complete this sum.

$$\begin{array}{r} \text{T U} \\ 73 \\ - 55 \\ \hline \\ \hline \end{array}$$

5. Multiply $2 \times 7 =$ _____

6. Multiply $5 \times 3 =$ _____

7. Multiply $10 \times 8 =$ _____


8. Multiply $3 \times 4 =$ _____

9. Multiply $4 \times 8 =$ _____

10. Multiply $6 \times 10 =$ _____

Obair Bhaile Mata 15

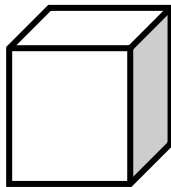
1. Cá mhéad airgid atá léirithe thíos?



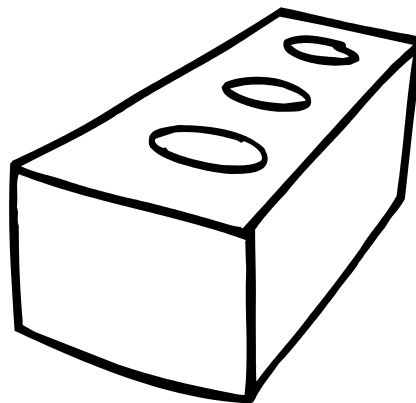
2. Cad é an t-am atá léirithe ar an chlog seo thíos?



3. Cad é an t-ainm atá ar an chruth seo thíos?



4. Cé acu is éadroime, bríce nó cleite?



5. Cé acu an ceann corr thíos?

cathaoir


suíochán

stól

leaba

Maths Homework 15

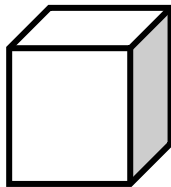
1. How much money is shown below?



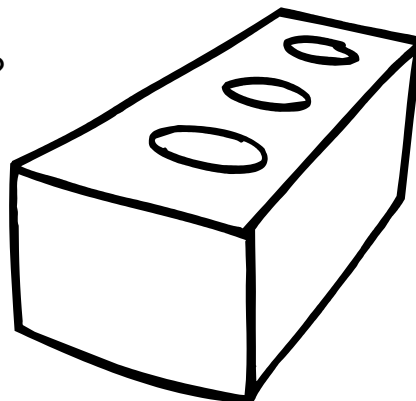
2. What time is shown on the clock below?



3. What is the name of the shape below?



4. Which is lighter, a brick or a feather?



5. Which is the odd one out?

chair

seat

stool

bed

Obair Bhaile Mata 16

1. Suimigh $73 + 25 =$ _____

2. Déan an tsuim seo thíos.

$$\begin{array}{r} \text{C} \quad \text{D} \quad \text{A} \\ 7 \quad 3 \quad 2 \\ + \quad 2 \quad 4 \quad 9 \\ \hline \\ \hline \end{array}$$

3. Dealraith $65 - 25 =$ _____

4. Déan an tsuim seo thíos.

$$\begin{array}{r} \text{D} \quad \text{A} \\ 6 \quad 3 \\ - \quad 2 \quad 4 \\ \hline \\ \hline \end{array}$$

5. Iolraigh $2 \times 4 =$ _____

6. Iolraigh $5 \times 2 =$ _____

7. Iolraigh $10 \times 7 =$ _____

8. Iolraigh $3 \times 7 =$ _____

9. Iolraigh $4 \times 8 =$ _____

10. Iolraigh $6 \times 3 =$ _____

Maths Homework 16

1. Add $73 + 25 =$ _____

2. Complete this sum.

$$\begin{array}{r} \text{C D A} \\ 732 \\ + 249 \\ \hline \\ \hline \end{array}$$

3. Subtract $65 - 25 =$ _____

4. Complete this sum

$$\begin{array}{r} \text{D A} \\ 63 \\ - 24 \\ \hline \\ \hline \end{array}$$

5. Multiply $2 \times 4 =$ _____

6. Multiply $5 \times 2 =$ _____

7. Multiply $10 \times 7 =$ _____

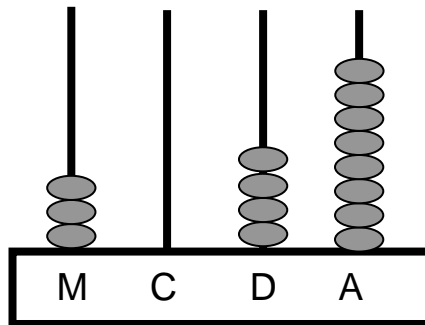
8. Multiply $3 \times 7 =$ _____

9. Multiply $4 \times 8 =$ _____

10. Multiply $6 \times 3 =$ _____

Obair Bhaile Mata 17

1. Cad é an uimhir atá léirithe ar an abacas seo thíos?



2. Comhlánaigh an seicheamh seo?

1357 1358 1359 1360 1361 1362 _____

3. Cad é an uimhir atá 100 **níos mó** ná 3852?

4. Cad é suim iomlán na n-uimhreacha seo thíos?

6000 agus 200 agus 60 agus 5 = _____

5. Scríobh an uimhir 4842 i bhfocail.

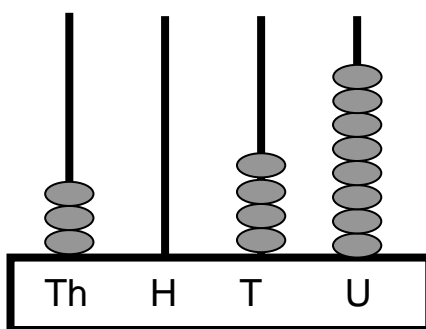
6. Scríobh an uimhir *trí mhíle, naoi gcéad ochtó a cúig* i bhfigiúirí.

7. Scríobh na huimhreacha seo in ord ardaitheach, ag tosú leis an cheann is lú.

2974 3710 8352 9642 1974

Maths Homework 17

1. What number is displayed on this abacus?



2. Complete this sequence.

1357 1358 1359 1360 1361 1362 _____

3. What number is 100 **more than** 3852? _____

4. What is the total of the following numbers?

6000 and 200 and 60 and 5 = _____

5. Write the number *4842* in words.

6. Write the number *three thousand, nine hundred and eighty five* in figures.

7. Write these numbers in ascending order, beginning with the smallest number.

2974	3710	8352	9642	1974
------	------	------	------	------

Obair Bhaile Mata 18

1. Suimigh $52 + 33 =$ _____

2. Déan an tsuim seo thíos.

$$\begin{array}{r} \text{C} \quad \text{D} \quad \text{A} \\ 3 \quad 5 \quad 6 \\ + 2 \quad 5 \quad 3 \\ \hline \\ \hline \end{array}$$

3. Dealraith $84 - 21 =$ _____

4. Déan an tsuim seo thíos.

$$\begin{array}{r} \text{D} \quad \text{A} \\ 5 \quad 6 \\ - 1 \quad 8 \\ \hline \\ \hline \end{array}$$

5. Iolraigh $2 \times 3 =$ _____

6. Iolraigh $5 \times 7 =$ _____

7. Iolraigh $10 \times 4 =$ _____

8. Iolraigh $3 \times 8 =$ _____

9. Iolraigh $4 \times 3 =$ _____

10. Iolraigh $6 \times 1 =$ _____

Maths Homework 18

1. Add $52 + 33 =$ _____

2. Complete this sum.

$$\begin{array}{r} \text{H T U} \\ 3 \ 5 \ 6 \\ + 2 \ 5 \ 3 \\ \hline \\ \hline \end{array}$$

3. Subtract $84 - 21 =$ _____

4. Complete this sum.

$$\begin{array}{r} \text{T U} \\ 5 \ 6 \\ - 1 \ 8 \\ \hline \\ \hline \end{array}$$

5. Multiply $2 \times 3 =$ _____

6. Multiply $5 \times 7 =$ _____

7. Multiply $10 \times 4 =$ _____

8. Multiply $3 \times 8 =$ _____

9. Multiply $4 \times 3 =$ _____

10. Multiply $6 \times 1 =$ _____

Obair Bhaile Mata 19


1. Cá mhéad airgid atá léirithe thíos?



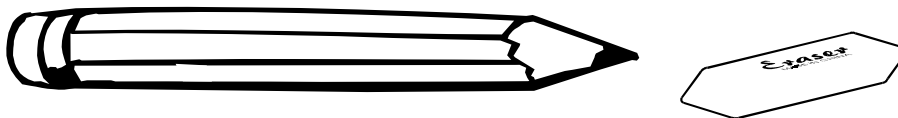
2. Cad é an t-am atá léirithe ar an chlog seo thíos?



3. Cad é an t-ainm atá ar an chruth seo thíos?



4. Cé acu is giorra, cuimilteoir nó peann luaidhe?



5. Cé acu an ceann corr thíos?

peann

crián

cuimilteoir

peann luaidhe

Maths Homework 19


1. How much money is shown below?



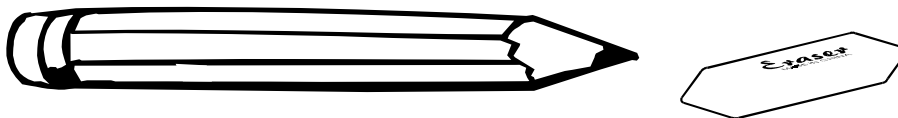
2. What time is shown on the clock below?



3. What is the name of the shape below?



4. Which is shorter, a rubber or a pencil?



5. Which is the odd one out?

pen

crayon

rubber

pencil

Obair Bhaile Mata 20

1. Suimigh $62 + 13 =$ _____

2. Déan an tsuim seo thíos.

$$\begin{array}{r} \text{C} \quad \text{D} \quad \text{A} \\ 6 \quad 3 \quad 5 \\ + 2 \quad 8 \quad 3 \\ \hline \\ \hline \end{array}$$

3. Dealraith $94 - 13 =$ _____

4. Déan an tsuim seo thíos.

$$\begin{array}{r} \text{D} \quad \text{A} \\ 8 \quad 3 \\ - 5 \quad 7 \\ \hline \\ \hline \end{array}$$

5. Iolraigh $2 \times 6 =$ _____

6. Iolraigh $5 \times 3 =$ _____

7. Iolraigh $10 \times 5 =$ _____

8. Iolraigh $3 \times 2 =$ _____

9. Iolraigh $4 \times 7 =$ _____

10. Iolraigh $6 \times 5 =$ _____

Maths Homework 20

1. Add $62 + 13 =$ _____

2. Complete this sum.

$$\begin{array}{r} \text{H T U} \\ 635 \\ + 283 \\ \hline \\ \hline \end{array}$$

3. Subtract $94 - 13 =$ _____

4. Complete this sum.

$$\begin{array}{r} \text{T U} \\ 83 \\ - 57 \\ \hline \\ \hline \end{array}$$

5. Multiply $2 \times 6 =$ _____

6. Multiply $5 \times 3 =$ _____

7. Multiply $10 \times 5 =$ _____

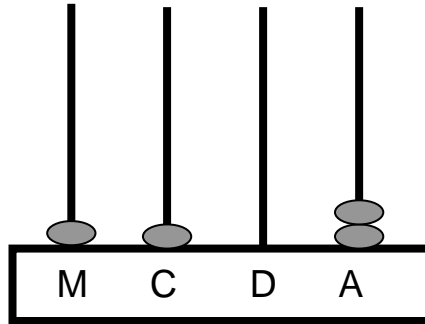
8. Multiply $3 \times 2 =$ _____

9. Multiply $4 \times 7 =$ _____

10. Multiply $6 \times 5 =$ _____

Obair Bhaile Mata 21

1. Cad é an uimhir atá léirithe ar an abacas seo thíos?



2. Comhlánaigh an seicheamh seo?

5494 5495 5496 5497 5498 5499 _____

3. Cad é an uimhir atá 100 **níos lú** ná 6439? _____

4. Cad é suim iomlán na n-uimhreacha seo thíos?

7000 agus 300 agus 20 agus 1 = _____

5. Scríobh an uimhir 5730 i bhfocail.

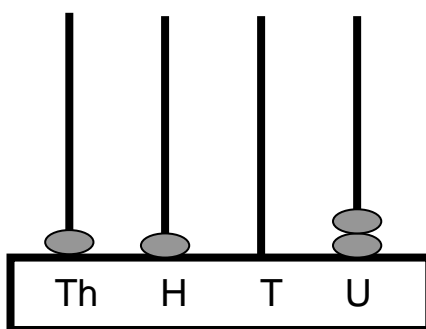
6. Scríobh an uimhir *naoi míle, seacht gcéad ochtó a cúig* i bhfigiúirí.

7. Scríobh na huimhreacha seo in ord ardaitheach, ag tosú leis an cheann is lú.

5035 6830 6430 8953 9632

Maths Homework 21

1. What number is displayed on this abacus?



2. Complete this sequence.

5494 5495 5496 5497 5498 5499 _____

3. What number is 100 **less than** 6439? _____

4. What is the total of the following numbers?

7000 and 300 and 20 and 1 = _____

5. Write the number *5730* in words.

6. Write the number *nine thousand, seven hundred and eighty five* in figures.

7. Write these numbers in ascending order, beginning with the smallest number.

5035	6830	6430	8953	9632
------	------	------	------	------

Obair Bhaile Mata 22

1. Suimigh $38 + 21 =$ _____

2. Déan an tsuim seo thíos.

	C	D	A
	5	3	8
+	3	6	4
<hr/>			
<hr/>			

3. Dealraith $73 - 41 =$ _____

4. Déan an tsuim seo thíos.

	D	A
	8	2
-	2	7
<hr/>		
<hr/>		

5. Iolraigh $2 \times 1 =$ _____

6. Iolraigh $5 \times 3 =$ _____

7. Iolraigh $10 \times 6 =$ _____

8. Iolraigh $3 \times 7 =$ _____

9. Iolraigh $4 \times 6 =$ _____

10. Iolraigh $6 \times 8 =$ _____

Maths Homework 22

1. Add $38 + 21 =$ _____

2. Complete this sum.

	H	T	U
	5	3	8
+	3	6	4
<hr/>			
<hr/>			

3. Subtract $73 - 41 =$ _____

4. Complete this sum.

	T	U
	8	2
-	2	7
<hr/>		
<hr/>		

5. Multiply $2 \times 1 =$ _____

6. Multiply $5 \times 3 =$ _____

7. Multiply $10 \times 6 =$ _____


8. Multiply $3 \times 7 =$ _____

9. Multiply $4 \times 6 =$ _____

10. Multiply $6 \times 8 =$ _____

Obair Bhaile Mata 23

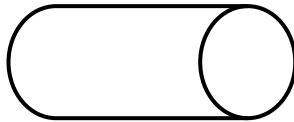
1. Cá mhéad airgid atá léirithe thíos?



2. Cad é an t-am atá léirithe ar an chlog seo thíos?




3. Cad é an t-ainm atá ar an chruth seo thíos?



4. Cé acu is lú toilleadh, sásan nó folcadán?





5. Cé acu an ceann corr thíos?

forc

scian

súp

spúnóg

Maths Homework 23

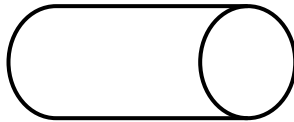
1. How much money is shown below?



2. What time does the clock below show?




3. What is the name of the shape below?



4. Which holds the least, a saucepan or a bath?





5. Which is the odd one out?

fork

knife

soup

spoon

Obair Bhaile Mata 24

1. Suimigh $47 + 31 =$ _____

2. Déan an tsuim seo thíos.

	C	D	A
	5	4	6
+	2	9	9
<hr/>			
<hr/>			

3. Dealraith $99 - 65 =$ _____

4. Déan an tsuim seo thíos.

	D	A
	8	0
-	6	7
<hr/>		
<hr/>		

5. Iolraigh $2 \times 8 =$ _____

6. Iolraigh $5 \times 9 =$ _____

7. Iolraigh $10 \times 5 =$ _____

8. Iolraigh $3 \times 9 =$ _____

9. Iolraigh $4 \times 7 =$ _____

10. Iolraigh $6 \times 9 =$ _____

Maths Homework 24

1. Add $47 + 31 =$ _____

2. Complete this sum.

	H	T	U
	5	4	6
+	2	9	9
<hr/>			
<hr/>			

3. Subtract $99 - 65 =$ _____

4. Complete this sum.

	T	U
	8	0
-	6	7
<hr/>		
<hr/>		

5. Multiply $2 \times 8 =$ _____

6. Multiply $5 \times 9 =$ _____

7. Multiply $10 \times 5 =$ _____

8. Multiply $3 \times 9 =$ _____

9. Multiply $4 \times 7 =$ _____

10. Multiply $6 \times 9 =$ _____

