


Obair Bhaile Mata

Leabhar 8



Ainm _____ Rang _____



Cearnóg Iolraithe Multiplication Square

X	1	2	3	4	5	6	7	8	9	10
1	1	2	3	4	5	6	7	8	9	10
2	2	4	6	8	10	12	14	16	18	20
3	3	6	9	12	15	18	21	24	27	30
4	4	8	12	16	20	24	28	32	36	40
5	5	10	15	20	25	30	35	40	45	50
6	6	12	18	24	30	36	42	48	54	60
7	7	14	21	28	35	42	49	56	63	70
8	8	16	24	32	40	48	56	64	72	80
9	9	18	27	36	45	54	63	72	81	90
10	10	20	30	40	50	60	70	80	90	100

Obair Bhaile Mata 1

Déan na suimeanna seo.

a)

$$\begin{array}{r} \text{C D A} \\ 6 \ 5 \ 7 \\ + 1 \ 3 \ 1 \\ \hline \\ \hline \end{array}$$

b)

$$\begin{array}{r} \text{C D A} \\ 3 \ 6 \ 2 \\ + 5 \ 1 \ 6 \\ \hline \\ \hline \end{array}$$

c)

$$\begin{array}{r} \text{C D A} \\ 7 \ 2 \ 6 \\ + 2 \ 2 \ 6 \\ \hline \\ \hline \end{array}$$

d)

$$\begin{array}{r} \text{C D A} \\ 6 \ 3 \ 6 \\ + 5 \ 1 \ 5 \\ \hline \\ \hline \end{array}$$

e)

$$\begin{array}{r} \text{C D A} \\ 5 \ 3 \ 6 \\ + 5 \ 2 \ 1 \\ \hline \\ \hline \end{array}$$

f)

$$\begin{array}{r} \text{C D A} \\ 6 \ 5 \ 8 \\ + 1 \ 5 \ 1 \\ \hline \\ \hline \end{array}$$

g)

$$\begin{array}{r} \text{C D A} \\ 5 \ 3 \ 7 \\ + 3 \ 3 \ 7 \\ \hline \\ \hline \end{array}$$

h)

$$\begin{array}{r} \text{C D A} \\ 4 \ 8 \ 7 \\ + 4 \ 2 \ 1 \\ \hline \\ \hline \end{array}$$

i)

$$\begin{array}{r} \text{C D A} \\ 5 \ 4 \ 7 \\ + 3 \ 2 \ 5 \\ \hline \\ \hline \end{array}$$

j)

$$\begin{array}{r} \text{C D A} \\ 7 \ 8 \ 0 \\ + 5 \ 1 \ 6 \\ \hline \\ \hline \end{array}$$

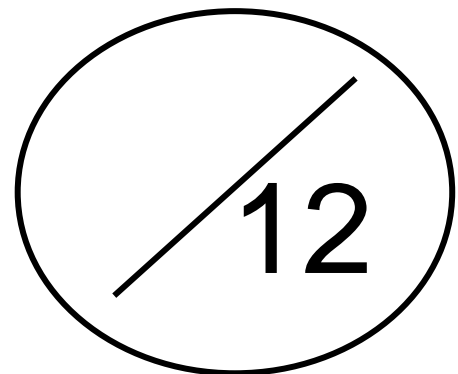
k)

$$\begin{array}{r} \text{C D A} \\ 3 \ 7 \ 3 \\ + 2 \ 1 \ 3 \\ \hline \\ \hline \end{array}$$

l)

$$\begin{array}{r} \text{C D A} \\ 4 \ 8 \ 3 \\ + 1 \ 1 \ 2 \\ \hline \\ \hline \end{array}$$

**Cá mhéad a
fuair tú ceart?**



Maths Homework 1

Complete these division sums.

a)

$$\begin{array}{r} \text{H T U} \\ 6 \ 5 \ 7 \\ + 1 \ 3 \ 1 \\ \hline \\ \hline \end{array}$$

b)

$$\begin{array}{r} \text{H T U} \\ 3 \ 6 \ 2 \\ + 5 \ 1 \ 6 \\ \hline \\ \hline \end{array}$$

c)

$$\begin{array}{r} \text{H T U} \\ 7 \ 2 \ 6 \\ + 2 \ 2 \ 6 \\ \hline \\ \hline \end{array}$$

d)

$$\begin{array}{r} \text{H T U} \\ 6 \ 3 \ 6 \\ + 5 \ 1 \ 5 \\ \hline \\ \hline \end{array}$$

e)

$$\begin{array}{r} \text{H T U} \\ 5 \ 3 \ 6 \\ + 5 \ 2 \ 1 \\ \hline \\ \hline \end{array}$$

f)

$$\begin{array}{r} \text{H T U} \\ 6 \ 5 \ 8 \\ + 1 \ 5 \ 1 \\ \hline \\ \hline \end{array}$$

g)

$$\begin{array}{r} \text{H T U} \\ 5 \ 3 \ 7 \\ + 3 \ 3 \ 7 \\ \hline \\ \hline \end{array}$$

h)

$$\begin{array}{r} \text{H T U} \\ 4 \ 8 \ 7 \\ + 4 \ 2 \ 1 \\ \hline \\ \hline \end{array}$$

i)

$$\begin{array}{r} \text{H T U} \\ 5 \ 4 \ 7 \\ + 3 \ 2 \ 5 \\ \hline \\ \hline \end{array}$$

j)

$$\begin{array}{r} \text{H T U} \\ 7 \ 8 \ 0 \\ + 5 \ 1 \ 6 \\ \hline \\ \hline \end{array}$$

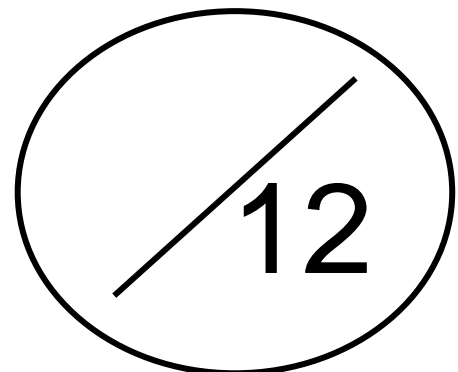
k)

$$\begin{array}{r} \text{H T U} \\ 3 \ 7 \ 3 \\ + 2 \ 1 \ 3 \\ \hline \\ \hline \end{array}$$

l)

$$\begin{array}{r} \text{H T U} \\ 4 \ 8 \ 3 \\ + 1 \ 1 \ 2 \\ \hline \\ \hline \end{array}$$

**How many
did you get right?**



Obair Bhaile Mata 2

Déan na suimeanna seo.

a)

$$\begin{array}{r} \text{C D A} \\ 3 \ 6 \ 3 \\ - 1 \ 3 \ 1 \\ \hline \\ \hline \end{array}$$

b)

$$\begin{array}{r} \text{C D A} \\ 8 \ 7 \ 2 \\ - 5 \ 1 \ 6 \\ \hline \\ \hline \end{array}$$

c)

$$\begin{array}{r} \text{C D A} \\ 4 \ 3 \ 6 \\ - 2 \ 2 \ 6 \\ \hline \\ \hline \end{array}$$

d)

$$\begin{array}{r} \text{C D A} \\ 7 \ 4 \ 1 \\ - 5 \ 1 \ 5 \\ \hline \\ \hline \end{array}$$

e)

$$\begin{array}{r} \text{C D A} \\ 5 \ 7 \ 4 \\ - 5 \ 2 \ 1 \\ \hline \\ \hline \end{array}$$

f)

$$\begin{array}{r} \text{C D A} \\ 8 \ 3 \ 6 \\ - 1 \ 5 \ 1 \\ \hline \\ \hline \end{array}$$

g)

$$\begin{array}{r} \text{C D A} \\ 5 \ 4 \ 7 \\ - 3 \ 3 \ 7 \\ \hline \\ \hline \end{array}$$

h)

$$\begin{array}{r} \text{C D A} \\ 6 \ 4 \ 3 \\ - 4 \ 2 \ 1 \\ \hline \\ \hline \end{array}$$

i)

$$\begin{array}{r} \text{C D A} \\ 6 \ 5 \ 8 \\ - 3 \ 2 \ 5 \\ \hline \\ \hline \end{array}$$

j)

$$\begin{array}{r} \text{C D A} \\ 7 \ 6 \ 3 \\ - 5 \ 1 \ 6 \\ \hline \\ \hline \end{array}$$

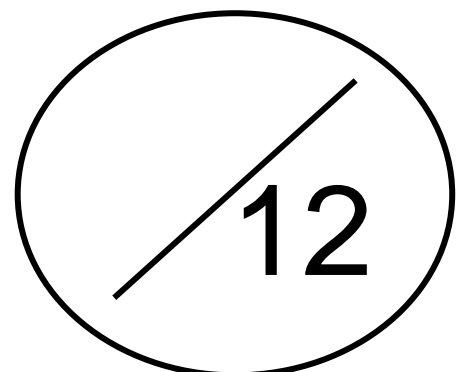
k)

$$\begin{array}{r} \text{C D A} \\ 5 \ 7 \ 5 \\ - 2 \ 1 \ 3 \\ \hline \\ \hline \end{array}$$

l)

$$\begin{array}{r} \text{C D A} \\ 4 \ 5 \ 7 \\ - 1 \ 1 \ 2 \\ \hline \\ \hline \end{array}$$

Cá mhéad a fuair tú ceart?



Maths Homework 2

Complete these sums.

a)

$$\begin{array}{r} \text{H T U} \\ 363 \\ - 131 \\ \hline \\ \hline \end{array}$$

b)

$$\begin{array}{r} \text{H T U} \\ 872 \\ - 516 \\ \hline \\ \hline \end{array}$$

c)

$$\begin{array}{r} \text{H T U} \\ 436 \\ - 226 \\ \hline \\ \hline \end{array}$$

d)

$$\begin{array}{r} \text{H T U} \\ 741 \\ - 515 \\ \hline \\ \hline \end{array}$$

e)

$$\begin{array}{r} \text{H T U} \\ 574 \\ - 521 \\ \hline \\ \hline \end{array}$$

f)

$$\begin{array}{r} \text{H T U} \\ 836 \\ - 151 \\ \hline \\ \hline \end{array}$$

g)

$$\begin{array}{r} \text{H T U} \\ 547 \\ - 337 \\ \hline \\ \hline \end{array}$$

h)

$$\begin{array}{r} \text{H T U} \\ 643 \\ - 421 \\ \hline \\ \hline \end{array}$$

i)

$$\begin{array}{r} \text{H T U} \\ 658 \\ - 325 \\ \hline \\ \hline \end{array}$$

j)

$$\begin{array}{r} \text{H T U} \\ 763 \\ - 516 \\ \hline \\ \hline \end{array}$$

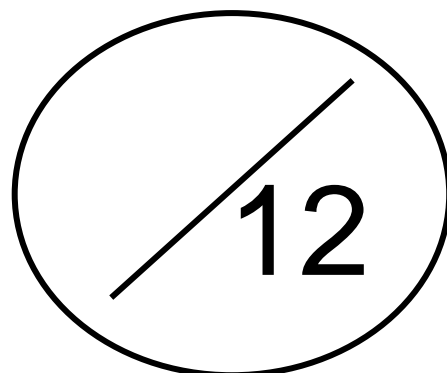
k)

$$\begin{array}{r} \text{H T U} \\ 575 \\ - 213 \\ \hline \\ \hline \end{array}$$

l)

$$\begin{array}{r} \text{H T U} \\ 457 \\ - 112 \\ \hline \\ \hline \end{array}$$

**How many
did you get right?**



Obair Bhaile Mata 3

Déan na suimeanna iolraithe seo.

a) $2 \times 2 = \underline{\quad}$

b) $4 \times 7 = \underline{\quad}$

c) $4 \times 4 = \underline{\quad}$

d) $10 \times 6 = \underline{\quad}$

e) $6 \times 4 = \underline{\quad}$

f) $6 \times 6 = \underline{\quad}$

g) $8 \times 7 = \underline{\quad}$

h) $3 \times 3 = \underline{\quad}$

i) $2 \times 8 = \underline{\quad}$

j) $7 \times 4 = \underline{\quad}$

k) $1 \times 5 = \underline{\quad}$

l) $4 \times 10 = \underline{\quad}$

m) $3 \times 6 = \underline{\quad}$

n) $2 \times 6 = \underline{\quad}$

o) $5 \times 4 = \underline{\quad}$

p) $9 \times 9 = \underline{\quad}$

q) $7 \times 1 = \underline{\quad}$

r) $7 \times 6 = \underline{\quad}$

s) $9 \times 2 = \underline{\quad}$

t) $5 \times 5 = \underline{\quad}$

u) $2 \times 4 = \underline{\quad}$

v) $3 \times 4 = \underline{\quad}$


w) $4 \times 3 = \underline{\quad}$

x) $1 \times 2 = \underline{\quad}$

y) $6 \times 6 = \underline{\quad}$

z) $8 \times 0 = \underline{\quad}$

**Cá mhéad a
fuair tú ceart?**



Maths Homework 3

Complete these multiplication sums.

a) $2 \times 2 = \underline{\quad}$

b) $4 \times 7 = \underline{\quad}$

c) $4 \times 4 = \underline{\quad}$

d) $10 \times 6 = \underline{\quad}$

e) $6 \times 4 = \underline{\quad}$

f) $6 \times 6 = \underline{\quad}$

g) $8 \times 7 = \underline{\quad}$

h) $3 \times 3 = \underline{\quad}$

i) $2 \times 8 = \underline{\quad}$

j) $7 \times 4 = \underline{\quad}$

k) $1 \times 5 = \underline{\quad}$

l) $4 \times 10 = \underline{\quad}$

m) $3 \times 6 = \underline{\quad}$

n) $2 \times 6 = \underline{\quad}$

o) $5 \times 4 = \underline{\quad}$

p) $9 \times 9 = \underline{\quad}$

q) $7 \times 1 = \underline{\quad}$

r) $7 \times 6 = \underline{\quad}$

s) $9 \times 2 = \underline{\quad}$

t) $5 \times 5 = \underline{\quad}$

u) $2 \times 4 = \underline{\quad}$

v) $3 \times 4 = \underline{\quad}$

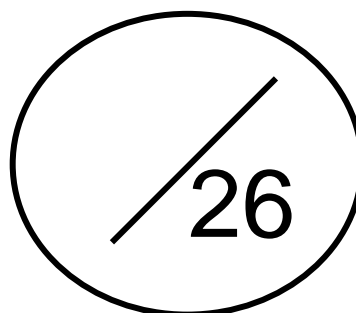
w) $4 \times 3 = \underline{\quad}$

x) $1 \times 2 = \underline{\quad}$

y) $6 \times 6 = \underline{\quad}$

z) $8 \times 0 = \underline{\quad}$

**How many
did you get right?**



Obair Bhaile Mata 4

1. Slánaigh 87 go dtí an deich is cóngaraí. _____

2. Slánaigh 834 go dtí an céad is cóngaraí. _____

3. Cad é an uimhir atá 1 **níos mó** ná 7563? _____

4. Cad é suim iomlán na n-uimhreacha seo thíos?

1 míle, 7 céadta, 2 deiceanna agus 5 aonad = _____

5. Scríobh an uimhir 1874 i bhfocail.

6. Scríobh an uimhir *naoi míle, trí chéad seasca a hocht* i bhfigiúirí.

7. Cá mhéad airgid atá léirithe thíos?



8. Cad é an t-am atá léirithe ar an chlog seo thíos?



Maths Homework 4

1. Round 87 to the nearest ten. _____

2. Round 834 to the nearest hundred. _____

3. What number is 1 **more than** 7563? _____

4. What is the sum of the following numbers below?

1 thousand, 7 hundreds, 2 tens and 5 units = _____

5. Write the number 1874 in words.

6. Write the number *nine thousand, three hundred and sixty eight* in figures.

7. How much money is shown below?



8. What time is shown on the clock below?



Obair Bhaile Mata 5

Déan na suimeanna seo.

a)

$$\begin{array}{r} \text{C D A} \\ 1 \ 5 \ 8 \\ + 1 \ 3 \ 1 \\ \hline \\ \hline \end{array}$$

b)

$$\begin{array}{r} \text{C D A} \\ 2 \ 3 \ 4 \\ + 1 \ 1 \ 7 \\ \hline \\ \hline \end{array}$$

c)

$$\begin{array}{r} \text{C D A} \\ 3 \ 3 \ 7 \\ + 2 \ 2 \ 3 \\ \hline \\ \hline \end{array}$$

d)

$$\begin{array}{r} \text{C D A} \\ 4 \ 4 \ 1 \\ + 3 \ 1 \ 7 \\ \hline \\ \hline \end{array}$$

e)

$$\begin{array}{r} \text{C D A} \\ 5 \ 7 \ 3 \\ + 4 \ 2 \ 2 \\ \hline \\ \hline \end{array}$$

f)

$$\begin{array}{r} \text{C D A} \\ 6 \ 2 \ 7 \\ + 3 \ 5 \ 6 \\ \hline \\ \hline \end{array}$$

g)

$$\begin{array}{r} \text{C D A} \\ 7 \ 6 \ 3 \\ + 1 \ 3 \ 6 \\ \hline \\ \hline \end{array}$$

h)

$$\begin{array}{r} \text{C D A} \\ 8 \ 4 \ 7 \\ + 1 \ 2 \ 3 \\ \hline \\ \hline \end{array}$$

i)

$$\begin{array}{r} \text{C D A} \\ 9 \ 5 \ 8 \\ + 1 \ 2 \ 6 \\ \hline \\ \hline \end{array}$$

j)

$$\begin{array}{r} \text{C D A} \\ 8 \ 3 \ 7 \\ + 2 \ 1 \ 7 \\ \hline \\ \hline \end{array}$$

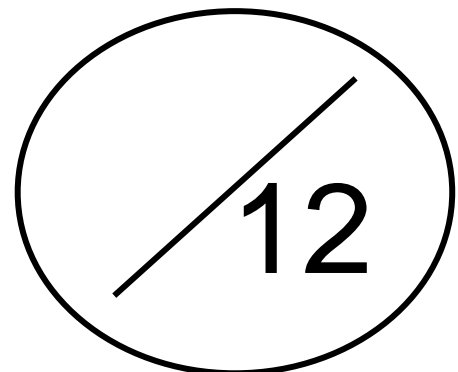
k)

$$\begin{array}{r} \text{C D A} \\ 7 \ 2 \ 7 \\ + 2 \ 1 \ 2 \\ \hline \\ \hline \end{array}$$

l)

$$\begin{array}{r} \text{C D A} \\ 5 \ 6 \ 8 \\ + 5 \ 1 \ 7 \\ \hline \\ \hline \end{array}$$

Cá mhéad a fuair tú ceart?



Maths Homework 5

Complete these sums.

a)

$$\begin{array}{r} \text{H T U} \\ 158 \\ + 131 \\ \hline \\ \hline \end{array}$$

b)

$$\begin{array}{r} \text{H T U} \\ 234 \\ + 117 \\ \hline \\ \hline \end{array}$$

c)

$$\begin{array}{r} \text{H T U} \\ 337 \\ + 223 \\ \hline \\ \hline \end{array}$$

d)

$$\begin{array}{r} \text{H T U} \\ 441 \\ + 317 \\ \hline \\ \hline \end{array}$$

e)

$$\begin{array}{r} \text{H T U} \\ 573 \\ + 422 \\ \hline \\ \hline \end{array}$$

f)

$$\begin{array}{r} \text{H T U} \\ 627 \\ + 356 \\ \hline \\ \hline \end{array}$$

g)

$$\begin{array}{r} \text{H T U} \\ 763 \\ + 136 \\ \hline \\ \hline \end{array}$$

h)

$$\begin{array}{r} \text{H T U} \\ 847 \\ + 123 \\ \hline \\ \hline \end{array}$$

i)

$$\begin{array}{r} \text{H T U} \\ 958 \\ + 126 \\ \hline \\ \hline \end{array}$$

j)

$$\begin{array}{r} \text{H T U} \\ 837 \\ + 217 \\ \hline \\ \hline \end{array}$$


k)

$$\begin{array}{r} \text{H T U} \\ 727 \\ + 212 \\ \hline \\ \hline \end{array}$$

l)

$$\begin{array}{r} \text{H T U} \\ 568 \\ + 517 \\ \hline \\ \hline \end{array}$$

**How many
did you get right?**



Obair Bhaile Mata 6

Déan na suimeanna dealaithe seo.

a)

$$\begin{array}{r} \text{C D A} \\ 2 \ 5 \ 8 \\ - 1 \ 2 \ 4 \\ \hline \\ \hline \end{array}$$

b)

$$\begin{array}{r} \text{C D A} \\ 3 \ 7 \ 2 \\ - 1 \ 5 \ 2 \\ \hline \\ \hline \end{array}$$

c)

$$\begin{array}{r} \text{C D A} \\ 4 \ 8 \ 3 \\ - 2 \ 3 \ 8 \\ \hline \\ \hline \end{array}$$

d)

$$\begin{array}{r} \text{C D A} \\ 5 \ 3 \ 8 \\ - 3 \ 4 \ 7 \\ \hline \\ \hline \end{array}$$

e)

$$\begin{array}{r} \text{C D A} \\ 6 \ 3 \ 7 \\ - 4 \ 2 \ 7 \\ \hline \\ \hline \end{array}$$

f)

$$\begin{array}{r} \text{C D A} \\ 7 \ 3 \ 8 \\ - 4 \ 2 \ 7 \\ \hline \\ \hline \end{array}$$

g)

$$\begin{array}{r} \text{C D A} \\ 8 \ 4 \ 8 \\ - 3 \ 3 \ 7 \\ \hline \\ \hline \end{array}$$

h)

$$\begin{array}{r} \text{C D A} \\ 9 \ 4 \ 8 \\ - 6 \ 3 \ 8 \\ \hline \\ \hline \end{array}$$

i)

$$\begin{array}{r} \text{C D A} \\ 9 \ 3 \ 6 \\ - 7 \ 6 \ 2 \\ \hline \\ \hline \end{array}$$

j)

$$\begin{array}{r} \text{C D A} \\ 8 \ 7 \ 8 \\ - 5 \ 0 \ 6 \\ \hline \\ \hline \end{array}$$

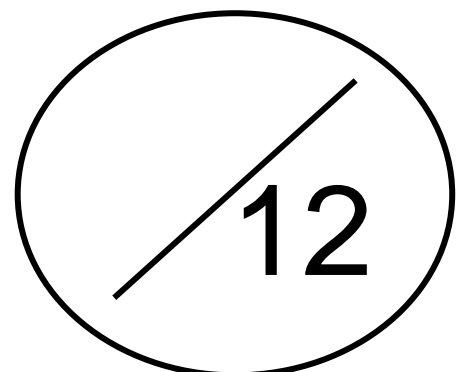
k)

$$\begin{array}{r} \text{C D A} \\ 7 \ 7 \ 3 \\ - 3 \ 1 \ 0 \\ \hline \\ \hline \end{array}$$

l)

$$\begin{array}{r} \text{C D A} \\ 6 \ 3 \ 5 \\ - 4 \ 6 \ 8 \\ \hline \\ \hline \end{array}$$

Cá mhéad a fuair tú ceart?



Maths Homework 6

Complete these subtraction sums.

a)

$$\begin{array}{r} \text{H T U} \\ 258 \\ - 124 \\ \hline \\ \hline \end{array}$$

b)

$$\begin{array}{r} \text{H T U} \\ 372 \\ - 152 \\ \hline \\ \hline \end{array}$$

c)

$$\begin{array}{r} \text{H T U} \\ 483 \\ - 238 \\ \hline \\ \hline \end{array}$$

d)

$$\begin{array}{r} \text{H T U} \\ 538 \\ - 347 \\ \hline \\ \hline \end{array}$$

e)

$$\begin{array}{r} \text{H T U} \\ 637 \\ - 427 \\ \hline \\ \hline \end{array}$$

f)

$$\begin{array}{r} \text{H T U} \\ 738 \\ - 427 \\ \hline \\ \hline \end{array}$$

g)

$$\begin{array}{r} \text{H T U} \\ 848 \\ - 337 \\ \hline \\ \hline \end{array}$$

h)

$$\begin{array}{r} \text{H T U} \\ 948 \\ - 638 \\ \hline \\ \hline \end{array}$$

i)

$$\begin{array}{r} \text{H T U} \\ 936 \\ - 762 \\ \hline \\ \hline \end{array}$$

j)

$$\begin{array}{r} \text{H T U} \\ 878 \\ - 506 \\ \hline \\ \hline \end{array}$$

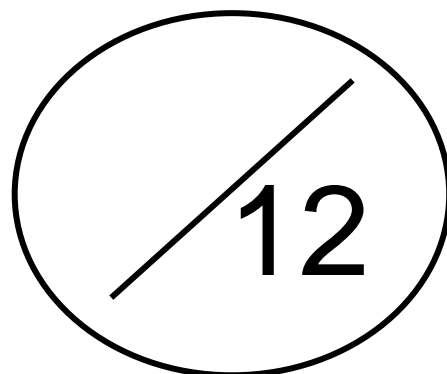
k)

$$\begin{array}{r} \text{H T U} \\ 773 \\ - 310 \\ \hline \\ \hline \end{array}$$

l)

$$\begin{array}{r} \text{H T U} \\ 635 \\ - 468 \\ \hline \\ \hline \end{array}$$

**How many
did you get right?**



Obair Bhaile Mata 7

Déan na suimeanna iolraithe seo.

a) $2 \times 10 = \underline{\hspace{2cm}}$

b) $4 \times 4 = \underline{\hspace{2cm}}$

c) $4 \times 1 = \underline{\hspace{2cm}}$

d) $7 \times 4 = \underline{\hspace{2cm}}$

e) $6 \times 2 = \underline{\hspace{2cm}}$

f) $10 \times 0 = \underline{\hspace{2cm}}$

g) $8 \times 3 = \underline{\hspace{2cm}}$

h) $3 \times 10 = \underline{\hspace{2cm}}$

i) $2 \times 4 = \underline{\hspace{2cm}}$

j) $7 \times 9 = \underline{\hspace{2cm}}$

k) $10 \times 5 = \underline{\hspace{2cm}}$

l) $4 \times 8 = \underline{\hspace{2cm}}$

m) $3 \times 6 = \underline{\hspace{2cm}}$

n) $2 \times 7 = \underline{\hspace{2cm}}$

o) $10 \times 7 = \underline{\hspace{2cm}}$

p) $9 \times 6 = \underline{\hspace{2cm}}$

q) $7 \times 8 = \underline{\hspace{2cm}}$

r) $7 \times 6 = \underline{\hspace{2cm}}$

s) $9 \times 9 = \underline{\hspace{2cm}}$

t) $5 \times 5 = \underline{\hspace{2cm}}$

u) $2 \times 10 = \underline{\hspace{2cm}}$

v) $3 \times 4 = \underline{\hspace{2cm}}$


w) $4 \times 0 = \underline{\hspace{2cm}}$

x) $10 \times 3 = \underline{\hspace{2cm}}$

y) $6 \times 1 = \underline{\hspace{2cm}}$

z) $8 \times 2 = \underline{\hspace{2cm}}$

**Cá mhéad a
fuair tú ceart?**



Maths Homework 7

Complete these multiplication sums.

a) $2 \times 10 = \underline{\quad}$

b) $4 \times 4 = \underline{\quad}$

c) $4 \times 1 = \underline{\quad}$

d) $7 \times 4 = \underline{\quad}$

e) $6 \times 2 = \underline{\quad}$

f) $10 \times 0 = \underline{\quad}$

g) $8 \times 3 = \underline{\quad}$

h) $3 \times 10 = \underline{\quad}$

i) $2 \times 4 = \underline{\quad}$

j) $7 \times 9 = \underline{\quad}$

k) $10 \times 5 = \underline{\quad}$

l) $4 \times 8 = \underline{\quad}$

m) $3 \times 6 = \underline{\quad}$

n) $2 \times 7 = \underline{\quad}$

o) $10 \times 7 = \underline{\quad}$

p) $9 \times 6 = \underline{\quad}$

q) $7 \times 8 = \underline{\quad}$

r) $7 \times 6 = \underline{\quad}$

s) $9 \times 9 = \underline{\quad}$

t) $5 \times 5 = \underline{\quad}$

u) $2 \times 10 = \underline{\quad}$

v) $3 \times 4 = \underline{\quad}$

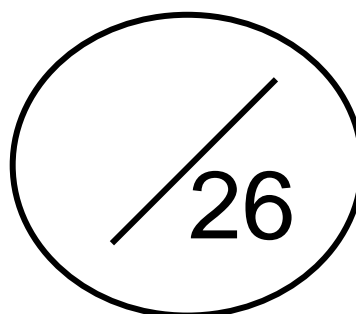
w) $4 \times 0 = \underline{\quad}$

x) $10 \times 3 = \underline{\quad}$

y) $6 \times 1 = \underline{\quad}$

z) $8 \times 2 = \underline{\quad}$

**How many
did you get right?**



Obair Bhaile Mata 8

1. Slánaigh 48 go dtí an deich is cóngaraí. _____

2. Slánaigh 578 go dtí an céad is cóngaraí. _____

3. Cad é an uimhir atá 10 **níos mó** ná 6583? _____

4. Cad é suim iomlán na n-uimhreacha seo thíos?

4 mílte, 3 céadta, 8 deiceanna agus 0 aonaid = _____

5. Scríobh an uimhir 5842 i bhfocail.

6. Scríobh an uimhir *ocht míle, ceithre chéad seachtó a naoi* i bhfigiúirí.

7. Cá mhéad airgid atá léirithe thíos?



8. Cad é an t-am atá léirithe ar an chlog seo thíos?



Maths Homework 8

1. Round 48 to the nearest ten. _____
2. Round 578 to the nearest hundred. _____
3. What number is 10 **more than** 6583? _____
4. What is the sum of the following numbers below?
4 thousands, 3 hundreds, 8 tens and 0 units = _____
5. Write the number 5842 in words

6. Write the number *eight thousand, four hundred and seventy nine* in figures.

7. How much money is shown below?



8. What time is shown on the clock below?



Obair Bhaile Mata 9

Déan na suimeanna seo.

a)

$$\begin{array}{r} \text{C D A} \\ 2 5 6 \\ + 1 4 1 \\ \hline \\ \hline \end{array}$$

b)

$$\begin{array}{r} \text{C D A} \\ 2 6 4 \\ + 1 7 9 \\ \hline \\ \hline \end{array}$$

c)

$$\begin{array}{r} \text{C D A} \\ 3 6 7 \\ + 1 2 5 \\ \hline \\ \hline \end{array}$$

d)

$$\begin{array}{r} \text{C D A} \\ 4 7 2 \\ + 2 5 7 \\ \hline \\ \hline \end{array}$$

e)

$$\begin{array}{r} \text{C D A} \\ 5 5 2 \\ + 3 7 4 \\ \hline \\ \hline \end{array}$$

f)

$$\begin{array}{r} \text{C D A} \\ 6 7 7 \\ + 2 5 8 \\ \hline \\ \hline \end{array}$$

g)

$$\begin{array}{r} \text{C D A} \\ 7 6 5 \\ + 2 6 9 \\ \hline \\ \hline \end{array}$$

h)

$$\begin{array}{r} \text{C D A} \\ 8 0 6 \\ + 1 6 0 \\ \hline \\ \hline \end{array}$$

i)

$$\begin{array}{r} \text{C D A} \\ 9 7 8 \\ + 3 6 9 \\ \hline \\ \hline \end{array}$$

j)

$$\begin{array}{r} \text{C D A} \\ 8 3 7 \\ + 4 8 4 \\ \hline \\ \hline \end{array}$$

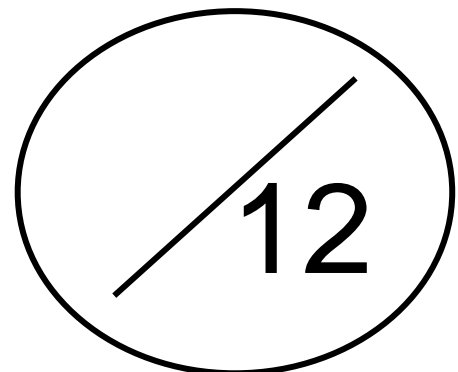
k)

$$\begin{array}{r} \text{C D A} \\ 7 8 9 \\ + 3 5 2 \\ \hline \\ \hline \end{array}$$

l)

$$\begin{array}{r} \text{C D A} \\ 5 6 9 \\ + 3 7 7 \\ \hline \\ \hline \end{array}$$

Cá mhéad a fuair tú ceart?



Maths Homework 9

Complete these addition sums.

a)

$$\begin{array}{r} \text{H T U} \\ 256 \\ + 141 \\ \hline \\ \hline \end{array}$$

b)

$$\begin{array}{r} \text{H T U} \\ 264 \\ + 179 \\ \hline \\ \hline \end{array}$$

c)

$$\begin{array}{r} \text{H T U} \\ 367 \\ + 125 \\ \hline \\ \hline \end{array}$$

d)

$$\begin{array}{r} \text{H T U} \\ 472 \\ + 257 \\ \hline \\ \hline \end{array}$$

e)

$$\begin{array}{r} \text{H T U} \\ 552 \\ + 374 \\ \hline \\ \hline \end{array}$$

f)

$$\begin{array}{r} \text{H T U} \\ 677 \\ + 258 \\ \hline \\ \hline \end{array}$$

g)

$$\begin{array}{r} \text{H T U} \\ 765 \\ + 269 \\ \hline \\ \hline \end{array}$$

h)

$$\begin{array}{r} \text{H T U} \\ 806 \\ + 160 \\ \hline \\ \hline \end{array}$$

i)

$$\begin{array}{r} \text{H T U} \\ 978 \\ + 369 \\ \hline \\ \hline \end{array}$$

j)

$$\begin{array}{r} \text{H T U} \\ 837 \\ + 484 \\ \hline \\ \hline \end{array}$$

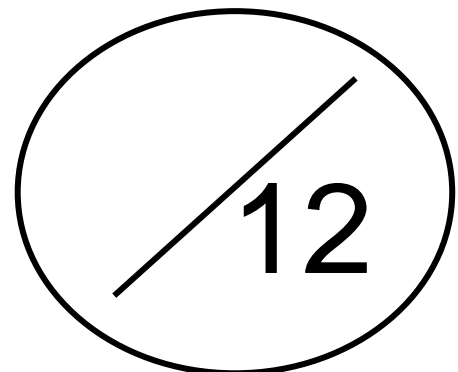
k)

$$\begin{array}{r} \text{H T U} \\ 789 \\ + 352 \\ \hline \\ \hline \end{array}$$

l)

$$\begin{array}{r} \text{H T U} \\ 569 \\ + 377 \\ \hline \\ \hline \end{array}$$

**How many
did you get right?**



Obair Bhaile Mata 10

Déan na suimeanna dealaithe seo.

a)

$$\begin{array}{r} \text{C D A} \\ 262 \\ - 136 \\ \hline \\ \hline \end{array}$$

b)

$$\begin{array}{r} \text{C D A} \\ 347 \\ - 138 \\ \hline \\ \hline \end{array}$$

c)

$$\begin{array}{r} \text{C D A} \\ 446 \\ - 289 \\ \hline \\ \hline \end{array}$$

d)

$$\begin{array}{r} \text{C D A} \\ 585 \\ - 324 \\ \hline \\ \hline \end{array}$$

e)

$$\begin{array}{r} \text{C D A} \\ 689 \\ - 444 \\ \hline \\ \hline \end{array}$$

f)

$$\begin{array}{r} \text{C D A} \\ 788 \\ - 439 \\ \hline \\ \hline \end{array}$$

g)

$$\begin{array}{r} \text{C D A} \\ 839 \\ - 338 \\ \hline \\ \hline \end{array}$$

h)

$$\begin{array}{r} \text{C D A} \\ 959 \\ - 633 \\ \hline \\ \hline \end{array}$$

i)

$$\begin{array}{r} \text{C D A} \\ 974 \\ - 739 \\ \hline \\ \hline \end{array}$$

j)

$$\begin{array}{r} \text{C D A} \\ 898 \\ - 538 \\ \hline \\ \hline \end{array}$$


k)

$$\begin{array}{r} \text{C D A} \\ 740 \\ - 360 \\ \hline \\ \hline \end{array}$$

l)

$$\begin{array}{r} \text{C D A} \\ 636 \\ - 429 \\ \hline \\ \hline \end{array}$$

Cá mhéad a fuair tú ceart?



Maths Homework 10

Complete these subtraction sums.

a)

	H	T	U
	2	6	2
-	1	3	6
<hr/>			
<hr/>			

b)

	H	T	U
	3	4	7
-	1	3	8
<hr/>			
<hr/>			

c)

	H	T	U
	4	4	6
-	2	8	9
<hr/>			
<hr/>			

d)

	H	T	U
	5	8	5
-	3	2	4
<hr/>			
<hr/>			

e)

	H	T	U
	6	8	9
-	4	4	4
<hr/>			
<hr/>			

f)

	H	T	U
	7	8	8
-	4	3	9
<hr/>			
<hr/>			

g)

	H	T	U
	8	3	9
-	3	3	8
<hr/>			
<hr/>			

h)

	H	T	U
	9	5	9
-	6	3	3
<hr/>			
<hr/>			

i)

	H	T	U
	9	7	4
-	7	3	9
<hr/>			
<hr/>			

j)

	H	T	U
	8	9	8
-	5	3	8
<hr/>			
<hr/>			

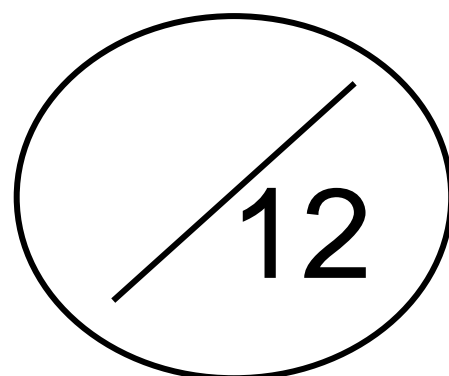
k)

	H	T	U
	7	4	0
-	3	6	0
<hr/>			
<hr/>			

l)

	H	T	U
	6	3	6
-	4	2	9
<hr/>			
<hr/>			

**How many
did you get right?**



Obair Bhaile Mata 11

Déan na suimeanna iolraithe seo.

a) $2 \times 10 = \underline{\hspace{2cm}}$

b) $4 \times 10 = \underline{\hspace{2cm}}$

c) $4 \times 9 = \underline{\hspace{2cm}}$

d) $7 \times 2 = \underline{\hspace{2cm}}$

e) $6 \times 8 = \underline{\hspace{2cm}}$

f) $6 \times 1 = \underline{\hspace{2cm}}$

g) $8 \times 7 = \underline{\hspace{2cm}}$

h) $3 \times 0 = \underline{\hspace{2cm}}$

i) $2 \times 6 = \underline{\hspace{2cm}}$

j) $7 \times 1 = \underline{\hspace{2cm}}$

k) $10 \times 5 = \underline{\hspace{2cm}}$

l) $4 \times 3 = \underline{\hspace{2cm}}$

m) $3 \times 4 = \underline{\hspace{2cm}}$

n) $2 \times 5 = \underline{\hspace{2cm}}$

o) $5 \times 3 = \underline{\hspace{2cm}}$

p) $9 \times 7 = \underline{\hspace{2cm}}$

q) $7 \times 2 = \underline{\hspace{2cm}}$

r) $7 \times 9 = \underline{\hspace{2cm}}$

s) $9 \times 1 = \underline{\hspace{2cm}}$

t) $5 \times 10 = \underline{\hspace{2cm}}$

u) $2 \times 0 = \underline{\hspace{2cm}}$

v) $3 \times 8 = \underline{\hspace{2cm}}$

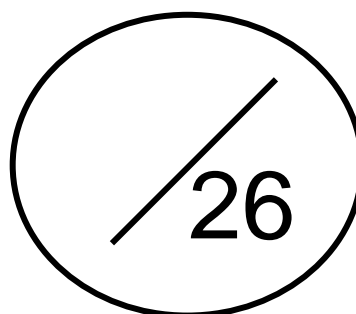
w) $4 \times 0 = \underline{\hspace{2cm}}$

x) $10 \times 6 = \underline{\hspace{2cm}}$

y) $6 \times 2 = \underline{\hspace{2cm}}$

z) $8 \times 4 = \underline{\hspace{2cm}}$

**Cá mhéad a
fuair tú ceart?**



Maths Homework 11

Complete these multiplication sums.

a) $2 \times 10 = \underline{\quad}$

b) $4 \times 10 = \underline{\quad}$

c) $4 \times 9 = \underline{\quad}$

d) $7 \times 2 = \underline{\quad}$

e) $6 \times 8 = \underline{\quad}$

f) $6 \times 1 = \underline{\quad}$

g) $8 \times 7 = \underline{\quad}$

h) $3 \times 0 = \underline{\quad}$

i) $2 \times 6 = \underline{\quad}$

j) $7 \times 1 = \underline{\quad}$

k) $10 \times 5 = \underline{\quad}$

l) $4 \times 3 = \underline{\quad}$

m) $3 \times 4 = \underline{\quad}$

n) $2 \times 5 = \underline{\quad}$

o) $5 \times 3 = \underline{\quad}$

p) $9 \times 7 = \underline{\quad}$

q) $7 \times 2 = \underline{\quad}$

r) $7 \times 9 = \underline{\quad}$

s) $9 \times 1 = \underline{\quad}$

t) $5 \times 10 = \underline{\quad}$

u) $2 \times 0 = \underline{\quad}$

v) $3 \times 8 = \underline{\quad}$

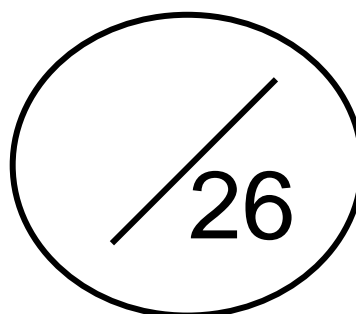
w) $4 \times 0 = \underline{\quad}$

x) $10 \times 6 = \underline{\quad}$

y) $6 \times 2 = \underline{\quad}$

z) $8 \times 4 = \underline{\quad}$

**How many
did you get right?**



Obair Bhaile Mata 12

1. Slánaigh 75 go dtí an deich is cóngaraí. _____

2. Slánaigh 494 go dtí an céad is cóngaraí. _____

3. Cad é an uimhir atá 100 **níos mó** ná 7942? _____

4. Cad é suim iomlán na n-uimhreacha seo thíos?

8 mílte, 0 céadta, 9 deiceanna agus 1 aonad = _____

5. Scríobh an uimhir 8643 i bhfocail.

6. Scríobh an uimhir *sé mhíle, ceithre chéad seasca a seacht* i bhfigiúirí.

7. Cá mhéad airgid atá léirithe thíos?



8. Cad é an t-am atá léirithe ar an chlog seo thíos?



Maths Homework 12

1. Round 75 to the nearest ten. _____

2. Round 494 to the nearest hundred. _____

3. What number is 100 **more than** 7942? _____

4. What is the sum of the following numbers below?

8 thousands, 0 hundreds, 9 tens and 1 unit = _____

5. Write the number 8643 in words.

6. Write the number *six thousand, four hundred and sixty seven* in figures.

7. How much money is shown below?



8. What time is shown on the clock below?



Obair Bhaile Mata 13

Déan na suimeanna seo.

a)

$$\begin{array}{r} \text{C D A} \\ 1\ 7\ 8 \\ +\ 1\ 2\ 7 \\ \hline \\ \hline \end{array}$$

b)

$$\begin{array}{r} \text{C D A} \\ 2\ 8\ 2 \\ +\ 1\ 5\ 9 \\ \hline \\ \hline \end{array}$$

c)

$$\begin{array}{r} \text{C D A} \\ 3\ 6\ 1 \\ +\ 2\ 7\ 5 \\ \hline \\ \hline \end{array}$$

d)

$$\begin{array}{r} \text{C D A} \\ 4\ 8\ 5 \\ +\ 3\ 2\ 2 \\ \hline \\ \hline \end{array}$$

e)

$$\begin{array}{r} \text{C D A} \\ 5\ 9\ 9 \\ +\ 4\ 4\ 2 \\ \hline \\ \hline \end{array}$$

f)

$$\begin{array}{r} \text{C D A} \\ 6\ 6\ 7 \\ +\ 3\ 3\ 7 \\ \hline \\ \hline \end{array}$$

g)

$$\begin{array}{r} \text{C D A} \\ 7\ 8\ 9 \\ +\ 1\ 4\ 3 \\ \hline \\ \hline \end{array}$$

h)

$$\begin{array}{r} \text{C D A} \\ 8\ 4\ 6 \\ +\ 1\ 5\ 9 \\ \hline \\ \hline \end{array}$$

i)

$$\begin{array}{r} \text{C D A} \\ 9\ 5\ 3 \\ +\ 1\ 7\ 9 \\ \hline \\ \hline \end{array}$$

j)

$$\begin{array}{r} \text{C D A} \\ 8\ 5\ 8 \\ +\ 2\ 2\ 6 \\ \hline \\ \hline \end{array}$$

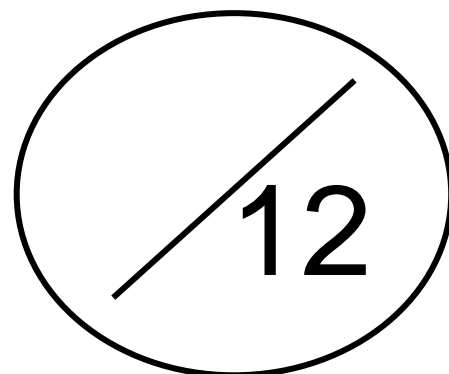
k)

$$\begin{array}{r} \text{C D A} \\ 7\ 4\ 8 \\ +\ 5\ 2\ 5 \\ \hline \\ \hline \end{array}$$

l)

$$\begin{array}{r} \text{C D A} \\ 9\ 5\ 8 \\ +\ 5\ 8\ 0 \\ \hline \\ \hline \end{array}$$

Cá mhéad a fuair tú ceart?



Maths Homework 13

Complete these addition sums.

a)

$$\begin{array}{r} \text{H T U} \\ 178 \\ + 127 \\ \hline \\ \hline \end{array}$$

b)

$$\begin{array}{r} \text{H T U} \\ 282 \\ + 159 \\ \hline \\ \hline \end{array}$$

c)

$$\begin{array}{r} \text{H T U} \\ 361 \\ + 275 \\ \hline \\ \hline \end{array}$$

d)

$$\begin{array}{r} \text{H T U} \\ 485 \\ + 322 \\ \hline \\ \hline \end{array}$$

e)

$$\begin{array}{r} \text{H T U} \\ 599 \\ + 442 \\ \hline \\ \hline \end{array}$$

f)

$$\begin{array}{r} \text{H T U} \\ 667 \\ + 337 \\ \hline \\ \hline \end{array}$$

g)

$$\begin{array}{r} \text{H T U} \\ 789 \\ + 143 \\ \hline \\ \hline \end{array}$$

h)

$$\begin{array}{r} \text{H T U} \\ 846 \\ + 159 \\ \hline \\ \hline \end{array}$$

i)

$$\begin{array}{r} \text{H T U} \\ 953 \\ + 179 \\ \hline \\ \hline \end{array}$$

j)

$$\begin{array}{r} \text{H T U} \\ 858 \\ + 226 \\ \hline \\ \hline \end{array}$$

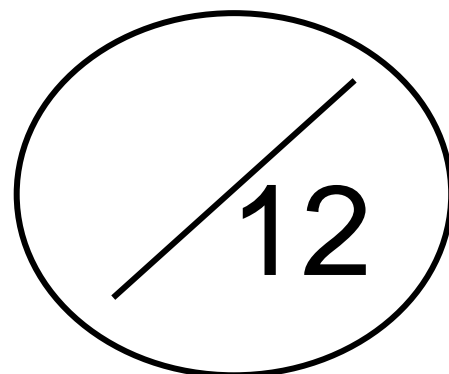
k)

$$\begin{array}{r} \text{H T U} \\ 748 \\ + 525 \\ \hline \\ \hline \end{array}$$

l)

$$\begin{array}{r} \text{H T U} \\ 958 \\ + 580 \\ \hline \\ \hline \end{array}$$

**How many
did you get right?**



Obair Bhaile Mata 14

Déan na suimeanna dealaithe seo.

a)

$$\begin{array}{r} \text{C D A} \\ 226 \\ - 127 \\ \hline \\ \hline \end{array}$$

b)

$$\begin{array}{r} \text{C D A} \\ 383 \\ - 155 \\ \hline \\ \hline \end{array}$$

c)

$$\begin{array}{r} \text{C D A} \\ 469 \\ - 294 \\ \hline \\ \hline \end{array}$$

d)

$$\begin{array}{r} \text{C D A} \\ 528 \\ - 384 \\ \hline \\ \hline \end{array}$$

e)

$$\begin{array}{r} \text{C D A} \\ 650 \\ - 489 \\ \hline \\ \hline \end{array}$$

f)

$$\begin{array}{r} \text{C D A} \\ 779 \\ - 413 \\ \hline \\ \hline \end{array}$$

g)

$$\begin{array}{r} \text{C D A} \\ 878 \\ - 354 \\ \hline \\ \hline \end{array}$$

h)

$$\begin{array}{r} \text{C D A} \\ 930 \\ - 668 \\ \hline \\ \hline \end{array}$$

i)

$$\begin{array}{r} \text{C D A} \\ 943 \\ - 739 \\ \hline \\ \hline \end{array}$$

j)

$$\begin{array}{r} \text{C D A} \\ 894 \\ - 577 \\ \hline \\ \hline \end{array}$$


k)

$$\begin{array}{r} \text{C D A} \\ 709 \\ - 340 \\ \hline \\ \hline \end{array}$$

l)

$$\begin{array}{r} \text{C D A} \\ 609 \\ - 439 \\ \hline \\ \hline \end{array}$$

Cá mhéad a fuair tú ceart?



Maths Homework 14

Complete these subtraction sums.

a)

	H	T	U
	2	2	6
-	1	2	7
<hr/>			
<hr/>			

b)

	H	T	U
	3	8	3
-	1	5	5
<hr/>			
<hr/>			

c)

	H	T	U
	4	6	9
-	2	9	4
<hr/>			
<hr/>			

d)

	H	T	U
	5	2	8
-	3	8	4
<hr/>			
<hr/>			

e)

	H	T	U
	6	5	0
-	4	8	9
<hr/>			
<hr/>			

f)

	H	T	U
	7	7	9
-	4	1	3
<hr/>			
<hr/>			

g)

	H	T	U
	8	7	8
-	3	5	4
<hr/>			
<hr/>			

h)

	H	T	U
	9	3	0
-	6	6	8
<hr/>			
<hr/>			

i)

	H	T	U
	9	4	3
-	7	3	9
<hr/>			
<hr/>			

j)

	H	T	U
	8	9	4
-	5	7	7
<hr/>			
<hr/>			

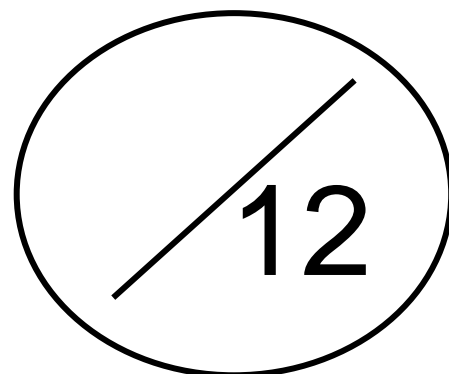
k)

	H	T	U
	7	0	9
-	3	4	0
<hr/>			
<hr/>			

l)

	H	T	U
	6	0	9
-	4	3	9
<hr/>			
<hr/>			

**How many
did you get right?**



Obair Bhaile Mata 15

Déan na suimeanna iolraithe seo.

a) $2 \times 2 = \underline{\quad}$

b) $4 \times 5 = \underline{\quad}$

c) $4 \times 2 = \underline{\quad}$

d) $7 \times 9 = \underline{\quad}$

e) $6 \times 2 = \underline{\quad}$

f) $6 \times 4 = \underline{\quad}$

g) $8 \times 4 = \underline{\quad}$

h) $3 \times 8 = \underline{\quad}$

i) $2 \times 6 = \underline{\quad}$

j) $7 \times 5 = \underline{\quad}$

k) $10 \times 8 = \underline{\quad}$

l) $4 \times 10 = \underline{\quad}$

m) $3 \times 2 = \underline{\quad}$

n) $2 \times 0 = \underline{\quad}$

o) $5 \times 7 = \underline{\quad}$

p) $9 \times 5 = \underline{\quad}$

q) $7 \times 8 = \underline{\quad}$

r) $7 \times 2 = \underline{\quad}$

s) $9 \times 3 = \underline{\quad}$

t) $5 \times 4 = \underline{\quad}$

u) $2 \times 5 = \underline{\quad}$

v) $3 \times 0 = \underline{\quad}$


w) $4 \times 2 = \underline{\quad}$

x) $10 \times 6 = \underline{\quad}$

y) $6 \times 8 = \underline{\quad}$

z) $8 \times 7 = \underline{\quad}$

**Cá mhéad a
fuair tú ceart?**



Maths Homework 15

Complete these multiplication sums.

a) $2 \times 2 = \underline{\quad}$

b) $4 \times 5 = \underline{\quad}$

c) $4 \times 2 = \underline{\quad}$

d) $7 \times 9 = \underline{\quad}$

e) $6 \times 2 = \underline{\quad}$

f) $6 \times 4 = \underline{\quad}$

g) $8 \times 4 = \underline{\quad}$

h) $3 \times 8 = \underline{\quad}$

i) $2 \times 6 = \underline{\quad}$

j) $7 \times 5 = \underline{\quad}$

k) $10 \times 8 = \underline{\quad}$

l) $4 \times 10 = \underline{\quad}$

m) $3 \times 2 = \underline{\quad}$

n) $2 \times 0 = \underline{\quad}$

o) $5 \times 7 = \underline{\quad}$

p) $9 \times 5 = \underline{\quad}$

q) $7 \times 8 = \underline{\quad}$

r) $7 \times 2 = \underline{\quad}$

s) $9 \times 3 = \underline{\quad}$

t) $5 \times 4 = \underline{\quad}$

u) $2 \times 5 = \underline{\quad}$

v) $3 \times 0 = \underline{\quad}$

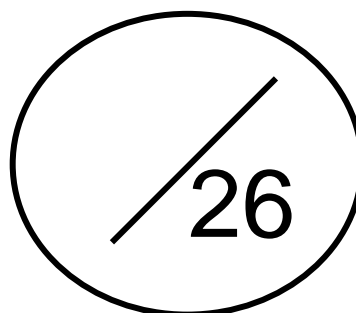
w) $4 \times 2 = \underline{\quad}$

x) $10 \times 6 = \underline{\quad}$

y) $6 \times 8 = \underline{\quad}$

z) $8 \times 7 = \underline{\quad}$

**How many
did you get right?**



Obair Bhaile Mata 16

1. Slánaigh 37 go dtí an deich is cóngaraí. _____

2. Slánaigh 420 go dtí an céad is cóngaraí. _____

3. Cad é an uimhir atá 1000 **níos mó** ná 4965? _____

4. Cad é suim iomlán na n-uimhreacha seo thíos?

5 mílte, 2 céadta, 9 deicheanna agus 2 aonaid = _____

5. Scríobh an uimhir 9653 i bhfocail.

6. Scríobh an uimhir *dhá mhíle, ocht gcéad nócha a sé* i bhfigiúirí.

7. Cá mhéad airgid atá léirithe thíos?



8. Cad é an t-am atá léirithe ar an chlog seo thíos?



Maths Homework 16

1. Round 37 to the nearest ten. _____
2. Round 420 to the nearest hundred. _____
3. What number is 1000 **more than** 4965? _____
4. What is the total of the following numbers?
5 thousands, 2 hundreds, 9 tens and 2 units = _____
5. Write the number 9653 in words

6. Write the number two thousand eight hundred and ninety six in figures.

7. How much money is shown below?



8. What time is shown on the clock below?



Obair Bhaile Mata 17

Déan na suimeanna seo.

a)
$$\begin{array}{r} \text{C D A} \\ 1\ 8\ 3 \\ + 1\ 5\ 7 \\ \hline \\ \hline \end{array}$$

b)
$$\begin{array}{r} \text{C D A} \\ 2\ 3\ 7 \\ + 1\ 4\ 4 \\ \hline \\ \hline \end{array}$$

c)
$$\begin{array}{r} \text{C D A} \\ 3\ 7\ 8 \\ + 2\ 3\ 4 \\ \hline \\ \hline \end{array}$$

d)
$$\begin{array}{r} \text{C D A} \\ 4\ 7\ 4 \\ + 3\ 6\ 8 \\ \hline \\ \hline \end{array}$$

e)
$$\begin{array}{r} \text{C D A} \\ 5\ 6\ 2 \\ + 4\ 7\ 6 \\ \hline \\ \hline \end{array}$$

f)
$$\begin{array}{r} \text{C D A} \\ 6\ 3\ 8 \\ + 3\ 8\ 4 \\ \hline \\ \hline \end{array}$$

g)
$$\begin{array}{r} \text{C D A} \\ 7\ 2\ 8 \\ + 1\ 8\ 3 \\ \hline \\ \hline \end{array}$$

h)
$$\begin{array}{r} \text{C D A} \\ 8\ 3\ 8 \\ + 1\ 8\ 7 \\ \hline \\ \hline \end{array}$$

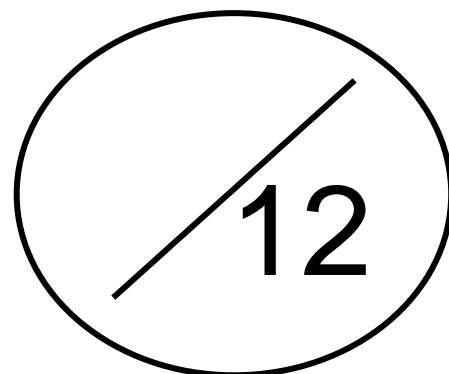
i)
$$\begin{array}{r} \text{C D A} \\ 9\ 7\ 6 \\ + 1\ 3\ 8 \\ \hline \\ \hline \end{array}$$

j)
$$\begin{array}{r} \text{C D A} \\ 8\ 4\ 9 \\ + 2\ 4\ 6 \\ \hline \\ \hline \end{array}$$

k)
$$\begin{array}{r} \text{C D A} \\ 7\ 3\ 9 \\ + 2\ 7\ 3 \\ \hline \\ \hline \end{array}$$

l)
$$\begin{array}{r} \text{C D A} \\ 5\ 7\ 4 \\ + 5\ 8\ 3 \\ \hline \\ \hline \end{array}$$

Cá mhéad a fuair tú ceart?



Maths Homework 17

Complete these addition sums.

a)

$$\begin{array}{r} \text{H T U} \\ 183 \\ + 157 \\ \hline \\ \hline \end{array}$$

b)

$$\begin{array}{r} \text{H T U} \\ 237 \\ + 144 \\ \hline \\ \hline \end{array}$$

c)

$$\begin{array}{r} \text{H T U} \\ 378 \\ + 234 \\ \hline \\ \hline \end{array}$$

d)

$$\begin{array}{r} \text{H T U} \\ 474 \\ + 368 \\ \hline \\ \hline \end{array}$$

e)

$$\begin{array}{r} \text{H T U} \\ 562 \\ + 476 \\ \hline \\ \hline \end{array}$$

f)

$$\begin{array}{r} \text{H T U} \\ 638 \\ + 384 \\ \hline \\ \hline \end{array}$$

g)

$$\begin{array}{r} \text{H T U} \\ 728 \\ + 183 \\ \hline \\ \hline \end{array}$$

h)

$$\begin{array}{r} \text{H T U} \\ 838 \\ + 187 \\ \hline \\ \hline \end{array}$$

i)

$$\begin{array}{r} \text{H T U} \\ 976 \\ + 138 \\ \hline \\ \hline \end{array}$$

j)

$$\begin{array}{r} \text{H T U} \\ 849 \\ + 246 \\ \hline \\ \hline \end{array}$$

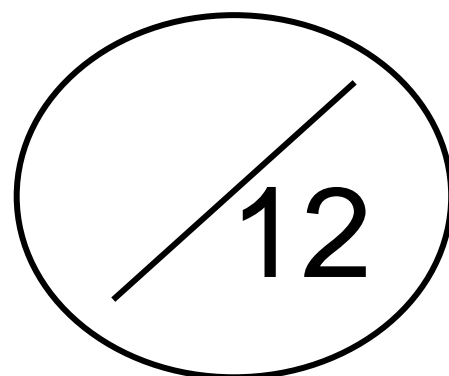
k)

$$\begin{array}{r} \text{H T U} \\ 739 \\ + 273 \\ \hline \\ \hline \end{array}$$

l)

$$\begin{array}{r} \text{H T U} \\ 574 \\ + 583 \\ \hline \\ \hline \end{array}$$

**How many
did you get right?**



Obair Bhaile Mata 18

Déan na suimeanna dealaithe seo.

a)
$$\begin{array}{r} \text{C D A} \\ 4 0 0 \\ - 1 6 0 \\ \hline \\ \hline \end{array}$$

b)
$$\begin{array}{r} \text{C D A} \\ 7 0 0 \\ - 5 2 0 \\ \hline \\ \hline \end{array}$$

c)
$$\begin{array}{r} \text{C D A} \\ 6 0 0 \\ - 3 2 0 \\ \hline \\ \hline \end{array}$$

d)
$$\begin{array}{r} \text{C D A} \\ 8 0 0 \\ - 4 3 0 \\ \hline \\ \hline \end{array}$$

e)
$$\begin{array}{r} \text{C D A} \\ 6 0 0 \\ - 2 2 0 \\ \hline \\ \hline \end{array}$$

f)
$$\begin{array}{r} \text{C D A} \\ 9 0 0 \\ - 4 5 0 \\ \hline \\ \hline \end{array}$$

g)
$$\begin{array}{r} \text{C D A} \\ 7 0 0 \\ - 3 3 0 \\ \hline \\ \hline \end{array}$$

h)
$$\begin{array}{r} \text{C D A} \\ 7 0 0 \\ - 4 2 0 \\ \hline \\ \hline \end{array}$$


i)
$$\begin{array}{r} \text{C D A} \\ 6 0 0 \\ - 3 2 0 \\ \hline \\ \hline \end{array}$$

j)
$$\begin{array}{r} \text{C D A} \\ 9 0 0 \\ - 5 1 0 \\ \hline \\ \hline \end{array}$$

k)
$$\begin{array}{r} \text{C D A} \\ 5 0 0 \\ - 2 1 0 \\ \hline \\ \hline \end{array}$$

l)
$$\begin{array}{r} \text{C D A} \\ 4 0 0 \\ - 1 1 0 \\ \hline \\ \hline \end{array}$$

Cá mhéad a fuair tú ceart?



Maths Homework 18

Complete these subtraction sums.

a)

$$\begin{array}{r} \text{H T U} \\ 4 \ 0 \ 0 \\ - 1 \ 6 \ 0 \\ \hline \\ \hline \end{array}$$

b)

$$\begin{array}{r} \text{H T U} \\ 7 \ 0 \ 0 \\ - 5 \ 2 \ 0 \\ \hline \\ \hline \end{array}$$

c)

$$\begin{array}{r} \text{H T U} \\ 6 \ 0 \ 0 \\ - 3 \ 2 \ 0 \\ \hline \\ \hline \end{array}$$

d)

$$\begin{array}{r} \text{H T U} \\ 8 \ 0 \ 0 \\ - 4 \ 3 \ 0 \\ \hline \\ \hline \end{array}$$

e)

$$\begin{array}{r} \text{H T U} \\ 6 \ 0 \ 0 \\ - 2 \ 2 \ 0 \\ \hline \\ \hline \end{array}$$

f)

$$\begin{array}{r} \text{H T U} \\ 9 \ 0 \ 0 \\ - 4 \ 5 \ 0 \\ \hline \\ \hline \end{array}$$

g)

$$\begin{array}{r} \text{H T U} \\ 7 \ 0 \ 0 \\ - 3 \ 3 \ 0 \\ \hline \\ \hline \end{array}$$

h)

$$\begin{array}{r} \text{H T U} \\ 7 \ 0 \ 0 \\ - 4 \ 2 \ 0 \\ \hline \\ \hline \end{array}$$

i)

$$\begin{array}{r} \text{H T U} \\ 6 \ 0 \ 0 \\ - 3 \ 2 \ 0 \\ \hline \\ \hline \end{array}$$

j)

$$\begin{array}{r} \text{H T U} \\ 9 \ 0 \ 0 \\ - 5 \ 1 \ 0 \\ \hline \\ \hline \end{array}$$

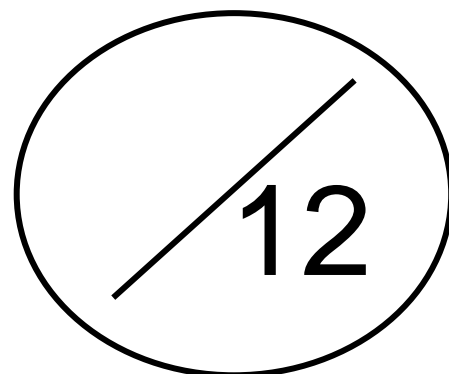
k)

$$\begin{array}{r} \text{H T U} \\ 5 \ 0 \ 0 \\ - 2 \ 1 \ 0 \\ \hline \\ \hline \end{array}$$

l)

$$\begin{array}{r} \text{H T U} \\ 4 \ 0 \ 0 \\ - 1 \ 1 \ 0 \\ \hline \\ \hline \end{array}$$

**How many
did you get right?**



Obair Bhaile Mata 19

Déan na suimeanna iolraithe seo.

a) $2 \times 3 = \underline{\quad}$

b) $4 \times 8 = \underline{\quad}$

c) $4 \times 7 = \underline{\quad}$

d) $7 \times 3 = \underline{\quad}$

e) $6 \times 3 = \underline{\quad}$

f) $6 \times 6 = \underline{\quad}$

g) $8 \times 8 = \underline{\quad}$

h) $3 \times 10 = \underline{\quad}$

i) $2 \times 2 = \underline{\quad}$

j) $7 \times 9 = \underline{\quad}$

k) $10 \times 8 = \underline{\quad}$

l) $4 \times 8 = \underline{\quad}$

m) $3 \times 4 = \underline{\quad}$

n) $2 \times 7 = \underline{\quad}$

o) $5 \times 8 = \underline{\quad}$

p) $9 \times 6 = \underline{\quad}$

q) $7 \times 7 = \underline{\quad}$

r) $7 \times 5 = \underline{\quad}$

s) $9 \times 6 = \underline{\quad}$

t) $5 \times 4 = \underline{\quad}$

u) $2 \times 3 = \underline{\quad}$

v) $3 \times 3 = \underline{\quad}$


w) $4 \times 9 = \underline{\quad}$

x) $10 \times 2 = \underline{\quad}$

y) $6 \times 2 = \underline{\quad}$

z) $8 \times 1 = \underline{\quad}$

**Cá mhéad a
fuair tú ceart?**



Maths Homework 19

Complete these multiplication sums.

a) $2 \times 3 = \underline{\quad}$

b) $4 \times 8 = \underline{\quad}$

c) $4 \times 7 = \underline{\quad}$

d) $7 \times 3 = \underline{\quad}$

e) $6 \times 3 = \underline{\quad}$

f) $6 \times 6 = \underline{\quad}$

g) $8 \times 8 = \underline{\quad}$

h) $3 \times 10 = \underline{\quad}$

i) $2 \times 2 = \underline{\quad}$

j) $7 \times 9 = \underline{\quad}$

k) $10 \times 8 = \underline{\quad}$

l) $4 \times 8 = \underline{\quad}$

m) $3 \times 4 = \underline{\quad}$

n) $2 \times 7 = \underline{\quad}$

o) $5 \times 8 = \underline{\quad}$

p) $9 \times 6 = \underline{\quad}$

q) $7 \times 7 = \underline{\quad}$

r) $7 \times 5 = \underline{\quad}$

s) $9 \times 6 = \underline{\quad}$

t) $5 \times 4 = \underline{\quad}$

u) $2 \times 3 = \underline{\quad}$

v) $3 \times 3 = \underline{\quad}$

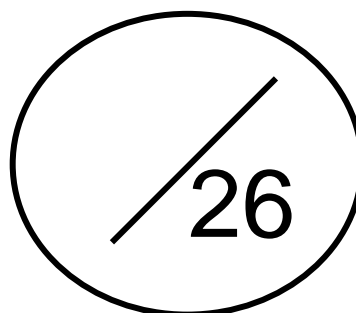
w) $4 \times 9 = \underline{\quad}$

x) $10 \times 2 = \underline{\quad}$

y) $6 \times 2 = \underline{\quad}$

z) $8 \times 1 = \underline{\quad}$

**How many
did you get right?**



Obair Bhaile Mata 20

1. Slánaigh 39 go dtí an deich is cóngaraí. _____

2. Slánaigh 278 go dtí an céad is cóngaraí. _____

3. Cad é an uimhir atá 100 **níos lú** ná 4933? _____

4. Cad é suim iomlán na n-uimhreacha seo thíos?

0 mílte, 3 céadta, 8 deiceanna agus 1 aonad = _____

5. Scríobh an uimhir 4399 i bhfocail.

6. Scríobh an uimhir *ocht míle, cúig chéad daichead a sé* i bhfigiúirí.

7. Cá mhéad airgid atá léirithe thíos?



8. Cad é an t-am atá léirithe ar an chlog seo thíos?



Maths Homework 20

1. Round 39 to the nearest ten. _____

2. Round 278 to the nearest hundred. _____

3. What number is 100 **more than** 4933? _____

4. What is the total of the following numbers?
0 thousands, 3 hundreds, 8 tens and 1 unit = _____

5. Write the number 4399 in words.

6. Write the number eight thousand, five hundred and forty six in figures.

7. How much money is shown below?



8. What time is shown on the clock below?



Obair Bhaile Mata 21

Déan na suimeanna seo.

a)

$$\begin{array}{r} \text{C D A} \\ 193 \\ + 127 \\ \hline \\ \hline \end{array}$$

b)

$$\begin{array}{r} \text{C D A} \\ 254 \\ + 127 \\ \hline \\ \hline \end{array}$$

c)

$$\begin{array}{r} \text{C D A} \\ 375 \\ + 239 \\ \hline \\ \hline \end{array}$$

d)

$$\begin{array}{r} \text{C D A} \\ 484 \\ + 338 \\ \hline \\ \hline \end{array}$$

e)

$$\begin{array}{r} \text{C D A} \\ 598 \\ + 449 \\ \hline \\ \hline \end{array}$$

f)

$$\begin{array}{r} \text{C D A} \\ 680 \\ + 337 \\ \hline \\ \hline \end{array}$$

g)

$$\begin{array}{r} \text{C D A} \\ 767 \\ + 139 \\ \hline \\ \hline \end{array}$$

h)

$$\begin{array}{r} \text{C D A} \\ 846 \\ + 179 \\ \hline \\ \hline \end{array}$$

i)

$$\begin{array}{r} \text{C D A} \\ 959 \\ + 166 \\ \hline \\ \hline \end{array}$$

j)

$$\begin{array}{r} \text{C D A} \\ 837 \\ + 799 \\ \hline \\ \hline \end{array}$$

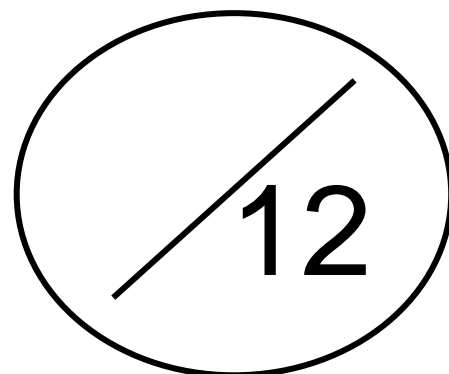
k)

$$\begin{array}{r} \text{C D A} \\ 729 \\ + 582 \\ \hline \\ \hline \end{array}$$

l)

$$\begin{array}{r} \text{C D A} \\ 565 \\ + 387 \\ \hline \\ \hline \end{array}$$

Cá mhéad a fuair tú ceart?



Maths Homework 21

Complete these addition sums.

a)

	H	T	U
	1	9	3
+	1	2	7
<hr/>			
<hr/>			

b)

	H	T	U
	2	5	4
+	1	2	7
<hr/>			
<hr/>			

c)

	H	T	U
	3	7	5
+	2	3	9
<hr/>			
<hr/>			

d)

	H	T	U
	4	8	4
+	3	3	8
<hr/>			
<hr/>			

e)

	H	T	U
	5	9	8
+	4	4	9
<hr/>			
<hr/>			

f)

	H	T	U
	6	8	0
+	3	3	7
<hr/>			
<hr/>			

g)

	H	T	U
	7	6	7
+	1	3	9
<hr/>			
<hr/>			

h)

	H	T	U
	8	4	6
+	1	7	9
<hr/>			
<hr/>			

i)

	H	T	U
	9	5	9
+	1	6	6
<hr/>			
<hr/>			

j)

	H	T	U
	8	3	7
+	7	9	9
<hr/>			
<hr/>			

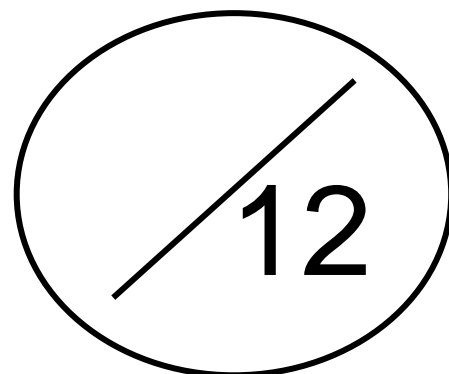
k)

	H	T	U
	7	2	9
+	5	8	2
<hr/>			
<hr/>			

l)

	H	T	U
	5	6	5
+	3	8	7
<hr/>			
<hr/>			

**How many
did you get right?**



Obair Bhaile Mata 22

Déan na suimeanna dealaithe seo.

a)

$$\begin{array}{r} \text{C D A} \\ 4 \ 0 \ 0 \\ - 1 \ 3 \ 1 \\ \hline \\ \hline \end{array}$$

b)

$$\begin{array}{r} \text{C D A} \\ 6 \ 0 \ 0 \\ - 5 \ 1 \ 6 \\ \hline \\ \hline \end{array}$$

c)

$$\begin{array}{r} \text{C D A} \\ 4 \ 0 \ 0 \\ - 2 \ 2 \ 6 \\ \hline \\ \hline \end{array}$$

d)

$$\begin{array}{r} \text{C D A} \\ 8 \ 0 \ 0 \\ - 5 \ 1 \ 5 \\ \hline \\ \hline \end{array}$$

e)

$$\begin{array}{r} \text{C D A} \\ 9 \ 0 \ 0 \\ - 5 \ 2 \ 1 \\ \hline \\ \hline \end{array}$$

f)

$$\begin{array}{r} \text{C D A} \\ 3 \ 0 \ 0 \\ - 1 \ 5 \ 1 \\ \hline \\ \hline \end{array}$$

g)

$$\begin{array}{r} \text{C D A} \\ 6 \ 0 \ 0 \\ - 3 \ 3 \ 7 \\ \hline \\ \hline \end{array}$$

h)

$$\begin{array}{r} \text{C D A} \\ 5 \ 0 \ 0 \\ - 4 \ 2 \ 1 \\ \hline \\ \hline \end{array}$$

i)

$$\begin{array}{r} \text{C D A} \\ 6 \ 0 \ 0 \\ - 3 \ 2 \ 5 \\ \hline \\ \hline \end{array}$$

j)

$$\begin{array}{r} \text{C D A} \\ 9 \ 0 \ 0 \\ - 5 \ 1 \ 6 \\ \hline \\ \hline \end{array}$$

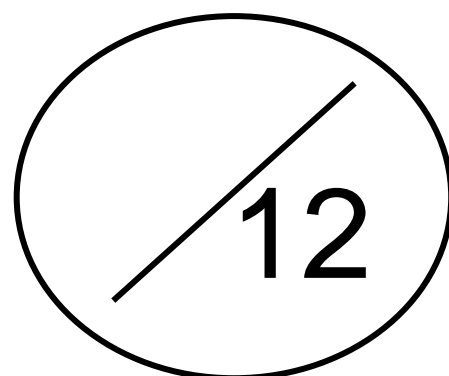
k)

$$\begin{array}{r} \text{C D A} \\ 5 \ 0 \ 0 \\ - 2 \ 1 \ 3 \\ \hline \\ \hline \end{array}$$

l)

$$\begin{array}{r} \text{C D A} \\ 4 \ 0 \ 0 \\ - 1 \ 1 \ 2 \\ \hline \\ \hline \end{array}$$

Cá mhéad a fuair tú ceart?



Maths Homework 22

Complete these subtraction sums.

a)

$$\begin{array}{r} \text{H T U} \\ 4 \ 0 \ 0 \\ - 1 \ 3 \ 1 \\ \hline \\ \hline \end{array}$$

b)

$$\begin{array}{r} \text{H T U} \\ 6 \ 0 \ 0 \\ - 5 \ 1 \ 6 \\ \hline \\ \hline \end{array}$$

c)

$$\begin{array}{r} \text{H T U} \\ 4 \ 0 \ 0 \\ - 2 \ 2 \ 6 \\ \hline \\ \hline \end{array}$$

d)

$$\begin{array}{r} \text{H T U} \\ 8 \ 0 \ 0 \\ - 5 \ 1 \ 5 \\ \hline \\ \hline \end{array}$$

e)

$$\begin{array}{r} \text{H T U} \\ 9 \ 0 \ 0 \\ - 5 \ 2 \ 1 \\ \hline \\ \hline \end{array}$$

f)

$$\begin{array}{r} \text{H T U} \\ 3 \ 0 \ 0 \\ - 1 \ 5 \ 1 \\ \hline \\ \hline \end{array}$$

g)

$$\begin{array}{r} \text{H T U} \\ 6 \ 0 \ 0 \\ - 3 \ 3 \ 7 \\ \hline \\ \hline \end{array}$$

h)

$$\begin{array}{r} \text{H T U} \\ 5 \ 0 \ 0 \\ - 4 \ 2 \ 1 \\ \hline \\ \hline \end{array}$$

i)

$$\begin{array}{r} \text{H T U} \\ 6 \ 0 \ 0 \\ - 3 \ 2 \ 5 \\ \hline \\ \hline \end{array}$$

j)

$$\begin{array}{r} \text{H T U} \\ 9 \ 0 \ 0 \\ - 5 \ 1 \ 6 \\ \hline \\ \hline \end{array}$$

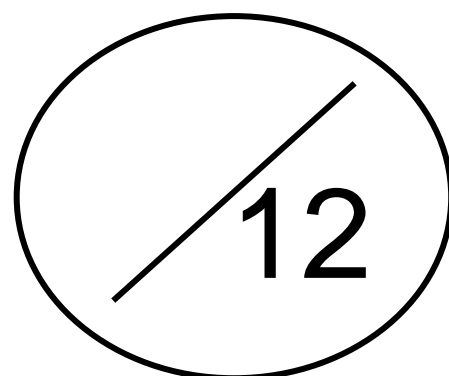
k)

$$\begin{array}{r} \text{H T U} \\ 5 \ 0 \ 0 \\ - 2 \ 1 \ 3 \\ \hline \\ \hline \end{array}$$

l)

$$\begin{array}{r} \text{H T U} \\ 4 \ 0 \ 0 \\ - 1 \ 1 \ 2 \\ \hline \\ \hline \end{array}$$

**How many
did you get right?**



Obair Bhaile Mata 23

Déan na suimeanna iolraithe seo.

a) $2 \times 2 = \underline{\quad}$

b) $4 \times 8 = \underline{\quad}$

c) $4 \times 4 = \underline{\quad}$

d) $7 \times 9 = \underline{\quad}$

e) $6 \times 6 = \underline{\quad}$

f) $6 \times 4 = \underline{\quad}$

g) $8 \times 8 = \underline{\quad}$

h) $3 \times 8 = \underline{\quad}$

i) $2 \times 0 = \underline{\quad}$

j) $7 \times 8 = \underline{\quad}$

k) $10 \times 10 = \underline{\quad}$

l) $4 \times 3 = \underline{\quad}$

m) $3 \times 3 = \underline{\quad}$

n) $2 \times 1 = \underline{\quad}$

o) $5 \times 5 = \underline{\quad}$

p) $9 \times 8 = \underline{\quad}$

q) $7 \times 7 = \underline{\quad}$

r) $7 \times 6 = \underline{\quad}$

s) $9 \times 9 = \underline{\quad}$

t) $5 \times 4 = \underline{\quad}$

u) $2 \times 3 = \underline{\quad}$

v) $3 \times 2 = \underline{\quad}$

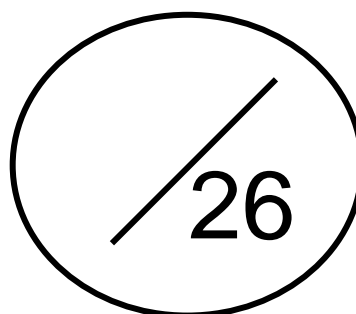
w) $4 \times 5 = \underline{\quad}$

x) $10 \times 9 = \underline{\quad}$

y) $6 \times 7 = \underline{\quad}$

z) $8 \times 9 = \underline{\quad}$

**Cá mhéad a
fuair tú ceart?**



Maths Homework 23

Complete these multiplication sums.

a) $2 \times 2 = \underline{\quad}$

b) $4 \times 8 = \underline{\quad}$

c) $4 \times 4 = \underline{\quad}$

d) $7 \times 9 = \underline{\quad}$

e) $6 \times 6 = \underline{\quad}$

f) $6 \times 4 = \underline{\quad}$

g) $8 \times 8 = \underline{\quad}$

h) $3 \times 8 = \underline{\quad}$

i) $2 \times 0 = \underline{\quad}$

j) $7 \times 8 = \underline{\quad}$

k) $10 \times 10 = \underline{\quad}$

l) $4 \times 3 = \underline{\quad}$

m) $3 \times 3 = \underline{\quad}$

n) $2 \times 1 = \underline{\quad}$

o) $5 \times 5 = \underline{\quad}$

p) $9 \times 8 = \underline{\quad}$

q) $7 \times 7 = \underline{\quad}$

r) $7 \times 6 = \underline{\quad}$

s) $9 \times 9 = \underline{\quad}$

t) $5 \times 4 = \underline{\quad}$

u) $2 \times 3 = \underline{\quad}$

v) $3 \times 2 = \underline{\quad}$

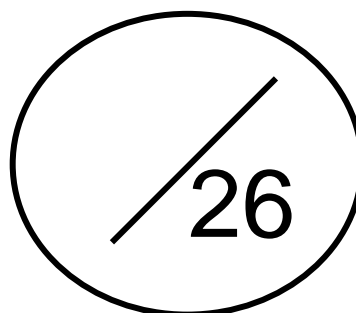
w) $4 \times 5 = \underline{\quad}$

x) $10 \times 9 = \underline{\quad}$

y) $6 \times 7 = \underline{\quad}$

z) $8 \times 9 = \underline{\quad}$

**How many
did you get right?**



Obair Bhaile Mata 24

1. Slánaigh 93 go dtí an deich is cóngaraí. _____

2. Slánaigh 750 go dtí an céad is cóngaraí. _____

3. Cad é an uimhir atá 1000 **níos lú** ná 5389? _____

4. Cad é suim iomlán na n-uimhreacha seo thíos?

1 míle, 9 céadta, 0 deiceanna agus 4 aonaid = _____

5. Scríobh an uimhir 8438 i bhfocail.

6. Scríobh an uimhir *míle, naoi gcéad fiche a hocht* i bhfigiúirí.

7. Cá mhéad airgid atá léirithe thíos?



8. Cad é an t-am atá léirithe ar an chlog seo thíos?



Maths Homework 24

1. Round 93 to the nearest ten. _____
2. Round 750 to the nearest hundred. _____
3. What number is 1000 **more than** 5389? _____

4. What is the sum of the following numbers?

1 thousand, 9 hundreds, 0 tens and 4 units = _____

5. Write the number 8438 in words.

6. Write the number *one thousand, nine hundred and twenty eight* in figures.

7. How much money is shown below?



8. What time is shown on the clock below?



