

Obair Bhaile Mata

Leabhar 9



Ainm _____ Rang _____



Cearnóg Iolraithe Multiplication Square

X	1	2	3	4	5	6	7	8	9	10
1	1	2	3	4	5	6	7	8	9	10
2	2	4	6	8	10	12	14	16	18	20
3	3	6	9	12	15	18	21	24	27	30
4	4	8	12	16	20	24	28	32	36	40
5	5	10	15	20	25	30	35	40	45	50
6	6	12	18	24	30	36	42	48	54	60
7	7	14	21	28	35	42	49	56	63	70
8	8	16	24	32	40	48	56	64	72	80
9	9	18	27	36	45	54	63	72	81	90
10	10	20	30	40	50	60	70	80	90	100

Obair Bhaile Mata 1

1. Suimigh $37 + 42 =$ _____

2. Déan an tsuim seo thíos.

	M	C	D	A
	5	3	4	7
+	2	2	3	5
	<hr/>			
	<hr/>			

3. Dealraith $75 - 31 =$ _____

4. Déan an tsuim seo thíos.

	C	D	A
	3	0	0
-	2	3	5
	<hr/>		
	<hr/>		

5. Cad é $10 \div 2 =$ _____

6. Cad é $12 \div 3 =$ _____

7. Cad é $20 \div 4 =$ _____

8. Cad é $35 \div 5 =$ _____

9. Cad é $18 \div 6 =$ _____

Maths Homework 1

1. Add $37 + 42 =$ _____

2. Complete this sum below.

	Th	H	T	U
	5	3	4	7
+	2	2	3	5
<hr/>				
<hr/>				

3. Subtract $75 - 31 =$ _____

4. Complete this sum below.

	H	T	U
	3	0	0
-	2	3	5
<hr/>			
<hr/>			

5. What is $10 \div 2 =$ _____

6. What is $12 \div 3 =$ _____

7. What is $20 \div 4 =$ _____

8. What is $35 \div 5 =$ _____

9. What is $18 \div 6 =$ _____

Obair Bhaile Mata 2

1. Slánaigh 32 go dtí an deich is cóngaraí. _____

2. Slánaigh 594 go dtí an céad is cóngaraí. _____

3. Cad é an uimhir atá 1 **níos mó** ná 6683? _____

4. Cad é suim iomlán na n-uimhreacha seo thíos?

4 mílte, 9 céadta, 4 deiceanna agus 3 aonaid = _____

5. Scríobh an uimhir 4932 i bhfocail.

6. Scríobh an uimhir *seacht míle, sé chéad caoga a naoi* i bhfigiúirí.

7. Cá mhéad airgid atá léirithe thíos?



8. Cad é an t-am atá léirithe ar an chlog seo thíos?



Maths Homework 2

1. Round 32 to the nearest ten. _____

2. Round 594 to the nearest hundred. _____

3. What number is 1 more than 6683? _____

4. What is the total of these numbers below?

4 thousands, 9 hundreds, 4 tens and 3 units = _____


5. Write the number 4932 in words.

6. Write the number *seven thousand, six hundred and fifty nine* in figures.

7. How much money is shown below?



8. What time is displayed on the clock below?



Obair Bhaile Mata 3

1. Suimigh $48 + 24 =$ _____

2. Déan an tsuim seo thíos.

	M	C	D	A
	9	3	8	9
+	8	6	7	2
	<hr/>			
	<hr/>			

3. Dealraith $82 - 37 =$ _____

4. Déan an tsuim seo thíos.

	C	D	A
	6	0	0
-	2	2	3
	<hr/>		
	<hr/>		

5. Cad é $16 \div 2 =$ _____

6. Cad é $21 \div 3 =$ _____

7. Cad é $16 \div 4 =$ _____

8. Cad é $25 \div 5 =$ _____

9. Cad é $30 \div 6 =$ _____

Maths Homework 3

1. Add $48 + 24 =$ _____

2. Complete this sum below.

	Th	H	T	U
	9	3	8	9
+	8	6	7	2
<hr/>				
<hr/>				

3. Subtract $82 - 37 =$ _____

4. Complete this sum below.

	H	T	U
	6	0	0
-	2	2	3
<hr/>			
<hr/>			

5. What is $16 \div 2 =$ _____

6. What is $21 \div 3 =$ _____

7. What is $16 \div 4 =$ _____

8. What is $25 \div 5 =$ _____

9. What is $30 \div 6 =$ _____

Obair Bhaile Mata 4

a)

$$\begin{array}{r} \text{C D A} \\ 1 5 3 \\ + 1 3 1 \\ \hline \\ \hline \end{array}$$

b)

$$\begin{array}{r} \text{C D A} \\ 2 6 9 \\ - 1 1 6 \\ \hline \\ \hline \end{array}$$

c)

$$\begin{array}{r} \text{C D A} \\ 3 9 4 \\ - 2 2 6 \\ \hline \\ \hline \end{array}$$

d)

$$\begin{array}{r} \text{C D A} \\ 4 8 4 \\ + 3 1 5 \\ \hline \\ \hline \end{array}$$

e)

$$\begin{array}{r} \text{C D A} \\ 5 8 2 \\ - 3 2 1 \\ \hline \\ \hline \end{array}$$

f)

$$\begin{array}{r} \text{C D A} \\ 6 4 9 \\ - 1 5 1 \\ \hline \\ \hline \end{array}$$

g)

$$\begin{array}{r} \text{C D A} \\ 7 6 3 \\ + 3 3 7 \\ \hline \\ \hline \end{array}$$

h)

$$\begin{array}{r} \text{C D A} \\ 8 4 7 \\ + 4 2 1 \\ \hline \\ \hline \end{array}$$

i)

$$\begin{array}{r} \text{C D A} \\ 9 3 8 \\ + 3 2 5 \\ \hline \\ \hline \end{array}$$

j)

$$\begin{array}{r} \text{C D A} \\ 8 5 0 \\ - 5 1 6 \\ \hline \\ \hline \end{array}$$

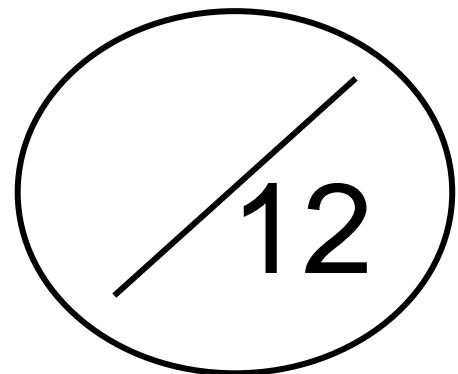
k)

$$\begin{array}{r} \text{C D A} \\ 7 4 9 \\ + 2 1 3 \\ \hline \\ \hline \end{array}$$

l)

$$\begin{array}{r} \text{C D A} \\ 6 0 0 \\ - 1 1 2 \\ \hline \\ \hline \end{array}$$

**Cá mhéad a
fuair tú ceart?**



Maths Homework 4

a)

$$\begin{array}{r} \text{H T U} \\ 153 \\ + 131 \\ \hline \\ \hline \end{array}$$

b)

$$\begin{array}{r} \text{H T U} \\ 269 \\ - 116 \\ \hline \\ \hline \end{array}$$

c)

$$\begin{array}{r} \text{H T U} \\ 394 \\ - 226 \\ \hline \\ \hline \end{array}$$

d)

$$\begin{array}{r} \text{H T U} \\ 484 \\ + 315 \\ \hline \\ \hline \end{array}$$

e)

$$\begin{array}{r} \text{H T U} \\ 582 \\ - 321 \\ \hline \\ \hline \end{array}$$

f)

$$\begin{array}{r} \text{H T U} \\ 649 \\ - 151 \\ \hline \\ \hline \end{array}$$

g)

$$\begin{array}{r} \text{H T U} \\ 763 \\ + 337 \\ \hline \\ \hline \end{array}$$

h)

$$\begin{array}{r} \text{H T U} \\ 847 \\ + 421 \\ \hline \\ \hline \end{array}$$

i)

$$\begin{array}{r} \text{H T U} \\ 938 \\ + 325 \\ \hline \\ \hline \end{array}$$

j)

$$\begin{array}{r} \text{H T U} \\ 850 \\ - 516 \\ \hline \\ \hline \end{array}$$

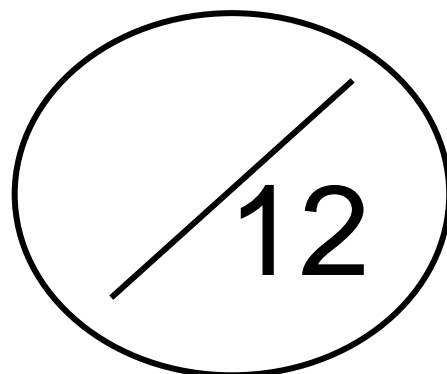
k)

$$\begin{array}{r} \text{H T U} \\ 749 \\ + 213 \\ \hline \\ \hline \end{array}$$

l)

$$\begin{array}{r} \text{H T U} \\ 600 \\ - 112 \\ \hline \\ \hline \end{array}$$

**How many did
you get right?**



Obair Bhaile Mata 5

1. Suimigh $39 + 48 =$ _____

2. Déan an tsuim seo thíos.

	M	C	D	A
	6	8	3	8
+	1	6	3	6
	<hr/>			
	<hr/>			

3. Dealraith $64 - 28 =$ _____

4. Déan an tsuim seo thíos.

	C	D	A
	8	0	0
-	4	2	8
	<hr/>		
	<hr/>		

5. Cad é $20 \div 2 =$ _____

6. Cad é $9 \div 3 =$ _____

7. Cad é $12 \div 4 =$ _____

8. Cad é $10 \div 5 =$ _____

9. Cad é $24 \div 6 =$ _____

Maths Homework 5

1. Add $39 + 48 =$ _____

2. Complete this sum below.

	Th	H	T	U
	6	8	3	8
+	1	6	3	6
<hr/>				
<hr/>				

3. Subtract $64 - 28 =$ _____

4. Complete this sum below.

	H	T	U
	8	0	0
-	4	2	8
<hr/>			
<hr/>			

5. What is $20 \div 2 =$ _____

6. What is $9 \div 3 =$ _____

7. What is $12 \div 4 =$ _____

8. What is $10 \div 5 =$ _____

9. What is $24 \div 6 =$ _____

Obair Bhaile Mata 6

1. Slánaigh 49 go dtí an deich is cóngaraí. _____

2. Slánaigh 937 go dtí an céad is cóngaraí. _____

3. Cad é an uimhir atá 10 **níos mó** ná 3864? _____

4. Cad é suim iomlán na n-uimhreacha seo thíos?

8 mílte, 2 céadta, 5 deiceanna agus 8 aonaid = _____

5. Scríobh an uimhir 8632 i bhfocail.

6. Scríobh an uimhir *cúig mhíle, naoi gcéad seachtó* i bhfigiúirí.

7. Cá mhéad airgid atá léirithe thíos?



8. Cad é an t-am atá léirithe ar an chlog seo thíos?



Maths Homework 6

1. Round 49 to the nearest ten. _____

2. Round 937 to the nearest hundred. _____

3. What number is 10 **more than** 3864? _____

4. What is the total of these numbers below?

8 thousands, 2 hundreds, 5 tens and 8 units = _____

5. Write the number 8632 in words.

6. Write the number *five thousand, nine hundred and seventy* in figures.

7. How much money is shown below?



8. What time is displayed on the clock below?



Obair Bhaile Mata 7

1. Suimigh $45 + 37 =$ _____

2. Déan an tsuim seo thíos.

	M	C	D	A
	3	1	4	9
+	2	1	7	4
	<hr/>			
	<hr/>			

3. Dealraith $65 - 48 =$ _____

4. Déan an tsuim seo thíos.

	C	D	A
	5	0	0
-	3	7	9
	<hr/>		
	<hr/>		

5. Cad é $8 \div 2 =$ _____

6. Cad é $27 \div 3 =$ _____

7. Cad é $32 \div 4 =$ _____

8. Cad é $20 \div 5 =$ _____

9. Cad é $60 \div 6 =$ _____

Maths Homework 7

1. Add $45 + 37 =$ _____

2. Complete this sum below.

	Th	H	T	U
	3	1	4	9
+	2	1	7	4
<hr/>				
<hr/>				

3. Subtract $65 - 48 =$ _____

4. Complete this sum below.

	H	T	U
	5	0	0
-	3	7	9
<hr/>			
<hr/>			

5. What is $8 \div 2 =$ _____

6. What is $27 \div 3 =$ _____

7. What is $32 \div 4 =$ _____

8. What is $20 \div 5 =$ _____

9. What is $60 \div 6 =$ _____

Obair Bhaile Mata 8

a)

$$\begin{array}{r} \text{C D A} \\ 1\ 4\ 7 \\ +\ 1\ 1\ 4 \\ \hline \\ \hline \end{array}$$

b)

$$\begin{array}{r} \text{C D A} \\ 2\ 6\ 5 \\ -\ 1\ 4\ 6 \\ \hline \\ \hline \end{array}$$

c)

$$\begin{array}{r} \text{C D A} \\ 3\ 9\ 2 \\ -\ 1\ 8\ 6 \\ \hline \\ \hline \end{array}$$

d)

$$\begin{array}{r} \text{C D A} \\ 4\ 3\ 2 \\ +\ 1\ 6\ 5 \\ \hline \\ \hline \end{array}$$

e)

$$\begin{array}{r} \text{C D A} \\ 5\ 3\ 0 \\ -\ 3\ 7\ 1 \\ \hline \\ \hline \end{array}$$

f)

$$\begin{array}{r} \text{C D A} \\ 6\ 4\ 0 \\ -\ 3\ 3\ 1 \\ \hline \\ \hline \end{array}$$

g)

$$\begin{array}{r} \text{C D A} \\ 7\ 3\ 3 \\ +\ 2\ 6\ 7 \\ \hline \\ \hline \end{array}$$

h)

$$\begin{array}{r} \text{C D A} \\ 8\ 9\ 7 \\ +\ 3\ 6\ 9 \\ \hline \\ \hline \end{array}$$

i)

$$\begin{array}{r} \text{C D A} \\ 9\ 5\ 6 \\ +\ 3\ 2\ 6 \\ \hline \\ \hline \end{array}$$

j)

$$\begin{array}{r} \text{C D A} \\ 8\ 9\ 0 \\ -\ 4\ 5\ 7 \\ \hline \\ \hline \end{array}$$

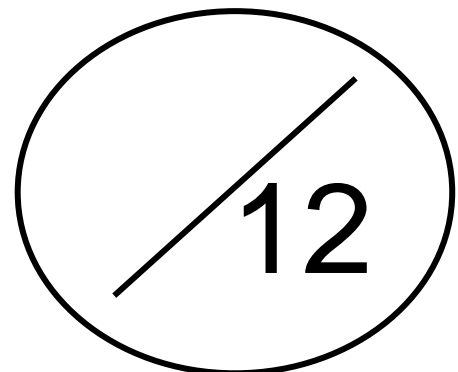
k)

$$\begin{array}{r} \text{C D A} \\ 7\ 3\ 8 \\ +\ 5\ 7\ 6 \\ \hline \\ \hline \end{array}$$

l)

$$\begin{array}{r} \text{C D A} \\ 8\ 0\ 0 \\ -\ 5\ 7\ 8 \\ \hline \\ \hline \end{array}$$

**Cá mhéad a
fuair tú ceart?**



Maths Homework 8

a)

	H	T	U
	1	4	7
+	1	1	4
<hr/>			
<hr/>			

b)

	H	T	U
	2	6	5
-	1	4	6
<hr/>			
<hr/>			

c)

	H	T	U
	3	9	2
-	1	8	6
<hr/>			
<hr/>			

d)

	H	T	U
	4	3	2
+	1	6	5
<hr/>			
<hr/>			

e)

	H	T	U
	5	3	0
-	3	7	1
<hr/>			
<hr/>			

f)

	H	T	U
	6	4	0
-	3	3	1
<hr/>			
<hr/>			

g)

	H	T	U
	7	3	3
+	2	6	7
<hr/>			
<hr/>			

h)

	H	T	U
	8	9	7
+	3	6	9
<hr/>			
<hr/>			

i)

	H	T	U
	9	5	6
+	3	2	6
<hr/>			
<hr/>			

j)

	H	T	U
	8	9	0
-	4	5	7
<hr/>			
<hr/>			

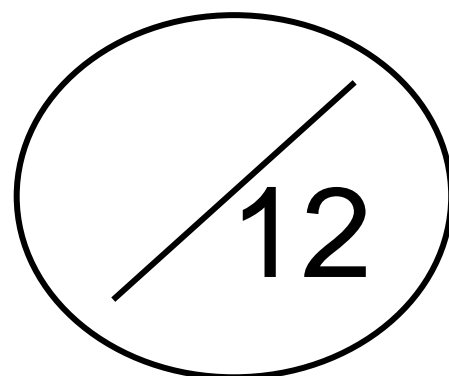
k)

	H	T	U
	7	3	8
+	5	7	6
<hr/>			
<hr/>			

l)

	H	T	U
	8	0	0
-	5	7	8
<hr/>			
<hr/>			

**How many did
you get right?**



Obair Bhaile Mata 9

1. Suimigh $63 + 18 =$ _____

2. Déan an tsuim seo thíos.

	M	C	D	A
	6	2	8	3
+	1	0	5	8
	<hr/>			
	<hr/>			

3. Dealraith $76 - 58 =$ _____

4. Déan an tsuim seo thíos.

	C	D	A
	6	0	0
-	1	6	6
	<hr/>		
	<hr/>		

5. Cad é $14 \div 2 =$ _____

6. Cad é $15 \div 3 =$ _____

7. Cad é $28 \div 4 =$ _____

8. Cad é $50 \div 5 =$ _____

9. Cad é $42 \div 6 =$ _____

Maths Homework 9

1. Add $63 + 18 =$ _____

2. Complete this sum below.

	Th	H	T	U
	6	2	8	3
+	1	0	5	8
<hr/>				
<hr/>				

3. Subtract $76 - 58 =$ _____

4. Complete this sum below.

	H	T	U
	6	0	0
-	1	6	6
<hr/>			
<hr/>			

5. What is $14 \div 2 =$ _____

6. What is $15 \div 3 =$ _____

7. What is $28 \div 4 =$ _____

8. What is $50 \div 5 =$ _____

9. What is $42 \div 6 =$ _____

Obair Bhaile Mata 10

1. Slánaigh 53 go dtí an deich is cóngaraí. _____

2. Slánaigh 953 go dtí an céad is cóngaraí. _____

3. Cad é an uimhir atá 1000 **níos mó** ná 4643? _____

4. Cad é suim iomlán na n-uimhreacha seo thíos?

7 mílte, 2 céadta, 6 deiceanna agus 3 aonad = _____

5. Scríobh an uimhir 8362 i bhfocail.

6. Scríobh an uimhir *seacht míle agus nócha a sé* i bhfigiúirí.

7. Cá mhéad airgid atá léirithe thíos?



8. Cad é an t-am atá léirithe ar an chlog seo thíos?



Maths Homework 10

1. Round 53 to the nearest ten. _____

2. Round 953 to the nearest hundred. _____

3. What number is 1000 **more than** 4643? _____

4. What is the total of these numbers below?

7 thousands, 2 hundreds, 6 tens and 3 unit = _____

5. Write the number 8362 in words.

6. Write the number *seven thousand and ninety six* in figures.

7. How much money is shown below?



8. What time is displayed on the clock below?



Obair Bhaile Mata 11

1. Suimigh $44 + 19 =$ _____

2. Déan an tsuim seo thíos.

	M	C	D	A
	7	8	3	8
+	1	1	7	6
	<hr/>			
	<hr/>			

3. Dealraith $94 - 17 =$ _____

4. Déan an tsuim seo thíos.

	C	D	A
	2	0	0
-		5	8
	<hr/>		
	<hr/>		

5. Cad é $18 \div 2 =$ _____

6. Cad é $30 \div 3 =$ _____

7. Cad é $4 \div 4 =$ _____

8. Cad é $40 \div 5 =$ _____

9. Cad é $54 \div 6 =$ _____

Maths Homework 11

1. Add $44 + 19 =$ _____

2. Complete this sum below.

	Th	H	T	U
	7	8	3	8
+	1	1	7	6
<hr/>				
<hr/>				

3. Subtract $94 - 17 =$ _____

4. Complete this sum below.

	H	T	U
	2	0	0
-		5	8
<hr/>			
<hr/>			

5. What is $18 \div 2 =$ _____

6. What is $30 \div 3 =$ _____

7. What is $4 \div 4 =$ _____

8. What is $40 \div 5 =$ _____

9. What is $54 \div 6 =$ _____

Obair Bhaile Mata 12

a)

$$\begin{array}{r} \text{C D A} \\ 183 \\ + 138 \\ \hline \\ \hline \end{array}$$

b)

$$\begin{array}{r} \text{C D A} \\ 968 \\ - 546 \\ \hline \\ \hline \end{array}$$

c)

$$\begin{array}{r} \text{C D A} \\ 389 \\ - 173 \\ \hline \\ \hline \end{array}$$

d)

$$\begin{array}{r} \text{C D A} \\ 409 \\ + 345 \\ \hline \\ \hline \end{array}$$

e)

$$\begin{array}{r} \text{C D A} \\ 562 \\ - 238 \\ \hline \\ \hline \end{array}$$

f)

$$\begin{array}{r} \text{C D A} \\ 689 \\ - 326 \\ \hline \\ \hline \end{array}$$

g)

$$\begin{array}{r} \text{C D A} \\ 760 \\ + 527 \\ \hline \\ \hline \end{array}$$

h)

$$\begin{array}{r} \text{C D A} \\ 847 \\ + 388 \\ \hline \\ \hline \end{array}$$

i)

$$\begin{array}{r} \text{C D A} \\ 488 \\ + 339 \\ \hline \\ \hline \end{array}$$

j)

$$\begin{array}{r} \text{C D A} \\ 880 \\ - 443 \\ \hline \\ \hline \end{array}$$

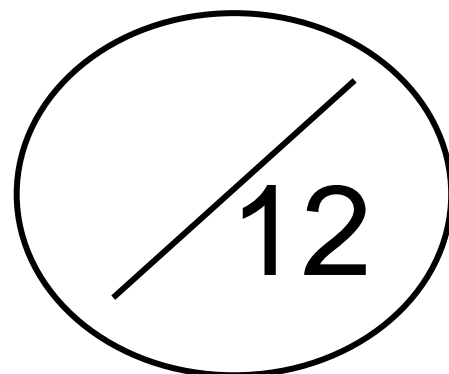
k)

$$\begin{array}{r} \text{C D A} \\ 749 \\ + 478 \\ \hline \\ \hline \end{array}$$

l)

$$\begin{array}{r} \text{C D A} \\ 600 \\ - 485 \\ \hline \\ \hline \end{array}$$

Cá mhéad a fuair tú ceart?



Maths Homework 12

a)

$$\begin{array}{r} \text{H T U} \\ 183 \\ + 138 \\ \hline \\ \hline \end{array}$$

b)

$$\begin{array}{r} \text{H T U} \\ 968 \\ - 546 \\ \hline \\ \hline \end{array}$$

c)

$$\begin{array}{r} \text{H T U} \\ 389 \\ - 173 \\ \hline \\ \hline \end{array}$$

d)

$$\begin{array}{r} \text{H T U} \\ 409 \\ + 345 \\ \hline \\ \hline \end{array}$$

e)

$$\begin{array}{r} \text{H T U} \\ 562 \\ - 238 \\ \hline \\ \hline \end{array}$$

f)

$$\begin{array}{r} \text{H T U} \\ 689 \\ - 326 \\ \hline \\ \hline \end{array}$$

g)

$$\begin{array}{r} \text{H T U} \\ 760 \\ + 527 \\ \hline \\ \hline \end{array}$$

h)

$$\begin{array}{r} \text{H T U} \\ 847 \\ + 388 \\ \hline \\ \hline \end{array}$$

i)

$$\begin{array}{r} \text{H T U} \\ 488 \\ + 339 \\ \hline \\ \hline \end{array}$$

j)

$$\begin{array}{r} \text{H T U} \\ 880 \\ - 443 \\ \hline \\ \hline \end{array}$$

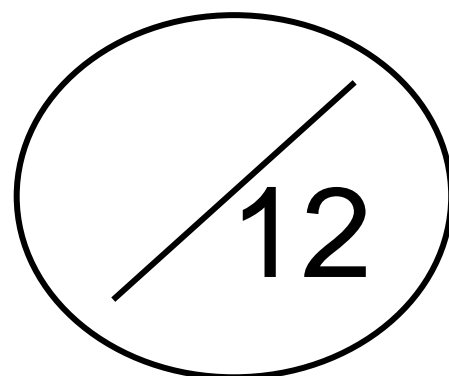
k)

$$\begin{array}{r} \text{H T U} \\ 749 \\ + 478 \\ \hline \\ \hline \end{array}$$

l)

$$\begin{array}{r} \text{H T U} \\ 600 \\ - 485 \\ \hline \\ \hline \end{array}$$

**How many did
you get right?**



Obair Bhaile Mata 13

1. Suimigh $36 + 31 =$ _____

2. Déan an tsuim seo thíos.

	M	C	D	A
	4	7	2	8
+	3	6	3	5
	<hr/>			
	<hr/>			

3. Dealraith $88 - 43 =$ _____

4. Déan an tsuim seo thíos.

	C	D	A
	7	0	0
-	5	2	7
	<hr/>		
	<hr/>		

5. Cad é $8 \div 2 =$ _____

6. Cad é $15 \div 3 =$ _____

7. Cad é $12 \div 4 =$ _____

8. Cad é $30 \div 5 =$ _____

9. Cad é $42 \div 6 =$ _____

Maths Homework 13

1. Add $36 + 31 =$ _____

2. Complete this sum below.

	Th	H	T	U
	4	7	2	8
+	3	6	3	5
<hr/>				
<hr/>				

3. Subtract $88 - 43 =$ _____

4. Complete this sum below.

	H	T	U
	7	0	0
-	5	2	7
<hr/>			
<hr/>			

5. What is $8 \div 2 =$ _____

6. What is $15 \div 3 =$ _____

7. What is $12 \div 4 =$ _____

8. What is $30 \div 5 =$ _____

9. What is $42 \div 6 =$ _____

Obair Bhaile Mata 14

1. Slánaigh 361 go dtí an deich is cóngaraí. _____

2. Slánaigh 4852 go dtí an céad is cóngaraí. _____

3. Cad é an uimhir atá 10 **níos lú** ná 5853? _____

4. Cad é suim iomlán na n-uimhreacha seo thíos?

3 mílte, 4 céadta, 8 deiceanna agus 0 aonaid = _____

5. Scríobh an uimhir 4653 i bhfocail.

6. Scríobh an uimhir *dhá mhíle, naoi gcéad ochtó a trí* i bhfigiúirí.

7. Cá mhéad airgid atá léirithe thíos?



8. Cad é an t-am atá léirithe ar an chlog seo thíos?



Maths Homework 14

1. Round 361 to the nearest ten. _____

2. Round 4852 to the nearest hundred. _____

3. What number is 10 **less than** 5853? _____

4. What is the total of these numbers below?

3 thousands, 4 hundreds, 8 tens and 0 units = _____

5. Write the number 4653 in words.

6. Write the number *two thousand, nine hundred and eighty three* in figures.

7. How much money is shown below?



8. What time is displayed on the clock below?



Obair Bhaile Mata 15

1. Suimigh $65 + 37 =$ _____

2. Déan an tsuim seo thíos.

	M	C	D	A
	7	3	7	1
+	3	4	5	5
	<hr/>			
	<hr/>			

3. Dealraith $83 - 58 =$ _____

4. Déan an tsuim seo thíos.

	C	D	A
	9	0	0
-	4	1	8
	<hr/>		
	<hr/>		

5. Cad é $4 \div 2 =$ _____

6. Cad é $30 \div 3 =$ _____

7. Cad é $32 \div 4 =$ _____

8. Cad é $20 \div 5 =$ _____

9. Cad é $54 \div 6 =$ _____

Maths Homework 15

1. Add $65 + 37 =$ _____

2. Complete this sum below.

	Th	H	T	U
	7	3	7	1
+	3	4	5	5
<hr/>				
<hr/>				

3. Subtract $83 - 58 =$ _____

4. Complete this sum below.

	H	T	U
	9	0	0
-	4	1	8
<hr/>			
<hr/>			

5. What is $4 \div 2 =$ _____

6. What is $30 \div 3 =$ _____

7. What is $32 \div 4 =$ _____

8. What is $20 \div 5 =$ _____

9. What is $54 \div 6 =$ _____

Obair Bhaile Mata 16

a)

$$\begin{array}{r} \text{C D A} \\ 1 5 7 \\ + 1 2 4 \\ \hline \\ \hline \end{array}$$

b)

$$\begin{array}{r} \text{C D A} \\ 7 9 0 \\ - 2 7 5 \\ \hline \\ \hline \end{array}$$

c)

$$\begin{array}{r} \text{C D A} \\ 3 9 8 \\ - 1 5 7 \\ \hline \\ \hline \end{array}$$

d)

$$\begin{array}{r} \text{C D A} \\ 7 4 4 \\ + 5 1 0 \\ \hline \\ \hline \end{array}$$

e)

$$\begin{array}{r} \text{C D A} \\ 5 5 7 \\ - 3 6 4 \\ \hline \\ \hline \end{array}$$

f)

$$\begin{array}{r} \text{C D A} \\ 6 4 0 \\ - 4 3 1 \\ \hline \\ \hline \end{array}$$

g)

$$\begin{array}{r} \text{C D A} \\ 7 5 7 \\ + 5 7 3 \\ \hline \\ \hline \end{array}$$

h)

$$\begin{array}{r} \text{C D A} \\ 8 9 7 \\ + 5 0 6 \\ \hline \\ \hline \end{array}$$

i)

$$\begin{array}{r} \text{C D A} \\ 9 5 4 \\ + 2 8 8 \\ \hline \\ \hline \end{array}$$

j)

$$\begin{array}{r} \text{C D A} \\ 8 5 9 \\ - 4 6 6 \\ \hline \\ \hline \end{array}$$


k)

$$\begin{array}{r} \text{C D A} \\ 7 4 9 \\ + 4 6 1 \\ \hline \\ \hline \end{array}$$

l)

$$\begin{array}{r} \text{C D A} \\ 9 0 0 \\ - 6 3 5 \\ \hline \\ \hline \end{array}$$

Cá mhéad a fuair tú ceart?



Maths Homework 16

a)

$$\begin{array}{r} \text{H T U} \\ 157 \\ + 124 \\ \hline \\ \hline \end{array}$$

b)

$$\begin{array}{r} \text{H T U} \\ 790 \\ - 275 \\ \hline \\ \hline \end{array}$$

c)

$$\begin{array}{r} \text{H T U} \\ 398 \\ - 157 \\ \hline \\ \hline \end{array}$$

d)

$$\begin{array}{r} \text{H T U} \\ 744 \\ + 510 \\ \hline \\ \hline \end{array}$$

e)

$$\begin{array}{r} \text{H T U} \\ 557 \\ - 364 \\ \hline \\ \hline \end{array}$$

f)

$$\begin{array}{r} \text{H T U} \\ 640 \\ - 431 \\ \hline \\ \hline \end{array}$$

g)

$$\begin{array}{r} \text{H T U} \\ 757 \\ + 573 \\ \hline \\ \hline \end{array}$$

h)

$$\begin{array}{r} \text{H T U} \\ 897 \\ + 506 \\ \hline \\ \hline \end{array}$$

i)

$$\begin{array}{r} \text{H T U} \\ 954 \\ + 288 \\ \hline \\ \hline \end{array}$$

j)

$$\begin{array}{r} \text{H T U} \\ 859 \\ - 466 \\ \hline \\ \hline \end{array}$$

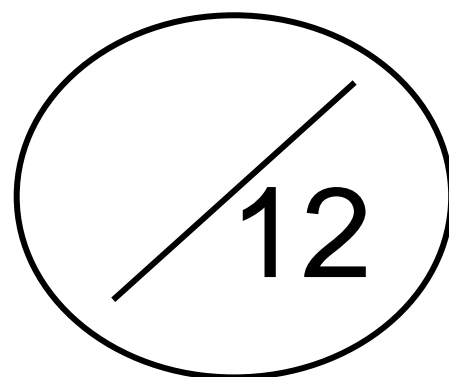
k)

$$\begin{array}{r} \text{H T U} \\ 749 \\ + 461 \\ \hline \\ \hline \end{array}$$

l)

$$\begin{array}{r} \text{H T U} \\ 900 \\ - 635 \\ \hline \\ \hline \end{array}$$

**How many did
you get right?**



Obair Bhaile Mata 17

1. Suimigh $63 + 18 =$ _____

2. Déan an tsuim seo thíos.

	M	C	D	A
	3	7	3	8
+	1	5	4	7
	<hr/>			
	<hr/>			

3. Dealraith $70 - 42 =$ _____

4. Déan an tsuim seo thíos.

	C	D	A
	4	0	0
-	1	9	3
	<hr/>		
	<hr/>		

5. Cad é $18 \div 2 =$ _____

6. Cad é $18 \div 3 =$ _____

7. Cad é $24 \div 4 =$ _____

8. Cad é $30 \div 5 =$ _____

9. Cad é $48 \div 6 =$ _____

Maths Homework 17

1. Add $63 + 18 =$ _____

2. Complete this sum below.

	Th	H	T	U
	3	7	3	8
+	1	5	4	7
<hr/>				
<hr/>				

3. Subtract $70 - 42 =$ _____

4. Complete this sum below.

	H	T	U
	4	0	0
-	1	9	3
<hr/>			
<hr/>			

5. What is $18 \div 2 =$ _____

6. What is $18 \div 3 =$ _____

7. What is $24 \div 4 =$ _____

8. What is $30 \div 5 =$ _____

9. What is $48 \div 6 =$ _____

Obair Bhaile Mata 18

1. Slánaigh 389 go dtí an deich is cóngaraí. _____

2. Slánaigh 4837 go dtí an céad is cóngaraí. _____

3. Cad é an uimhir atá 100 **níos lú** ná 4385? _____

4. Cad é suim iomlán na n-uimhreacha seo thíos?

4 mílte, 0 céadta, 9 deiceanna agus 1 aonad = _____

5. Scríobh an uimhir 6950 i bhfocail.

6. Scríobh an uimhir *ocht míle, seacht gcéad nócha a ceathair* i bhfigiúirí.

7. Cá mhéad airgid atá léirithe thíos?



8. Cad é an t-am atá léirithe ar an chlog seo thíos?



Maths Homework 18

1. Round 389 to the nearest ten. _____

2. Round 4837 to the nearest hundred. _____

3. What number is 100 **less than** 4385? _____

4. What is the total of these numbers below?

4 thousands, 0 hundreds, 9 tens and 1 unit = _____

5. Write the number 6950 in words.

6. Write the number *eight thousand, seven hundred and ninety four* in figures.

7. How much money is shown below?



8. What time is displayed on the clock below?



Obair Bhaile Mata 19

1. Suimigh $55 + 27 =$ _____

2. Déan an tsuim seo thíos.

	M	C	D	A
	9	5	8	3
+	8	7	2	4
	<hr/>			
	<hr/>			

3. Dealraith $54 - 39 =$ _____

4. Déan an tsuim seo thíos.

	C	D	A
	3	0	0
-		3	5
	<hr/>		
	<hr/>		

5. Cad é $10 \div 2 =$ _____

6. Cad é $15 \div 3 =$ _____

7. Cad é $36 \div 4 =$ _____

8. Cad é $35 \div 5 =$ _____

9. Cad é $12 \div 6 =$ _____

Maths Homework 19

1. Add $55 + 27 =$ _____

2. Complete this sum below.

	Th	H	T	U
	9	5	8	3
+	8	7	2	4
<hr/>				
<hr/>				

3. Subtract $54 - 39 =$ _____

4. Complete this sum below.

	H	T	U
	3	0	0
-		3	5
<hr/>			
<hr/>			

5. What is $10 \div 2 =$ _____

6. What is $15 \div 3 =$ _____

7. What is $36 \div 4 =$ _____

8. What is $35 \div 5 =$ _____

9. What is $12 \div 6 =$ _____

Obair Bhaile Mata 20

a)

$$\begin{array}{r} \text{C D A} \\ 172 \\ + 157 \\ \hline \\ \hline \end{array}$$

b)

$$\begin{array}{r} \text{C D A} \\ 979 \\ - 544 \\ \hline \\ \hline \end{array}$$

c)

$$\begin{array}{r} \text{C D A} \\ 359 \\ - 119 \\ \hline \\ \hline \end{array}$$

d)

$$\begin{array}{r} \text{C D A} \\ 831 \\ + 548 \\ \hline \\ \hline \end{array}$$

e)

$$\begin{array}{r} \text{C D A} \\ 585 \\ - 271 \\ \hline \\ \hline \end{array}$$

f)

$$\begin{array}{r} \text{C D A} \\ 609 \\ - 154 \\ \hline \\ \hline \end{array}$$

g)

$$\begin{array}{r} \text{C D A} \\ 718 \\ + 654 \\ \hline \\ \hline \end{array}$$

h)

$$\begin{array}{r} \text{C D A} \\ 828 \\ + 675 \\ \hline \\ \hline \end{array}$$

i)

$$\begin{array}{r} \text{C D A} \\ 495 \\ + 267 \\ \hline \\ \hline \end{array}$$

j)

$$\begin{array}{r} \text{C D A} \\ 857 \\ - 486 \\ \hline \\ \hline \end{array}$$

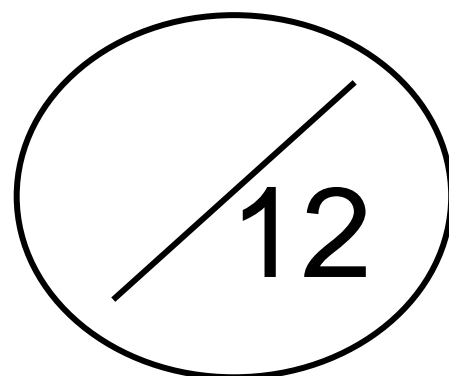
k)

$$\begin{array}{r} \text{C D A} \\ 624 \\ + 273 \\ \hline \\ \hline \end{array}$$

l)

$$\begin{array}{r} \text{C D A} \\ 300 \\ - 105 \\ \hline \\ \hline \end{array}$$

Cá mhéad a fuair tú ceart?



Maths Homework 20

a)

$$\begin{array}{r} \text{H T U} \\ 172 \\ + 157 \\ \hline \\ \hline \end{array}$$

b)

$$\begin{array}{r} \text{H T U} \\ 979 \\ - 544 \\ \hline \\ \hline \end{array}$$

c)

$$\begin{array}{r} \text{H T U} \\ 359 \\ - 119 \\ \hline \\ \hline \end{array}$$

d)

$$\begin{array}{r} \text{H T U} \\ 831 \\ + 548 \\ \hline \\ \hline \end{array}$$

e)

$$\begin{array}{r} \text{H T U} \\ 585 \\ - 271 \\ \hline \\ \hline \end{array}$$

f)

$$\begin{array}{r} \text{H T U} \\ 609 \\ - 154 \\ \hline \\ \hline \end{array}$$

g)

$$\begin{array}{r} \text{H T U} \\ 718 \\ + 654 \\ \hline \\ \hline \end{array}$$

h)

$$\begin{array}{r} \text{H T U} \\ 828 \\ + 675 \\ \hline \\ \hline \end{array}$$

i)

$$\begin{array}{r} \text{H T U} \\ 495 \\ + 267 \\ \hline \\ \hline \end{array}$$

j)

$$\begin{array}{r} \text{H T U} \\ 857 \\ - 486 \\ \hline \\ \hline \end{array}$$

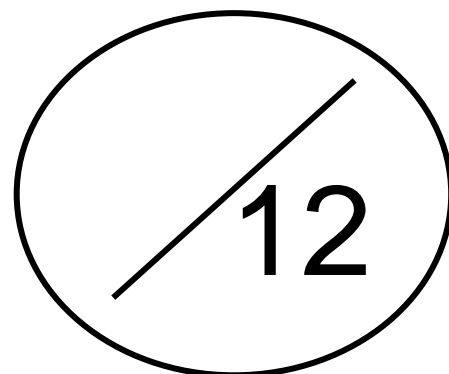
k)

$$\begin{array}{r} \text{H T U} \\ 624 \\ + 273 \\ \hline \\ \hline \end{array}$$

l)

$$\begin{array}{r} \text{H T U} \\ 300 \\ - 105 \\ \hline \\ \hline \end{array}$$

**How many did
you get right?**



Obair Bhaile Mata 21

1. Suimigh $58 + 23 =$ _____

2. Déan an tsuim seo thíos.

	M	C	D	A
	6	8	1	9
+	4	0	7	4
	<hr/>			
	<hr/>			

3. Dealraith $60 - 27 =$ _____

4. Déan an tsuim seo thíos.

	C	D	A
	8	0	0
-	4	4	9
	<hr/>		
	<hr/>		

5. Cad é $14 \div 2 =$ _____

6. Cad é $27 \div 3 =$ _____

7. Cad é $12 \div 4 =$ _____

8. Cad é $50 \div 5 =$ _____

9. Cad é $36 \div 6 =$ _____

Maths Homework 21

1. Add $58 + 23 =$ _____

2. Complete this sum below.

	Th	H	T	U
	6	8	1	9
+	4	0	7	4
<hr/>				
<hr/>				

3. Subtract $60 - 27 =$ _____

4. Complete this sum below.

	H	T	U
	8	0	0
-	4	4	9
<hr/>			
<hr/>			

5. What is $14 \div 2 =$ _____

6. What is $27 \div 3 =$ _____

7. What is $12 \div 4 =$ _____

8. What is $50 \div 5 =$ _____

9. What is $36 \div 6 =$ _____

Obair Bhaile Mata 22

1. Slánaigh 632 go dtí an deich is cóngaraí. _____

2. Slánaigh 8537 go dtí an céad is cóngaraí. _____

3. Cad é an uimhir atá 1000 **níos lú** ná 4842? _____

4. Cad é suim iomlán na n-uimhreacha seo thíos?

3 mílte, 5 céadta, 0 deiceanna agus 4 aonad = _____

5. Scríobh an uimhir 9538 i bhfocail.

6. Scríobh an uimhir *ocht míle, sé chéad ochtó a cúig* i bhfigiúirí.

7. Cá mhéad airgid atá léirithe thíos?



8. Cad é an t-am atá léirithe ar an chlog seo thíos?



Maths Homework 22

1. Round 632 to the nearest ten. _____

2. Round 8537 to the nearest hundred. _____

3. What numbers is 1000 **less than** 4842? _____

4. What is the total of these numbers below?

3 thousands, 5 hundreds, 0 tens and 4 unit = _____

5. Write the number 9538 in words.

6. Write the number *eight thousand, six hundred and eighty five* in figures.

7. How much money is shown below?



8. What time is displayed on the clock below?



Obair Bhaile Mata 23

1. Suimigh $48 + 33 =$ _____

2. Déan an tsuim seo thíos.

	M	C	D	A
	7	3	8	1
+	4	9	5	6
	<hr/>			
	<hr/>			

3. Dealraith $84 - 55 =$ _____

4. Déan an tsuim seo thíos.

	C	D	A
	6	0	0
-	4	9	7
	<hr/>		
	<hr/>		

5. Cad é $12 \div 2 =$ _____

6. Cad é $12 \div 3 =$ _____

7. Cad é $28 \div 4 =$ _____

8. Cad é $15 \div 5 =$ _____

9. Cad é $36 \div 6 =$ _____

Maths Homework 23

1. Add $48 + 33 =$ _____

2. Complete this sum below.

	Th	H	T	U
	7	3	8	1
+	4	9	5	6
<hr/>				
<hr/>				

3. Subtract $84 - 55 =$ _____

4. Complete this sum below.

	H	T	U
	6	0	0
-	4	9	7
<hr/>			
<hr/>			

5. What is $12 \div 2 =$ _____

6. What is $12 \div 3 =$ _____

7. What is $28 \div 4 =$ _____

8. What is $15 \div 5 =$ _____

9. What is $36 \div 6 =$ _____

Obair Bhaile Mata 24

a)

$$\begin{array}{r} \text{C D A} \\ 198 \\ + 136 \\ \hline \\ \hline \end{array}$$

b)

$$\begin{array}{r} \text{C D A} \\ 729 \\ - 518 \\ \hline \\ \hline \end{array}$$

c)

$$\begin{array}{r} \text{C D A} \\ 392 \\ - 127 \\ \hline \\ \hline \end{array}$$

d)

$$\begin{array}{r} \text{C D A} \\ 734 \\ + 589 \\ \hline \\ \hline \end{array}$$

e)

$$\begin{array}{r} \text{C D A} \\ 586 \\ - 391 \\ \hline \\ \hline \end{array}$$

f)

$$\begin{array}{r} \text{C D A} \\ 634 \\ - 185 \\ \hline \\ \hline \end{array}$$

g)

$$\begin{array}{r} \text{C D A} \\ 767 \\ + 197 \\ \hline \\ \hline \end{array}$$

h)

$$\begin{array}{r} \text{C D A} \\ 814 \\ + 789 \\ \hline \\ \hline \end{array}$$

i)

$$\begin{array}{r} \text{C D A} \\ 949 \\ + 585 \\ \hline \\ \hline \end{array}$$

j)

$$\begin{array}{r} \text{C D A} \\ 859 \\ - 346 \\ \hline \\ \hline \end{array}$$

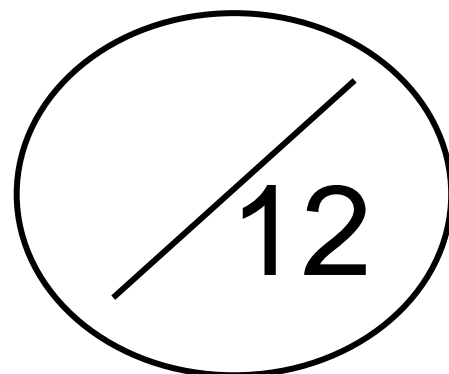
k)

$$\begin{array}{r} \text{C D A} \\ 747 \\ + 293 \\ \hline \\ \hline \end{array}$$

l)

$$\begin{array}{r} \text{C D A} \\ 800 \\ - 583 \\ \hline \\ \hline \end{array}$$

**Cá mhéad a
fuair tú ceart?**



Maths Homework 24

a)

	H	T	U
	1	9	8
+	1	3	6
<hr/>			
<hr/>			

b)

	H	T	U
	7	2	9
-	5	1	8
<hr/>			
<hr/>			

c)

	H	T	U
	3	9	2
-	1	2	7
<hr/>			
<hr/>			

d)

	H	T	U
	7	3	4
+	5	8	9
<hr/>			
<hr/>			

e)

	H	T	U
	5	8	6
-	3	9	1
<hr/>			
<hr/>			

f)

	H	T	U
	6	3	4
-	1	8	5
<hr/>			
<hr/>			

g)

	H	T	U
	7	6	7
+	1	9	7
<hr/>			
<hr/>			

h)

	H	T	U
	8	1	4
+	7	8	9
<hr/>			
<hr/>			

i)

	H	T	U
	9	4	9
+	5	8	5
<hr/>			
<hr/>			

j)

	H	T	U
	8	5	9
-	3	4	6
<hr/>			
<hr/>			

k)

	H	T	U
	7	4	7
+	2	9	3
<hr/>			
<hr/>			

l)

	H	T	U
	8	0	0
-	5	8	3
<hr/>			
<hr/>			

**How many did
you get right?**

