



1 How many corners on a square?

- (a) 0
- (b) 3
- (c) 4



2 How many sides on a circle?

- (a) 1
- (b) 3
- (c) 4




3 How many faces on a rectangle?

- (a) 2
- (b) 1
- (c) 0




4 The triangle has corners.

- (a) 3
- (b) 4
- (c) 2



5 The semicircle has straight side and curved side.

- (a) 3
- (b) 2
- (c) 1



6 One shape has no corners. What shape is it?

- (a) a circle
- (b) a triangle
- (c) a square

7 Which shape has 3 sides and 3 corners?

8 How many faces do all the shapes have?


True or False?

9 One of the shapes has more than 4 corners.

10 All of the shapes have straight sides.

ADDITIONAL Activities

- Make up your own table for the shapes below.



octagon



pentagon



hexagon

- Think about how many corners, faces and edges a sphere and a cube have.