




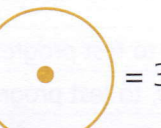


SECTION 1 | Test 1



A Answer



1  +  = _____


2  -  = _____

3  -  = 3 _____

4  +  = _____ p

5  -  = _____ p

6  -  = 4p _____ p


7  Write the name of this shape. _____

8 Which pencil is longer? _____

A 

B 

9 Which day comes after Tuesday? _____

10  What time is it? _____ o'clock

B Answer

1 $4 + 1 =$ _____

2 $14 + 1 =$ _____

3 $24 + 1 =$ _____

4 $14, 15, 16, 17, \blacksquare$ _____

5 $7 - 1 =$ _____

6 $17 - 1 =$ _____

7 $27 - 1 =$ _____

8 $27, 26, 25, 24, \blacksquare$ _____

9 $\blacksquare + 1 = 4$ _____

10 $\blacksquare - 1 = 8$ _____

C Answer

1 Add 7 and 1. _____

2 Take 1 from 5. _____

3 The total of 8 and 1 is _____

4 The difference between 1 and 6 is _____

5 The sum of 1 and 9 is _____

6 3 is 1 more than _____

7 Subtract 1 from 9. _____

8 4 minus 1 is _____

9 1 less than 8 is _____

10 1 plus 6 is _____