









SECTION 1 | Test 1



A Answer



1  +  = 7


2  -  = 7

3  -  = 3 4

4  +  = 6p

5  -  = 9p

6  -  = 4p 5p

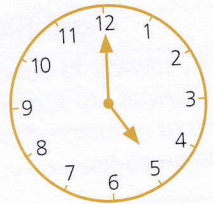
7  Write the name of this shape. square

8 Which pencil is longer? A

A 

B 

9 Which day comes after Tuesday? Wednesday

10  What time is it? 5 o'clock

B Answer

1 $4 + 1 =$ 5

2 $14 + 1 =$ 15

3 $24 + 1 =$ 25

4 14, 15, 16, 17,  18

5 $7 - 1 =$ 6

6 $17 - 1 =$ 16

7 $27 - 1 =$ 26

8 27, 26, 25, 24,  23

9  + 1 = 4 3

10  - 1 = 8 9

C Answer

1 Add 7 and 1. 8

2 Take 1 from 5. 4

3 The total of 8 and 1 is 9

4 The difference between 1 and 6 is 5

5 The sum of 1 and 9 is 10

6 3 is 1 more than 2

7 Subtract 1 from 9. 8

8 4 minus 1 is 3

9 1 less than 8 is 7

10 1 plus 6 is 7