

Sióg na bhFiacla



1. Cén dath atá ar ghruaig Shíofra?
(b) Tá dath bándearg ar ghruaig Shíofra.
2. Cá háit a bhfuil Síofra ina cónaí?
(c) Tá Síofra ina cónaí sa spéir.
3. Cá huair a bhíonn Síofra múscailte?
(b) Bíonn Síofra múscailte san oíche.
4. Cé acu atá fíor?
(a) Tá Síofra ábalta eitilt.
5. Cén fáth nach bhfeiceann na páistí Síofra?
(a) Ní feiceann na páistí Síofra mar bíonn sí iontach ciúin.
6. Cén fáth a bhfuil dúil mhór ag páistí i Síofra, do bharúil?
(b) I mo bharúil, tá dúil mhór ag páistí i Síofra mar fágann sí bronntanas dóibh.

Mata

1a. An Luan

Counting in 5's

Complete the following sequences:

- a) 5 10 15 **20** 25 **30** f) 55 50 45 **40** 35 30
- b) 35 30 **25** 20 **15** 10 g) 35 40 **45** 50 **55** 60
- c) **20** 25 30 35 **40** 45 h) 65 **60** **55** 50 45 40
- d) 45 **40** **35** 30 25 20 i) 25 **30** 35 40 45 50
- e) 15 **20** 25 30 **35** 40 j) 75 70 **65** **60** 55 50

Complete the number square below:

1	2	3	4	5	6	7	8	9	10
11	12	13	14	15	16	17	18	19	20
21	22	23	24	25	26	27	28	29	30
31	32	33	34	35	36	37	38	39	40
41	42	43	44	45	46	47	48	49	50
51	52	53	54	55	56	57	58	59	60
61	62	63	64	65	66	67	68	69	70
71	72	73	74	75	76	77	78	79	80
81	82	83	84	85	86	87	88	89	90
91	92	93	94	95	96	97	98	99	100



Challenge:

When you count in 5's, which numbers are odd and which are even? What do you notice?

It goes odd, even, odd, etc


Freagraí - 27ú Aibreán - 1ú Bealtaine

1b. An Luan



2a. An Mháirt

Líon isteach na bearnaí



Lean ar aghaidh leis an phatrún

- a) 5, 10, 15, 20, 25, 35, 40, 45
- b) 50, 45, 40, 35, 30, 25, 20, 15
- c) 55, 60, 65, 70, 75, 80, 85, 90
- d) 22, 27, 32, 37, 42, 47, 52, 57
- e) 44, 49, 54, 59, 64, 69, 74, 79
- f) 10, 15, 20, 25, 30, 35, 40, 45
- g) 100, 95, 90, 85, 80 75, 70, 65
- h) 38, 43, 48, 53, 58, 63, 68, 73

Dathaigh isteach na cúigeanna










Freagraí - 27ú Aibreán - 1ú Bealtaine

2b. An Mháirt

Cá mhéad airgid atá ann anseo?

1

	<input type="text" value="30p"/>
	<input type="text" value="20p"/>
	<input type="text" value="25p"/>
	<input type="text" value="45p"/>
	<input type="text" value="40p"/>
	<input type="text" value="35p"/>
	<input type="text" value="50p"/>







Freagraí - 27ú Aibreán - 1ú Bealtaine

3a. An Chéadaoin

Úsáid dúbailtí chun na fadhbanna seo a réiteach

(a) $1 + 1 = 2$	→	$\frac{1}{2}$ de 2 = 1
(b) $2 + 2 = 4$	→	$\frac{1}{2}$ de 4 = 2
(c) $3 + 3 = 6$	→	$\frac{1}{2}$ de 6 = 3
(d) $4 + 4 = 8$	→	$\frac{1}{2}$ de 8 = 4
(e) $5 + 5 = 10$	→	$\frac{1}{2}$ de 10 = 5
(f) $6 + 6 = 12$	→	$\frac{1}{2}$ de 12 = 6
(g) $7 + 7 = 14$	→	$\frac{1}{2}$ de 14 = 7
(h) $8 + 8 = 16$	→	$\frac{1}{2}$ de 16 = 8
(i) $9 + 9 = 18$	→	$\frac{1}{2}$ de 18 = 9
(j) $10 + 10 = 20$	→	$\frac{1}{2}$ de 20 = 10

Cuir dath ar leath gach tacair:

(a)  $\frac{1}{2}$ de 14 é 7	(b)  $\frac{1}{2}$ de 16 é 8	(c)  $\frac{1}{2}$ de 4 é 2
(d)  $\frac{1}{2}$ de 8 é 4	(e)  $\frac{1}{2}$ de 18 é 9	(f)  $\frac{1}{2}$ de 10 é 5

3b. An Chéadaoin

An bhfuil na dúbailtí ar eolais agat?













Má tá... thig leat na gardhúbailtí a dhéanamh!

$4 + 4 = 8$	$3 + 3 = 6$	$6 + 6 = 12$
$4 + 3 = 7$	$3 + 4 = 7$	$6 + 5 = 11$
$5 + 5 = 10$	$2 + 2 = 4$	$7 + 7 = 14$
$5 + 6 = 11$	$2 + 3 = 5$	$7 + 8 = 15$
$1 + 1 = 2$	$10 + 10 = 20$	$8 + 8 = 16$
$1 + 2 = 3$	$10 + 11 = 21$	$8 + 9 = 17$

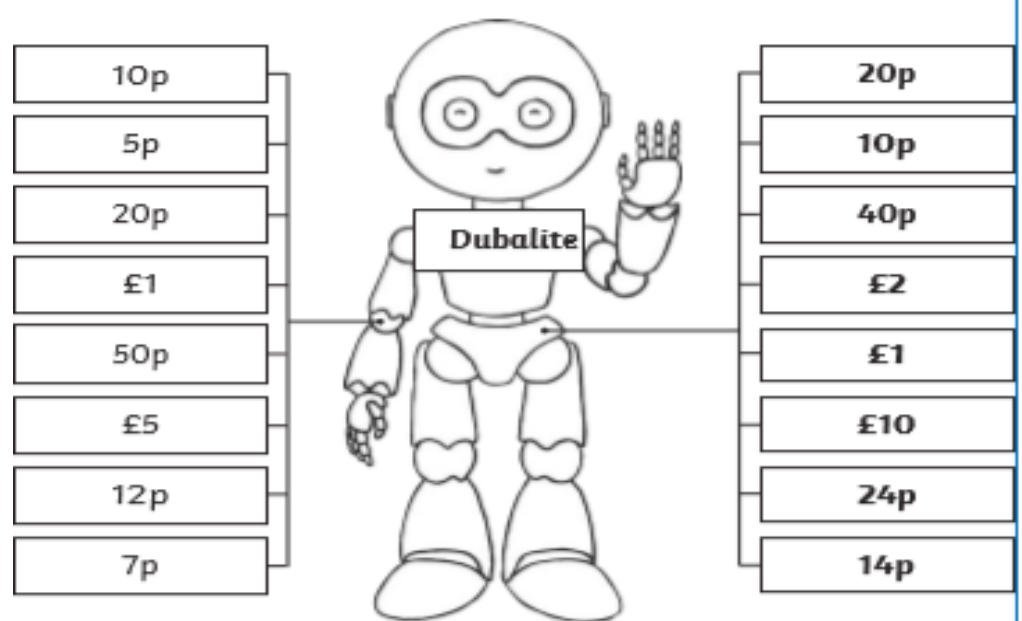
3c. An Chéadaoin

Dísle Dúbailte

		$1+1=2$
		$2+2=4$
		$3+3=6$
		$4+4=8$
		$5+5=10$

4a. An Déardaoin

Dúbailtí agus Gardhúbailtí



10p	20p
5p	10p
20p	40p
£1	£2
50p	£1
£5	£10
12p	24p
7p	14p


Dúshlán - Bain úsáid as dúbailte furasta agus ansin déan na suimeanna seo!

- | | |
|---------------------|---------------------|
| 1) $12 + 13 = 25$ | 2) $21 + 20 = 41$ |
| 3) $21 + 22 = 43$ | 4) $32 + 31 = 62$ |
| 5) $30 + 31 = 61$ | 6) $41 + 42 = 83$ |
| 7) $40 + 43 = 83$ | 8) $50 + 52 = 102$ |
| 9) $53 + 51 = 101$ | 10) $43 + 41 = 84$ |
| 11) $53 + 50 = 103$ | 12) $50 + 55 = 105$ |

Freagraí - 27ú Aibreán - 1ú Bealtaine

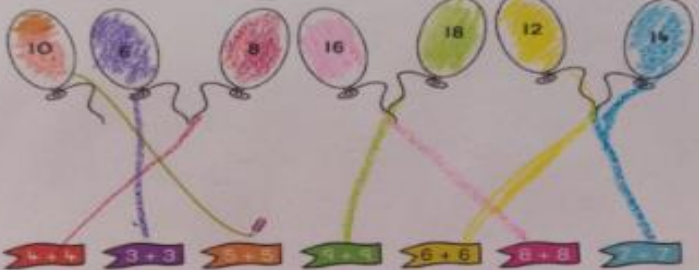
4b. An Déardaoin

Dathaigh isteach na dúbailte:




$3+4$	$4+4$	$4+5$	$7+7$	$8+9$	$6+7$
$3+3$	$2+3$	$8+9$	$6+6$	$5+6$	$7+8$

Dathaigh agus meaitseáil:



Suimigh:

1. $3 + 3 = 6$	1. $9 + 9 = 18$
2. $6 + 6 = 12$	2. $5 + 5 = 10$
3. $7 + 7 = 14$	3. $6 + 6 = 12$
4. $8 + 8 = 16$	4. $7 + 7 = 14$
5. $4 + 4 = 8$	5. $8 + 8 = 16$
6. $2 + 2 = 4$	6. $10 + 10 = 20$



Freagraí - 27ú Aibreán - 1ú Bealtaine

Mata Meabhrach

Lch 54- 55

	An Luan	An Mháirt	An Chéadaoin	An Déardaoin	An Aoine
1.	8	14	Colour rectangle	6	dice
2.	9	stones	2	Season	A
3.	6	depends of size of bucket/chair used.	October	Spring	50p
4.	$\frac{1}{2}$ past 3	40	7	12	5
5.	30 days	20	5	6	29
6.	7 th Sept	6 umbrellas	25	27	depends on bottle of juice used.
7.	6 th , 13 th , 20 th , 27 th	14	10	50p	3
8.	7	5	83	5	87
9.	40p	24	6	about $\frac{1}{2}$ full	70
10.	3	Winter	A	6	86

- Any capacity/weight questions are fully explained in school with visual/practical examples given. As the sizes of items vary, I encourage you to take lead on these questions!

English Comprehension 1

Brrr!



Lá 1 - Comprehension

1. Oymyakon is in Russia
2. It is not warm in Oymyakon in January. In January it can be 71 degrees below freezing.
3. You need to wear a cosy warm coat in Oymyakon.
4. Sometimes the toilets freeze over in Oymyakon
5. The sky is blue during the summer.

Lá 2 - Grammar - Capital Letters.

1. Today we are in the month of May.
2. Christmas is in the month of December.
3. My birthday is in the month of ____.
4. Sometimes it snows in the month of January. (Lots of months apply.)
5. A good month to go to the beach is July. (Other months can apply!)

Lá 3 Report.

There are lots of ways to have **fun** in the snow.

Some people like to **whizz** downhill on a sledge.

They can go really **fast**.

The snowiest **place** on Earth is Japan.

It is **always** fun to see snow!

English Comprehension 2

Feed the Birds



Lá 1. Comprehension.

1. The garden was covered in **snow**.
2. The birds looked all cold and **hungry**.
3. Orla made a bird **table**.
4. Daddy helped Orla to dig a **hole**.
5. Orla put bread and warm **water** on the bird table.
6. Soon, lots of **birds** can to eat and drink at the table.

Lá 2 - Yes/No and Oral work

1. The garden was covered in flowers. **NO**
2. Mammy did not help Orla make the bird table. **NO**
3. Orla put some bread and milk on the bird table. **NO**

Lá 3 = Plurals.

boys, cars, hands, girls, cups, apples, sweets, books

C. Anne has one rabbit. Carl has four **legs**.

This pirate has one leg. The spider has eight **legs**.

The boy has one head. The monster has two **heads**.

Dictionary Skills

Task 1:

Put these words into alphabetical order.



List 1	List 2	List 3
king	carrot	lamp
friend	snake	frog
rabbit	banana	zip
ant	vest	trap

1. <u>ant</u>	1. <u>banana</u>	1. <u>frog</u>
2. <u>friend</u>	2. <u>carrot</u>	2. <u>lamp</u>
3. <u>king</u>	3. <u>snake</u>	3. <u>trap</u>
4. <u>rabbit</u>	4. <u>vest</u>	4. <u>zip</u>