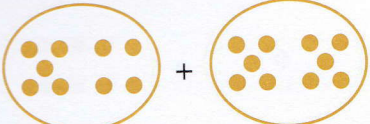
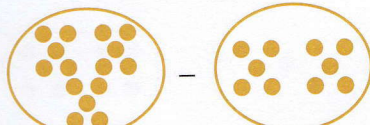
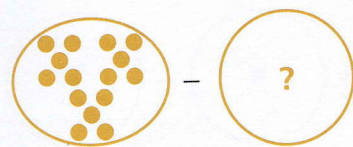



**A** Answer

1  = \_\_\_\_\_


2  = \_\_\_\_\_

3  = 10 \_\_\_\_\_


4  = \_\_\_\_\_ p

5  = \_\_\_\_\_ p

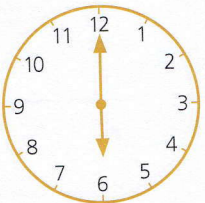
6  = 12p \_\_\_\_\_ p

7  Write the name of this shape. \_\_\_\_\_

8 Which glass is full? \_\_\_\_\_



9 Which day comes after Monday? \_\_\_\_\_

10  What time is it? \_\_\_\_\_ o'clock

**B** Answer

1  $3 + 10 =$  \_\_\_\_\_

2  $13 + 10 =$  \_\_\_\_\_

3  $23 + 10 =$  \_\_\_\_\_

4 13, 23, 33, 43, 

5  $11 - 10 =$  \_\_\_\_\_

6  $21 - 10 =$  \_\_\_\_\_

7  $31 - 10 =$  \_\_\_\_\_

8 51, 41, 31, 21, 

9  + 10 = 46

10  - 10 = 27

**C** Answer

1 Add 10 and 3. \_\_\_\_\_

2 Take 10 from 19. \_\_\_\_\_

3 The total of 10 and 5 is \_\_\_\_\_

4 The difference between 15 and 10 is \_\_\_\_\_

5 The sum of 10 and 6 is \_\_\_\_\_

6 12 is 10 more than \_\_\_\_\_

7 Subtract 10 from 18. \_\_\_\_\_

8 11 minus 10 is \_\_\_\_\_

9 10 is 4 less than \_\_\_\_\_

10 10 plus 7 is \_\_\_\_\_