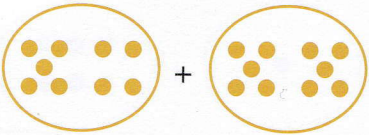
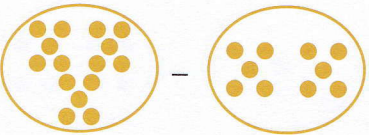
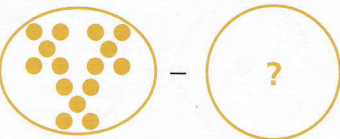


SECTION 1 | Test 3

A Answer

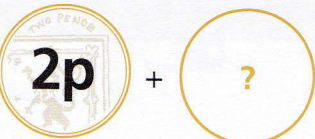
1  = 19


2  = 5

3  = 10 5

4  = 15p

5  = 10p

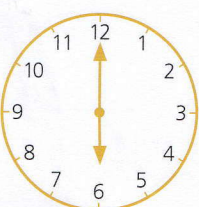
6  = 12p 10p

7  Write the name of this shape. rectangle/oblong

8 Which glass is full? B



9 Which day comes after Monday? Tuesday

10  What time is it? 6 o'clock

B Answer

1 $3 + 10 =$ 13

2 $13 + 10 =$ 23

3 $23 + 10 =$ 33

4 $13, 23, 33, 43,$ 53

5 $11 - 10 =$ 1

6 $21 - 10 =$ 11

7 $31 - 10 =$ 21

8 $51, 41, 31, 21,$ 11

9 36 $+ 10 = 46$

10 37 $- 10 = 27$

C Answer

1 Add 10 and 3. 13

2 Take 10 from 19. 9

3 The total of 10 and 5 is 15

4 The difference between 15 and 10 is 5

5 The sum of 10 and 6 is 16

6 12 is 10 more than 2

7 Subtract 10 from 18. 8

8 11 minus 10 is 1

9 10 is 4 less than 14

10 10 plus 7 is 17