

**A** Answer

1 = \_\_\_\_\_

2 = \_\_\_\_\_

3 = 2 \_\_\_\_\_

4 = \_\_\_\_\_ p

5 = \_\_\_\_\_ p

6 = 7p \_\_\_\_\_ p \_\_\_\_\_ p

7 Write the name of this shape. \_\_\_\_\_

8 Which pencil is shorter?  
 A \_\_\_\_\_  
 B \_\_\_\_\_

9 Which day comes before Friday? \_\_\_\_\_

10 What time is it? \_\_\_\_\_ o'clock

**B** Answer

1  $6 + 4 =$  \_\_\_\_\_

2  $16 + 4 =$  \_\_\_\_\_

3  $46 + 4 =$  \_\_\_\_\_

4 26, 36, 46, 56, \_\_\_\_\_

5  $10 - 3 =$  \_\_\_\_\_

6  $20 - 3 =$  \_\_\_\_\_

7  $30 - 3 =$  \_\_\_\_\_

8 67, 57, 47, 37, \_\_\_\_\_

9 \_\_\_\_\_ + 5 = 10

10  $10 -$  \_\_\_\_\_ = 9

**C** Answer

1 Add 3 and 7. \_\_\_\_\_

2 Take 9 from 10. \_\_\_\_\_

3 The total of 8 and 2 is \_\_\_\_\_

4 The difference between 5 and 10 is \_\_\_\_\_

5 The sum of 4 and 6 is \_\_\_\_\_

6 10 is 3 more than \_\_\_\_\_

7 Subtract 8 from 10. \_\_\_\_\_

8 10 minus 1 is \_\_\_\_\_


9 6 is 4 less than \_\_\_\_\_


10 2 plus 8 is \_\_\_\_\_

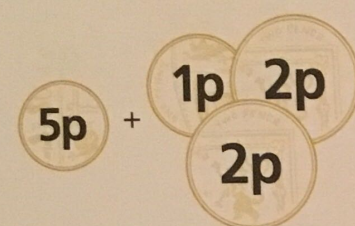



**A** Answer

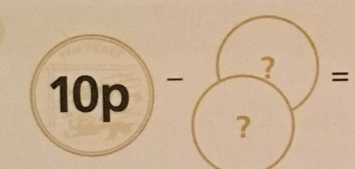
1  = \_\_\_\_\_ 10


2  = \_\_\_\_\_ 4



3  = 2 \_\_\_\_\_ 8

4  = \_\_\_\_\_ 10p


5  = \_\_\_\_\_ 5p

6  = 7p \_\_\_\_\_ 2p \_\_\_\_\_ 1p

7  Write the name of this shape. \_\_\_\_\_ circle

8 Which pencil is shorter? \_\_\_\_\_ B  
 A   
 B 

9 Which day comes before Friday? \_\_\_\_\_ Thursday

10  What time is it? \_\_\_\_\_ 1 o'clock

**B** Answer

- 1  $6 + 4 =$  \_\_\_\_\_ 10
- 2  $16 + 4 =$  \_\_\_\_\_ 20
- 3  $46 + 4 =$  \_\_\_\_\_ 50
- 4 26, 36, 46, 56, \_\_\_\_\_ 66
- 5  $10 - 3 =$  \_\_\_\_\_ 7
- 6  $20 - 3 =$  \_\_\_\_\_ 17
- 7  $30 - 3 =$  \_\_\_\_\_ 27
- 8 67, 57, 47, 37, \_\_\_\_\_ 27
- 9 \_\_\_\_\_ + 5 = 10 \_\_\_\_\_ 5
- 10  $10 -$  \_\_\_\_\_ = 9 \_\_\_\_\_ 1

**C** Answer

- 1 Add 3 and 7. \_\_\_\_\_ 10
- 2 Take 9 from 10. \_\_\_\_\_ 1
- 3 The total of 8 and 2 is \_\_\_\_\_ 10
- 4 The difference between 5 and 10 is \_\_\_\_\_ 5
- 5 The sum of 4 and 6 is \_\_\_\_\_ 10
- 6 10 is 3 more than \_\_\_\_\_ 7
- 7 Subtract 8 from 10. \_\_\_\_\_ 2
- 8 10 minus 1 is \_\_\_\_\_ 9
- 9 6 is 4 less than \_\_\_\_\_ 10
- 10 2 plus 8 is \_\_\_\_\_ 10