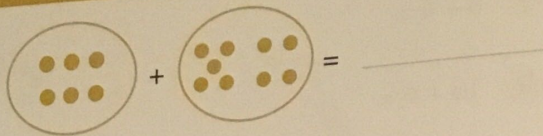
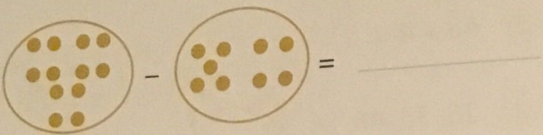
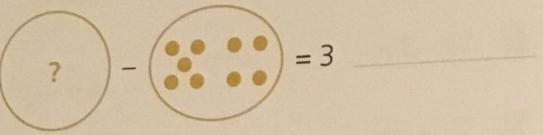


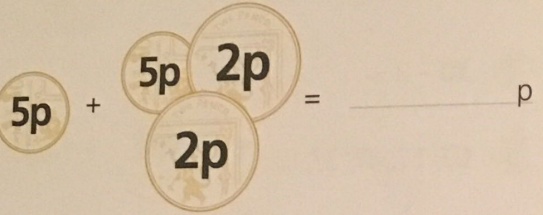
SECTION 1 | Test 5

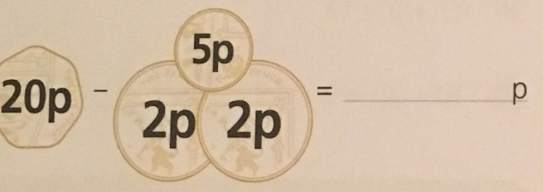
A Answer

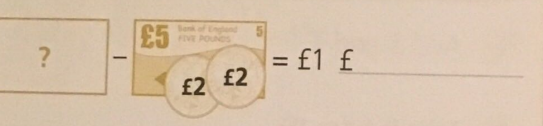
1  = _____

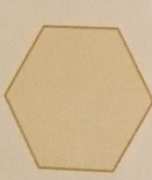
2  = _____

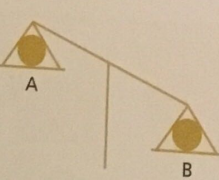
3  = 3 _____

4  = _____ p


5  = _____ p

6  = £1 £ _____

7  Write the name of this shape. _____

8  Which ball is lighter? _____

9 Which day comes after Sunday? _____

10  What time is it? _____ o'clock

B Answer

- 1 $7 + 9 =$ _____
- 2 $17 + 9 =$ _____
- 3 $27 + 9 =$ _____
- 4 9, 18, 27, 36, _____
- 5 $14 - 9 =$ _____
- 6 $24 - 9 =$ _____
- 7 $44 - 9 =$ _____
- 8 54, 45, 36, 27, _____
- 9 _____ + 9 = 15
- 10 $12 -$ _____ = 9

C Answer

- 1 Add 4 and 9. _____
- 2 Take 9 from 14. _____
- 3 The total of 9 and 5 is _____
- 4 The difference between 12 and 9 is _____
- 5 The sum of 9 and 8 is _____
- 6 12 is 9 more than _____
- 7 Subtract 9 from 13. _____
- 8 15 minus 9 is _____
- 9 9 is 7 less than _____
- 10 9 plus 3 is _____