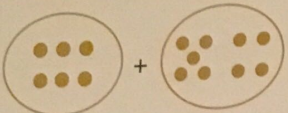
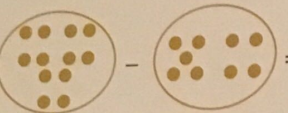



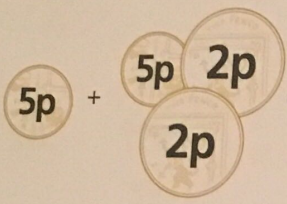
SECTION 1 | Test 5

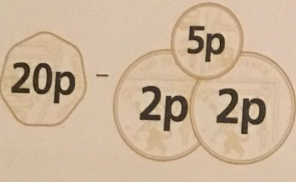
A Answer

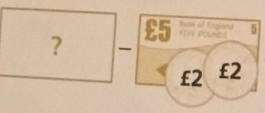
1  = _____ 15


2  = _____ 3

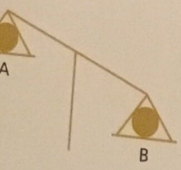
3  = 3 _____ 12

4  = _____ 14p

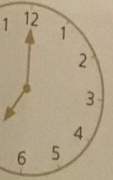
5  = _____ 11p

6  = £1 £10

7  Write the name of this shape. _____ hexagon

8  Which ball is lighter? _____ A

9 Which day comes after Sunday? _____ Monday

10  What time is it? _____ 7 o'clock

B Answer

1 $7 + 9 =$ _____ 16

2 $17 + 9 =$ _____ 26

3 $27 + 9 =$ _____ 36

4 $9, 18, 27, 36, \square$ _____ 45

5 $14 - 9 =$ _____ 5

6 $24 - 9 =$ _____ 15

7 $44 - 9 =$ _____ 35

8 $54, 45, 36, 27, \square$ _____ 18

9 $\square + 9 = 15$ _____ 6

10 $12 - \square = 9$ _____ 3

C Answer

1 Add 4 and 9. _____ 13

2 Take 9 from 14. _____ 5

3 The total of 9 and 5 is _____ 14

4 The difference between 12 and 9 is _____ 3

5 The sum of 9 and 8 is _____ 17

6 12 is 9 more than _____ 3

7 Subtract 9 from 13. _____ 4

8 15 minus 9 is _____ 6

9 9 is 7 less than _____ 16

10 9 plus 3 is _____ 12