




$$\square + \square = \square$$




$$\square + \square = \square$$




$$\square + \square = \square$$




$$\square + \square = \square$$



$$\square + \square = \square$$



$$\square + \square = \square$$



$$\square + \square = \square$$

$$2 + 1 = \square$$

$$2 + 0 = \square$$

$$0 + 2 = \square$$

$$1 + 2 = \square$$

$$1 + 1 = \square$$

$$3 + 0 = \square$$