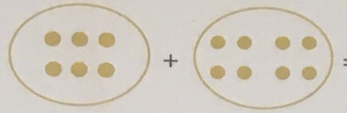


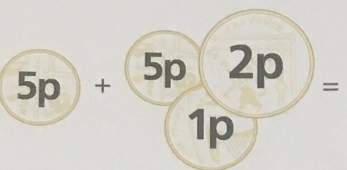


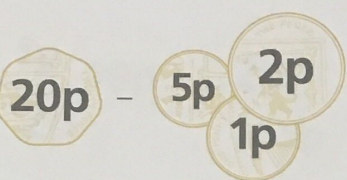
A Answer

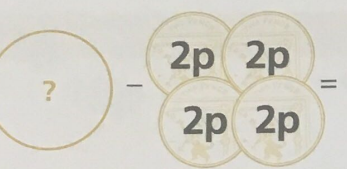
1  = _____


2  = _____


3  = 3 _____

4  = _____ p


5  = _____ p

6  = 12p _____ p

7  Write the name of this shape. _____

8  Which person is taller? _____

9 Which day comes before Thursday? _____

10  What time is it? _____ o'clock

B Answer

1 $5 + 8 =$ _____

2 $15 + 8 =$ _____

3 $35 + 8 =$ _____

4 8, 16, 24, 32, _____

5 $14 - 8 =$ _____

6 $24 - 8 =$ _____

7 $44 - 8 =$ _____

8 48, 40, 32, 24, _____

9 _____ + 8 = 15

10 $12 - \square = 8$

C Answer

1 Add 7 and 8. _____

2 Take 8 from 14. _____

3 The total of 8 and 4 is _____

4 The difference between 15 and 8 is _____

5 The sum of 8 and 3 is _____

6 12 is 8 more than _____


7 Subtract 8 from 13. _____



8 11 minus 8 is _____

9 8 is 5 less than _____





10 8 plus 6 is _____


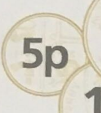
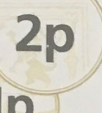

A Answer


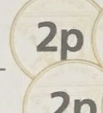
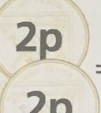
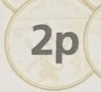
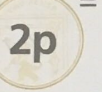
1  +  = 14


2  -  = 4

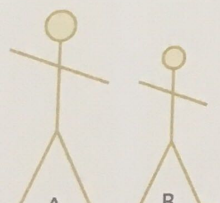
3  -  = 3 11

4  +    = 13p


5  -    = 12p

6  -     = 12p 20p

7  Write the name of this shape. pentagon

8  Which person is taller? A

9 Which day comes before Thursday? Wednesday

10  What time is it? 3 o'clock

B Answer

1 $5 + 8 =$ 13

2 $15 + 8 =$ 23

3 $35 + 8 =$ 43

4 $8, 16, 24, 32, \square$ 40

5 $14 - 8 =$ 6

6 $24 - 8 =$ 16

7 $44 - 8 =$ 36

8 $48, 40, 32, 24, \square$ 16

9 $\square + 8 = 15$ 7

10 $12 - \square = 8$ 4

C Answer

1 Add 7 and 8. 15

2 Take 8 from 14. 6

3 The total of 8 and 4 is 12

4 The difference between 15 and 8 is 7

5 The sum of 8 and 3 is 11

6 12 is 8 more than 4

7 Subtract 8 from 13. 5

8 11 minus 8 is 3

9 8 is 5 less than 13

10 8 plus 6 is 14