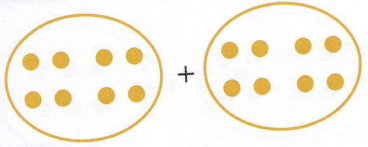
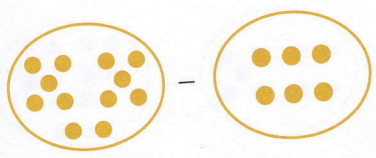
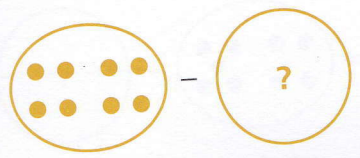


SECTION 1 | Test 7

A Answer

1  = _____

2  = _____

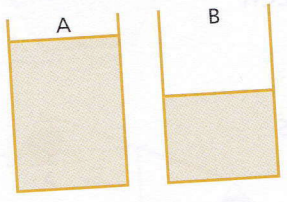
3  = 4 _____

4  = _____ p


5  = £ _____

6  = 5p _____ p

7  How much is shaded? _____

8  Which glass is half full? _____

9 If today is Monday, what was yesterday? _____

10  What time is it? _____ o'clock

B Answer

1 $6 + 6 =$ _____

2 $16 + 6 =$ _____

3 $26 + 6 =$ _____

4 1, 2, 4, 8, _____

5 $16 - 8 =$ _____

6 $26 - 8 =$ _____

7 $36 - 8 =$ _____

8 16, 8, 4, 2, _____

9 _____ + 9 = 18

10 _____ - 7 = 7

C Answer

1 Add 8 and 8. _____

2 Take 7 from 14. _____

3 The total of 5 and 5 is _____

4 The difference between 18 and 9 is _____

5 The sum of 6 and 6 is _____

6 8 is 4 more than _____

7 Subtract 5 from 10. _____

8 6 minus 3 is _____

9 7 is 7 less than _____

10 9 plus 9 is _____