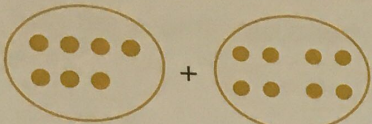


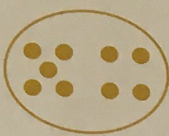



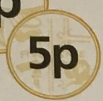






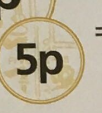
A Answer




1  + = _____

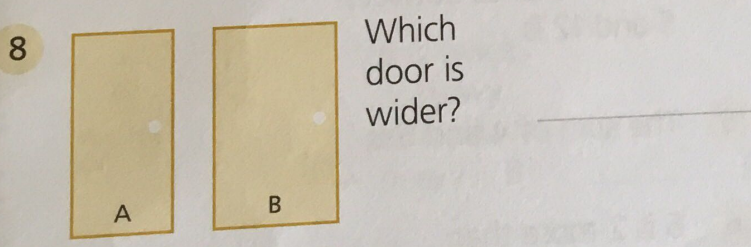
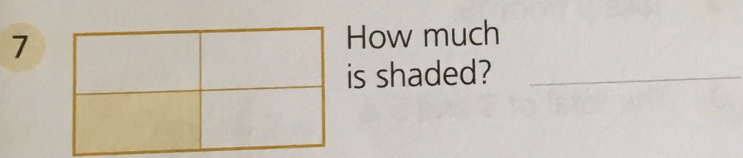
2  -  = _____

3  -  = 4 _____

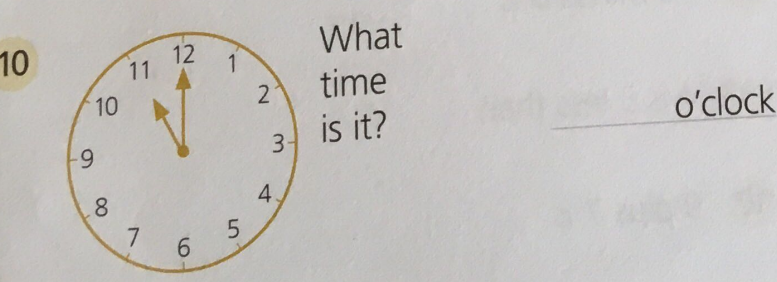
4  +  +  = _____ p

5  +  +  -  -  = _____ p

6  +  -  = 6p _____ p



9 If today is Wednesday, what was yesterday? _____



B Answer

1 $3 + 4 =$ _____

2 $13 + 4 =$ _____

3 $53 + 4 =$ _____

4 $3, 7, 11, 15, \square$ _____

5 $9 - 4 =$ _____

6 $19 - 4 =$ _____

7 $39 - 4 =$ _____

8 $29, 25, 21, 17, \square$ _____

9 $\square + 5 = 11$ _____

10 $\square - 7 = 8$ _____

C Answer

1 Add 6 and 7. _____

2 Take 9 from 19. _____

3 The total of 6 and 5 is _____

4 The difference between 5 and 9 is _____

5 The sum of 4 and 3 is _____

6 5 is 2 more than _____

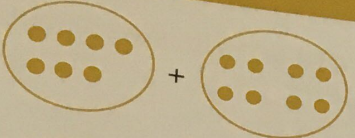
7 Subtract 7 from 15. _____


8 17 minus 8 is _____

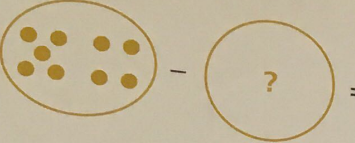
9 5 is 6 less than _____

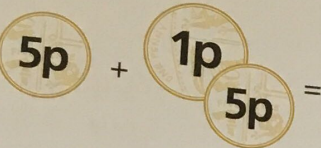
10 8 plus 7 is _____

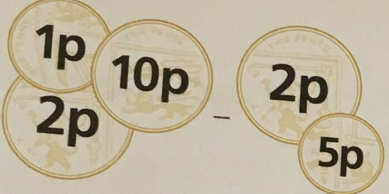
A Answer


1  = 15


2  = 8


3  = 4 5

4  = 11p


5  = 6p

6  = 6p 5p

7  How much is shaded? quarter

8  Which door is wider? B

9 If today is Wednesday, what was yesterday? Tuesday

10  What time is it? 11 o'clock

B Answer

1 $3 + 4 =$ 7

2 $13 + 4 =$ 17

3 $53 + 4 =$ 57

4 3, 7, 11, 15, 19

5 $9 - 4 =$ 5

6 $19 - 4 =$ 15

7 $39 - 4 =$ 35

8 29, 25, 21, 17, 13

9 6 + 5 = 11

10 15 - 7 = 8

C Answer

1 Add 6 and 7. 13

2 Take 9 from 19. 10

3 The total of 6 and 5 is 11

4 The difference between 5 and 9 is 4

5 The sum of 4 and 3 is 7

6 5 is 2 more than 3

7 Subtract 7 from 15. 8

8 17 minus 8 is 9

9 5 is 6 less than 11

10 8 plus 7 is 15