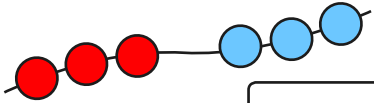


Year 1 Maths Activity Mat

2


Section 1

Write a number sentence to show how many beads there are altogether.



Section 2

Draw and colour the next 2 cars in the pattern.



Section 3

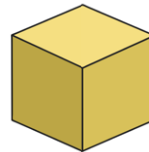
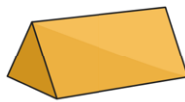
If today is Monday, what is it tomorrow?

Put a circle around the correct day.

Tuesday Wednesday Sunday

Section 5

Draw lines to match the name and the shape.




cube

triangular prism

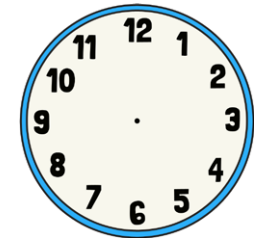
Section 6

Which jug is full?
Tick the correct one.



Section 7

Make this clock show 4 o'clock.



Section 4

Imagine seeing 1 elephant at the zoo.

How many legs would you see?

Section 8

How much money is here?

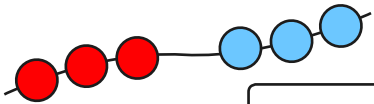


Year 1 Maths Activity Mat: 2

Answers

Section 1


Write a number sentence to show how many beads there are altogether.



$$3 + 3 = 6$$

Section 2

Draw and colour the next 2 cars in the pattern.



Section 3

If today is Monday, what is it tomorrow?

Put a circle around the correct day.

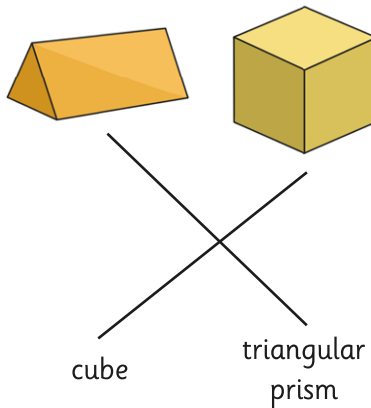
Tuesday

Wednesday

Sunday

Section 5

Draw lines to match the name and the shape.




cube

triangular prism


Section 6

Which jug is full?
Tick the correct one.



Section 7

Make this clock show 4 o'clock.



Section 4

Imagine seeing 1 elephant at the zoo.

How many legs would you see?

4

Section 8

How much money is here?



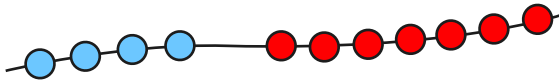
20p

Year 1 Maths Activity Mat

2


Section 1

Write a number sentence to show how many beads there are altogether.



Section 2

Draw and colour the next 2 cars in the pattern.



Section 3


If today is Tuesday, what is it tomorrow?

Put a circle around the correct day.

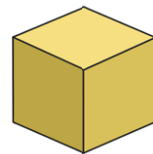
Monday Wednesday Thursday

Section 5

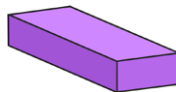
Draw lines to match the name and the shape.



cube



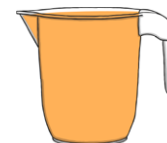
cuboid



triangular prism

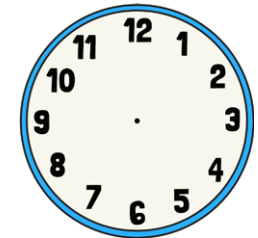
Section 6

Which jug is empty?
Tick the correct one.



Section 7

Make this clock show half past 4.



Section 4

Imagine seeing 2 elephants at the zoo.

How many legs would you see?

Section 8

How much money is here?

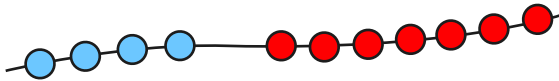


Year 1 Maths Activity Mat: 2

Answers

Section 1


Write a number sentence to show how many beads there are altogether.



$$4 + 7 = 11$$

Section 2

Draw and colour the next 2 cars in the pattern.



Section 3

If today is Tuesday, what is it tomorrow?

Put a circle around the correct day.

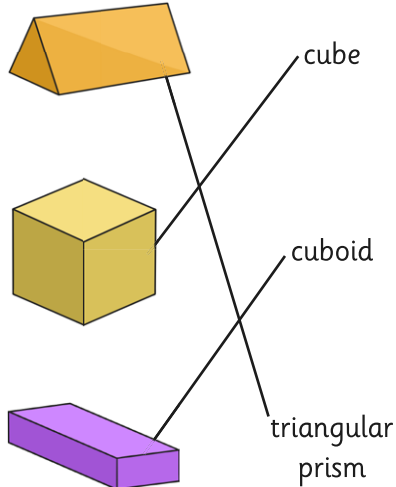
Monday

Wednesday

Thursday


Section 5

Draw lines to match the name and the shape.




Section 6

Which jug is empty?
Tick the correct one.



Section 7

Make this clock show half past 4.



Section 4

Imagine seeing 2 elephants at the zoo.

How many legs would you see?

8

Section 8

How much money is here?

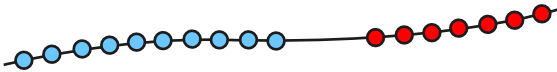


Year 1 Maths Activity Mat

2

Section 1

Write a number sentence to show how many beads there are altogether.



Section 2

Draw and colour the next 3 cars in the pattern.



Section 3

If today is Tuesday, what day was it 2 days ago?

Put a circle around the correct day.

Wednesday Sunday Saturday

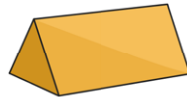
Section 4

Imagine seeing 3 elephants at the zoo.

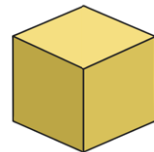
How many legs would you see?

Section 5

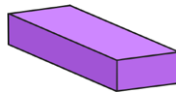
Draw lines to match the name and the shape.




cube



sphere




triangular prism



cuboid

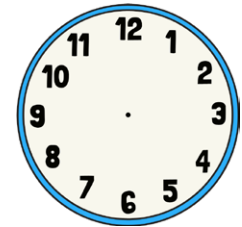
Section 6

Which jug is half full?
Tick the correct one.



Section 7

Make this clock show quarter past 8.



Section 8

How much money is here?

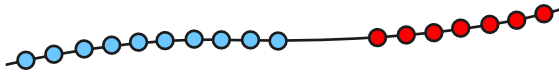


Year 1 Maths Activity Mat: 2

Answers

Section 1

Write a number sentence to show how many beads there are altogether.



$$10 + 7 = 17$$

Section 2

Draw and colour the next 3 cars in the pattern.



Section 3

If today is Tuesday, what day was it 2 days ago?

Put a circle around the correct day.

Wednesday **Sunday** Saturday

Section 4

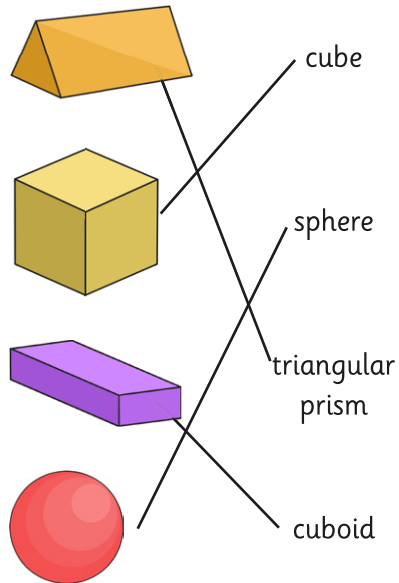
Imagine seeing 3 elephants at the zoo.

How many legs would you see?

12


Section 5

Draw lines to match the name and the shape.



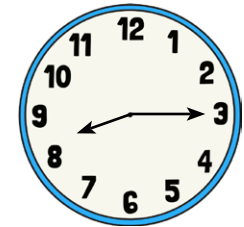
Section 6

Which jug is half full?
Tick the correct one.



Section 7

Make this clock show quarter past 8.



Section 8

How much money is here?



39p