



Fair Trade


Worksheet for 5th and 6th Class / Key Stage 2

Match the bananas to their names

- Barney Banana's cost is in the 5 times table.
- Belinda Banana's cost is in the 3 times table.
- Bradley Banana's cost is not in the 3 times table.
- Breda Banana's cost is even.
- Barry Banana's cost is a single-digit number




super beanie



Join me in the battle for fair trade!

This conventional banana costs 30c (it is not a Fair Trade banana). Look at the table to see who receives what if the banana is not Fair Trade (these are estimates and the numbers may vary depending on what country the banana came from). Divide the banana into parts. Label the different sections, according to who gets each amount.



NOW COMPLETE THE TABLE. ROUND UP TO THE NEAREST PERCENTAGE AND TO TWO DECIMAL PLACES.

	They receive	% of banana's cost	Fraction	Decimal
Farmer	1c			
Plantation Owner	5c			
Shipper	4c			
Importer	7c			
Shopkeeper	13c			

TROCAIRE
Working for a Just World