









Watches and clocks

- 1 Write in words the time shown on each watch.




- 2 Use the letters to put the times in order starting with the **earliest**.

- 3 (a) Which clock shows the **later** time, P or Q?
(b) What is the **difference** in time between the two clocks P and Q?




- 4 Look at this clock.




- (a) Write the time in words.
(b) What will be the time 15 minutes later?
(c) What was the time 5 minutes earlier?
- 5 How many minutes are there in:
(a) 1 hour, (b) $\frac{1}{2}$ hour, (c) $\frac{1}{4}$ hour?

- 6 (a) What time is this?




- (b) What is this later time?

- (c) How many minutes later is this?




- 7 (a) What time is this?



- (b) What is this earlier time?

- (c) How many minutes earlier is this?



- 8 What is the time 40 minutes later than twenty past two?