
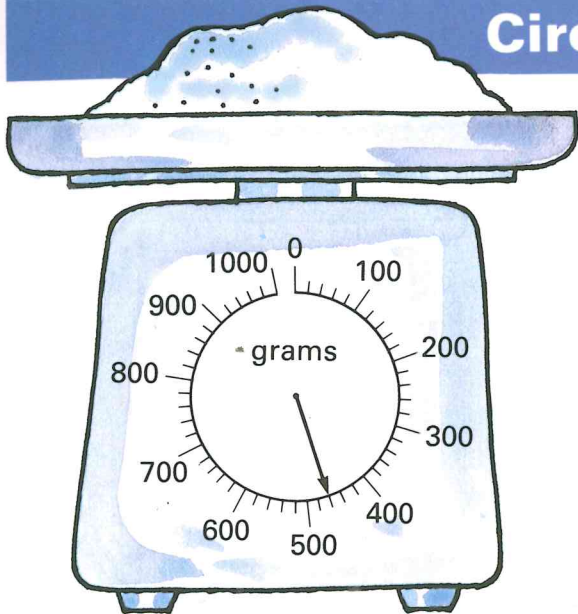
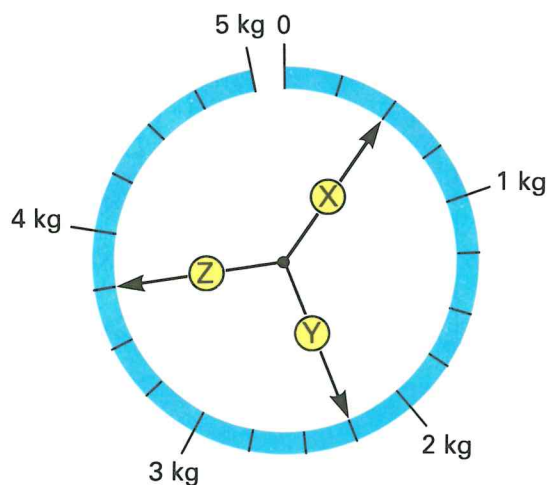


## Circular scales



- 1 Sugar is weighed on kitchen scales.
  - (a) How many small intervals are there between 0 and 100 g?
  - (b) What weight does each small interval represent?
  - (c) The pointer shows the weight of the sugar.  
Write the weight of the sugar.
- 2
  - (a) What is the heaviest weight which can be weighed on this scale?
  - (b) What weight does each small interval represent?
  - (c) Write the weights shown by the pointers X, Y, and Z.



Repeat question 2 for these two scales:

