





Coin Value Loop Cards to 30c

	<p>Who has 6c?</p>		<p>Who has 10c?</p>
	<p>Who has 29c?</p>		<p>Who has 1c?</p>

Coin Value Loop Cards to 30c



Who has
2c?



Who has
18c?



Who has
24c?



Who has
11c?

Coin Value Loop Cards to 30c



Who has
15c?



Who has
30c?



Who has
22c?



Who has
7c?

Coin Value Loop Cards to 30c



Who has
20c?



Who has
3c?







Who has
17c?



Who has
27c?

Coin Value Loop Cards to 30c

	<p>Who has 21c?</p>		<p>Who has 8c?</p>
	<p>Who has 4c?</p>		<p>Who has 19c?</p>

Coin Value Loop Cards to 30c



Who has
13c?



Who has
25c?



Who has
28c?



Who has
5c?

Coin Value Loop Cards to 30c



Who has
16c?



Who has
12c?



Who has
26c?



Who has
23c?

Coin Value Loop Cards to 30c



Who has
9c?



Who has
14c?