

Coin Value Loop Cards to \$1



Who has
34¢?



Who has
41¢?







Who has
77¢?



Who has
68¢?

Coin Value Loop Cards to \$1

	<p>Who has 99¢?</p>		<p>Who has 50¢?</p>
	<p>Who has 26¢?</p>		<p>Who has 37¢?</p>

Coin Value Loop Cards to \$1



Who has
80¢?



Who has
83¢?



Who has
91¢?



Who has
19¢?

Coin Value Loop Cards to \$1

	<p>Who has 66¢?</p>		<p>Who has 25¢?</p>
	<p>Who has 84¢?</p>		<p>Who has 95¢?</p>

Coin Value Loop Cards to \$1



Who has
57¢?



Who has
44¢?



Who has
72¢?



Who has
86¢?

Coin Value Loop Cards to \$1



Who has
39¢?



Who has
59¢?



Who has
60¢?



Who has
70¢?

Coin Value Loop Cards to \$1



Who has
21¢?



Who has
17¢?



Who has
55¢?



Who has
93¢?

Coin Value Loop Cards to \$1



Who has
81¢?



Who has
\$1?