




Kite right-angle finder

Use this kite to find some right-angles!

Cut it out, and place it next to an object with 2 adjacent straight edges.

Are the edges at right-angles?



© Copyright 2008,
SparkleBox Teacher Resources
(www.sparklebox.co.uk)




Kite right-angle finder

Use this kite to find some right-angles!

Cut it out, and place it next to an object with 2 adjacent straight edges.

Are the edges at right-angles?



© Copyright 2008,
SparkleBox Teacher Resources
(www.sparklebox.co.uk)

Thumb's-up right-angle finder

Use this hand to find some right-angles!
Cut it out, and place it next to an object with
2 adjacent straight edges.

Are the edges at right-angles?



SparkleBox © Copyright 2008,
SparkleBox Teacher Resources
(www.sparklebox.co.uk)

Thumb's-up right-angle finder

Use this hand to find some right-angles!
Cut it out, and place it next to an object with
2 adjacent straight edges.

Are the edges at right-angles?



SparkleBox © Copyright 2008,
SparkleBox Teacher Resources
(www.sparklebox.co.uk)

Right-angle finder


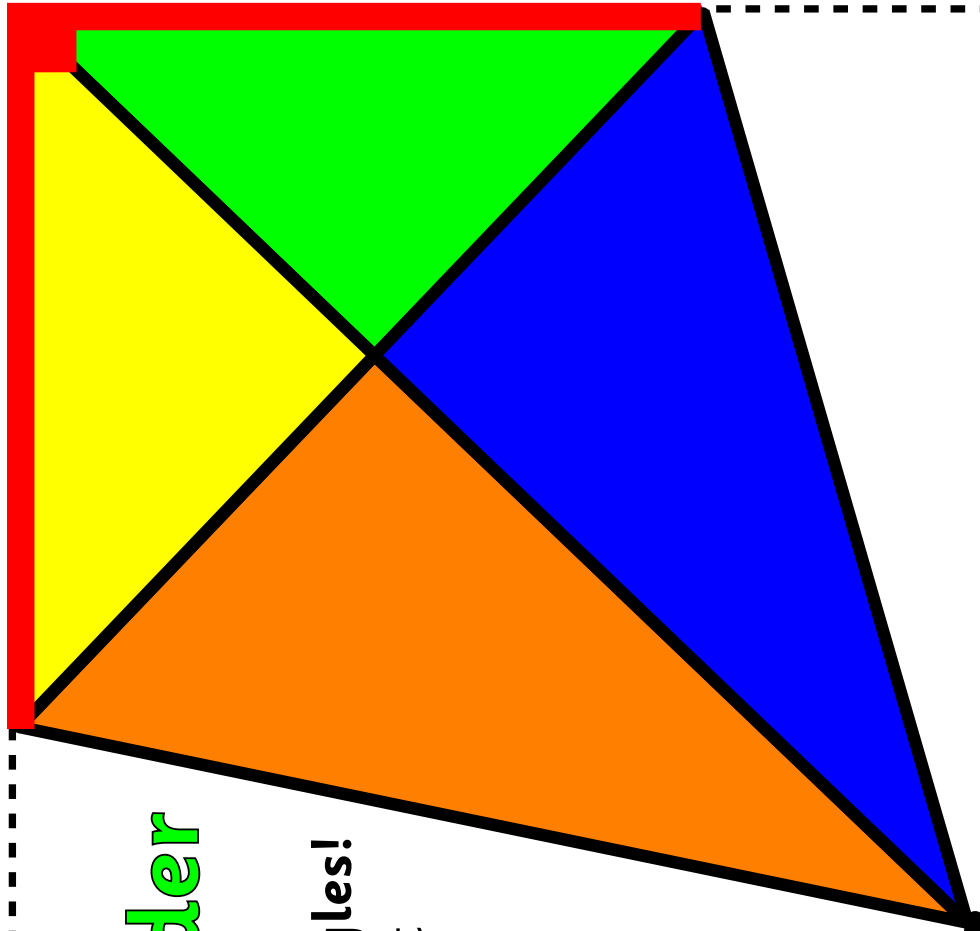


Kite right-angle finder

Use this kite to find some right-angles!

Cut it out, and place it next to an object with 2 adjacent straight edges.

Are the edges at right-angles?



Right-angle finder

Thumb's-up right-angle finder

Use this hand to find some right-angles!

Cut it out, and place it next to an object with 2 adjacent straight edges.

Are the edges at right-angles?

