

Add. Change the order of the addends. Add again. (2marks)

1.
$$\begin{array}{r} 8 \\ + 3 \\ \hline \square \end{array}$$

$$\begin{array}{r} \square \\ + \square \\ \hline \square \end{array}$$

2.
$$\begin{array}{r} 9 \\ + 5 \\ \hline \square \end{array}$$

$$\begin{array}{r} \square \\ + \square \\ \hline \square \end{array}$$

Count on 1, 2, 3 and add. (2 marks)

3. $4 + 2$

\square \bigcirc \bigcirc

\square \square \square

$4 + 2 = \underline{\quad}$

4. $3 + 8$

\square \bigcirc \bigcirc \bigcirc

\square \square \square \square

$3 + 8 = \underline{\quad}$

Add Doubles. (2 marks)

5. $8 + 8 = \underline{\quad}$

6. $5 + 5 = \underline{\quad}$

Write a doubles fact to solve. (3 marks)

There are 9 brown camels and 9 gray camels in the farm.
How many camels are there in all?

$\underline{\quad} + \underline{\quad} = \underline{\quad}$ camels

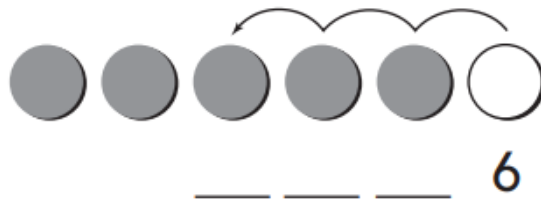
Add three numbers. (2 marks)

10.
$$\begin{array}{r} 7 \\ 3 \\ + 3 \\ \hline \end{array}$$

11.
$$\begin{array}{r} 2 \\ 2 \\ + 6 \\ \hline \end{array}$$

Count back 1, 2, 3 and 2 and write the difference. (2 marks)

12. $6 - 3 = \underline{\quad}$



13. Count back 3. What is the difference?
Write the number.

_____ = 10 - 3

Write a subtraction sentence to solve. (3 marks)

Tahnoon has 6 pencils. He gives 2 to Nasser. How many pencils does Tahnoon have now?

_____ - _____ = _____ pencils

Think of addition fact to help you subtract. (2 marks)

17. What is $6 - 1$?

Think $1 + \underline{\quad} = 6$

So $6 - 1 = \underline{\quad}$

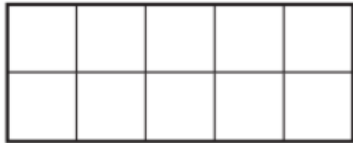

18. What is $12 - 6$?

Think $6 + \underline{\quad} = 12$

So $12 - 6 = \underline{\quad}$

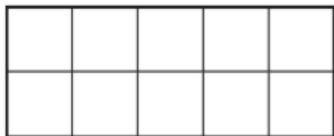
Use ○. Make a 10 to subtract. Draw to show your work.

19. $12 - 8 = \underline{\quad?}$



$12 - 8 = \underline{\quad}$

20. $11 - 9 = \underline{\quad?}$



$11 - 9 = \underline{\quad}$