

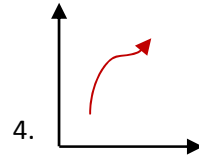
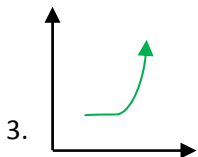
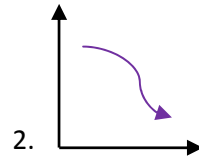
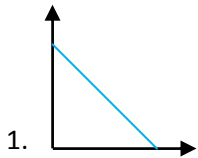
Name _____

Date _____

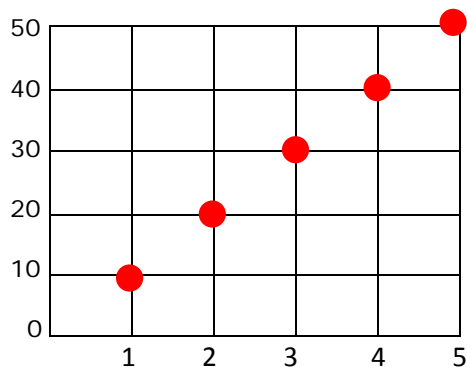
Equation of a Straight Line- Guided Lesson

Complete the following problems:

1) Which functions are linear? Select the circle.



2) Is this a graph of a linear or non-linear equation?



3) Use the points below to identify the nature of the graph. Linear or non-linear?

x	y
1	0
2	1
3	2
4	3

