

Nome : _____

INFORMAÇÃO : _____

Data : ___/___/___

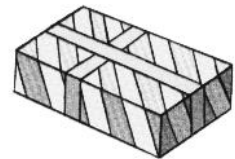
Linhas rectas e curvas





1 – Cobre a vermelho as linhas rectas e a verde as linhas curvas.



2 – Observa os objectos e escreve : linhas rectas ou linhas curvas.






Nome : _____


INFORMAÇÃO :

Data : ___/___/___


Sólidos geométricos



cubo



pirâmide




esfera



cilindro



cone



prisma


1 – Estes objectos têm formas de sólidos geométricos. Observa-os e completa o quadro, conforme o exemplo.



A



E




D



C




B



F




G



H



I









J



L




K

	Nome do sólido	Objecto correspondente
	Esfera	E
		F
		
		
		
		

Nome : _____

INFORMAÇÃO : _____


Data : ___/___/___




esfera



cilindro




prisma



cubo

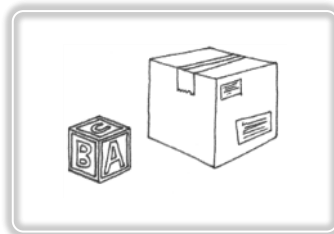
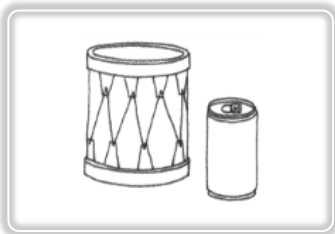
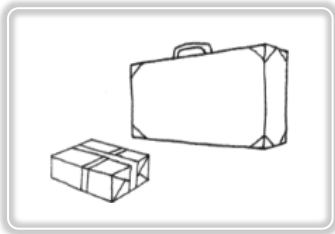


cone



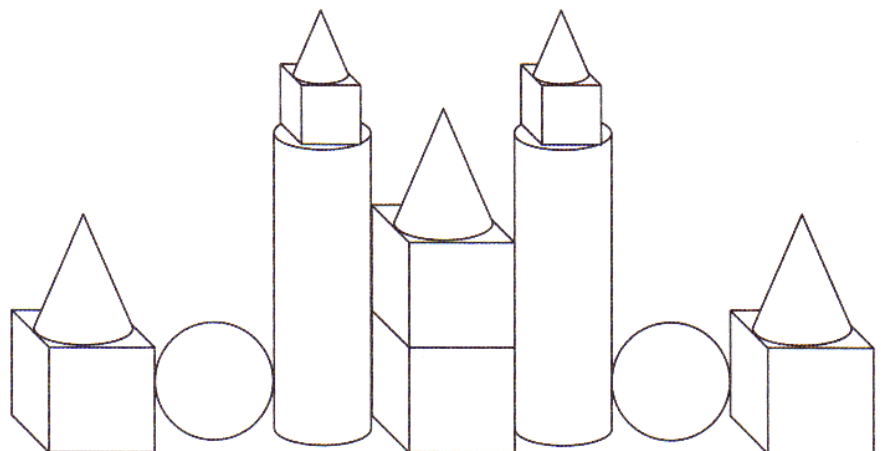
pirâmide

1 – Escreve os nomes dos sólidos geométricos que se assemelham a cada grupo de objectos.



2 – Pinta, de acordo com o código.

castanho 	verde
rosa 	amarelo



Nome : _____

INFORMAÇÃO :

Data : __/__/__

1 – Lê as palavras e desenha os sólidos correctamente.



cilindro



cone



esfera



cubo








prisma



pirâmide

2 – Depois de observares, manuseares e rolares os sólidos, preenche a tabela, seguindo o exemplo.






					
Rola					
Não rola				X	
Superfícies planas e não planas					
Só superfícies planas				X	
Só superfícies não planas					


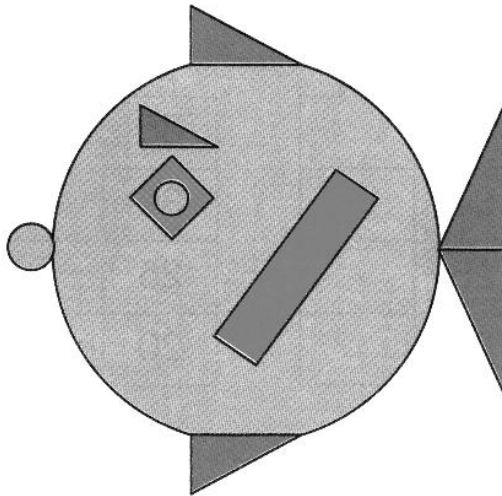
Nome : _____

INFORMAÇÃO :





Data : ___/___/___


1 – Observa as gravuras e regista na tabela o número de figuras.




2 – Faz uma composição a teu gosto, usando a quantidade de figuras indicada na tabela.

	4
	4
	3
	2



3 – Observa o quadro. Pinta as figuras de acordo com as cores indicadas.

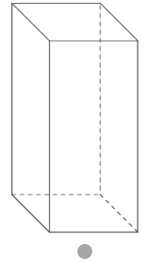
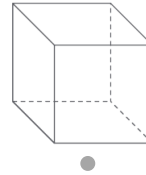

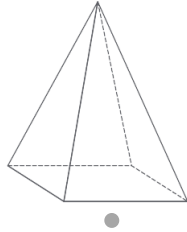


Nome : _____

INFORMAÇÃO : _____

Data : __/__/__

1 – Liga de forma correta cada representação de sólido geométrico à etiqueta com o seu nome e cada uma das etiquetas à frase que lhe corresponde.



prisma

cubo

cilindro

esfera

pirâmide

Tenho
quatro faces
laterais
retangulares.

Só sei rolar.

Tenho
quatro faces
laterais
triangulares.

Tenho duas
superfícies
circulares
e rolo numa
posição.

Sou formado
por seis
quadrados.

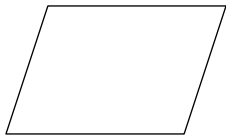
2 – No espaço que se segue, desenha objetos que rolam e escreve o nome do sólido semelhante.

3 – Desenha em cada caso as figuras geométricas pedidas.

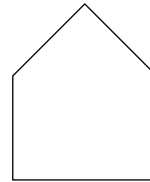
triângulos		
quadriláteros		

4 – Nas figuras seguintes, traça linhas de maneira a descobrires o que te é pedido.

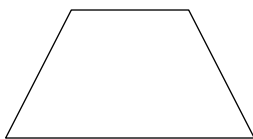
• dois triângulos



• um quadrilátero e um triângulo



• dois quadriláteros




• quatro triângulos




5 – Representa no papel pontado as figuras pedidas.

QUADRADO



PENTÁGONO



RETÂNGULO

