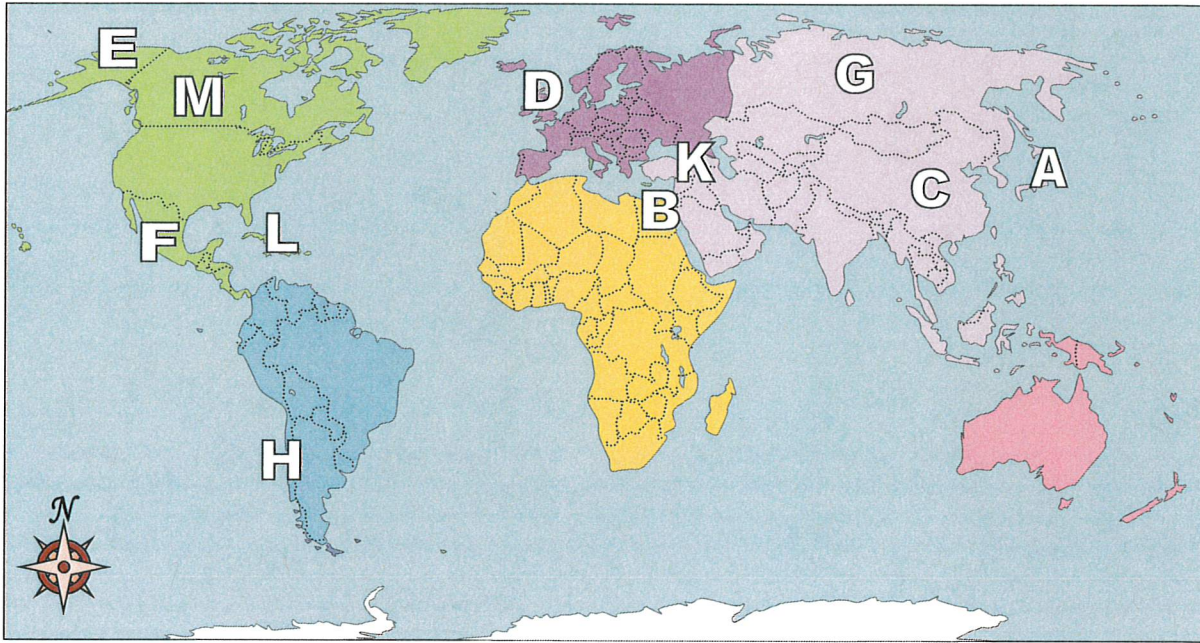




Using the map below, determine which letter represents each continent or ocean.



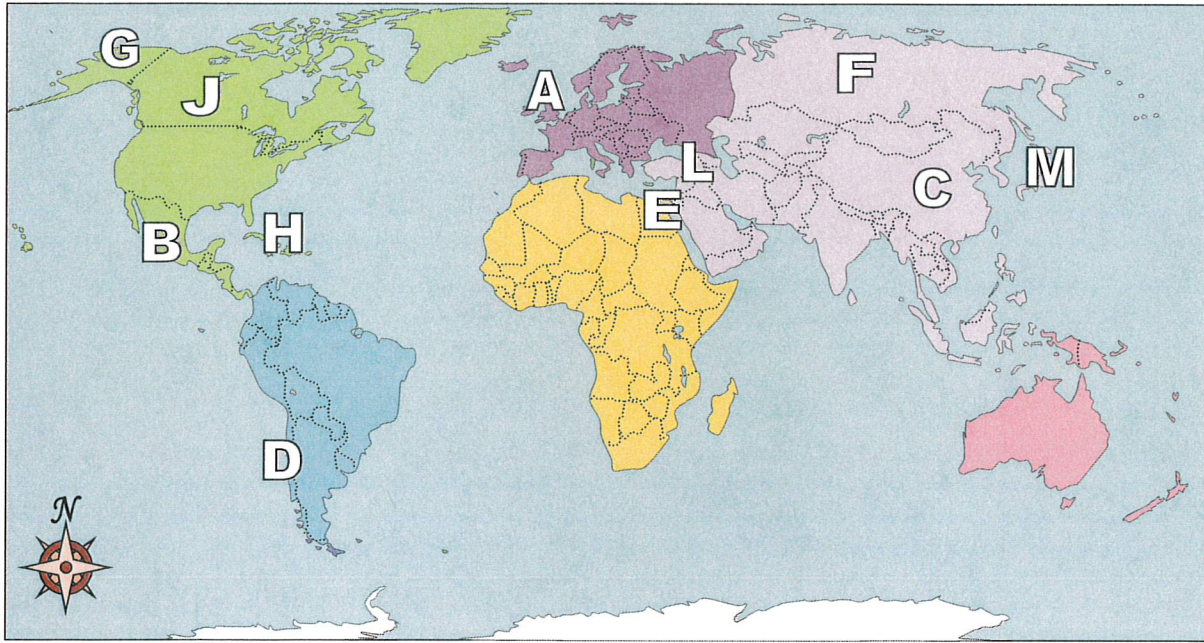
**Answers**

1. \_\_\_\_\_
2. \_\_\_\_\_
3. \_\_\_\_\_
4. \_\_\_\_\_
5. \_\_\_\_\_
6. \_\_\_\_\_
7. \_\_\_\_\_
8. \_\_\_\_\_
9. \_\_\_\_\_
10. \_\_\_\_\_
11. \_\_\_\_\_
12. \_\_\_\_\_
13. \_\_\_\_\_
14. \_\_\_\_\_
15. \_\_\_\_\_
16. \_\_\_\_\_

- 1) Canada \_\_\_\_\_
- 2) Chile \_\_\_\_\_
- 3) Britain \_\_\_\_\_
- 4) Russia \_\_\_\_\_
- 5) Egypt \_\_\_\_\_
- 6) China \_\_\_\_\_
- 7) Mexico \_\_\_\_\_
- 8) Alaska (State) \_\_\_\_\_
- 9) Japan \_\_\_\_\_
- 10) Cuba \_\_\_\_\_
- 11) Iraq \_\_\_\_\_
- 12) Which country attacked the United State's base at Pearl Harbor during World War 2?  
A. Japan                      C. Mexico  
B. Egypt                      D. China
- 13) Which country touches the USA's northern border?  
A. Canada                      C. Egypt  
B. France                      D. Britain
- 14) Which country touches the USA's southern border?  
A. Egypt                      C. Mexico  
B. Japan                      D. Britain
- 15) Alaska is \_\_\_\_\_ of the rest of the United States?  
A. south                      C. west  
B. east                      D. north
- 16) Who was the United States of America at war with during the American Revolution?  
A. Canada                      C. Mexico  
B. Egypt                      D. Britain



Using the map below, determine which letter represents each continent or ocean.

**Answers**

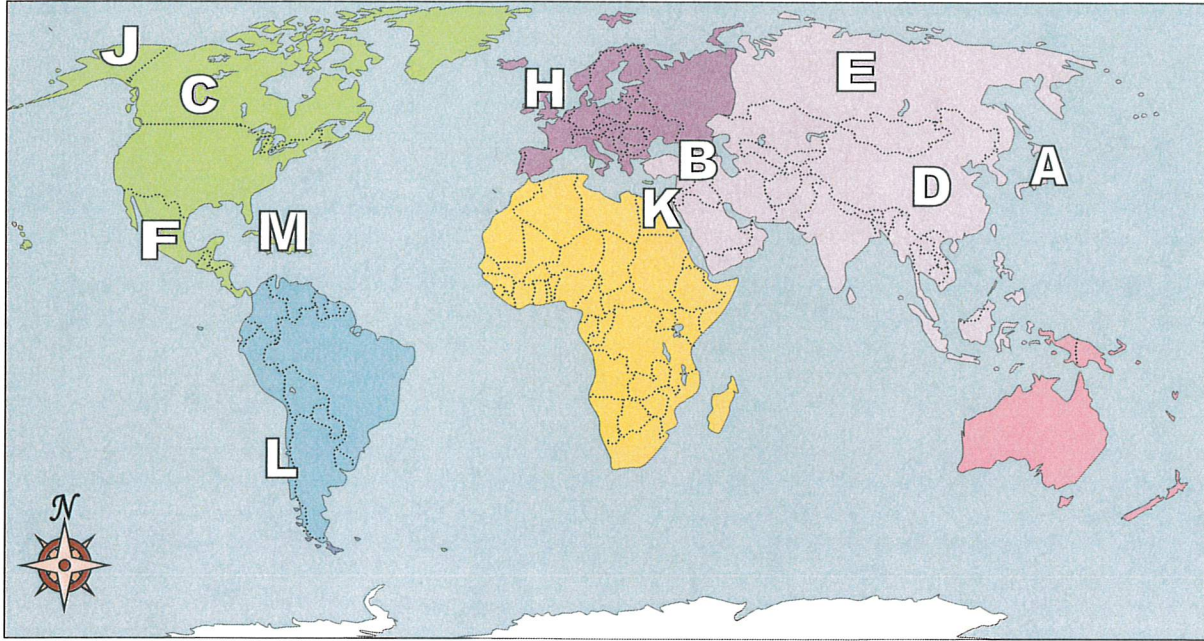
1. \_\_\_\_\_
2. \_\_\_\_\_
3. \_\_\_\_\_
4. \_\_\_\_\_
5. \_\_\_\_\_
6. \_\_\_\_\_
7. \_\_\_\_\_
8. \_\_\_\_\_
9. \_\_\_\_\_
10. \_\_\_\_\_
11. \_\_\_\_\_
12. \_\_\_\_\_
13. \_\_\_\_\_
14. \_\_\_\_\_
15. \_\_\_\_\_
16. \_\_\_\_\_

- 1) Canada \_\_\_\_\_
- 2) Chile \_\_\_\_\_
- 3) Britain \_\_\_\_\_
- 4) Russia \_\_\_\_\_
- 5) Egypt \_\_\_\_\_
- 6) China \_\_\_\_\_
- 7) Mexico \_\_\_\_\_
- 8) Alaska (State) \_\_\_\_\_
- 9) Japan \_\_\_\_\_
- 10) Cuba \_\_\_\_\_
- 11) Iraq \_\_\_\_\_
- 12) Alaska is \_\_\_\_\_ of the rest of the United States?  
A. west                      C. north  
B. east                      D. south
- 13) The state of Alaska is touching which country?  
A. Mexico                      C. China  
B. Canada                      D. Russia
- 14) Which country attacked the United State's base at Pearl Harbor during World War 2?  
A. Mexico                      C. Britain  
B. Japan                      D. Egypt
- 15) Which is not part of North America?  
A. Alaska                      C. Canada  
B. The United States                      D. France
- 16) Which country is the largest in Asia?  
A. Canada                      C. Russia  
B. Japan                      D. China





Using the map below, determine which letter represents each continent or ocean.



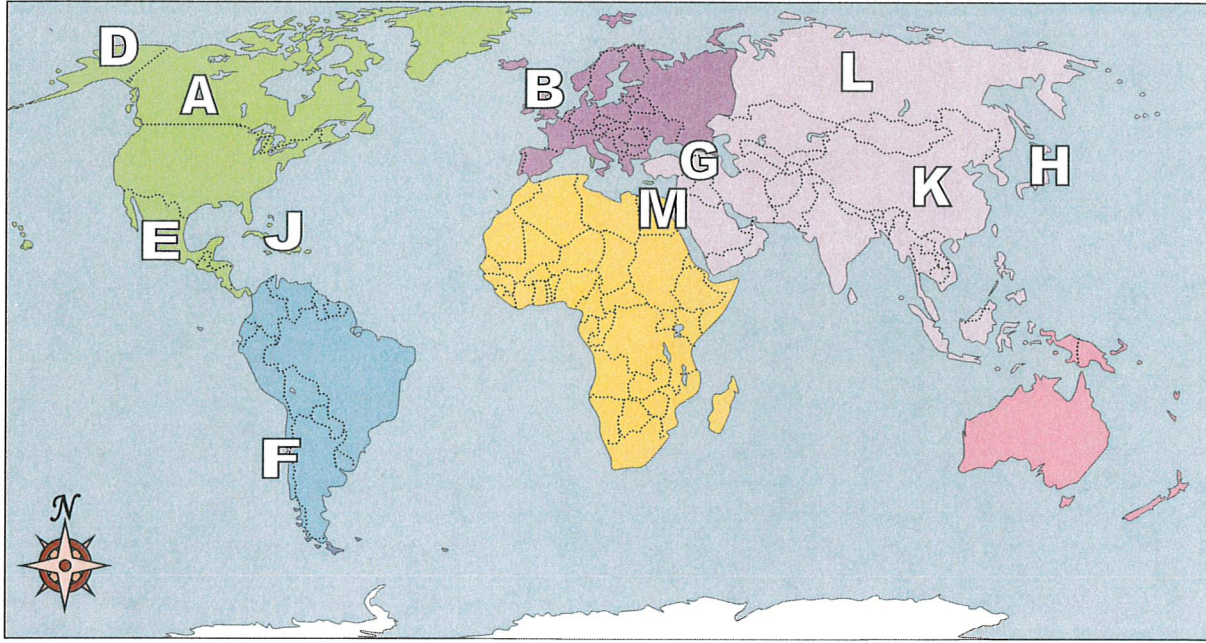
**Answers**

1. \_\_\_\_\_
2. \_\_\_\_\_
3. \_\_\_\_\_
4. \_\_\_\_\_
5. \_\_\_\_\_
6. \_\_\_\_\_
7. \_\_\_\_\_
8. \_\_\_\_\_
9. \_\_\_\_\_
10. \_\_\_\_\_
11. \_\_\_\_\_
12. \_\_\_\_\_
13. \_\_\_\_\_
14. \_\_\_\_\_
15. \_\_\_\_\_
16. \_\_\_\_\_

- 1) Canada \_\_\_\_\_
  - 2) Chile \_\_\_\_\_
  - 3) Britain \_\_\_\_\_
  - 4) Russia \_\_\_\_\_
  - 5) Egypt \_\_\_\_\_
  - 6) China \_\_\_\_\_
  - 7) Mexico \_\_\_\_\_
  - 8) Alaska (State) \_\_\_\_\_
  - 9) Japan \_\_\_\_\_
  - 10) Cuba \_\_\_\_\_
  - 11) Iraq \_\_\_\_\_
- 
- 12) Which country is closest to the state of Florida?  
A. Japan                      C. China  
B. Mexico                    D. Cuba
  - 13) Which is not part of North America?  
A. Canada                    C. Japan  
B. Mexico                    D. Alaska
  - 14) Which country touches the USA's northern border?  
A. Britain                    C. Canada  
B. Egypt                    D. Mexico
  - 15) Which country attacked the United State's base at Pearl Harbor during World War 2?  
A. Canada                    C. Mexico  
B. Japan                    D. France
  - 16) Who was the United States of America at war with during the American Revolution?  
A. France                    C. Mexico  
B. Japan                    D. Britain



Using the map below, determine which letter represents each continent or ocean.



**Answers**

- 1. \_\_\_\_\_
- 2. \_\_\_\_\_
- 3. \_\_\_\_\_
- 4. \_\_\_\_\_
- 5. \_\_\_\_\_
- 6. \_\_\_\_\_
- 7. \_\_\_\_\_
- 8. \_\_\_\_\_
- 9. \_\_\_\_\_
- 10. \_\_\_\_\_
- 11. \_\_\_\_\_
- 12. \_\_\_\_\_
- 13. \_\_\_\_\_
- 14. \_\_\_\_\_
- 15. \_\_\_\_\_
- 16. \_\_\_\_\_

- 1) Canada \_\_\_\_\_

2) Chile \_\_\_\_\_

3) Britain \_\_\_\_\_

4) Russia \_\_\_\_\_

5) Egypt \_\_\_\_\_

6) China \_\_\_\_\_
- 7) Mexico \_\_\_\_\_

8) Alaska (State) \_\_\_\_\_

9) Japan \_\_\_\_\_

10) Cuba \_\_\_\_\_

11) Iraq \_\_\_\_\_
- 12) Alaska is \_\_\_\_\_ of the rest of the United States?  
A. north                      C. east  
B. west                      D. south
- 13) If you wanted to see pyramids where should you go?  
A. France                      C. Egypt  
B. Japan                      D. Canada
- 14) Which is not part of North America?  
A. The United States                      C. Britain  
B. Mexico                      D. Alaska
- 15) Which country touches the USA's northern border?  
A. Canada                      C. Japan  
B. Egypt                      D. France
- 16) Which country attacked the United State's base at Pearl Harbor during World War 2?  
A. Egypt                      C. Japan  
B. Canada                      D. Britain