


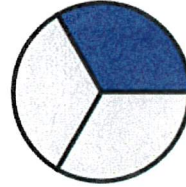


Name: \_\_\_\_\_


Use numbers to write the fraction shown by the diagram:



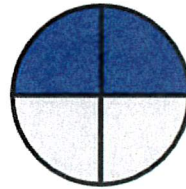
\_\_\_\_\_



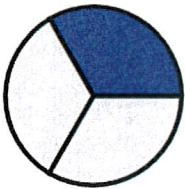
\_\_\_\_\_



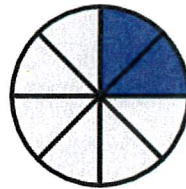
\_\_\_\_\_




\_\_\_\_\_




\_\_\_\_\_



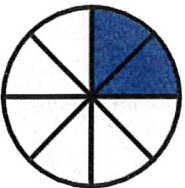
\_\_\_\_\_




\_\_\_\_\_



\_\_\_\_\_



\_\_\_\_\_



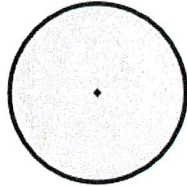
\_\_\_\_\_



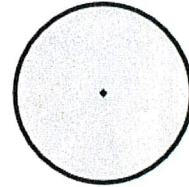
Name: \_\_\_\_\_

Color in the fractions to match the values:


$$\frac{2}{4}$$




$$\frac{3}{8}$$




$$\frac{3}{4}$$




$$\frac{2}{4}$$




$$\frac{4}{5}$$




$$\frac{2}{5}$$



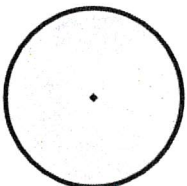
$$\frac{1}{4}$$



$$\frac{1}{3}$$



$$\frac{4}{5}$$



$$\frac{5}{6}$$

