

Name - \_\_\_\_\_

Roll No. - \_\_\_\_\_

Date - \_\_\_\_\_

English Homework

1. Write the Opposite words of the following:-

- (i) Dry - \_\_\_\_\_
- (ii) Happy - \_\_\_\_\_
- (iii) Big - \_\_\_\_\_
- (iv) Clean - \_\_\_\_\_
- (v) Hot - \_\_\_\_\_
- (vi) In - \_\_\_\_\_
- (vii) Up - \_\_\_\_\_
- (viii) Fast - \_\_\_\_\_
- (ix) Full - \_\_\_\_\_
- (x) Stop - \_\_\_\_\_

2. Write the Opposite genders of the following :-

- (i) Tiger - \_\_\_\_\_
- (ii) Lion - \_\_\_\_\_
- (iii) King - \_\_\_\_\_
- (iv) Boy - \_\_\_\_\_
- (v) Grandmother - \_\_\_\_\_
- (vi) Brother - \_\_\_\_\_
- (vii) Son - \_\_\_\_\_
- (viii) Male - \_\_\_\_\_
- (ix) Mother - \_\_\_\_\_
- (x) Uncle - \_\_\_\_\_

3. Complete the words :-

- (i) R\_\_\_ilw\_\_\_y
- (ii) Br\_\_\_d\_\_\_e
- (iii) F\_\_\_rr\_\_\_
- (iv) S\_\_\_l\_\_\_sh
- (v) C\_\_\_ws
- (vi) W\_\_\_s\_\_\_
- (vii) F\_\_\_ap

**4. Write the meaning of the following words :-**

- (i) Wish –
- (ii) Bridge –
- (iii) Crawl –
- (iv) Furry -
- (v) Chase-

**5. Write the answer of the following questions:-**

- (i) Why do the animals run away?

Ans- \_\_\_\_\_  
\_\_\_\_\_

- (ii) Who nibbles on a nut ?

Ans- \_\_\_\_\_  
\_\_\_\_\_

- (iii) Where are Riya and Rahul going ?

Ans- \_\_\_\_\_  
\_\_\_\_\_

- (iv) Who is old and wise?

Ans- \_\_\_\_\_  
\_\_\_\_\_

- (v) Where does owl sit ?

Ans- \_\_\_\_\_  
\_\_\_\_\_

- (vi) Why was the mouse wet ?

Ans- \_\_\_\_\_  
\_\_\_\_\_

- (vii) Why were they all under the tiny cap?

Ans- \_\_\_\_\_  
\_\_\_\_\_

6. Write the paragraph on 'Good Habits'.

---

---

---

---

---

---

---

---

Do the given Worksheets

7.

● Choose the correct describing words and complete the sentences.

1. I have a \_\_\_\_\_ (cute/ugly) teddy bear.



2. We saw a \_\_\_\_\_ (blue/red) bird yesterday.



3. There is a \_\_\_\_\_ (clean/dirty) park near my house.



4. The girl is \_\_\_\_\_. (sad/happy)



5. I had a \_\_\_\_\_ (tasty/tasteless) cake for my birthday.



6. I saw a \_\_\_\_\_ (big/small) fish in the sea.



7. There is an \_\_\_\_\_ (old/new) cottage in the jungle.



8. Mr Smith is a \_\_\_\_\_ (rich/poor) man.



8.

● Complete the sentences with the correct doing words from the box.

sitting    ringing    playing    barking    raining    reading

1. Look at Kartik. He is \_\_\_\_\_ in the park.
2. The dogs are \_\_\_\_\_ loudly.
3. It is \_\_\_\_\_ heavily.
4. Geeta is \_\_\_\_\_ a storybook.
5. Ahmed is \_\_\_\_\_ on a chair.
6. The phone is \_\_\_\_\_ loudly.



9.

● Choose the correct describing words and complete the sentences.

1. I have a \_\_\_\_\_ (cute/ugly) teddy bear.



2. We saw a \_\_\_\_\_ (blue/red) bird yesterday.



3. There is a \_\_\_\_\_ (clean/dirty) park near my house.



4. The girl is \_\_\_\_\_. (sad/happy)



5. I had a \_\_\_\_\_ (tasty/tasteless) cake for my birthday.



6. I saw a \_\_\_\_\_ (big/small) fish in the sea.



7. There is an \_\_\_\_\_ (old/new) cottage in the jungle.



8. Mr Smith is a \_\_\_\_\_ (rich/poor) man.





10.

Look at the pictures and write what is happening in each of them.  
Use is, am, are with a doing word + *ing* from the box.

leak    sing    play    teach    fly    climb

1. The children \_\_\_\_\_ in the park.



2. The boy \_\_\_\_\_ the tree.



3. The tap \_\_\_\_\_.



4. The flag \_\_\_\_\_ in the wind.



5. Vijaya \_\_\_\_\_ a song.



6. The teacher \_\_\_\_\_ English.



11.

### Describing colours

Read the clues. Fill in the crossword with the correct names of colours.  
Then, colour the cells.


	1. B				K
2. G	R		E		
					2. R
	3.	H	I		
	N				D

#### Across

- The blackboard is \_\_\_\_\_.
- Leaves are \_\_\_\_\_.
- The piece of chalk is \_\_\_\_\_.

#### Down

- Chocolate is \_\_\_\_\_.
- The fire engine is \_\_\_\_\_.



12.

Find and circle these action words in the grid.

dance    hop    climb    stare    dig    catch



O	L	D	A	N	C	E	R
K	C	N	Z	C	L	H	G
B	A	E	J	D	I	G	J
H	T	Q	V	I	M	F	H
O	C	X	A	L	B	W	I
P	H	U	S	T	A	R	E



## Hindi

क) पाठ (4, 5, 6, 7, 8) में से 20 श्रुतलेख शब्द अपनी उत्तरपुस्तिका में लिखे :

ख) एक से बीस तक गिनती लिखिए ।

- |            |            |
|------------|------------|
| 1 - _____  | 11 - _____ |
| 2 - _____  | 12 - _____ |
| 3 - _____  | 13 - _____ |
| 4 - _____  | 14 - _____ |
| 5 - _____  | 15 - _____ |
| 6 - _____  | 16 - _____ |
| 7 - _____  | 17 - _____ |
| 8 - _____  | 18 - _____ |
| 9 - _____  | 19 - _____ |
| 10 - _____ | 20 - _____ |

ग) निम्नलिखित शब्दों के अर्थ लिखिए :

1. पृथ्वी - \_\_\_\_\_
2. पारपथ - \_\_\_\_\_
3. महोत्सव - \_\_\_\_\_
4. शोभा - \_\_\_\_\_
5. सप्ताह - \_\_\_\_\_
6. प्रमुख - \_\_\_\_\_
7. पकवान - \_\_\_\_\_
8. हुड़दंग - \_\_\_\_\_
9. बेहाली - \_\_\_\_\_
10. पूजा - \_\_\_\_\_

घ) नीचे दिए गए शब्दों के वाक्य बनाए :

- (i) फल – \_\_\_\_\_
- (ii) जल – \_\_\_\_\_
- (iii) वर्षा – \_\_\_\_\_
- (iv) स्कूल – \_\_\_\_\_
- (v) उपहार – \_\_\_\_\_

ङ) निम्नलिखित प्रश्नों के उत्तर लिखिए –

1. बच्चों ने पृथ्वी पर कब विचार किया ?

\_\_\_\_\_

\_\_\_\_\_

2. पीयूष कक्षा में देरी से क्यों पहुँचा ?

\_\_\_\_\_

\_\_\_\_\_

3. पेड़ों से हमें क्या –क्या मिलता है ?

\_\_\_\_\_

\_\_\_\_\_

4. आकाश में इंद्रधनुष कब दिखाई देता है ?

\_\_\_\_\_

\_\_\_\_\_

5. होलिका कब जलाई जाती है ?

\_\_\_\_\_

\_\_\_\_\_

6. सड़क कहाँ से पार करनी चाहिए ?

\_\_\_\_\_

\_\_\_\_\_

च) Revise पाठ्यपुस्तक – पाठ – 4, 5, 6, 7, 8

## Hindi Worksheets

वचन (एकवचन/बहुवचन)

कोष्ठक में दिए गए सही शब्द से खाली स्थान भरो -

- 1 बच्चा ————— से खेलता है। ( खिलौना/खिलौने )
- 2 बाग में ————— खिल गई हैं। ( कली/कलियाँ )
- 3 सड़क पर ————— आ जा रही हैं। ( गाड़ी/गाड़ियाँ )
- 4 छत पर ————— बैठा है। ( कौआ/कौए )
- 5 बरगद की ————— बहुत लंबी हैं। ( शाखा/शाखाएँ )
- 6 हमारे गाँव में दो आम के ————— हैं। ( बगीचा/बगीचे )
- 7 ————— खत्म हो गई हैं। ( छुट्टी/छुट्टियाँ )
- 8 डाकिया ————— बाँटता है। ( चिट्ठियाँ/चिट्ठी )
- 9 रेल की ————— उखड़ी थीं। ( पटरी/पटरियाँ )
- 10 मेले में तरह तरह की ————— थीं। ( दुकान/दुकानें )

नीचे दिए गए शब्दों की सहायता से वाक्य पूरे कीजिए।

टोपी, तबला, तोता, चिमटा, पुस्तक, बारिश, गाजर, घर

1. \_\_\_\_\_ हो रही है। 
2. खरगोश \_\_\_\_\_ खा रहा है। 
3. \_\_\_\_\_ पहन कर जाओ। 
4. रोहित \_\_\_\_\_ बजा। 
5. रमन \_\_\_\_\_ चल। 
6. कमल \_\_\_\_\_ पढ़ता है। 
7. \_\_\_\_\_ पेड़ पर बैठा है। 
8. अब्दुल \_\_\_\_\_ ला। 



## Math Homework

### Addition

#### Two digit with regrouping

$$\begin{array}{r} 44 \\ + 37 \\ \hline \end{array}$$

$$\begin{array}{r} 56 \\ + 24 \\ \hline \end{array}$$

$$\begin{array}{r} 78 \\ + 13 \\ \hline \end{array}$$

$$\begin{array}{r} 52 \\ + 19 \\ \hline \end{array}$$

$$\begin{array}{r} 29 \\ + 13 \\ \hline \end{array}$$

$$\begin{array}{r} 67 \\ + 23 \\ \hline \end{array}$$

$$\begin{array}{r} 47 \\ + 15 \\ \hline \end{array}$$

$$\begin{array}{r} 16 \\ + 17 \\ \hline \end{array}$$

$$\begin{array}{r} 27 \\ + 48 \\ \hline \end{array}$$

$$\begin{array}{r} 61 \\ + 19 \\ \hline \end{array}$$

$$\begin{array}{r} 18 \\ + 24 \\ \hline \end{array}$$

$$\begin{array}{r} 55 \\ + 25 \\ \hline \end{array}$$

$$\begin{array}{r} 14 \\ + 28 \\ \hline \end{array}$$

$$\begin{array}{r} 37 \\ + 27 \\ \hline \end{array}$$

$$\begin{array}{r} 47 \\ + 44 \\ \hline \end{array}$$

$$\begin{array}{r} 29 \\ + 21 \\ \hline \end{array}$$

$$\begin{array}{r} 75 \\ + 17 \\ \hline \end{array}$$

$$\begin{array}{r} 32 \\ + 39 \\ \hline \end{array}$$

$$\begin{array}{r} 24 \\ + 19 \\ \hline \end{array}$$

$$\begin{array}{r} 65 \\ + 17 \\ \hline \end{array}$$

$$\begin{array}{r} 38 \\ + 15 \\ \hline \end{array}$$

$$\begin{array}{r} 59 \\ + 33 \\ \hline \end{array}$$

$$\begin{array}{r} 52 \\ + 29 \\ \hline \end{array}$$

$$\begin{array}{r} 26 \\ + 44 \\ \hline \end{array}$$

**Subtraction**  
**Two digit - with regrouping**

$$\begin{array}{r} 30 \\ - 14 \\ \hline \end{array}$$

\_\_\_\_\_

$$\begin{array}{r} 74 \\ - 48 \\ \hline \end{array}$$

\_\_\_\_\_

$$\begin{array}{r} 86 \\ - 78 \\ \hline \end{array}$$

\_\_\_\_\_

$$\begin{array}{r} 90 \\ - 56 \\ \hline \end{array}$$

\_\_\_\_\_

$$\begin{array}{r} 88 \\ - 79 \\ \hline \end{array}$$

\_\_\_\_\_

$$\begin{array}{r} 58 \\ - 29 \\ \hline \end{array}$$

\_\_\_\_\_

$$\begin{array}{r} 60 \\ - 39 \\ \hline \end{array}$$

\_\_\_\_\_

$$\begin{array}{r} 33 \\ - 15 \\ \hline \end{array}$$

\_\_\_\_\_

$$\begin{array}{r} 60 \\ - 44 \\ \hline \end{array}$$

\_\_\_\_\_

$$\begin{array}{r} 62 \\ - 33 \\ \hline \end{array}$$

\_\_\_\_\_

$$\begin{array}{r} 21 \\ - 13 \\ \hline \end{array}$$

\_\_\_\_\_

$$\begin{array}{r} 21 \\ - 16 \\ \hline \end{array}$$

\_\_\_\_\_

$$\begin{array}{r} 55 \\ - 46 \\ \hline \end{array}$$

\_\_\_\_\_

$$\begin{array}{r} 21 \\ - 18 \\ \hline \end{array}$$

\_\_\_\_\_

$$\begin{array}{r} 30 \\ - 12 \\ \hline \end{array}$$

\_\_\_\_\_

$$\begin{array}{r} 76 \\ - 48 \\ \hline \end{array}$$

\_\_\_\_\_

$$\begin{array}{r} 21 \\ - 15 \\ \hline \end{array}$$

\_\_\_\_\_

$$\begin{array}{r} 61 \\ - 39 \\ \hline \end{array}$$

\_\_\_\_\_

$$\begin{array}{r} 32 \\ - 19 \\ \hline \end{array}$$

\_\_\_\_\_

$$\begin{array}{r} 74 \\ - 16 \\ \hline \end{array}$$

\_\_\_\_\_

Read each clue and write the answer.

January	February	March	April
May	June	July	August
September	October	November	December

1. The last month of the year \_\_\_\_\_
2. The month before the last month of the year \_\_\_\_\_
3. Month before July \_\_\_\_\_
4. The month in which you summer vacation starts \_\_\_\_\_
5. The month in which you were born \_\_\_\_\_
6. Month between April and June \_\_\_\_\_
7. The month before November \_\_\_\_\_
8. The month before the last month of the year \_\_\_\_\_
9. The month with the least number of days \_\_\_\_\_
10. The month in which Mahatma Gandhi was born \_\_\_\_\_
11. The month in which you summer vacation starts \_\_\_\_\_
12. The month in which you were born \_\_\_\_\_
13. The month in which India celebrates its Republic day \_\_\_\_\_

$7 \times 9 =$

$10 \times 8 =$

$3 \times 6 =$

$4 \times 2 =$

$2 \times 2 =$

$0 \times 5 =$

$5 \times 9 =$

$2 \times 5 =$

$4 \times 10 =$

$7 \times 6 =$

$10 \times 10 =$

$1 \times 9 =$

$9 \times 4 =$

$2 \times 8 =$

$6 \times 3 =$

$3 \times 5 =$

$5 \times 6 =$

$10 \times 9 =$





















$1 \times 3 =$

$9 \times 0 =$



This is how the children came to school on a Monday.

Each symbol shows how one child got to school.

Walk							
Car							
Bike							
Bus							

1) How many children walked to school? \_\_\_\_\_

2) How many children can by bike? \_\_\_\_\_










3) How many children came by car? \_\_\_\_\_

4) How many children can on the school bus? \_\_\_\_\_

5) How many children did not walk? \_\_\_\_\_

6) How did most children come to school that day? \_\_\_\_\_

Write the time:-



## Money - Addition

Complete the Following

$$\text{Rs } 10 + \text{Rs } 2 = \text{Rs } \boxed{\phantom{00}}$$

$$\text{Rs } 2 + \text{Rs } 2 = \text{Rs } \boxed{\phantom{00}}$$

$$\text{Rs } 15 + \text{Rs } 3 = \text{Rs } \boxed{\phantom{00}}$$

$$\text{Rs } 10 + \text{Rs } 1 = \text{Rs } \boxed{\phantom{00}}$$

$$\text{Rs } 8 + \text{Rs } 8 = \text{Rs } \boxed{\phantom{00}}$$

$$\text{Rs } 6 + \text{Rs } 3 = \text{Rs } \boxed{\phantom{00}}$$

$$\text{Rs } 7 + \text{Rs } 3 = \text{Rs } \boxed{\phantom{00}}$$

$$\text{Rs } 5 + \text{Rs } 4 = \text{Rs } \boxed{\phantom{00}}$$

$$\text{Rs } 9 + \text{Rs } 9 = \text{Rs } \boxed{\phantom{00}}$$

$$\text{Rs } 12 + \text{Rs } 12 = \text{Rs } \boxed{\phantom{00}}$$

**Note :-** Write the table 2 to 12 (2 times) in fair notebook.

# EVS

## 1. Choose the correct options.

- (i) Moving air is called..... .  
(a) Wind (c) bird  
(b) boat (d) kite
- (ii) Air helps boat to..... .  
(a) walk (c) sail  
(b) fly (d) rest
- (iii) Water found below the ground is called..... .  
(a) underground water (c) below water  
(b) down water (d) under water
- (iv) Which of the following vehicle moves on land?  
(a) aeroplane (c) ship  
(b) boat (d) car
- (v) The earth is covered with \_\_\_\_\_.  
(a) Land and water (b) Sky and Land (c) Sky and water (d) Hills and Desert
- (vi) An area of low land between hills and mountain is called \_\_\_\_\_.  
(a) Mountain (b) Hill (c) Valley (d) Desert

## 2. Fill in the blanks.

- (i) Plants and animals need air to..... .  
(ii) We need air to give to things..... .  
(iii) Buses are used to travel on..... .  
(iv) We need water to..... .  
(v) Plants need water to..... .

## 3. Write T for True or F for False.

- (i) We need air to live. ( )  
(ii) Air fills up a balloon when we blow into it. ( )  
(iii) We get most of the water from rain. ( )  
(iv) Ships are used to travel on water. ( )  
(v) A hill is higher than a mountain. ( )  
(vi) A valley is an area of a low land between hills or mountains. ( )

## 4. Answer the following questions.

- (i) Can we feel air?

Ans

---

---

- (ii) What is storm?

Ans

---

---

- (iii) What is an igloo?

Ans

---

---

- (iv) Name any three sources of water.

Ans

---

---



(v) What are means of transport?

Ans

---

---

(vi) Write any two uses of water.

Ans

---

---

(vii) Name the four cardinal directions.

Ans

---

---

(viii) Write any two air transport.

Ans

---

---

5. Write the meaning of following words.

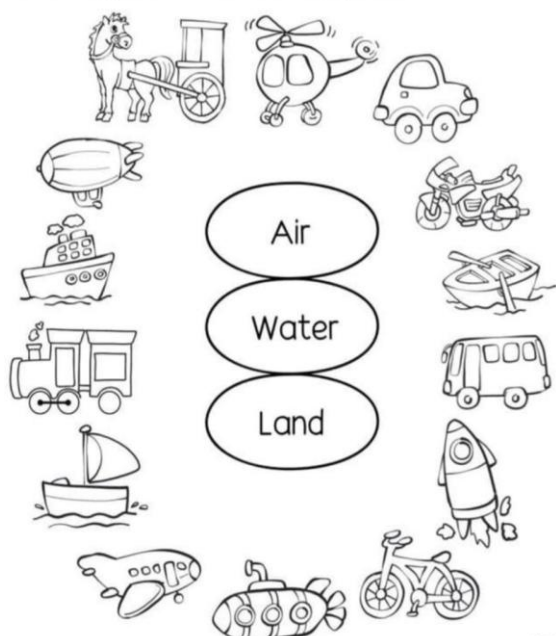
- (i) Breeze - \_\_\_\_\_  
(ii) Sail - \_\_\_\_\_  
(iii) Air - \_\_\_\_\_  
(iv) Spring - \_\_\_\_\_  
(v) Far off - \_\_\_\_\_  
(vi) Transport - \_\_\_\_\_  
(vii) Hill - \_\_\_\_\_  
(viii) Travel - \_\_\_\_\_  
(ix) Appear - \_\_\_\_\_  
(x) Seep - \_\_\_\_\_

6. Do these activities:-

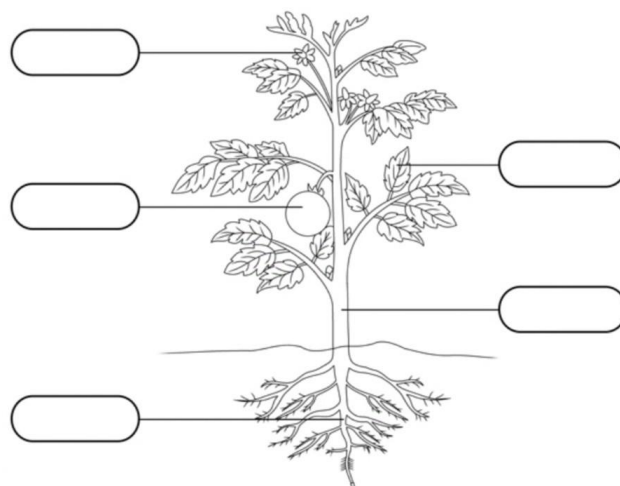
Transport

Color the transportation pictures below.

Where do they move? Match the words with the pictures.



## Label the Parts of a Plant



### Word Box

Flower      Fruit  
Stem      Leaf      Root

# Air

Tick all elements that use air.



Ballons



Table



Fire



Breathing



Tyres



Washing



Bubbles



Playing



Kites

Identify the type of house and complete their name

1. T \_ N \_

2. I \_ L \_ O

3. C \_ R \_ V \_ \_

4. A \_ \_ A R \_ \_ M E \_ T

5. B \_ \_ N G A \_ \_ \_ W

6. H \_ U \_ \_ B \_ A T

7. H \_ \_ T

