



The Wisdom School  
Class 1<sup>st</sup>  
Holiday Homework

**Subject : English**

1. Write the missing letters in the given words:-

With reference to Ch – 1, 2 and Poem (Hello & A Home)

1. K\_\_n\_\_
2. El\_\_ph\_\_n\_\_
3. W\_\_t\_\_h
4. Tr\_\_i\_\_
5. Fr\_\_g
6. B\_\_ll
7. P\_\_tt\_\_r
8. R\_\_of\_\_op
9. Sq\_\_ir\_\_el
10. Br\_\_g\_\_t
11. Gr\_\_u\_\_d
12. Ra\_\_nb\_\_w
13. N\_\_s\_\_
14. B\_\_n\_\_y
15. H\_\_v\_\_
16. Ci\_\_c\_\_e
17. Ro\_\_i\_\_
18. M\_\_v\_\_ng
19. Ti\_\_y
20. Fa\_\_h\_\_r

2. Write the meaning of given words:-

1. Before \_\_\_\_\_
2. Hive \_\_\_\_\_
3. Balcony \_\_\_\_\_
4. Flat \_\_\_\_\_
5. Tiny \_\_\_\_\_

3. Answer the following questions:-

Q1. Where does a robin live?

---

---

Q2. What makes pitter patter sound?

---

---

Q3. What is a bee's house called?

---

---

Q4. What do the squirrels do?

---

---

Q5. What sound does Vihaan hear?

---

---

Q6. How many colours are there in a rainbow?

---

---

Q7. Where are Vihaan's family moving next week?

---

---

Q8. Do you think the speaker feels happy when she sees a rainbow?

---

---


4. Activities:

Make a popsicle with the help of tissue paper:



# Let's read and color

1. The sand is yellow.
2. The water is blue.
3. I saw a sand castle. It's yellow.
4. The boats are brown and black.
5. The beach umbrella is purple and pink.
6. The beach chairs are green and orange.



5. Do the given worksheets:

# Word Scramble



K O B O

-----



N K G I

-----



K L E A

-----



O W B L

-----



B L A L

-----



S H F I

-----



N T E T

-----



F R O U

-----



R B D I

-----



M K L I

-----

# Noun

Look at the picture in each row. Tick the correct box.

 <b>girl</b>	person <input type="checkbox"/>	place <input type="checkbox"/>	thing <input type="checkbox"/>	animal <input type="checkbox"/>
 <b>cake</b>	<input type="checkbox"/>	<input type="checkbox"/>	<input type="checkbox"/>	<input type="checkbox"/>
 <b>bear</b>	<input type="checkbox"/>	<input type="checkbox"/>	<input type="checkbox"/>	<input type="checkbox"/>
 <b>zoo</b>	<input type="checkbox"/>	<input type="checkbox"/>	<input type="checkbox"/>	<input type="checkbox"/>
 <b>nurse</b>	<input type="checkbox"/>	<input type="checkbox"/>	<input type="checkbox"/>	<input type="checkbox"/>
 <b>store</b>	<input type="checkbox"/>	<input type="checkbox"/>	<input type="checkbox"/>	<input type="checkbox"/>

## Subject :Hindi

श्रुतलेख अ से ऊ तक लिखो। (three in one notebook)

Do given worksheet

I.खाली जगह भरो।(स्वर)

\_\_\_\_\_ आ \_\_\_\_\_ ई \_\_\_\_\_ ऊ \_\_\_\_\_

ए \_\_\_\_\_ \_\_\_\_\_ औ \_\_\_\_\_ \_\_\_\_\_

II.खाली जगह भरो।(व्यंजन)

\_\_\_\_\_ ख \_\_\_\_\_ ड

च \_\_\_\_\_ ज

\_\_\_\_\_ ण

त \_\_\_\_\_ न

\_\_\_\_\_ ब \_\_\_\_\_ म

य \_\_\_\_\_

श \_\_\_\_\_

क्ष \_\_\_\_\_



## रंगों के नाम

सही शब्दों से वाक्य पूरा करो -

(काला, पीला, लाल, सफ़ेद, भूरा, नीला, नारंगी)

कौए का रंग \_\_\_\_\_ होता है ।

संतरे का रंग \_\_\_\_\_ होता है ।

दूध का रंग \_\_\_\_\_ होता है ।

टमाटर का रंग \_\_\_\_\_ होता है ।

सूरजमुखी के फूल का रंग \_\_\_\_\_ होता है ।

गौरैया का रंग \_\_\_\_\_ होता है ।

दिन में आसमान \_\_\_\_\_ रंग का होता है।

# वाहनों की सैर

चित्र को देखकर सही नाम की पंक्ति को गाढ़ा करे

कार



साइकिल

तांगा



रेलगाड़ी

नाव



बस

ट्रक



रॉकेट

जहाज़



रिक्शा

स्कूटर



विमान


कोष्ठक से चुनकर शरीर के अंगों के नाम लिखिए।


हाथ, सिर, पाँव, नाक, जीभ




## नीचे दिए गए शब्दों की सहायता से वाक्य पूरे कीजिए।

टोपी, तबला, तोता, चिमटा, पुस्तक, बारिश, गाजर, घर


1. \_\_\_\_\_ हो रही है। 


2. खरगोश \_\_\_\_\_ खा रहा है। 

3. \_\_\_\_\_ पहन कर जाओ। 

4. रोहित \_\_\_\_\_ बजा। 

5. रमन \_\_\_\_\_ चल। 

6. कमल \_\_\_\_\_ पढ़ता है। 

7. \_\_\_\_\_ पेड़ पर बैठा है। 

8. अब्दुल \_\_\_\_\_ ला। 

नीचे दिए गए चित्र को पहचानकर खाली स्थान में उत्तर लिखिए  
और चित्र में रंग भरिए :-

1.

छाया  
शुद्ध  
पेड़  
फल  
मित्र



1. यह एक ..... है ।
2. पेड़ हमें ..... देता है ।
3. यह हवा को ..... करता है ।
4. पेड़ों से हमें तरह-तरह के ..... मिलते हैं ।
5. पेड़ हमारे ..... हैं ।

'उ' और 'ऊ' मात्रा के शब्द छोटकर खाली स्थान भरिए

गुलाब आलू गुड़िया फूल कुरसी भालू  
सूरज कछुआ कबूतर बटुआ

'उ' मात्रा के शब्द






'ऊ' मात्रा के शब्द

# खेल खेल में

निम्न लिखित वर्ग पहेली में नीचे दिए गए शब्दों को खोजकर गोला बनाए

अनार सितार झुमका बादल नीला  
पपीता जामुन नाशपती किताब कछुआ

प	ह	त	वा	सि	ता	र	कु
पी	खी	कि	ता	ब	म	गी	बा
ता	पि	अ	ना	घी	टु	ठा	द
डि	हु	ना	फी	जा	मु	न	ल
ब	क	र	भा	यी	रू	ली	व
शा	छु	षी	ग	झु	म	का	धा
का	आ	सि	ट	ठि	द	नी	ली
ना	श	पा	ती	थी	वा	ला	स

## Subject :Maths

1. Write table dodging 2 to 6 in fair note book of Maths.
2. Activities : -
  - (a) Put one coin in the piggy bank everyday. Count the total money at the end of the month. Write the total amount collected.
  - (b) Count the stairs of your home while going upstairs.  
Count again while going downstairs.  
Write the total number of stairs.  
Example:-Number of Stairs : 15  
Forward Counting : 1, 2, 3, 4,.....15  
Backward counting : 15, 14, 13,.....1

Note: Write all the answers on fair notebook.

3. Do given worksheet:-

### Single Digit Subtraction

Let's subtract the numbers!



$$\begin{array}{r} 6 \\ -3 \\ \hline \\ \hline \end{array}$$

$$\begin{array}{r} 7 \\ -4 \\ \hline \\ \hline \end{array}$$

$$\begin{array}{r} 5 \\ -1 \\ \hline \\ \hline \end{array}$$

$$\begin{array}{r} 8 \\ -2 \\ \hline \\ \hline \end{array}$$

$$\begin{array}{r} 7 \\ -3 \\ \hline \\ \hline \end{array}$$

$$\begin{array}{r} 8 \\ -4 \\ \hline \\ \hline \end{array}$$

$$\begin{array}{r} 9 \\ -1 \\ \hline \\ \hline \end{array}$$

$$\begin{array}{r} 5 \\ -2 \\ \hline \\ \hline \end{array}$$

$$\begin{array}{r} 6 \\ -4 \\ \hline \\ \hline \end{array}$$

$$\begin{array}{r} 6 \\ -2 \\ \hline \\ \hline \end{array}$$

$$\begin{array}{r} 9 \\ -7 \\ \hline \\ \hline \end{array}$$

$$\begin{array}{r} 7 \\ -5 \\ \hline \\ \hline \end{array}$$

$$\begin{array}{r} 5 \\ -3 \\ \hline \\ \hline \end{array}$$

$$\begin{array}{r} 5 \\ -4 \\ \hline \\ \hline \end{array}$$

$$\begin{array}{r} 4 \\ -1 \\ \hline \\ \hline \end{array}$$

$$\begin{array}{r} 9 \\ -7 \\ \hline \\ \hline \end{array}$$



## STATEMENT SUMS ON ADDITION



3 apples and  
4 oranges  
make how  
many fruits?



$$\begin{array}{r} 3 \\ + 4 \\ \hline \end{array}$$



3 green balloons  
and 2 blue balloons  
make how  
many balloons?




3 chocolate ice creams  
and 3 orange ice creams  
make how  
many ice creams?



4 dogs and  
3 rabbits make  
how many  
animals?

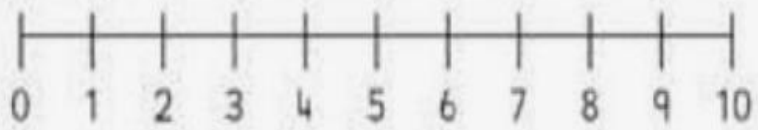


3 ladyfingers and  
5 carrots  
make how  
many vegetables?

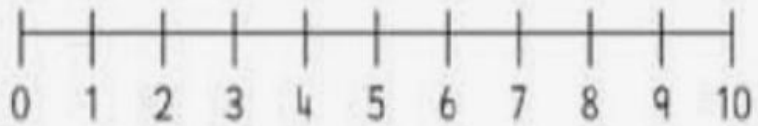


# Number Line Subtraction

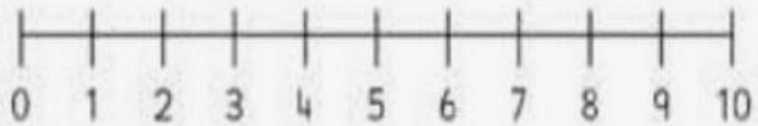
$8 - 1 = \square$



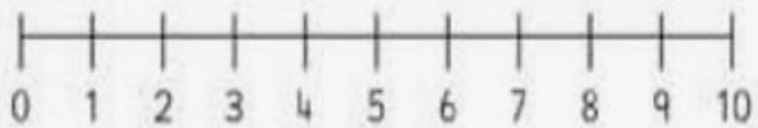
$6 - 3 = \square$



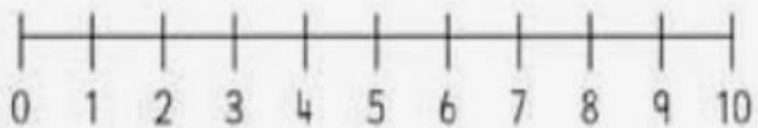
$9 - 7 = \square$



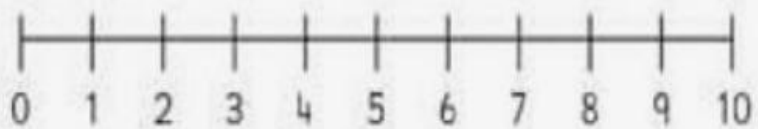
$10 - 6 = \square$



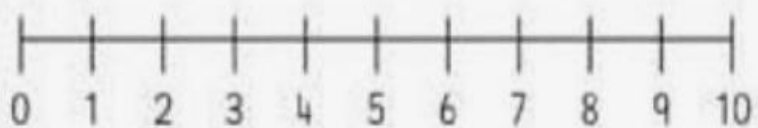
$5 - 2 = \square$



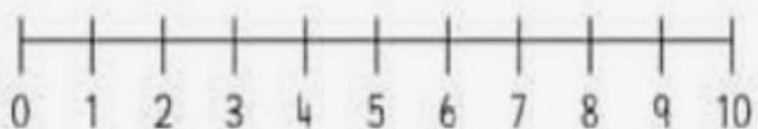
$9 - 4 = \square$



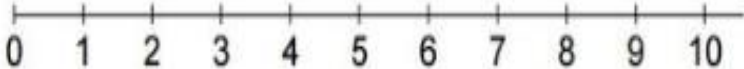
$4 - 2 = \square$

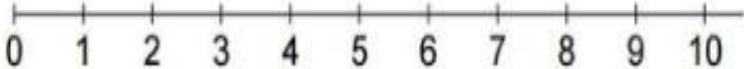


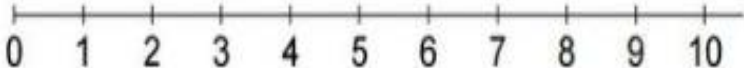
$8 - 7 = \square$

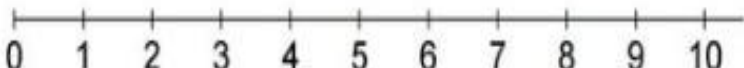


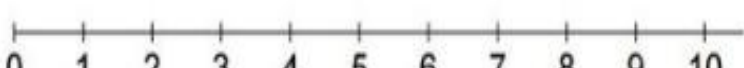
# Addition Number Lines


$2 + 3 = \square$ A horizontal number line with tick marks and labels from 0 to 10.


$7 + 1 = \square$ A horizontal number line with tick marks and labels from 0 to 10.


$1 + 4 = \square$ A horizontal number line with tick marks and labels from 0 to 10.


$6 + 2 = \square$ A horizontal number line with tick marks and labels from 0 to 10.

$2 + 7 = \square$ A horizontal number line with tick marks and labels from 0 to 10.

$3 + 6 = \square$ A horizontal number line with tick marks and labels from 0 to 10.

$1 + 1 = \square$ A horizontal number line with tick marks and labels from 0 to 10.

$5 + 4 = \square$ A horizontal number line with tick marks and labels from 0 to 10.

$1 + 6 = \square$ A horizontal number line with tick marks and labels from 0 to 10.



## STATEMENT SUMS ON SUBTRACTION



There were 6 dogs.  
4 dogs ran away.  
How many dogs were left?




$$\begin{array}{r} 6 \\ - 4 \\ \hline \end{array}$$



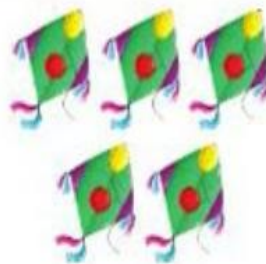
There were 5 butterflies.  
2 butterflies flew away.  
How many butterflies were left?



There were 7 ducks. 4 ducks went away. How many ducks were left?



I had 7 kites.  
I lost 5 kites.  
How many kites were left with me?



There were 4 rats near the bowl. 2 rats ran away. How many rats were left near the bowl?





6. Sibling : \_\_\_\_\_
7. Joint family : \_\_\_\_\_
8. Care : \_\_\_\_\_
9. Love : \_\_\_\_\_
10. Skip : \_\_\_\_\_
11. Nuclear family : \_\_\_\_\_

5. Write the answer of the following questions:

1. How old are you?

---

---

2. Which class do you study in?

---

---

3. How many sense organs do we have?

---

---

4. Name all the sense organs.

---

---

5. Why is family important?

---

---

6. Activities : -

- (1) Introduce yourself (atleast five lines) and send video to your class incharge.
- (2) Make a thank you card for your father.

(3) Make a list of your favorite things.

Favorite	Name
Cartoon	
Game	
Dish	
Fruit	

(4) Place a water bowl or bird feeder on terrace. Click a picture and share to class incharge

7. Do given worksheets:-

# Family Word Search



G	R	A	N	F	A	T	H	E	R	L	Q
G	L	L	F	S	I	S	T	E	R	N	G
D	O	I	U	M	D	G	S	B	L	S	R
C	I	C	V	I	N	O	H	H	B	L	A
M	O	T	H	E	R	G	A	R	A	G	N
F	C	H	I	M	N	E	F	U	T	L	D
G	C	A	E	N	Y	G	A	N	H	B	M
A	C	T	E	N	G	I	T	A	R	O	O
R	O	O	F	O	S	R	H	O	O	A	T
D	A	T	T	I	C	U	E	G	O	F	H
E	F	D	C	E	T	R	R	O	M	M	E
B	R	O	T	H	E	R	O	I	M	H	R

mother

father

grandmother

brother

sister

grandfather

Match the column:

Eat



eye

Feel



leg

Smell



tongue

Walk



ear

Write



teeth

See



nose

Taste



skin

Chew



hand

Run



mouth

Hear



foot